

CA Foundation

Quantitative Aptitude

**Question
Bank**
(6th Edition)



Your Maths Buddy

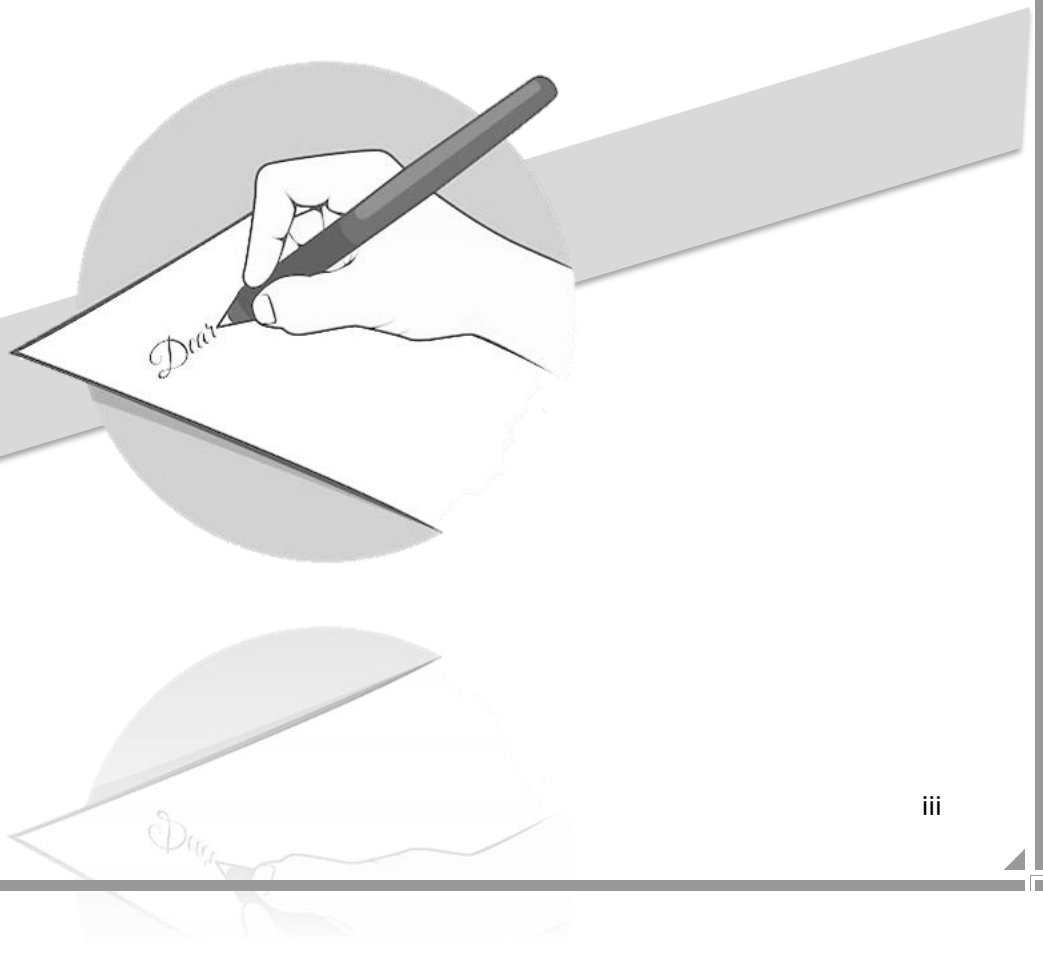
AMAN KHEDIA

Copyright with the Author

Every effort has been made to avoid errors or omission in this publication. In spite of efforts, errors might have crept in. Any mistake, error or discrepancy noted may be brought to our notice, which shall be dealt with suitably. It is notified that neither the publisher nor the author will be responsible for any damage or loss of action to any person, of any kind, in any manner, therefrom.

This book is sold subject to the condition that it shall not, by the way of trade or otherwise, be lent, resold, hired out, or otherwise circulated without the publisher's prior written consent in any form of binding or cover other than that in which it is published and without a similar condition including this condition being imposed on the subsequent purchaser and without limiting the rights under copyright reserved above, no part of this publication may be reproduced, stored in or introduced into retrieval system, or transmitted in any form or by any means (electronic, mechanical, photocopying, recording or otherwise), without the prior written permission of both the copyright owner and the publisher of this book.

Dedicated To
My Mother
Seema Khedia



Index

No.	Chapter	Page No.
Part A: Business Mathematics		
1A.	Ratio Proportions	1A.1-1A.6
1B.	Indices	1B.1-1B.8
1C.	Logarithm	1C.1-1C.6
2.	Equations	2.1-2.10
3.	Linear Inequalities	3.1-3.8
4.	Mathematics of Finance	4.1-4.12
5.	Permutations & Combinations	5.1-5.8
6.	Sequence & Series	6.1-6.10
7A.	Set	7A.1-7A.8
7B.	Relations & Function	7B.1-7B.6
8A.	Differential Calculus	8A.1-8A.8
8B.	Integral Calculus	8B.1-8B.8
8C.	Limits & Continuity	8C.1-8C.4
Part B: Statistics		
9A.	Statistical Description of Data	9A.1-9A.8
9B.	Sampling	9B.1 -9B.4
10A.	Measure of Central Tendency	10A.1-10A.8

10B.	Measure of Dispersion	10B.1-10B.10
11A.	Correlation Analysis	11A.1-11A.8
11B.	Regression Analysis	11B.1-11B.8
12.	Probability	12.1-12.12
13.	Theoretical Distributions	13.1-13.8
14.	Index Numbers	14.1-14.12
Part C: Logical Reasoning		
15A.	Number Series	15A.1-15A.2
15B.	Coding and Decoding	15B.1-15B.2
15C.	Odd Man Out	15C.1-15C.2
16.	Direction Sense Test	16.1-16.6
17.	Seating Arrangements	17.1-17.6
18.	Blood Relations	18.1-18.6



1A

Ratios & Proportion

Business Mathematics

Exercise

Basic Level-1

- The ratio of two quantities is 3: 4. If the antecedent is 15, the consequent is
(a) 16 (b) 60 (c) 22 (d) 20
- The ratio of the quantities is 5: 7. If the consequent of its inverse ratio is 5, the antecedent is
(a) 5 (b) $\sqrt{5}$ (c) 7 (d) none of these

Basic Level-2

- If $a : b = 3 : 4$, the value of $(2a + 3b) : (3a + 4b)$ is
(a) 54: 25 (b) 8: 25 (c) 17: 24 (d) none of these
- If $x : y = 3 : 4$, the value of $x^2y + xy^2 : x^3 + y^3$ is
(a) 13: 12 (b) 12: 13 (c) 21: 31 (d) none of these
- If $p : q$ is the sub-duplicate ratio of $p - x^2 : q - x^2$ then x^2 is
(a) $\frac{p}{p+q}$ (b) $\frac{q}{p+q}$ (c) $\frac{pq}{p+q}$ (d) none of these
- If $2s : 3t$ is the duplicate ratio of $2s - p : 3t - p$ then
(a) $p^2 = 6st$ (b) $p = 6st$ (c) $2p = 3st$ (d) none of these
- If $p : q = 2 : 3$ and $x : y = 4 : 5$, then the value of $5px + 3qy : 10px + 4qy$ is
(a) 71: 82 (b) 27: 28 (c) 17: 28 (d) none of these

Types of Ratios

- The inverse ratio of 11: 15 is
(a) 15: 11 (b) $\sqrt{11} : \sqrt{15}$ (c) 121: 225 (d) none of these
- The ratio compounded of 2: 3, 9: 4, 5: 6 and 8: 10 is
(a) 1: 1 (b) 1: 5 (c) 3: 8 (d) none of these
- The duplicate ratio of 3: 4 is
(a) $\sqrt{3} : 2$ (b) 4: 3 (c) 9: 16 (d) none of these
- The sub-duplicate ratio of 25: 36 is
(a) 6: 5 (b) 36: 25 (c) 50: 72 (d) 5: 6
- The triplicate ratio of 2: 3 is
(a) 8: 27 (b) 6: 9 (c) 3: 2 (d) none of these
- The sub-triplicate ratio of 8: 27 is
(a) 27: 8 (b) 24: 81 (c) 2: 3 (d) none of these
- The ratio compounded of 4: 9 and the duplicate ratio of 3: 4 is
(a) 1: 4 (b) 1: 3 (c) 3: 1 (d) none of these
- The ratio compounded of 4: 9, the duplicate ratio of 3: 4, the triplicate ratio of 2: 3 and 9: 7 is
(a) 2: 7 (b) 7: 2 (c) 2: 21 (d) none of these



16. The ratio compounded of duplicate ratio of 4: 5, triplicate ratio of 1: 3, sub duplicate ratio of 81: 256 and sub-triplicate ratio of 125: 512 is
 (a) 4: 512 (b) 3: 32 (c) 1: 12 (d) none of these

Word Problems

17. Two numbers are in the ratio 2: 3. If 4 be subtracted from each, they are in the ratio 3: 5. The numbers are
 (a) (16, 24) (b) (4, 6) (c) (2, 3) (d) none of these
18. The angles of a triangle are in ratio 2 : 7 : 11. The angles are
 (a) (20°, 70°, 90°) (b) (30°, 70°, 80°)
 (c) (18°, 63°, 99°) (d) none of these
19. Division of Rs. 324 between X and Y is in the ratio 11: 7. X & Y would get Rupees
 (a) (204, 120) (b) (200, 124)
 (c) (180, 144) (d) none of these
20. Anand earns Rs. 80 in 7 hours and Pramod Rs. 90 in 12 hours. The ratio of their earnings is
 (a) 30: 21 (b) 23: 12 (c) 8: 9 (d) none of these
21. The ratio of two numbers is 7: 10 and their difference is 105. The numbers are
 (a) (200, 305) (b) (185, 290)
 (c) (245, 350) (d) none of these
22. P, Q and R are three cities. The ratio of average temperature between P and Q is 11: 12 and that between P and R is 9: 8. The ratio between the average temperature of Q and R is
 (a) 22:27 (b) 27:22 (c) 32:33 (d) none of these
23. The number which when subtracted from each of the terms of the ratio 19: 31 reducing it to 1: 4 is
 (a) 15 (b) 5 (c) 1 (d) none of these
24. Daily earnings of two persons are in the ratio 4:5 and their daily expenses are in the ratio 7: 9 If each save Rs. 50 per day, their daily earnings in Rs. are
 (a) (40, 50) (b) (50, 40) (c) (400, 500) (d) none of these
25. The ratio between the speeds of two trains is 7: 8. If the second train runs 400 kms. in 5 hours, the speed of the first train is
 (a) 10 Km/hr (b) 50 Km/hr (c) 70 Km/hr (d) none of these

Advanced Problems

26. If 10% of x is the same as 20% of y, x:y is equal to
 (a) 1:2 (b) 2:1 (c) 5:1 (d) 10:1
27. What must be added to each term of the ratio 7:13 so that the ratio becomes 2:3?
 (a) 1 (b) 2 (c) 3 (d) 5
28. If a carton containing a dozen mirrors is dropped, which of the following cannot be the ratio of broken mirrors to unbroken mirrors
 (a) 2:1 (b) 3:1 (c) 3:2 (d) 7:5
29. The incomes of A & B are in the ratio 3:2 and their expenditures in the ratio 5:3. If each saves Rs. 1000, A's income is
 (a) Rs.3000
 (b) Rs.4000
 (c) Rs.6000
 (d) Rs.9000



30. Rs. 680 has been divided among A, B, C such that A gets $\frac{2}{3}$ of what B gets and B $\frac{1}{4}$ of what c gets. Then B's Share is
 (a) 60
 (b) 80
 (c) 120
 (d) 180
31. 729 ml of a mixture contains milk and water in the ratio 7:2. How much more water is to be added to get a new mixture containing milk and water in the ratio of 7:3?
 (a) 60 ml
 (b) 70 ml
 (c) 81 ml
 (d) 90 ml
32. The prices of scooter & moped are in the ratio 9:5. If a scooter costs Rs. 6800 more than a moped, the price of scooter is
 (a) 17000
 (b) 13600
 (c) 15300
 (d) None
33. In an express train, the passengers travelling in AC Sleeper Class, first class and 2nd class are in the ratio 1:2:7 and rate per each class is in the ratio 5:4:2. If the total income from this train is Rs. 54,000, then the income of railways from Ac Sleeper Class is
 (a) Rs.16000
 (b) Rs.10000
 (c) Rs.14000
 (d) Rs.2000
34. The sum of present ages of father and son is 68 years. Eight years ago, the ratio of their age was 12:1. What will be the ratio of their ages 4 years hence?
 (a) 13:2
 (b) 15:4
 (c) 14:3
 (d) 16:3
35. An alloy contains tin & copper in the ratio 4:5 If tin has 20% impurity and copper has 58%, then average impurity percentage is
 (a) 20%
 (b) 41%
 (c) 35%
 (d) 38%

Answer Sheet

1.	d	2.	c	3.	b	4.	b	5.	c	6.	a	7.	c	8.	a	9.	a	10.	c
11.	d	12.	a	13.	c	14.	a	15.	c	16.	d	17.	a	18.	c	19.	d	20.	D
21.	c	22.	b	23.	a	24.	d	25.	C	26.	B	27.	D	28.	C	29.	C	30.	C
31.	C	32.	C	33.	B	34.	B	35.	B										



PROPORTION

Basic Level-1

1. The fourth proportional to 4, 6, 8 is
 (a) 12 (b) 32 (c) 48 (d) none of these
2. The third proportional to 12, 18 is
 (a) 24 (b) 27 (c) 36 (d) none of these
3. The mean proportional between 25, 81 is
 (a) 40 (b) 50 (c) 45 (d) none of these
4. The fourth proportional to $2a$, a^2 , c is
 (a) $ac/2$ (b) ac (c) $2/ac$ (d) none of these
5. If four numbers $\frac{1}{2}$, $\frac{1}{3}$, $\frac{1}{5}$, $\frac{1}{x}$ are proportional then x is
 (a) $\frac{6}{5}$ (b) $\frac{5}{6}$ (c) $\frac{15}{2}$ (d) none of these
6. The mean proportional between $12x^2$ and $27y^2$ is
 (a) $18xy$ (b) $81xy$ (c) $8xy$ (d) none of these
7. 12, 16, *, 20 are in proportion. Then * is
 (a) 25 (b) 14 (c) 15 (d) none of these
8. 4, *, 9, $13\frac{1}{2}$ are in proportion. Then * is
 (a) 6 (b) 8 (c) 9 (d) none of these
9. The mean proportional between 1.4 gms and 5.6 gms is
 (a) 28 gms (b) 2.8 gms (c) 3.2 gms (d) none of these

BASIC LEVEL-2

10. If $A = B/2 = C/5$, then A : B : C is
 (a) 3 : 5 : 2 (b) 2 : 5 : 3 (c) 1 : 2 : 5 (d) none of these
11. If $a/3 = b/4 = c/7$, then $a + b + c/c$ is
 (a) 1 (b) 3 (c) 2 (d) none of these
12. If $\frac{a}{4} = \frac{b}{5} = \frac{c}{9}$ then $\frac{a+b+c}{c}$ is
 (a) 4 (b) 2 (c) 7 (d) none of these
13. If $p/q = r/s = 2.5/1.5$, the value of $ps : qr$ is
 (a) $3/5$ (b) 1:1 (c) $5/3$ (d) none of these
14. If $x : y = z : w = 2.5 : 1.5$, the value of $(x + z) / (y + w)$ is
 (a) 1 (b) $3/5$ (c) $5/3$ (d) none of these
15. If $(5x - 3y) / (5y - 3x) = \frac{3}{4}$, the value of $x : y$ is
 (a) 2 : 9 (b) 7 : 2 (c) 7 : 9 (d) none of these
16. If $A : B = 3 : 2$ and $B : C = 3 : 5$, then A : B : C is
 (a) 9 : 6 : 10 (b) 6 : 9 : 10 (c) 10 : 9 : 6 (d) none of these
17. If $x/2 = y/3 = z/7$, then the value of $(2x - 5y + 4z) / 2y$ is
 (a) $6/23$ (b) $23/6$ (c) $3/2$ (d) $17/6$
18. If $x : y = 2 : 3$, $y : z = 4 : 3$ then $x : y : z$ is
 (a) 2 : 3 : 4 (b) 4 : 3 : 2 (c) 3 : 2 : 4 (d) none of these



Properties of Proportions

19. If $x/y = z/w$, implies $y/x = w/z$, then the process is called
 (a) Dividendo (b) Componendo (c) Alternendo (d) none of these
20. If $p/q = r/s = p - r/q - s$, the process is called
 (a) Subtrahendo (b) Addendo (c) Invertendo (d) none of these
21. If $a/b = c/d$, implies $(a + b) / (a-b) = (c+d)/(c-d)$, the process is called
 (a) Componendo (b) Dividendo
 (c) Componendo and Dividendo (d) none of these
22. If $u/v = w/p$, then $(u-v)/(u+v) = (w-p)/(w+p)$. The process is called
 (a) Invertendo (b) Alternendo (c) Addendo (d) none of these
23. If $\frac{a}{4} = \frac{b}{5}$ then
 (a) $\frac{a+4}{a-4} = \frac{b-5}{b+5}$ (b) $\frac{a+4}{a-4} = \frac{b+5}{b-5}$ (c) $\frac{a-4}{a+4} = \frac{b+5}{b-5}$ (d) none of these

Word Problem

24. Division of Rs. 750 into 3 parts in the ratio 4: 5: 6 is
 (a) (200, 250, 300) (b) (250, 250, 250) (c) (350, 250, 150) (d) 8: 12: 9
25. The sum of the ages of 3 persons is 150 years. 10 years ago, their ages were in the ratio 7: 8: 9. Their present ages are
 (a) (45, 50, 55) (b) (40,60,50) (c) (35, 45, 70) (d) none of these
26. The numbers 14, 16, 35, 42 are not in proportion. The fourth term for which they will be in proportion is
 (a) 45 (b) 40 (c) 32 (d) none of these
27. Two numbers are in the ratio 3: 4; if 6 be added to each terms of the ratio, then the new ratio will be 4: 5, then the numbers are
 (a) 14, 20 (b) 17, 19 (c) 18 and 24 (d) none of these

Miscellaneous Problems

28. If $a: b = 4: 1$ then $\sqrt{\frac{a}{b}} + \sqrt{\frac{b}{a}}$ is
 (a) $5/2$ (b) 4 (c) 5 (d) none of these
29. If $\frac{x}{b+c-a} = \frac{y}{c+a-b} = \frac{z}{a+b-c}$ then $(b-c)x + (c-a)y + (a-b)z$ is
 (a) 1 (b) 0 (c) 5 (d) none of these
30. The 4th term for which the numbers 14,16,35,32 will be in proportion is
 (a) 45 (b) 40 (c) 32 (d) None
31. Find the third proportional to 2.4 kg & 9.6 kg
 (a) 34.8 kg (b) 38.4 kg (c) 36.8 kg (d) 35.8 kg
32. The fourth proportional to $2a, a^3, c$ is:
 (a) $a^2c/2$ (b) ac (c) $2/ac$ (d) None
33. The fourth proportional to $(a^2 - ab + b^2), (a^3 + b^3)$ and $(a - b)$ is equal to
 (a) $a^2 + b^3$ (b) $a^2 - b^2$ (c) 1 (d) None
34. Find 2 numbers such that mean proportional between them is 18 & third proportional to them is 144.
 (a) 9, 36 (b) 29, 56 (c) 18, 72 (d) None



35. If a,b,c,d,e are in continued proportion then abde is equal to
 (a) a^4 (b) b^4 (c) c^4 (d) d^4
36. If a:b = c:d = e:f = 2:5, Then value of $\frac{4a + 15c + 29e}{4b + 15d + 29f}$ is
 (a) 2:4 (b) 1:5 (c) 4:5 (d) 2:5
37. If $\frac{\sqrt{2-x} + \sqrt{2+x}}{\sqrt{2-x} - \sqrt{2+x}} = 3$, then x is equal to
 (a) -6/5 (b) -5/6 (c) -1/5 (d) 6/5
38. If $\frac{a^3+3a}{3a^2+1} = \frac{91}{37}$ then 'a' equal
 (a) 8 (b) 7 (c) 6 (d) None

Answer Sheet

1.	a	2.	b	3.	c	4.	a	5.	c	6.	a	7.	c	8.	a	9.	b	10.	c
11.	c	12.	b	13.	b	14.	c	15.	d	16.	a	17.	d	18.	d	19.	d	20.	A
21.	c	22.	d	23.	b	24.	a	25.	a	26.	b	27.	c	28.	a	29.	b	3.	B
31.	B	32.	A	33.	B	34.	A	35.	C	36.	D	37.	A	38.	b				



1B Indices

Business Mathematics

Exercise

Basic Level-1

- $4x^{-1/4}$ is expressed as
 (a) $-4x^{1/4}$ (b) x^{-1} (c) $4/x^{1/4}$ (d) none of these
- The value of $8^{1/3}$ is
 (a) 2 (b) 2 (c) 2 (d) none of these
- The value of $2 \times (32)^{1/5}$ is
 (a) 2 (b) 10 (c) 4 (d) none of these
- The value of $4/(32)^{1/5}$ is
 (a) 8 (b) 2 (c) 4 (d) none of these
- The value of $(8/27)^{1/3}$ is
 (a) $2/3$ (b) $3/2$ (c) $2/9$ (d) none of these
- The value of $2(256)^{-1/8}$ is
 (a) 1 (b) 2 (c) $1/2$ (d) none of these
- $2^{1/4}, 4^{1/4}$ is equal to
 (a) a fraction (b) a positive integer
 (c) $1/2$ (d) none of these
- $\left(\frac{81x^4}{y^{-8}}\right)^{\frac{1}{4}}$ has simplified value equal to
 (a) xy^2 (b) x^2y (c) $9xy^2$ (d) none of these
- The value of $\left(\frac{243}{32}\right)^{-4/5}$ is:
 (a) $18/16$ (b) $16/81$ (c) $4/9$ (d) $9/4$
- The value of $[(10)^{150} \div (10)^{146}]$ is:
 (a) 1000 (b) 10000 (c) 100000 (d) $(10)^6$
- Simplification of $9^{x+3} = 27^{x-1}$ gives:
 (a) 8 (b) 7 (c) 9 (d) none of these
- If $(25)^{7.5} \times (5)^{2.5} \div (125)^{1.5} = 5^x$, then the value of x is:
 (a) 8.5 (b) 13 (c) 16 (d) none of these

Basic Level-2

- If $\frac{9^n \times 3^5 \times 27^3}{3 \times 81^4} = 27$, then the value of n is:
 (a) 0 (b) 2 (c) 3 (d) 4
- $64^{-1/2} - (-32)^{-4/5} = x$, then the value of x is:
 (a) $1/8$ (b) $3/8$ (c) $1/16$ (d) $3/16$



15. If $2^x - 2^{x-1} = 4$, then the value of x^x is:
 (a) 27 (b) 4 (c) 1 (d) 256
16. If $\left(\frac{x^a}{x^b}\right)^{(a+b)} \cdot \left(\frac{x^b}{x^c}\right)^{(b+c)} \cdot \left(\frac{x^c}{x^a}\right)^{(c+a)} = x$, then the value of x is:
 (a) 0 (b) x^{abc} (c) x^{a+b+c} (d) 1
17. If $\left(\frac{x^b}{x^c}\right)^{(b+c-a)} \cdot \left(\frac{x^c}{x^a}\right)^{(c+a-b)} \cdot \left(\frac{x^a}{x^b}\right)^{(a+b-c)} = x$, then the value of x is:
 (a) x^{abc} (b) 1 (c) $x^{ab+bc+ca}$ (d) x^{b+c+a}
18. If $2^x = 4^y = 8^z$ and $\left(\frac{1}{2x} + \frac{1}{4y} + \frac{1}{6z}\right) = \frac{24}{7}$, the value of z is:
 (a) $\frac{7}{16}$ (b) $7/32$ (c) $7/48$ (d) $7/64$
19. If $a^x = b$, $b^y = c$, $c^z = a$, then the value of xyz is:
 (a) 1 (b) -1 (c) 0 (d) 2
20. If $2^x = 3^y = 6^{-z}$ then value of $\left(\frac{1}{x} + \frac{1}{y} + \frac{1}{z}\right)$ is:
 (a) 0 (b) 1 (c) $3/2$ (d) $-(1/2)$

Miscellaneous Problems

21. If $(a/b)^{x-3} = (b/a)^{x-3}$, Then x is equal to
 (a) 1 (b) $\frac{1}{2}$ (c) $7/2$ (d) 3
22. The value of x for which $2^{x+4} - 2^{x+2} = 6$
 (a) 0 (b) -2 (c) 2 (d) -1
23. If $9^x - (10 * 3^x) + 9 = 0$, then x is equal to:
 (a) 2 or 0 (b) 1 or 3 (c) 1 or 9 (d) 1 or -2
24. The Value of $\frac{3^{(19+n)} * 27^{(2n-7)}}{3^{7n}}$ is
 (a) $1/3$ (b) $9/13$ (c) $1/9$ (d) $2/3$
25. If m & n are whole numbers such that $m^n = 121$, then the value of $(m-1)^{n+1}$ is
 (a) 1 (b) 10 (c) 121 (d) 1000
26. $\sqrt{x^3 \sqrt{x^3 \sqrt{x^3}}}$ is
 (a) x^7 (b) x^8 (c) $x^{21/8}$ (d) x^9
27. Value of $(a^{1/8} + a^{-1/8})(a^{1/8} - a^{-1/8})(a^{1/4} + a^{-1/4})(a^{1/2} + a^{-1/2})$ is
 (a) $a + (1/a)$ (b) $a^2 + (1/a^2)$ (c) $a - (1/a)$ (d) $a^2 - (1/a^2)$
28. $\sqrt{11 + 4\sqrt{7}} - \sqrt{11 - 4\sqrt{7}} =$
 (a) 8 (b) 2 (c) 6 (d) 4
29. If $x = p^{1/3} - p^{-1/3}$, then
 (a) $x^3 + 3x = p + (1/p)$ (b) $x^3 + 3x = p - (1/p)$
 (c) $x^3 + 3x = p + 1$ (d) None
30. If $(5.678)^x = (0.5678)^y = 10^z$ then
 (a) $\frac{1}{x} - \frac{1}{y} + \frac{1}{z} = 1$ (b) $\frac{1}{x} - \frac{1}{y} - \frac{1}{z} = 0$ (c) $\frac{1}{x} - \frac{1}{y} + \frac{1}{z} = -1$ (d) None



31. If $3^a = 5^b = (75)^c$ then the value of $ab - c(2a + b)$ reduces to
 (a) 1 (b) 0 (c) 3 (d) 5
32. If $a = xy^{m-1}$, $b = xy^{n-1}$, $c = xy^{p-1}$ then $a^{n-p} * c^{m-n}$ reduces to
 (a) 1 (b) -1 (c) 0 (d) None
33. On simplification $\left[\frac{x^{ab}}{x^{(a^2+b^2)}}\right]^{(a+b)} * \left[\frac{x^{(b^2+c^2)}}{x^{bc}}\right]^{(b+c)} * \left[\frac{x^{ca}}{x^{(c^2+a^2)}}\right]^{(c+a)}$
 (a) x^{-2a^3} (b) x^{2a^3} (c) $x^{-2(a^3+b^3+c^3)}$ (d) $x^{2(a^3+b^3+c^3)}$
34. If $x = 3^{1/3} + 3^{-1/3}$, then $3x^3 - 9x$ is
 (a) 15 (b) 10 (c) 12 (d) None
35. Show that $\left(\frac{x^b}{x^c}\right)^{1/bc} * \left(\frac{x^c}{x^a}\right)^{\frac{1}{ca}} * \left(\frac{x^a}{x^b}\right)^{1/ab}$ reduces to
 (a) -1 (b) 0 (c) 1 (d) None
36. If $x = \sqrt{7 + 4\sqrt{3}}$, then $x + \frac{1}{x} =$
 (a) 4 (b) 6 (c) 3 (d) 2
37. If $a^b = b^a$ then the value of $\left(\frac{a}{b}\right)^{\frac{a}{b}} - \frac{a}{a^b-1}$ reduces to
 (a) a (b) b (c) 0 (d) None

Answer Sheet

1.	c	2.	c	3.	c	4.	b	5.	a	6.	a	7.	b	8.	d	9.	b	10.	b
11.	c	12.	b	13.	c	14.	c	15.	a	16.	d	17.	b	18.	c	19.	a	20.	a
21.	a	22.	d	23.	a	24.	c	25.	d	26.	c	27.	b	28.	d	29.	b	30.	b
31.	b	32.	a	33.	a	34.	b	35.	c	36.	a	37.	c						



Miscellaneous Question Bank

Chapter

M

isc.

Basic

Note: Below are Question Based on Basic Formulas Doesn't Relates to any Specific Chapters So we will Cover it Separately these types of questions are frequently asked in Exam.

1. If $x = 4^{\frac{1}{3}} + 4^{-\frac{1}{3}}$ prove that $4x^3 - 12x$ is given by
 (a) 12 (b) 13 (c) 15 (d) 17
2. If $x = 5^{\frac{1}{3}} + 5^{-\frac{1}{3}}$ prove that $5x^3 - 15x$ is given by
 (a) 25 (b) 26 (c) 27 (d) 30
3. If $a^b = b^a$, then the value of $\left(\frac{a}{b}\right)^{\frac{a}{b}} - a^{\frac{a}{b}-1}$ reduces to
 (a) a (b) b (c) 0 (d) None
4. If $m = b^x, n = b^y$ and $(m^y n^x) = b^2$ the value of xy is given by
 (a) -1 (b) 0 (c) 1 (d) None
5. If $a = xy^{m-1} b = xy^{n-1}, c = xy^{p-1}$ then the value of $a^{n-p} \times b^{p-m} \times c^{m-n}$ reduces to
 (a) 1 (b) -1 (c) 0 (d) None
6. If $a = x^{n+p} y^m, b = x^{p+m} y^n, c = x^{m+n} y^p$ then the value of $a^{n-p} \times b^{p-m} \times c^{m-n}$ reduces to
 (a) 0 (b) 1 (c) -1 (d) None
7. If $a = \sqrt[3]{\sqrt{2}+1} - \sqrt[3]{\sqrt{2}-1}$ then the value of $a^3 + 3a - 2$ is
 (a) 3 (b) 0 (c) 2 (d) 1
8. If $a = x^{\frac{1}{3}} + x^{-\frac{1}{3}}$ then $a^3 - 3a$ is
 (a) $x + x^{-1}$ (b) $x - x^{-1}$ (c) $2x$ (d) 0
9. If $a = 3^{\frac{1}{4}} + 3^{-\frac{1}{4}}$ and $b = 3^{\frac{1}{4}} - 3^{-\frac{1}{4}}$ then the value of $3(a^2 + b^2)^2$ is
 (a) 67 (b) 65 (c) 64 (d) 62
10. If $x = \sqrt{3} + \frac{1}{\sqrt{3}}$ and $y = \sqrt{3} - \frac{1}{\sqrt{3}}$ then $x^2 - y^2$ is
 (a) 5 (b) $\sqrt{3}$ (c) $\frac{1}{\sqrt{3}}$ (d) 4
11. If $a = \frac{4\sqrt{6}}{\sqrt{2}+\sqrt{3}}$ then the value of $\frac{a+2\sqrt{2}}{a-2\sqrt{2}} + \frac{a+2\sqrt{3}}{a-2\sqrt{3}}$ is given by
 (a) 1 (b) -1 (c) 2 (d) -2
12. If $P + \sqrt{3}Q + \sqrt{5}R + \sqrt{15}S = \frac{1}{1+\sqrt{3}+\sqrt{5}}$ then the value of P is
 (a) $\frac{7}{11}$ (b) $\frac{3}{11}$ (c) $-\frac{1}{11}$ (d) $-\frac{2}{11}$
13. If $a = 3 + 2\sqrt{2}$ then the value of $a^{\frac{1}{2}} + a^{-\frac{1}{2}}$ is
 (a) $\sqrt{2}$ (b) $-\sqrt{2}$ (c) $2\sqrt{2}$ (d) $-2\sqrt{2}$
14. If $a = 3 + 2\sqrt{2}$ then the value of $a^{\frac{1}{2}} - a^{-\frac{1}{2}}$ is
 (a) $2\sqrt{2}$ (b) 2 (c) -2 (d) $-2\sqrt{2}$



15. If $a = \frac{1}{2}(5 - \sqrt{21})$ then the value of $a^3 + a^{-3} - 5a^2 - 5a^{-2} + a + a^{-1}$ is
 (a) 0 (b) 1 (c) 5 (d) -1
16. If $a = \sqrt{\frac{7+4\sqrt{3}}{7-4\sqrt{3}}}$ then the value of $[a(a - 14)]^2$ is
 (a) 14 (b) 7 (c) 2 (d) 1
17. If $a = 3 - \sqrt{5}$ then the value of $a^4 - a^3 - 20a^2 - 16a + 24$ is
 (a) 10 (b) 14 (c) 0 (d) 15
18. If $a = \frac{\sqrt{3}+\sqrt{2}}{\sqrt{3}-\sqrt{2}}$ then the value of $2a^4 - 21a^3 + 12a^2 - a + 1$ is
 (a) 21 (b) 1 (c) 12 (d) None
19. The square root of $3 + \sqrt{5}$
 (a) $\sqrt{\frac{5}{2}} + \sqrt{\frac{1}{2}}$ (b) $-\left(\sqrt{\frac{5}{2}} + \sqrt{\frac{1}{2}}\right)$ (c) Both the above (d) None
20. If $x = \sqrt{2 - \sqrt{2 - \sqrt{2}}} \dots \alpha$ the value of x is given by
 (a) -2 (b) 1 (c) 2 (d) 0
21. If $a = \frac{\sqrt{3}+\sqrt{2}}{\sqrt{3}-\sqrt{2}}$, $b = \frac{\sqrt{3}-\sqrt{2}}{\sqrt{3}+\sqrt{2}}$ then the value of a + b is
 (a) 10 (b) 100 (c) 98 (d) 99
22. The square root of $x + \sqrt{x^2 - y^2}$ is given by
 (a) $\frac{1}{2}[\sqrt{x + y} + \sqrt{x - y}]$ (b) $\frac{1}{2}[\sqrt{x + y} - \sqrt{x - y}]$
 (c) $[\sqrt{x + y} + \sqrt{x - y}]$ (d) $[\sqrt{x + y} - \sqrt{x - y}]$
23. The square root of $11 - \sqrt{120}$ is given by
 (a) $\sqrt{6} + \sqrt{5}$ (b) $\sqrt{6} - \sqrt{5}$ (c) $2\sqrt{3} - 3\sqrt{2}$ (d) $2\sqrt{3} + 3\sqrt{2}$

Answer Sheet

1.	d	2.	b	3.	c	4.	c	5.	a	6.	b	7.	b	8.	a	9.	c	10.	d
11.	c	12.	a	13.	c	14.	b	15.	a	16.	d	17.	c	18.	b	19.	c	20.	a
21.	a	22.	a	23.	b														



Miscellaneous Word Problems

- P and Q started a business investing Rs.85,000 and Rs.15,000 respectively. In what ratio the profit earned after 2 years be divided between P and Q respectively?
(a) 3: 4 (b) 3: 5
(c) 15: 23 (d) 17: 23
- Anand and Deepak started a business investing Rs.22,500 and Rs.35,000 respectively. Out of a total profit of Rs.13,800, Deepak's share is
(a) Rs.5,400 (b) Rs.7,200
(c) Rs.8,400 (d) Rs.9,600
- A, B, C enter into a partnership investing Rs.35,000, Rs.45,000 and Rs.55,000 respectively. The respective shares of A, B, C in an annual profit of Rs.40,500 are:
(a) Rs.10,500, Rs.13,500, Rs.16,500
(b) Rs.11,500, Rs.13,000, Rs.16,000
(c) Rs.11,500, Rs.14,000, Rs.15,500
(d) Rs.11,500, Rs.12,500, Rs.16,500
- Reena and Shaloo are partner in a business. Reena invests Rs.35,000 for 8 months and Shaloo invests Rs.42,000 for 10 months. Out of a profit of Rs.31,570, Reena's share is:
(a) Rs.9471 (b) Rs.12628
(c) Rs.18040 (d) Rs.18942
- Kanchan started a business investing Rs.9000. After five months, Sameer joined with a capital of Rs.8000. If at the end of the year, they earn a profit of Rs.6970, then what will be the share of Sameer in the profit?
(a) Rs.1883.78 (b) Rs.2380
(c) Rs.3690 (d) Rs.3864
- Simran started a software business by investing Rs.50,000. After six months, Nanda joined her with capital of Rs.80,000. After three years, they earned a profit of Rs.24,500. What was Simran's share in the profit?
(a) Rs.9423 (b) Rs.10500
(c) Rs.12,500 (d) Rs.14,000
- A and B started a business in partnership by investing Rs.20,000 and Rs.15,000 respectively. After six months, C joined them with Rs.20000. what will be B's share in the total profit of Rs.20,000 earned at the end of 2 years at the end of 2 years from the starting of the business?
(a) Rs.7500 (b) Rs.9000
(c) Rs.9500 (d) 10,000
- Aman started a business investing Rs.70000. Rakhi joined him after six months with an amount of Rs.1,05,000 and Sagar joined them with Rs.1.4 lakhs after another six months. The amount of profit earned should be distributed in what ratio among six months. The amount profit earned should be distributed in what ratio among Aman, Rakhi, and Sagar respectively, 3 years after Aman started the business?
(a) 7:6:10 (b) 12:15:16
(c) 42:45:56 (d) none of these



9. A began a business with Rs.85,000 and is joined afterwards by B with Rs.42,500. For how much period does B join, if profits at the end of the years are divided in the ratio of 3:1.
 (a) 4 months (b) 5 months
 (c) 6 months (d) 8 months
10. A, B and C enter partnership by investing in the ratio 3:2:4. After one year, B invests another Rs.2,70,000 and C at the end of 2 years, also invests Rs.2,70,000. At the end of three years, profits are shared in the ratio of 3:4:5. Find the initial investment of each.
 (a) 2,70,000:1,80,000;3,60,000 (b) 2,70,000:1,50,000;3,60,000
 (c) 2,50,000:1,80,000;3,60,000 (d) 2,70,000:1,80,000:3,00,000
11. A, B and C enter into partnership. A invests 3 times as much as B invests and B invests $\frac{2}{3}$ of what C invests. At the end of the year, the profit earned is Rs.6600. What is the share of B?
 (a) Rs.1200 (b) Rs.1500
 (c) Rs.1800 (d) Rs.2000
12. A and B can do a work in 8 days, B and C can do the same work in 12 days. A, B and C together can finish it in 6 days. A and C together will do it in:
 (a) 4 days (b) 6 days
 (c) 8 days (d) 12 days

Answer Sheet

1.	d	2.	c	3.	a	4.	b	5.	b	6.	b	7.	a	8.	b	9.	d	10.	a
11.	a	12.	c																



1C

Logarithms

Business Mathematics

Exercise

Basic Level -1

- $\log 6 + \log 5$ is expressed as
(a) $\log 11$ (b) $\log 30$ (c) $\log 5/6$ (d) none of these
- $\log_2 8$ is equal to
(a) 2 (b) 8 (c) 3 (d) none of these
- $\log 32/4$ is equal to
(a) $\log 32/\log 4$ (b) 8
(c) 3 (d) none of these
- $\log (1 \times 2 \times 3)$ is equal to
(a) $\log 1 + \log 2 + \log 3$ (b) $\log 3$ (c) $\log 2$ (d) none of these
- The value of $\log 0.0001$ to the base 0.1 is
(a) -4 (b) 4 (c) $\frac{1}{4}$ (d) none of these
- $\log_2 64$ is equal to
(a) 12 (b) 6 (c) 1 (d) none of these
- $\log_{2\sqrt{3}} 1728$ is equal to
(a) $2\sqrt{3}$ (b) 2 (c) 6 (d) none of these
- $\log (1/81)$ to the base 9 is equal to
(a) 2 (b) $\frac{1}{2}$ (c) -2 (d) none of these

Basic Level - 2

- If $2 \log x = 4 \log 3$, the x is equal to
(a) -4 (b) 9 (c) 2 (d) none of these
- $\log 0.0625$ to the base 2 is equal to
(a) 4 (b) 5 (c) 1 (d) none of these
- The value of $\log \frac{1}{3}$ to the base 9 is
(a) $-\frac{1}{2}$ (b) $\frac{1}{2}$ (c) 1 (d) none of these
- If $\log x + \log y = \log (x+y)$, y can be expressed as
(a) $x - 1$ (b) x (c) $x/x-1$ (d) none of these
- If $\log_2 x + \log_4 x + \log_{16} x = 21/4$, then x is equal to
(a) 8 (b) 4 (c) 16 (d) none of these



14. The simplified value of $2 \log_{10} 5 + \log_{10} 4$ is
 (a) $\frac{1}{2}$ (b) 4 (c) 2 (d) none of these
15. On solving the equation $\log(t) + \log(t-3) = 1$ the value of "t" is
 (a) 5 (b) 2 (c) 3 (d) 0
16. $\log \frac{a^2}{bc} - \log \frac{ca}{b^2} + \log \frac{c^2}{ab} =$
 (a) 0 (b) 1 (c) $\log a$ (d) None of these.

Finding Value Problem

17. Given $\log 2 = 0.3010$ and $\log 3 = 0.4771$ the value of $\log 6$ is
 (a) 0.9030 (b) 0.9542 (c) 0.7781 (d) none of these
18. Given that $\log_{10} 2 = x$ and $\log_{10} 3 = y$, the value of $\log_{10} 60$ is expressed as
 (a) $x - y + 1$ (b) $x + y + 1$ (c) $x - y - 1$ (d) none of these
19. Given that $\log_{10} 2 = x$, $\log_{10} 3 = y$, then $\log_{10} 1.2$ is expressed in terms of x and y as
 (a) $x + 2y + 1$ (b) $x + y - 1$ (c) $2x + y - 1$ (d) none of these
20. Given that $\log x = m + n$ and $\log y = m - n$, the value of $\log 10x/y^2$ is expressed in terms of m and n as
 (a) $1 - m + 3n$ (b) $m - 1 + 3n$
 (c) $m + 3n + 1$ (d) none of these
21. $\log(a^2) + \log a = 10$ if the value of a is given by
 (a) 0 (b) 10 (c) -1 (d) $10^{10/3}$

Chain Based Problem

22. The value of $\log_2 \log_2 16$
 (a) 0 (b) 2 (c) 1 (d) none of these
23. The value of $\log_2 [\log_2 \{\log_2 (\log_3 27^3)\}]$ is equal to
 (a) 1 (b) 2 (c) 0 (d) none of these
24. On solving the equation $\log_3 [\log_2 (\log_3 t)] = 1$ we get the value of t as
 (a) 8 (b) 18 (c) 81 (d) 6561
25. On solving the equation $\log_{1/2} [\log_t (\log_4 32)] = 2$ we get the value of t as
 (a) $\frac{5}{2}$ (b) $\frac{25}{4}$ (c) $\frac{625}{16}$ (d) None
26. If $\log_5 [\log_2 (\log_3 z)] = 0$, the value of z is
 (a) 30 (b) 9 (c) 21 (d) 1

Base Changing Theorem

27. $\frac{1}{\log_{ab}(abc)} + \frac{1}{\log_{bc}(abc)} + \frac{1}{\log_{ca}(abc)}$ is equal to
 (a) 0 (b) 1 (c) 2 (d) -1



28. $\frac{1}{1+\log_a(bc)} + \frac{1}{1+\log_b(ca)} + \frac{1}{1+\log_c(ab)}$ is equal to
 (a) 0 (b) 1 (c) 3 (d) -1
29. $\frac{1}{\log_{a/b}(x)} + \frac{1}{\log_{b/c}(x)} + \frac{1}{\log_{c/a}(x)}$ is equal to
 (a) 0 (b) 1 (c) 3 (d) -1
30. $\log_b(a) \cdot \log_c(b) \log_a(c)$ is equal to
 (a) 0 (b) 1 (c) -1 (d) None
31. $\log_b\left(a^{\frac{1}{2}}\right) \cdot \log_c(b^3) \cdot \log_a\left(c^{\frac{2}{3}}\right)$ is equal to
 (a) 0 (b) 1 (c) -1 (d) None
32. The value of $\frac{1}{\log_a(ab)} + \frac{1}{\log_b(ab)}$ is
 (a) 0 (b) 1 (c) -1 (d) None
33. If $\frac{1}{\log_a t} + \frac{1}{\log_b t} + \frac{1}{\log_c t} = \frac{1}{\log_z t}$ then the value of z is given by
 (a) 0 (b) abc (c) -1 (d) None
34. $\frac{1}{\log_p(m)} + \frac{1}{\log_q(m)} + \frac{1}{\log_r(m)} = ?$
 (a) 0 (b) 2 (c) 3 (d) None

Problems on Principal Identity

35. The value of the expression $a^{\log_a b \cdot \log_b c \cdot \log_c d \cdot \log_d t}$
 (a) t (b) abcdt
 (c) (a + b + c + d + t) (d) none
36. Find the value of $2^{2-\log_2 5}$
 (a) -1 (b) 20 (c) 5/4 (d) 4/5
37. $4^{\log_9 3} + 9^{\log_2 4} = 10^{\log_x 83}$ then
 (a) 10 (b) -10 (c) 20 (d) 25
38. The value of $16^{\log_4 5}$ is
 (a) 15 (b) 40 (c) 20 (d) 25

Advance Problem

39. If $\log(a) = \frac{1}{2} \log(b) = \frac{1}{5} \log(c)$ then the value of $a^4 b^3 c^{-2}$ is
 (a) 0 (b) 1 (c) -1 (d) None
40. If $\frac{1}{2} \log a = \frac{1}{3} \log b = \frac{1}{5} \log c$ then the value of $a^4 - bc$ is
 (a) 0 (b) 1 (c) -1 (d) None
41. If $\frac{1}{4} \log_2 a = \frac{1}{6} \log_2 b = -\frac{1}{24} \log_2 c$ the value of $a^3 b^2 c$ is
 (a) 0 (b) 1 (c) -1 (d) None



42. If $\log \frac{a+b}{3} = \frac{1}{2}(\log a + \log b)$ then the value of $\frac{a}{b} + \frac{b}{a}$ is
 (a) 2 (b) 5 (c) 7 (d) 3
43. If $a^2 + b^2 = 7ab$ then the value of is $\log \frac{a+b}{3} - \frac{\log a}{2} - \frac{\log b}{2}$
 (a) 0 (b) 1 (c) -1 (d) 7
44. The value of $\log (1^3 + 2^3 + 3^3 + \dots + n^3)$ is equal to:
 (a) $3 \log 1 + 3 \log 2 + \dots + 3 \log n$
 (b) $2 \log n + 2 \log (n+1) - 2 \log 2$
 (c) $\log n + \log (n+1) + \log (2n+1) - \log 6$
 (d) 1
45. If $x^{18} = y^{21} = z^{28}$, then $3, 3 \log_y x, 3 \log_z y, 7 \log_{xz}$ are in:
 (a) A. P (b) G. P (c) H. P (d) None

Assuming Value Problems

46. For any three consecutive integers xyz the equation $\log (1+xz) - 2 \log y = 0$ is
 (a) True
 (b) False
 (c) Sometimes true
 (d) Cannot be determined in the cases of variables with cyclic
47. If $x = \log_{abc} a, y = \log_{bca} b, z = \log_{cab} c$ then the value of $xyz - x - y - z$ is
 (a) 0 (b) 1 (c) -1 (d) 2
48. If $\log_x yz = p, \log_y zx = q, \log_z xy = r$, Then $\frac{1}{p+1} + \frac{1}{q+1} + \frac{1}{r+1} =$ is
 (a) 0 (b) 1 (c) 2 (d) None

Problems Based on Cyclic Order

49. If $p + q + r = 0$, find the value of $\frac{1}{a^q + a^{-r} + 1} + \frac{1}{a^r + a^{-p} + 1} + \frac{1}{a^p + a^{-q} + 1}$
 (a) 0 (b) 2 (c) 1 (d) None
50. The value of $\frac{1}{1+y^{p-q}+y^{p-r}} + \frac{1}{1+y^{q-p}+y^{q-r}} + \frac{1}{1+y^{r-p}+y^{r-q}}$
 (a) 0 (b) 1 (c) 2 (d) None



Additional Question Bank

- The integral part of a logarithm is called _____ and the decimal part of a logarithm is called _____.
 (a) Mantissa, Characteristic (b) Characteristic, Mantissa
 (c) Whole, Decimal (d) None of these
- The value of $\log_2 0.0625$ is
 (a) -3 (b) -4 (c) -5 (d) None
- The value of $\log_{\sqrt{3}} 27$ is
 (a) 6 (b) 5 (c) 2 (d) None
- The logarithm of 19683 to the base of $3\sqrt{3}$ & that of 21952 to the base of $2\sqrt{7}$ are
 (a) Not unequal (b) Not equal
 (c) Have a difference of 1369 (d) None
- The value of $16\log\frac{64}{60} + 12\log\frac{50}{48} + 7\log\frac{81}{80} + \log 2$ is
 (a) 0 (b) 1 (c) 2 (d) -1
- The value of $\log_5 \sqrt{5\sqrt{5\sqrt{5} \dots \dots \text{to } \infty}}$ is
 (a) 0 (b) 1 (c) 2 (d) none
- Find the value of $2^{2+\log_2 7}$
 (a) 2 (b) 3 (c) 8 (d) 5
- Find the simplest value of $\log_3 \sqrt[4]{729.3\sqrt{9^{-1}}.27^{-4/3}}$
 (a) 0 (b) 1 (c) 2 (d) none
- Find the simplest value of $\log_{17} \sqrt{17\sqrt{17\sqrt{17} \dots \dots \dots \infty}}$
 (a) 1 (b) -1 (c) 0 (d) none
- If $\log_2[\log_3 \sqrt{y}] = 1$ then $y = ?$
 (a) 27 (b) 81 (c) 343 (d) none
- The value of $\log_{10} 1 + \log_{10} 10 + \log_{10} 100 + \log_{10} 1,000 + \log_{10} 10,000 + \log_{10} 1,00,000$ is:
 (a) 15 (b) $\log_{10} 11111$ (c) $\log_{10} 1111$ (d) $14 \log_{10} 100$
- If $\log 300 = 2.4771$, then the position of first significant digit in 3^{-20} is:
 (a) 9th (b) 10th (c) 11th (d) 8th
- If $A = \log_2 \log_2 \log_4 256 + 5 \log_{\sqrt{2}} 2$, then A equals:
 (a) 12 (b) 13 (c) 11 (d) none
- If $\log_{30} 3 = x$, $\log_{30} 5 = y$, then $\log_{30} 8 =$
 (a) $3(1 - x - y)$ (b) $x - y + 1$ (c) $1 - x - y$ (d) $2(x - y + 1)$
- If $x = 2983!$ then the value of the expression: $\frac{1}{\log_2 x} + \frac{1}{\log_3 x} + \frac{1}{\log_4 x} \dots \dots \dots + \frac{1}{\log_{2983} x}$ is equal to:
 (a) 0 (b) 1 (c) 2 (d) 3



16. $\log_7 \log_3 \sqrt{3(\sqrt{3\sqrt{3}})}$ equals:

- (a) $3 \log_2 7$ (b) $1 - 3 \log_3 7$ (c) $1 - 3 \log_7 2$ (d) none of these

17. The expression $\log_7 3$ is:

- (a) An integer (b) A rational
(c) An irrational number (d) A prime number

18. $\log[1-\{1-(1-x^2)^{-1}\}^{-1}]^{\frac{1}{2}}$

- (a) $\log x^2$ (b) $\log x$ (c) $\log \frac{1}{x}$ (d) none of these

19. If $x = \frac{e^y - e^{-y}}{e^y + e^{-y}}$ then the value of y is:

- (a) $\frac{1}{2} \log_e \frac{1+x}{1-x}$ (b) $\log_e \frac{1+x}{1-x}$ (c) $\log_e \frac{1-x}{1+x}$ (d) $\frac{1}{2} \log \frac{1+x}{1-x}$

Answer Sheet

Exercise

1.	b	2.	c	3.	d	4.	a	5.	b	6.	b	7.	c	8.	c	9.	b	10.	d
11.	a	12.	c	13.	a	14.	c	15.	a	16.	a	17.	c	18.	b	19.	c	20.	a
21.	d	22.	b	23.	c	24.	d	25.	c	26.	b	27.	c	28.	b	29.	a	30.	b
31.	b	32.	b	33.	b	34.	a	35.	a	36.	d	37.	a	38.	d	39.	b	40.	a
41.	b	42.	c	43.	a	44.	a	45.	a	46.	a	47.	d	48.	b	49.	c	50.	b

Additional Question Bank

1.	b	2.	b	3.	a	4.	a	5.	b	6.	b	7.	a	8.	b	9.	a	10.	b
11.	a	12.	c	13.	c	14.	a	15.	b	16.	b	17.	c	18.	b	19.	a		



2

Equations

Chapter

Business Mathematics

Exercise

Linear Equation

In One Variable

- The equation $-7x + 1 = 5 - 3x$ will be satisfied for x equal to:
 - 2
 - 1
 - 1
 - none of these
- Pick up the correct value of x $\frac{x}{30} = \frac{2}{45}$
 - $X = 5$
 - $X = 7$
 - $x = 1\frac{1}{3}$
 - none of these
- The solution of the equation $\frac{x+24}{5} = 4 + \frac{x}{4}$
 - 6
 - 10
 - 16
 - none of these
- 8 is the solution of equation
 - $\frac{x+4}{4} + \frac{x-5}{3} = 11$
 - $\frac{x+4}{2} + \frac{x+10}{9} = 8$
 - $\frac{x+24}{5} = 4 + \frac{x}{4}$
 - $\frac{x-15}{10} + \frac{x+5}{5} = 4$
- The value of y that satisfies the equation $\frac{y+11}{6} - \frac{y+1}{9} = \frac{y+7}{4}$ is
 - 1
 - 7
 - 1
 - $-\frac{1}{7}$
- The solution of the equation $(p+2)(p-3) + (p+3)(p-4) = p(2p-5)$ is
 - 6
 - 7
 - 5
 - none of these
- The equation $\frac{12x+1}{4} = \frac{15x-1}{5} + \frac{2x-5}{3x-1}$ is true or
 - $X = 1$
 - $X = 2$
 - $x = 5$
 - $x = 7$
- Pick up the correct value x for which $\frac{x}{0.5} - \frac{1}{0.05} + \frac{x}{0.005} - \frac{1}{0.0005} = 0$
 - $X = 0$
 - $X = 1$
 - $x = 10$
 - none of these

In Two Variable

- The solution of the set of equations $3x + 4y = 7$, $4x - y = 3$ is
 - (1, -1)
 - (1, 1)
 - (2, 1)
 - (1, -2)



10. Solve for x and y: $x - 3y = 0$, $x + 2y = 20$.
- (a) $x = 4$, $y = 12$ (c) $x = 5$, $y = 4$
 (b) $x = 12$, $y = 4$ (d) none of these
11. $1.5x + 3.6y = 2.1$, $2.5(x + 1) = 6y$
- (a) (0.2, 0.5) (c) (2, 5)
 (b) (0.5, 0.2) (d) (-2, -5)
12. $\frac{x}{p} + \frac{y}{q} = 2$, $x + y = p + q$ are satisfied by the values given by the pair.
- (a) $(x=p, y=q)$ (c) $(x=1, y=1)$
 (b) $(x=q, y=p)$ (d) none of these
13. The solution for the pair of equation $\frac{1}{16x} + \frac{1}{15y} = \frac{9}{20}$, $\frac{1}{20x} - \frac{1}{27y} = \frac{4}{45}$ is given by
- (a) $(\frac{1}{4}, \frac{1}{3})$ (c) (3, 4)
 (b) $(\frac{1}{3}, \frac{1}{4})$ (d) (4, 3)
14. The simultaneous equations $7x - 3y = 31$, $9x - 5y = 41$ have solutions given by
- (a) (-4, -1) (c) (4, -1)
 (b) (-1, 4) (d) (3, 7)
15. The values of x and y satisfying the equations $\frac{3}{x+y} + \frac{2}{x-y} = 3$, $\frac{2}{x+y} + \frac{3}{x-y} = 3\frac{2}{3}$ are given by
- (a) (1, 2) (c) $(1, \frac{1}{2})$
 (b) (-1, -2) (d) (2, 1)

In 3 Variable

16. $\frac{x}{4} = \frac{y}{3} = \frac{z}{2}$, $7x + 8y + 5z = 62$
- (a) (4, 3, 2) (c) (3, 4, 2)
 (b) (2, 3, 4) (d) (4, 2, 3)
17. $\frac{xy}{x+y} = 20$, $\frac{yz}{y+z} = 40$, $\frac{zx}{z+x} = 24$
- (a) (120, 60, 30) (c) (30, 120, 60)
 (b) (60, 30, 120) (d) (30, 60, 120)

Word Problems

18. Monthly income of two persons are in the ratio 4: 5 and their monthly expenses are in the ratio 7: 9. If each save Rs 50 per month find their monthly income.
- (a) (500, 400) (c) (300, 600)
 (b) (400, 500) (d) (350, 550)
19. Find the fraction which is equal to $\frac{1}{2}$ when both its numerator and denominator are increased by 2. It is equal to $\frac{3}{4}$ when both are increased by 12.
- (a) $\frac{3}{8}$ (c) $\frac{2}{8}$
 (b) $\frac{5}{8}$ (d) $\frac{2}{3}$
20. The age of a person is twice the sum of the ages of his two sons and five years ago his age was thrice the sum of their ages. Find his present age.
- (a) 60 years (c) 51 years
 (b) 52 years (d) 50 years



21. A number between 10 and 100 is five times the sum of its digits. If 9 be added to it the digits are reserved find the number.
(a) 54 (c) 45
(b) 53 (d) 55
22. The wages of 8 men and 6 boys' amount Rs 33. If 4 men earn Rs 4.50 more than 5 boys determine the wages of each man and boy.
(a) (Rs 1.50, Rs 3) (c) (Rs 2.50, Rs 2)
(b) (Rs 3, Rs 1.50) (d) (Rs 2, Rs 2.50)
23. A number consisting of two digits is four times the sum of its digits and if 27 be added to it the digits are reserved. The number is:
(a) 63 (c) 36
(b) 35 (d) 60
24. Of two numbers, $1/5^{\text{th}}$ of the greater is equal to $1/3^{\text{rd}}$ of the smaller and their sum is 16. The numbers are:
(a) (6, 10) (c) (12, 4)
(b) (9, 7) (d) (11, 5)
25. Y is older than x by 7 years, 15 years back x's ages was $3/4$ of y's age. Their present ages are:
(a) (x = 36, y = 43) (c) (x = 43, y = 50)
(b) (x = 50, y = 43) (d) (x = 40, y = 47)
26. Two numbers are such that twice the greater number exceeds twice the smaller one by 18 and $1/3^{\text{rd}}$ of the smaller and $1/5^{\text{th}}$ of the greater number are together 21. The numbers are:
(a) (36, 45) (c) (50, 41)
(b) (45, 36) (d) (55, 46)
27. The demand and supply equations for a certain commodity are $4q + 7p = 17$ and $p = \frac{q}{3} + \frac{7}{4}$. Respectively where p is the market price and q is the quantity then the equilibrium price and quantity are:
(a) $2, \frac{3}{4}$ (c) $5, \frac{3}{5}$
(b) $3, \frac{1}{2}$ (d) none of these
28. The sum of two numbers is 52 and their difference is 2. The numbers are
(a) 17 and 15 (c) 27 and 25
(b) 12 and 10 (d) none of these
29. The fourth part of a number exceeds the sixth part by 4. The number is
(a) 84 (c) 48
(b) 44 (d) none of these
30. Ten years ago, the age of a father was four times of his son. Ten years hence the age of the father will be twice that of his son. The present ages of the father and the son are
(a) (50, 20) (c) (55, 25)
(b) (60, 20) (d) none of these



Quadratic Equation

Finding Roots of Equation

What is the roots of the Following Equation?

31. $x^2 - 3x + 2 = 0$
32. $x^2 - 13x + 12 = 0$
33. $x^2 - 7x + 12 = 0$
34. $x^2 - 15x + 26 = 0$
35. $x^2 + 3x - 70 = 0$
36. $x^2 - 12x + 35 = 0$
37. The solution of equation $3x^2 - 17x + 24 = 0$ are
 (a) (2, 3) (c) $(3, 2\frac{2}{3})$
 (b) $(2, 3\frac{2}{3})$ (d) $(3, \frac{2}{3})$
38. A solution of the quadratic equation $(a + b - 2c)x^2 + (2a - b - c)x + (c + a - 2b) = 0$ is
 (a) $x = 1$ (c) $x = 2$
 (b) $x = -1$ (d) $x = -2$
39. The values of x for the equation $x^2 + 9x + 18 = 6 - 4x$ are
 (a) (1, 12) (c) (1, -12)
 (b) (-1, -12) (d) (-1, 12)
40. If $x = m$ is one of the solutions of the equation $2x^2 + 5x - m = 0$ the possible values of m are
 (a) (0, 2) (c) (0, 1)
 (b) (0, -2) (d) (1, -1)
41. The satisfying the values of x for the equation $\frac{1}{x+p+q} = \frac{1}{x} + \frac{1}{p} + \frac{1}{q}$ are
 (a) (p, q) (c) (p, -p)
 (b) (-p, -q) (d) (-p, q)

Problems Based on Nature of Roots

42. If the roots of the equation $2x^2 + 8x - x^3 = 0$ are equal then the value of m is
 (a) -3 (c) 1
 (b) -1 (d) -2
43. The equation $x^2 - (p+4)x + 2p + 5 = 0$ has equal roots the value of p will be
 (a) ± 1 (c) ± 2
 (b) 2 (d) -2
44. The roots of equation $x^2 + (2p-1)x + p^2 = 0$ are real if
 (a) $p \geq 1$ (c) $p \geq \frac{1}{4}$
 (b) $p \leq 4$ (d) $p \leq \frac{1}{4}$
45. If $L + M + N = 0$ and L, M, N are rationals the roots of the equation $(M + N - L)x^2 + (N + L - M)x + (L + M - N) = 0$ are
 (a) Real and irrational
 (b) Real and rational
 (c) Imaginary and equal real and equal
 (d) None of these



Problem Based on Property of Roots

46. If $\alpha\beta$ be the roots of the equation $2x^2 - 4x - 3 = 0$ the value of $\alpha^2 + \beta^2$ is
 (a) 5 (c) 3
 (b) 7 (d) -4
47. If p and q are the roots of $x^2 + 2x + 1 = 0$ then the values of $p^3 + q^3$ becomes
 (a) 2 (c) 4
 (b) -2 (d) -4
48. If one root of $5^2x + 13x + p = 0$ be reciprocal of the other then the value of p is
 (a) -5 (c) $1/5$
 (b) 5 (d) $-1/5$
49. If the root of the equation $x^2 - 8x + m = 0$ exceeds the other by 4 then the value of m is
 (a) $m = 10$ (c) $m = 9$
 (b) $m = 11$ (d) $m = 12$
50. If α and β are the roots of $x^2 = x + 1$ then the value of $\frac{\alpha^2}{\beta} - \frac{\beta^2}{\alpha}$ is
 (a) $2\sqrt{5}$ (c) $3\sqrt{5}$
 (b) $\sqrt{5}$ (d) $-2\sqrt{5}$
51. The equation $\left(\frac{l-m}{2}\right)x^2 - \left(\frac{l+m}{2}\right)x + m = 0$ has got two values of x to satisfy the equation given as
 (a) $\left(1, \frac{2m}{l-m}\right)$ (c) $\left(1, \frac{2l}{l-m}\right)$
 (b) $\left(1, \frac{m}{l-m}\right)$ (d) $\left(1, \frac{l}{l-m}\right)$

Equation Forming Problems

52. If $p \neq q$ and $p^2 = 5p - 3$ and $q^2 = 5q - 3$ the equation having roots as $\frac{p}{q}$ and $\frac{q}{p}$ is
 (a) $X^2 - 19x + 3 = 0$ (c) $3x^2 - 19x + 3 = 0$
 (b) $3x^2 - 19x - 3 = 0$ (d) $3x^2 + 19x + 3 = 0$
53. If α and β be the roots of the equation $X^2 + 3x + 4 = 0$, then find the equation whose roots are $(\alpha + \beta)^2$ and $(\alpha - \beta)^2$
 (a) $X^2 - 2x - 63 = 0$ (c) $X^2 - 2x + 63 = 0$
 (b) $X^2 + 2x + 63 = 0$ (d) None of These

Word Problems

54. The sum of two numbers is 8 and the sum of their squares is 34. Taking one number as x form an equation in x and hence find the numbers. The numbers are
 (a) (7, 10) (c) (3, 5)
 (b) (4, 4) (d) (2, 6)
55. The difference of two positive integers is 3 and the sum of their squares is 89. Taking the smaller integer as x form a quadratic equation and solve it to find the integers. The integers are
 (a) (7, 4) (c) (3, 6)
 (b) (5, 8) (d) (2, 5)



56. Five times of a positive whole number is 3 less than twice the square of the number. The number is
 (a) 3 (b) 4 (c) -3 (d) 2
57. The area of a rectangular field is 2000 sq.m and its perimeter is 180 m. form a quadratic equation by taking the length of the field as x and solve it to find the length and breadth of the field. The length and breadth are
 (a) (205m, 80m) (b) (50m, 40m) (c) (60m, 50m) (d) none
58. Two squares had sides p cm and (p+5) cms. The sum of their squares is 625 sq.cm. The sides of the squares are
 (a) (10cm, 30cm) (b) (12cm, 25cm) (c) (15cm, 20cm) (d) none of these
59. Divide 50 into two parts such that the sum of their reciprocals is $1/12$. The numbers are
 (a) (24, 26) (b) (28, 22) (c) (27, 23) (d) (20, 30)
60. There are two consecutive numbers such that the sum of their reciprocals is $1/240$. The numbers are
 (a) 15, 16 (b) (17, 18) (c) (13, 14) (d) (12, 13)
61. The hypotenuse of a right-angled triangle is 20 cm. the difference between its other two sides be 4 cm. the sides are
 (a) (11cm, 15cm) (b) (12cm, 16cm) (c) (20cm, 24cm) (d) none of these
62. The sum of two number is 45 and the mean proportional between them is 18. The numbers are
 (a) (15, 30) (b) (32, 13) (c) (36, 9) (d) (25, 20)
63. The sides of an equilateral triangle are shortened by 12 units, 13 units and 14 units respectively and a right-angle triangle is formed. The sides of the equilateral triangle is
 (a) 17 units (b) 16 units (c) 15 units (d) 18 units
64. The sum of two irrational numbers multiplied by the larger one is 70 and their difference is multiplied by the smaller one is 12; the two numbers are
 (a) $3\sqrt{2}, 2\sqrt{3}$ (b) $5\sqrt{2}, 3\sqrt{5}$ (c) $2\sqrt{2}, 5\sqrt{2}$ (d) none of these

Advance Problems

65. If $2^{2x+3} - 3 \cdot 2^x + 1 = 0$ then the values of x are
 (a) 0, 1 (b) 1, 2 (c) 0, 3 (d) 0, -3
66. The values of $4 + \frac{1}{4 + \frac{1}{4 + \frac{1}{4 + \dots \infty}}}$
 (a) $1 \pm \sqrt{2}$ (b) $2 + \sqrt{5}$ (c) $2 \pm \sqrt{5}$ (d) none of these
67. If the sum of the roots of the quadratic equation $ax^2 + bx + c = 0$ is equal to the sum of the squares of their reciprocals then $\frac{b^2}{ac} + \frac{bc}{a^2}$ is equal to
 (a) 2 (b) -2 (c) 1 (d) -1



Additional Question Bank

1. Solving equation $\frac{6x+2}{4} + \frac{2x^2-1}{2x^2+2} = \frac{10x-1}{4x}$ we get roots as
 (a) ± 1 (b) $+1$ (c) -1 (d) 0
2. Solving equation $3x^2 - 14x + 16 = 0$ we get roots as
 (a) ± 1 (b) 2 and $\frac{8}{3}$ (c) 0 (d) None
3. Solving equation $7\sqrt{\frac{x}{1-x}} + 8\sqrt{\frac{1-x}{x}} = 15$ following roots are obtained
 (a) $\frac{64}{113}, \frac{1}{2}$ (b) $\frac{1}{50}, \frac{1}{65}$ (c) $\frac{49}{50}, \frac{1}{65}$ (d) $\frac{1}{50}, \frac{64}{65}$
4. Solving equation $6\left[\sqrt{\frac{x}{1-x}} + \sqrt{\frac{1-x}{x}}\right] = 13$ following roots are obtained
 (a) $\frac{4}{13}, \frac{9}{13}$ (b) $\frac{-4}{13}, \frac{-9}{13}$ (c) $\frac{4}{13}, \frac{5}{13}$ (d) $\frac{6}{13}, \frac{7}{13}$
5. Solving equation $z^2 - 6z + 9 = 4\sqrt{z^2 - 6z + 6}$ following roots are obtained
 (a) $3 + 2\sqrt{3}, 3 - 2\sqrt{3}$ (b) $5, 1$ (c) all of above (d) None
6. Solving equation $\frac{x + \sqrt{12p-x}}{x - \sqrt{12p-x}} = \frac{\sqrt{p+1}}{\sqrt{p-1}}$ following roots are obtained
 (a) $3p$ (b) both $3p$ and $-4p$
 (c) only $-4p$ (d) $-3p$ and $4p$
7. Solving equation $(1+x)^{2/3} + (1-x)^{2/3} = 4(1-x^2)^{1/3}$ are, values of x
 (a) $\frac{5}{\sqrt{3}}$ (b) $-\frac{5}{\sqrt{3}}$ (c) $\pm \frac{5}{3\sqrt{3}}$ (d) $\pm \frac{15}{\sqrt{3}}$
8. Solving equation $(2x+3) + (2x+5)(x-1)(x-2) = 30$ the roots available are
 (a) $0, \frac{1}{2}, \frac{11}{4}, \frac{9}{4}$ (b) $0, -\frac{1}{2}, \frac{-1 \pm \sqrt{105}}{4}$
 (c) $0, -\frac{1}{2}, -\frac{11}{4}, \frac{9}{4}$ (d) None
9. Solving equation $z + \sqrt{z} = \frac{6}{25}$ the value of z works out to
 (a) $\frac{1}{5}$ (b) $\frac{2}{5}$ (c) $\frac{1}{25}$ (d) $\frac{2}{25}$
10. Solving equation $z^{10} - 33z^5 + 32 = 0$ the following value of z are obtained
 (a) $1, 2$ (b) $2, 3$ (c) $2, 4$ (d) $1, 2, 3$
11. When $\sqrt{2z+1} + \sqrt{3z+4} = 7$ the value of z is given by
 (a) 1 (b) 2 (c) 3 (d) 4
12. Solving equation $\sqrt{x^2 - 9x + 18} + \sqrt{x^2 + 2x - 15} = \sqrt{x^2 - 4x + 3}$ following roots are obtained
 (a) $3, \frac{2 \pm \sqrt{94}}{3}$ (b) $\frac{2 \pm \sqrt{94}}{3}$ (c) $4, -\frac{8}{3}$ (d) $3, 4 - \frac{8}{3}$



13. Solving $4^x \cdot 2^y = 128$ and $3^{3x+2y} = 9^{xy}$ we get the following roots

- (a) $\frac{7}{4}, \frac{7}{2}$ (b) 2,3 (c) 1,2 (d) 1,3

14. Solve $x^3 + 3x^2 - x - 3 = 0$ given that the roots are in arithmetical progression

- (a) -1,1,3 (b) 1,2,3
(c) -3,-1,1 (d) -3,-2,-1

15. Solve $x^3 - 5x^2 - 2x + 24 = 0$ given that two of its roots being in the ratio of 3:4

- (a) -2,4,3 (b) -1,4,3
(c) 2,4,3 (d) -2,-4,-3

Answer Sheet

Exercise

1.	b	2.	c	3.	c	4.	b	5.	d	6.	a	7.	d
8.	c	9.	b	10.	b	11.	a	12.	a	13.	a	14.	c
15.	d	16.	a	17.	d	18.	b	19.	a	20.	d	21.	c
22.	b	23.	c	24.	a	25.	a	26.	b	27.	a	28.	c
29.	c	30.	a	31.	(2,1)	32.	(12,1)	33.	(4,3)	34.	(2,13)	35.	(-10,7)
36.	(5,7)	37.	c	38.	b	39.	b	40.	b	41.	b	42.	d
43.	c	44.	d	45.	b	46.	b	47.	b	48.	b	49.	d
50.	d	50.	d	50.	d	50.	d	50.	d	50.	d	50.	d
57.	b	58.	c	59.	d	60.	a	61.	b	62.	c	63.	a
64.	c	65.	d	66.	c	67.	a	68.	b	69.	b	70.	a
71.	a	72.	b	73.	a	74.	b						

Additional Question Bank

1.	a	2.	b	3.	a	4.	a	5.	c	6.	a	7.	c	8.	b	9.	c	10.	a
11.	d	12.	a	13.	a & b	14.	c	15.	a										



Summary Notes



3

Linear Inequalities

Business Mathematics

Exercise

Formation of Inequality

- An employer recruits experienced (x) and fresh workmen (y) for his firm under the condition that he cannot employ more than 9 people. X and y can be related by the inequality
 - $X + y \neq 9$
 - $x + y \leq 9, x \geq 0, y \geq 0$
 - $x + y \geq 9, x \geq 0, y \geq 0$
 - none of these
- On the average experienced person does 5 units of work while a fresh one 3 units of work daily but the employer has to maintain an output of at least 30 units of work per day. This situation can be expressed as
 - $5x + 3y \leq 30$
 - $5x + 3y > 30$
 - $5x + 3y \geq x \geq 0, y \geq 0$
 - none of these
- The rules and regulations demand that the employer should employ not more than 5 experienced hands to 1 fresh one and this fact can be expressed as
 - $Y \geq x/5$
 - $5y \leq x$
 - $5y \geq x$
 - none of these
- The union however forbids him to employ less than 2 experienced persons to each fresh person. This situation can be expressed as
 - $X \leq y/2$
 - $Y \leq x/2$
 - $y \geq x/2$
 - $x > 2y$
- A dietitian wishes to mix together two kinds of food so that the vitamin content of the mixture is at least 9 units of vitamin A, 7 units of vitamin B, 10 units of vitamin C and 12 units of vitamin D. the vitamin content per kg of each food is shown below:

	A	B	C	D
Food I:	2	1	1	2
Food II:	1	1	2	3

Assuming x units of food I is to be mixed with y units of food II the situation can be expressed as

- | | | | |
|---------------------|----------------------|---------------------|----------------------|
| (a) $2x + y \leq 9$ | (b) $2x + y \geq 30$ | (c) $2x + y \geq 9$ | (d) $2x + y \geq 9$ |
| $x + y \leq 7$ | $x + y \leq 7$ | $x + y \geq 7$ | $x + y \geq 7$ |
| $x + 2y \leq 10$ | $x + 2y \geq 10$ | $x + y \leq 10$ | $x + 2y \geq 10$ |
| $2x + 3y \leq 12$ | $x + 3y \geq 12$ | $x + 3y \geq 12$ | $2x + 3y \geq 12$ |
| $x > 0, y > 0$ | | | $x \geq 0, y \geq 0$ |

6. A firm makes two types of products: type A and type B. The profit on product A is Nu. 20 each and that on product B is Nu. 30 each. Both types are processed on three machines M1, M2 and M3. The time required in hours by each product and total time available in hours per week on each machine are as follows:

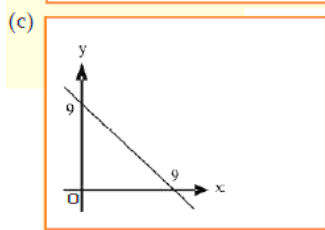
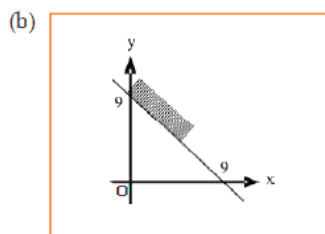
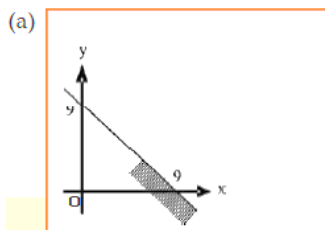
Machine	Product A	Product B	Available time
M1	3	3	36
M2	5	2	50
M3	2	6	60

The constraints can be formulated taking x_1 = number of units A and x_2 = number of units B as

- (a) $x_1 + x_2 \leq 12$
 $5x_1 + 2x_2 \leq 50$
 $2x_1 + 6x_2 \leq 60$
 $x_1 \geq 0, x_2 \geq 0$
- (b) $3x_1 + 3x_2 \geq 36$
 $5x_1 + 2x_2 \leq 50$
 $2x_1 + 6x_2 \geq 60$
 $x_1 \geq 0, x_2 \geq 0$
- (c) $3x_1 + 3x_2 \leq 36$
 $5x_1 + 2x_2 \leq 50$
 $2x_1 + 6x_2 \leq 60$
- (d) none of these

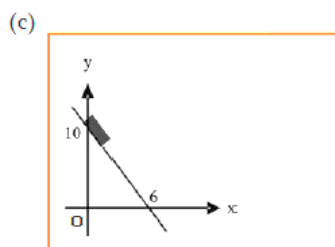
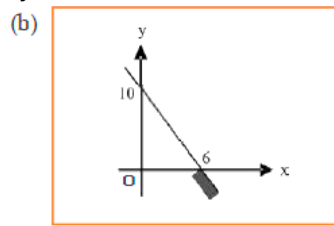
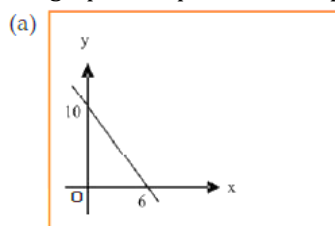
Equation Is Given & Graph Is Asked

7. The graph to express the inequality $x + y \leq 9$ is



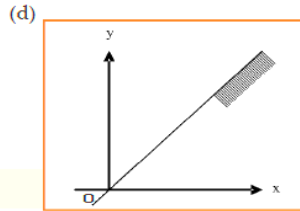
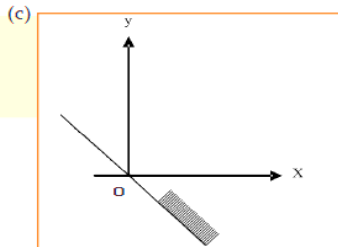
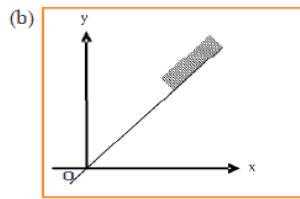
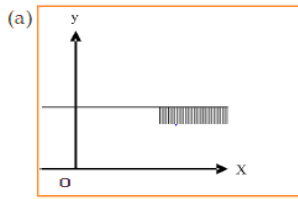
(d) none of these

8. The graph to express the inequality $5x + 3y \geq 30$ is

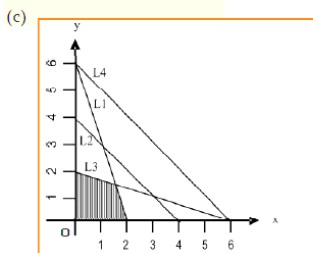
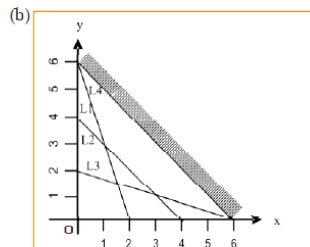
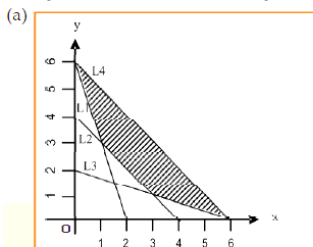


(d) none of these

9. The graph to express the inequality $y \leq \left(\frac{1}{2}\right)x$ is indicated by

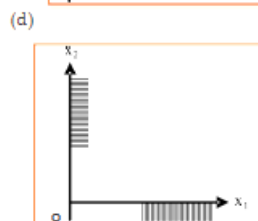
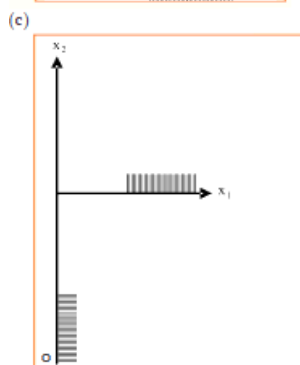
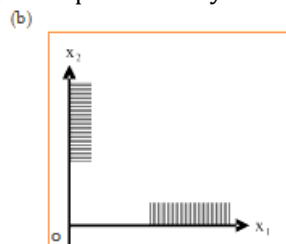
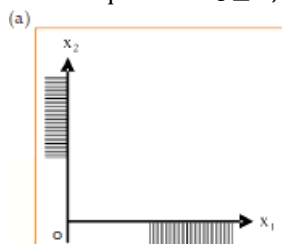


10. The common region satisfied by the inequalities L1: $3x + y \geq 6$, L2: $x + y \geq 4$, L3: $x + 3y \geq 6$, and L4: $x + y \leq 6$ is indicated by :

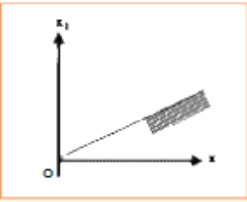
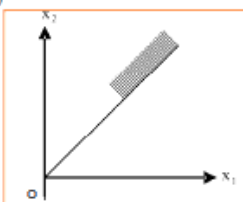
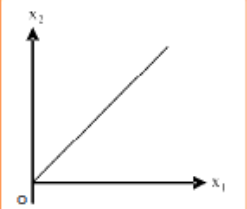


(d) none of these

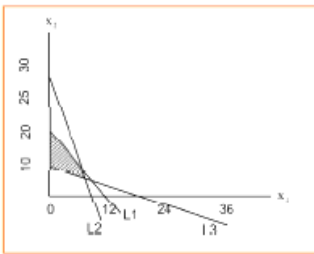
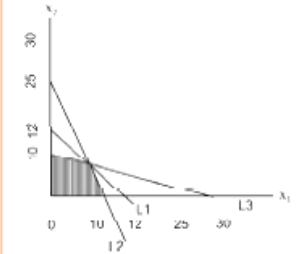
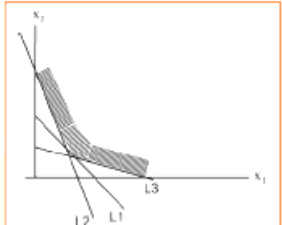
11. The inequalities $x_1 \geq 0, x_2 \geq 0$, are represented by one of the graphs shown below:



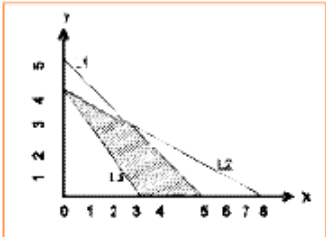
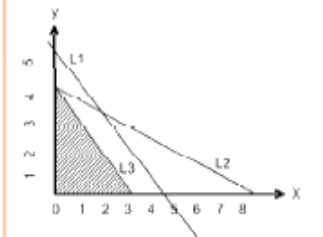
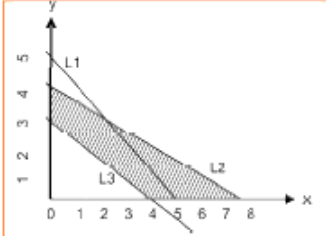
12. The inequality $-x_1 + 2x_2 \leq 0$ is indicated on the graph as

- (a) 
- (b) 
- (c) 
- (d) none of these

13. The set of inequalities $L1: x_1 + x_2 \leq 12$, $L2: 5x_1 + 2x_2 \leq 50$, $L3: x_1 + 3x_2 \leq 30$, $x_1 \geq 0$, and $x_2 \geq 0$ is represented by

- (a) 
- (b) 
- (c) 

14. The common region satisfying the set of inequalities $x \geq 0$, $y \geq 0$, $L1: x + y \leq 5$, $L2: x + 2y \leq 8$ and $L3: 4x + 3y \geq 12$ is indicated by

- (a) 
- (b) 
- (c) 
- (d) none of these



Graph Is Given & Inequality Is Asked

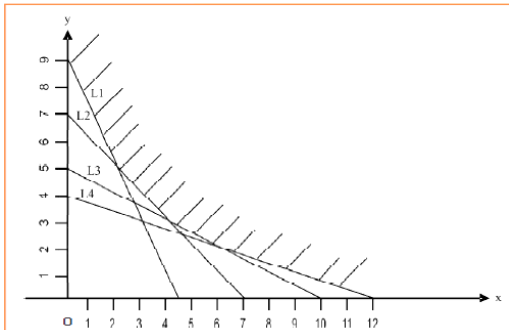
15. The common region (shaded part) shown in the diagram refers to



L1 : $5x + 3y = 30$ L2 : $x + y = 9$ L3 : $y = x/3$ L4 : $y = x/2$

- | | |
|---|---|
| (a) $5x + 3y \leq 30$
$x + y \leq 9$
$y \leq 1/5x$
$y \leq x/2$ | (b) $5x + 3y \geq 30$
$x + y \geq 9$
$y \geq x/3$
$y \leq x/2$
$x \geq 0, y \geq 0$ |
| (c) $5x + 3y \geq 30$
$x + y \geq 9$
$y \leq x/3$
$y \geq x/2$
$x \geq 0, y \geq 0$ | (d) $5x + 3y > 30$
$x + y < 9$
$y \geq 9$
$y \leq x/2$
$x \geq 0, y \geq 0$ |

16. Graphs of the in equations are drawn below:

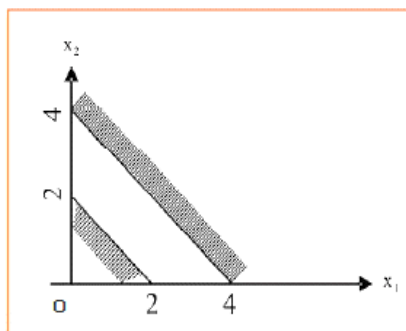


L1 : $2x + y = 9$ L2 : $x + y = 7$ L3 : $x + 2y = 10$ L4 : $x + 3y = 12$

The common region (shaded part) indicated on the diagram is expressed by the set of inequalities

- | | | | |
|---|---|---|-------------------|
| (a) $2x + y \leq 9$
$x + y \geq 7$
$x + 2y \geq 10$
$x + 3y \geq 12$ | (b) $2x + y \geq 9$
$x + y \leq 7$
$x + 2y \geq 10$
$x + 3y \geq 12$ | (c) $2x + y \geq 9$
$x + y \geq 7$
$x + 2y \geq 10$
$x + 3y \geq 12$
$x \geq 0, y \geq 0$ | (d) none of these |
|---|---|---|-------------------|

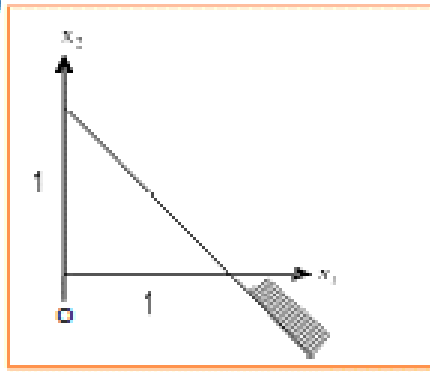
17. The region indicated by the shading in the graph is expressed by in equalities



- | | |
|--|---|
| (a) $x_1 + x_2 \leq 2$
$2x_1 + 2x_2 \geq 8$
$x_1 \geq 0, x_2 \geq 0$ | (b) $x_1 + x_2 \leq 2$
$x_2x_1 + x_2 \leq 4$ |
| (c) $x_1 + x_2 \geq 2$
$2x_1 + 2x_2 \geq 8$ | (d) $x_1 + x_2 \leq 2$
$2x_1 + 2x_2 > 8$ |



18. The region is expressed as



- (a) $x_1 - x_2 \geq 1$
- (b) $x_1 + x_2 \leq 1$
- (c) $x_1 + x_2 \geq 1$
- (d) None of these

Finding Solution of Equation

19. On solving the inequalities $2x + 5y \leq 20$, $3x + 2y \leq 12$, $x \geq 0$, $y \geq 0$, we get the following situation

- (a) (0, 0), (0, 4), (4, 0) and (20/11, 36/11)
- (b) (0, 0), (10, 0), (0, 6) and (20/11, 36/11)
- (c) (0, 0), (0, 4), (4, 0) and (2, 3)
- (d) (0, 0), (10, 0), (0, 6) and (2, 3)

20. On solving the inequalities $6x + y \geq 18$, $x + 4y \geq 12$, $2x + y \geq 10$, we get the following situation

- (a) (0, 18), (12, 0), (4, 2) and (2, 6)
- (b) (3, 0), (0, 3), (4, 2) and (7, 6)
- (c) (5, 0), (0, 10), (4, 2) and (7, 6)
- (d) (0, 18), (12, 0), (4, 2), (0, 0) and (7, 6)



Additional Question Bank

1. If $\left| \frac{3x-4}{4} \right| \leq \frac{5}{12}$, then solution set is :

- (a) $\left\{ x: \frac{19}{18} \leq x \leq \frac{29}{18} \right\}$ (b) $\left\{ x: \frac{7}{9} \leq x \leq \frac{17}{9} \right\}$
 (c) $\left\{ x: \frac{-29}{18} \leq x \leq \frac{-19}{18} \right\}$ (d) none of these

2. On solving the inequalities

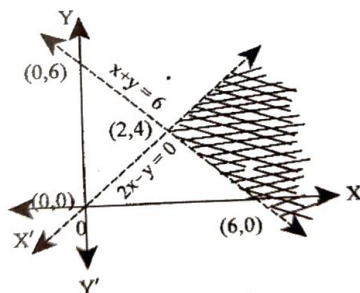
$6x + y \geq 18, x + 4y \geq 12, 2x + y \geq 10$, we get the following situation:

- (a) (0,18), (12, 0), (4, 2) & (7, 6)
 (b) (3, 0), (0,3), (4, 2) & (7, 6)
 (c) (5, 0), (0, 10), (4, 2) & (7, 6)
 (d) (0, 18), (12, 0), (4, 2), (0, 0) and (7, 6)

3. The rules and regulations demand that the employer should employ not more than 5 experienced hands to 1 fresh one and this fact is represented by: (taking experienced person as x and fresh person as y)

- (a) $y \geq \frac{x}{5}$ (b) $5y \leq x$
 (c) $5y \geq x$ (d) none

4. The shaded region represents:



- (a) $x + y > 6, 2x - y > 0$ (b) $x + y < 6, 2x - y > 0$
 (c) $x + y > 6, 2x - y < 0$ (d) none of these

5. If $a > 0$ and $b < 0$, it followings that:

- (a) $\frac{1}{a} > \frac{1}{b}$ (b) $\frac{1}{a} < \frac{1}{b}$
 (c) $\frac{1}{a} = \frac{1}{b}$ (d) none of these

6. The common region represented by the inequalities $2x + y \geq 8, x + y \geq 12, 3x + 2y \leq 34$ is

- (a) Unbounded (b) In feasible
 (c) Feasible and bounded (d) Feasible and unbounded



Answer Sheet

Exercise

1.	c	2.	c	3.	a	4.	b	5.	d	6.	c	7.	a	8.	c	9.	d	10.	a
11.	b	12.	b	13.	b	14.	a	15.	d	16.	c	17.	a	18.	c	19.	a	20.	a
21.	b	22.	b	23.	a	24.	a,c	25.	a	26.	a	27.	c						

Additional Question Bank

1.	b	2.	b	3.	a	4.	a,c	5.	a	6.	a	7.	c
----	---	----	---	----	---	----	-----	----	---	----	---	----	---



4

Mathematics of Finance

Chapter

Business Mathematics

Exercise

Problems on Simple Interest

- S.I on Rs. 3500 for 3 years at 12% per annum is
(a)Rs. 1200 (b) 1260 (c) 2260 (d)none of these
- $P = 5000, R = 15, T = 4\frac{1}{2}$ using $1 = \frac{PRT}{100}$, 1 will be
(a)Rs. 3375 (b)Rs. 3300 (c)Rs. 3735 (d)none of these
- If $P = 5000, T = 1, I = \text{Rs. } 300$, R will be
(a) 5% (b) 5% (c) 6% (d)none of these
- If $P = \text{Rs. } 4500, A = \text{Rs. } 7200$, then Simple interest i.e. I will be
(a)Rs. 2000 (b) 3000 (c)Rs. 2500 (d) Rs.2700
- $P = \text{Rs. } 12000, A = \text{Rs. } 16500, T = 2\frac{1}{2}$ years, Rate percent per annum simple interest will be
(a) 15% (b) 12% (c) 10% (d)none of these
- $P = \text{Rs. } 10000, I = \text{Rs. } 2500, R = 12\frac{1}{2}\%$ SI. The number of years T will be
(a) $1\frac{1}{2}$ years (b) 2 years (c) 3 years (d) none of these
- $P = \text{Rs. } 8500, A = \text{Rs. } 10200, R = 12\frac{1}{2}\%$ SI, t will be.
(a) 1 yr. 7 month. (b) 2 yrs. (c) $1\frac{1}{2}$ yr. (d)none of these
- The sum required to earn a monthly interest of Rs. 1200 at 18% per annum SI is
(a)Rs. 50000 (b)Rs. 60000 (c)Rs. 80000 (d)none of these
- A sum of money amount to Rs. 6200 in 2 years and Rs. 7400 in 3 years. The principal and rate of interest are
(a)Rs. 3800 31.57% (b)Rs. 3000, 20%
(c)Rs. 3500, 15% (d) none of these
- A sum of money doubles itself in 10 years. The number of years it would triple itself is
(a) 25 years. (b) 15 years. (c) 20 years (d) None of these
- A lent a sum at 4% S.I. If interest in 8 years was Rs 3,400 less than the sum, find the sum
(a)Rs. 7,000 (b) Rs. 5,000 (c) Rs. 5,700 (d) Rs. 6,000
- Out of Rs. 70,000, I invest Rs. 30,000 at 4% & Rs. 20,000 at 3% S. I. At what rate of interest must I invest the balance to get a return of 5% on whole amount per annum?
(a) 5% (b) 7% (c) 8% (d) 8.5%
- X, Y and Z are the three sums of money such that Y is the simple interest on X and Z is the simple interest on Y for the same time and rate. The relation between X, Y and Z is.
(a) $x^2 = YZ$ (b) $Y^2 = ZX$ (c) $Z^2 = XY$ (d) $XYZ = 1$
- What sum will discharge a debt of Rs. 5,300 due after one and half year at 5% p.a. simple interest today.
(a) Rs. 4,730 (b)Rs. 4,630 (c)Rs. 4,930 (d)Rs. 4,830



15. A sum of Rs. 46,875 was lent out at simple interest and at the end of 1 year 8 months the total amount was Rs. 50,000. Find the rate of interest per cent per annum.
(a) 4% (b) 5% (c) 7% (d) None
16. If the simple interest on Rs. 20,000 increases by Rs. 4,000 with the increase of time by 4 Yrs. Find the rate per cent per annum.
(a) 0.15% (b) 0.5% (c) 5% (d) None
17. If the difference between simple interest on Rs. 4,000 and on Rs. 6,500 for 5 Yrs. Be Rs. 800 at same rate of simple interest per annum. Then the rate of interest is
(a) 5.3% (b) 6.2% (c) 6.4% (d) None
18. A certain sum of money trebles itself in 10 years at a certain rate of S.I. p.a. then the rate of interest is
(a) 20% (b) 10% (c) 5% (d) None
19. A certain sum of money amounts to Rs.756 in 2 years and to Rs. 873 in 3.5 years at same rate of S.I. p.a. The rate of interest is
(a)12% (b) 13% (c) 14% (d) None
20. Mrs. Sudha lent Rs. 4,000 in such a way that some amount to Mr. A at 3% p.a. S.I. and rest amount to B at 5% p.a. S.I, the annual interest from both is Rs.144, Find the amount lent to Mr. A
(a) Rs. 2,800 (b) Rs. 1,200 (c) Rs. 2,500 (d) None
21. Rs. 1,521 is lent out in two parts in such a way that the S.I. on 1st part at 10% for 5 years is equal to that on 2nd part at 8% for 10 years. Find the both parts.
(a) Rs. 1,000; Rs. 521 (b) Rs. 920; Rs. 601
(c) Rs.936; Rs. 585 (d) None
22. A certain sum of money become six times at 5% S.I. p.a. At what rate % it will become 12 times.
(a) 15% (b)13% (c) 11% (d)None
23. A certain sum of money amounted to Rs. 765 at 8% in a certain time, in same time Rs. 640 amounted Rs. 750 at 5% p.a. S.I. Find the sum.
(a)Rs. 500 (b) Rs. 600 (c) Rs. 700 (d)None
24. A certain sum of money amounts to Rs. 5,000 in 5 years at 10% p.a. In how many years will it amount to Rs, 6,000 at same rate of S.L p.a.
(a) 10 years (b) 8 years (c) 6 years (d) None
25. Mr. X lent some amount of money at 4% S.L and he obtained Rs. 520 less than he lent in 5 years. The sum lent is
(a) Rs. 620 (b) Rs. 650 (c) Rs. 750 (d) None
26. If the simple interest on Rs. 750 is less than the interest on Rs. 845 at 10% p.a. S.I. by Rs. 57. Find the time
(a) 4 years (b) 5 years (c) 6 years (d) None
27. The simple interest in 14 months on a certain sum of money at the rate of 6% p.a. is Rs. 250 more than the interest on the same sum at the rate of 8% p.a. in 8 months. How much amount was borrowed?
(a) Rs. 15,000 (b) Rs. 25,000 (c) Rs. 7,500 (d) None
28. Mr. X borrows Rs. 7,000 from ICICI bank at S.I. He paid Rs. 3,000 after 3 years and Rs. 5,450 in next 2 years to settle the account. Find the rate of interest
(a) 5% (b) 6% (c) 8% (d) None
29. If S.I. on a certain sum of money Rs. 100 is Rs. 9 and the number of years and rate % are equal. Find the rate per cent.
(a) 3% (b) 4% (c) 5% (d) None



Problems on Compound Interest

30. If $P = \text{Rs. } 1000$, $R = 5\%$ p.a., $n = 4$; What is Amount and C.I. is
 (a)Rs. 1215.50, Rs. 215.50 (b)Rs. 1125, Rs. 125
 (c)Rs. 2115, Rs. 115 (d) none of these
31. Rs. 100 will become after 20 years at 5% p.a. compound interest amount
 (a)Rs. 250 (b)Rs. 205 (c)Rs. 265.50 (d)none of these
32. If $A = \text{Rs. } 1000$, $n = 2$ years, $R = 6\%$ p.a. compound interest payable half-yearly, then principal (P) is
 (a)Rs. 888.80 (b)Rs. 885 (c) 800 (d)none of these
33. The population of a town increases every year by 2% of the population at the beginning of that year. The number of years by which the total increase of population be 40% is
 (a) 7 years (b) 10 years (c) 17 years (d) none of these
34. The difference between C.I. and S.I on a certain sum of money invested for 3 years at 6% p.a is Rs. 110.16. The sum is?
 (a)Rs. 3000 (b)Rs. 3700 (c)Rs. 12000 (d) Rs. 10000
35. The C.I on Rs. 16000 for $1\frac{1}{2}$ years at 10% p.a. payable half yearly is
 (a)Rs. 2222 (b)Rs. 2522 (c)Rs. 2500 (d)none of these
36. The C.I. on Rs. 40000 at 10% p.a. for 1 year when the interest is payable quarterly is
 (a)Rs. 4000 (b)Rs. 4100 (c)Rs. 4152.51 (d) none of these
37. The difference between the S.I and the C.I on Rs. 2400 for 2 years at 5% p.a. is
 (a)Rs. 5 (b)Rs. 10 (c)Rs. 16 (d)Rs. 6
38. The annual birth and death rates per 1000 are 39.4 and 19.4 respectively. The number of years in which the population will be doubled assuming there is no immigration or emigration is
 (a) 35 yrs. (b) 30 yrs. (c) 25 yrs. (d)none of these
39. The C.I on Rs. 4000 for 6 months at 12% p.a. payable quarterly is
 (a)Rs. 243.60 (b)Rs. 240 (c) 243 (d) none of these
40. The compound interest in charged on a sum of rs. 15,000 is 10% p.a. for the 1st year, 12% p.a. for the 2nd year & 15% p.a. for the 3rd year, interest being compounded annually in all the cases. What is the total interest is payable at the end of 3 years?
 (a)Rs. 7,273 (b)Rs. 6,067 (c)Rs. 6252 (d)Rs. 5,268
41. Mohan borrows Rs. 50,000 from a bank at 10% per annum. He repays Rs 25,000 at the end of each year. What amount does he owe to the bank after the second repayment?
 (a)Rs. 10,000 (b)Rs. 8,000 (c)Rs. 12,000 (d)Rs. 18,000
42. A sum at C.I. becomes Rs. 1,020 after 3 yrs. & Rs.1,088 after 4 yrs. The rate of interest is
 (a) 5.60% (b) 6.66% (c) 7.66% (d) 8.66%
43. A sum at C.I. becomes Rs. 6,500 after 6 years &Rs. 7,800 after a further period of 2 more years. The amount due after a further period of 2 more years is –
 (a)Rs. 9,360 (b)Rs. 6,500 (c)Rs. 9,100 (d)Rs. 9,390
44. How many years it takes for investment of Rs. 1,000 to double itself when interest is compounded annually at 6% [Given: $(1.06)^{11.9} = 2.0005$]
 (a) 11 years (b) 11.3 years
 (c) 11.6 years (d)11.9 years
45. After Mr. Gupta introduced new norms, turnover of Gupta & sons went up from Rs. 100 million to Rs 300 million in 3 yrs. The compounded growth rate of co. is $(3^{1/2} = 1.4422)$
 (a)11.22% (b) 33.22% (c) 40% (d) 44.22%



46. Find the amount of Rs.2000 after 10 years at 8% converted quarterly for the 1st 4 years and 6% converted monthly thereafter.
 (a) Rs.4025.50 (b) Rs.3931.78 (c) Rs.2600.50 (d) None
47. If the compound Interest on a certain sum of money for 2 years at 4% p.a. be Rs.510, then its simple Interest (S.I) of same time at same rate of interest is
 (a) Rs.500 (b) Rs.510 (c) Rs.450 (d) None
48. If the S.I. on a certain sum of money for 3 years at 5% p.a. is Rs. 1260. Then its compound interest (C.I.) is
 (a) Rs.1324.05 (b) Rs.1330 (c) Rs. 1425 (d) None
49. If the difference between C.I and S.I on a certain sum of money at 5% p.a. for 2 years is Rs. 1.50. Find the sum of money.
 (a) Rs. 600 (b) Rs.500 (c) Rs. 400 (d) None
50. Find the difference between the S.I. and C.I. on Rs.8000 for 3 years at 5% p.a.
 (a) Rs.65 (b) Rs.62 (c) Rs.61 (d) None
51. A certain sum of money amounts to Rs.752 in 20 years and Rs.7896 in 21 years at rate of interest compounded annually the rate of interest is
 (a) 9.5% (b) 8% (c) 10% (d) None
52. A certain sum of money amounts to Rs.2750 in 2 years and Rs.3125 in 3 years at same rate of compound interest, the sum of money is
 (a) Rs.2129.60 (b) Rs.2210.37
 (c) Rs.2531.62 (d) Data inadequate.
53. The ratio of CI and SI on a certain sum of money at 10% p.a. for 2 years is
 (a) 8:5 (b) 20: 19 (c) 21:20 (d) None
54. Sohan deposited Rs.4800 in a bank after 4years it becomes Rs.6000 at a certain rate of compound interest what will be his amount in the bank after 12 years.
 (a) Rs.9375 (b) Rs.9000 (c) Rs.9525 (d) None
55. Mr. X lent Rs.6100 to Mr. A and Mr. B at same rate of compound interest of 20% p.a. so that A's share at the end of 3 years may equal to B's share at the end of 5 years.
 (a) Rs.3500; Rs.2600 (b) Rs.3600; Rs.2500
 (c) Rs.3400; Rs.2700 (d) None
56. A money- lender charges 'interest' at the rate of 5 rupees per 100 rupees per quarter, Payable in advance. What effective rate does he charge per annum?
 (a) 22.6% (b) 12.8% (c) 22,8% (d) None of these
57. The simple interest on Rs.300 for 4 years together with that on Rs.500 for 3 years came to Rs.162, the rate being the same in both cases. Find the rate percent of interest.
 (a) 4% (b) 6% (c) 7% (d) None of these

Problems on Effective Rate

58. The effective rate of interest corresponding to a nominal rate 3% p.a. payable half yearly is
 (a) 3.2% (b) 3.25% p.a. (c) 3.0225% p.a. (d) None of these
59. The effective rate of interest corresponding a nominal rate of 7% p.a. convertible quarterly is
 (a) 7% (b) 7.5% (c) 5% (d) 7.18%
60. Mr. Natarajan wants to make an investment of Rs. 50,000 in one of the two banks that fetches him the maximum return after 6 years. One bank offers 8% interest compounded annually and the other offers 7.5% interest compounded semi – annually. Which bank should be chosen, so that he gets the maximum return? [Given: $(1.08)^6 = 1.5869$ and $(1.0375)^{12} = 1.5554$]
 (a) First bank (b) Second bank
 (c) Any of the two bank (d) Both the banks.



Problems on Depreciation

61. A machine is depreciated at the rate of 20% on reducing balance. The original cost of the machine was Rs. 100000 and its ultimate scrap value was Rs. 3000. The effective life of the machine is
 (a) 4.5 years (appx.) (b) 5.4 years (appx.)
 (c) 5 years (appx.) (d) None of these
62. The useful life of a machine is estimated to be 10 years and cost Rs. 10000. Rate of depreciation is 10% p.a. The scrap value at the end of its life is
 (a) Rs. 3486 (b) Rs. 4383 (c) Rs. 3400 (d) Rs. 10000
63. A machine is depreciated at the rate of 10% on reducing balance. The original cost was Rs. 10,000 and the ultimate scrap value was Rs. 3,750. Find the effective life of the machine. (Given: $\log 2 = 0.30103$, $\log 3 = 0.47712$).
 (a) 5 yrs. (b) 5.19 yrs. (c) 9.3 yrs. (d) None of these

Advance Problems

64. In how many years will a sum become 27 times when it trebles itself in 2 years at C.I.?
 (a) 9 years (b) 6 years (c) 12 years (d) $13 \frac{1}{2}$ years
65. The compound interest on a sum for two years is Rs. 1,575 and the corresponding simple interest is Rs. 1,500. Find the compound interest on the same sum at the same rate of interest at the end of third year.
 (a) Rs. 2,428.50 (b) Rs. 2,482.50
 (c) Rs. 2,284.50 (d) Rs. 2,382.50
66. A certain sum was lent at compound interest, compounded annually for three years. The rate of interest for each of the three years was 20%, 15% and 10% p.a. respectively. If the same sum was lent at a constant rate of simple interest for the same period, then what would have been the interest rate for obtaining the same amount of interest?
 (a) 17.27% (b) 17% (c) 18% (d) 18.27%
67. The difference between C.I. & S.I. on a sum for 3 years at 10% p.a. is Rs. 1550. The sum is
 (a) 40000 (b) 50000 (c) 45000 (d) 48000

Problems on Present Value

Ordinary Annuity

68. The present value of an annuity of Rs. 3000 for 15 years at 4.5% p.a. CI is
 (a) Rs. 23809.41 (b) Rs. 32218.63
 (c) Rs. 32908.41 (d) none of these
69. A loan of Rs. 10,000 is to be paid back in 30 equal instalments. The amount of each installment to cover the principal and at 4% p.a. CI is
 (a) Rs. 587.87 (b) Rs. 587
 (c) Rs. 578.87 (d) none of these
70. A company borrows Rs. 10000 on condition to repay it with compound interest at 5% p.a. by annual installments of Rs. 1000 each. The number of years by which the debt will be clear is
 (a) 14.2 yrs. (b) 10 yrs. (c) 12 yrs. (d) None of these
71. Mr. Paul borrows Rs. 20000 on condition to repay it with C.I. at 5% p.a. in annual installments of Rs. 2000 each. The number of years for the debt to be paid off is
 (a) 10 yrs. (b) 12 yrs. (c) 11 yrs. (d) None of these
72. The present value of annuity of Rs. 5000 per annum for 12 years at 4% p.a. C.I. annually is
 (a) Rs. 46000 (b) Rs. 46850
 (c) Rs. 15000 (d) none of these



73. Y bought a TV costing Rs. 13,000 by making a down payment of Rs. 3000 and agreeing to make equal annual payment for four years. How much would be each payment if the interest on unpaid amount be 14% compounded annually?
 (a) Rs. 3,432.05 (b) Rs. 3,932.05 (c) Rs. 15000 (d) none of these
74. The amount of an annuity due consisting of 15 annual payments invested at 8% effective is Rs. 10,000. Find the size of each payment.
 (a) Rs.873.86 (b) Rs. 108.60 (c) Rs.341.01 (d) none of these
75. Arjun buys a house for which he agrees to pay Rs. 5000 at the end of each month for 8 years. If money is worth 12% converted monthly, what is the capital value of the house?
 (a) Rs. 307638.50 (b) Rs. 310825.60 (c) Rs. 25902.75 (d) None of these
76. Munna purchased LED TV paying Rs.5,000 down and promising to pay Rs.200 every quarter for next 10 years. The seller charges interest at the rate of 12% per annum compounded quarterly. If Munna missed the first 10 payments, what must he pay when the 11th payment is due to discharge his entire loan?
 (a) Rs.5873.86 (b) Rs.7108.60 (c) Rs.6399.26 (d) None of these

Due Annuity

77. Suppose your mom decides to gift you Rs 10,000 every year starting from today for the next five year. You deposit this amount in a bank as and when you receive and get 10% per annum interest rate compounded annually. What is present value of annuity?
 (a) Rs. 41698.70 (b) Rs. 51820.40
 (c) Rs. 60000 (d) none of these
78. Ram purchased a house for which he agreed to pay Rs.5000 at the beginning of each 3 months until he has made 10 payments. If money is worth 6% compounded quarterly, what is the equivalent cash price of the house?
 (a) Rs. 46802.58 (b) Rs. 47108.60
 (c) Rs. 46399.26 (d) None of these
79. The value of each equal instalment made at the beginning of each year for 10 years will pay for a piece of property priced at Rs.80,000, if money is worth 7% effective?
 (a) Rs. 15873.86 (b) Rs. 10645.05
 (c) Rs. 16399.26 (d) none of these

Perpetual Annuity

80. The value of the present value of a sequence of payments of Rs. 80 made at the end of each 6 months and continuity forever, if money is worth 4% compounded semi-annually is....
 (a) Rs. 4,000 (b) Rs. 5,000
 (c) Rs. 3,000 (d) None of these
81. How much money is needed to endure Machine costing Rs. 2,500 at the beginning of each year indefinitely, if money is worth 3% compounded annually?
 (a) Rs. 80,454.67 (b) Rs.85,833.33
 (c) Rs. 90,350.45 (d) None of these
82. At what rate converted semi-annually will the present value of a perpetuity of Rs. 450 payables at the end of each 6 months be Rs. 20,000?
 (a) 3.5% (b) 4% (c) 4.5% (d) None of these
83. Assuming that the discount rate is 10% per annum, how much would you pay to receive Rs.800, growing at 8%, annually, forever?
 (a) 1000 (b) 1500 (c) 2200 (d) None of these



Problems on Future Value

Ordinary Annuity

84. The amount of an annuity certain of Rs. 150 for 12 years at 3.5% p.a. C.I is
 (a)Rs. 2190.28 (b)Rs. 1290.28
 (c)Rs. 2180.28 (d) none of these
85. $A = Rs. 1200$ $n = 12$ yrs. $i = 0.08$ $v = ?$
 Using the formula $V = \frac{A}{i} \left[1 - \frac{1}{(1+i)^n} \right]$ value of v will be
 (a)Rs. 3039 (b)Rs. 3990
 (c)Rs. 9930 (d) none of these
86. $a = Rs. 100$ $n = 10$, $i = 5\%$ find the FV of annuity
 Using the formula $FV = a / \{(1 + i)^n - 1\}$, FV is equal to
 (a)Rs. 1258 (b)Rs. 2581
 (c)Rs. 1528 (d) none of these
87. If the amount of an annuity after 25 years at 5% p.a C.I is Rs. 50000 the annuity will be
 (a)Rs. 1406.90 (b)Rs. 1046.90
 (c)Rs. 1146.90 (d) none of these
88. Given annuity of Rs. 100 amounts to Rs. 3137.12 at 4.5% p.a C.I. The number of years will be
 (a) 25 yrs. (appx.) (b) 20 yrs. (appx.)
 (c) 22 yrs. (d) none of these
89. Mr. X borrowed Rs. 5120 at $12\frac{1}{2}$ p.a. C.I. At the end of 3 yrs., the money was repaid along with the interest accrued. The amount of interest paid by him is
 (a)Rs. 2100 (b)Rs. 2170 (c)Rs. 2000 (d) None of these
90. A person invests Rs. 500 at the end of each year with a bank which pays interest at 10% p. a. C.I. annually. The amount standing to his credit one year after he has made his yearly investment for the 12th time is.
 (a)Rs. 11764.50 (b)Rs. 10000 (c)Rs. 12000 (d) none of these
91. Rs 200 is invested at the end of each month in an account paying interest 6% per year compounded monthly. What is the future value of this annuity after 10TH payment?
 (a) Rs. 2044 (b)Rs. 5000
 (c)Rs. 1200 (d) none of these
92. Find the future value of an annuity of Rs. 500 made annually for 7 years at interest rate of 14% compounded annually. Given that $(1.14)^7 = 2.5023$.
 (a) Rs. 5,365.35 (b)Rs. 5000
 (c)Rs. 6500 (d) none of these
93. Rs. 200 is invested at the end of each month in an account paying interest 6% per year compounded monthly. What is the future value of this annuity after 10th payment? Given that $(1.005)^{10} = 1.0511$
 (a) Rs2500 (b) Rs. 2,044
 (c)Rs. 1850 (d) none of these
94. An annuity consisting of payments of Rs. 500 made at the end of every 3 months for 4 years at the rate of 6% compounded quarterly. Its Future value is...
 (a) Rs. 8966.18 (b)Rs. 8108.60
 (c) Rs. 9602.75 (d) none of these
95. An annuity consisting of equal payments at the end of each month for 2 years is to be purchased for Rs. 2000. If the interest rate is 6% compounded monthly, how much is each payment?
 (a) Rs.73.86 (b) Rs.31.60 (c) Rs.78.64 (d) None of these



Due Annuity

96. Z invested Rs 10,000 every year starting from today for next 10 Years. Suppose interest rate 8% per annum compounded annually. Calculate future value of the annuity.
 (a) Rs. 1,56,454.875 (b) Rs. 1,60,500.900
 (c) Rs. 1,80,500.900 (d) none of these
97. At the Beginning of each Period Consisting of 6-months, Rs 500 is deposited into saving account that pays 5% compounded half-yearly. Find the balance in the account at the end of each year.
 (a) Rs.5724 (b) Rs.5742
 (c) Rs.5472 (d) None of these
98. A Bank Pay interest at the rate of 8% per annum compounded quarterly. Find how much should be deposited in the bank at the beginning of each quarter in order to accumulate Rs.80,000 in 3 Years.
 (a) Rs 5,884 (b) Rs.5,488
 (c) Rs.5,848 (d) Rs.4,588

Sinking Fund

99. A person desires to create a fund to be invested at 10% CI per annum to provide for a prize of Rs. 300 every year. Using $V = a/i$ find V and V will be
 (a)Rs. 2000 (b) 2500 (c)Rs. 3000 (d) none of these
100. How much amount is required to be invested every year so as to accumulate Rs. 300000 at the end of 10 years if interest is compounded annually at 10%?
 (a) Rs. 18,823.62 (b) 25,000.62 (c)Rs. 16,000 (d) none of these

Capital Expenditure

101. A machine with useful life of 7 years costs Rs. 10,000 while another machine with useful life of 5 years costs Rs. 8,000. The first machine saves labor expenses of Rs. 1900 annually and the second one saves labor expenses by Rs. 2,200 annually. Determine the preferred course of action. Assume cost of borrowing as 10% per annum.
 [Given: $(1.1)^7 = 1.9487$, $(1.1)^5 = 1.610$]
 (a) First machine (b) Second machine
 (c) Any of two machines (d) Both the machine.
102. A company may obtain a machine either by taking it on lease for 5 years (useful life) at an annual rent of Rs. 2,000 or by purchasing the machine for Rs. 8,100. If the company can borrow money at 8% p.a., what is the present value of the preferable alternative?
 (a) 7985.42 (b) 7875.42 (c) 7765.42 (d) None

Net Present Value

103. Assume cash outflow are Rs. 1,20,000 followed by cash inflows of Rs. 25,000 per year for 8 years and cost of capital is 11% what is the net present value?
 (a) Rs. 38,214 (b) Rs. 9,650 (c) Rs. 8,650 (d) Rs. 38,214
104. A company proposes to install a machine involving a capital cost of Rs. 3,60,000. The life of the machine is 5 years and its salvage value at the end of the life is nil. The machine will produce the net cash flow of Rs. 68,000 per annum. You are required to calculate NPV when discounting rate is 15 % pa. The net present value factors for 5 years as under

Discounting Rate	14	15	16	17	18
Cumulative factor	3.43	3.35	3.27	3.20	3.13

- (a) - 13,2200 (b) 13,2200 (c) Rs. 15,500 (d) none of these



105. A company is considering the proposal of taking up a new project which requires an investment of Rs. 400 lakhs on machinery and other assets. The project is expected to yield the following cash flows over the next five years.

Year	Cash Flow (Rs. Lakhs)
1	160
2	160
3	180
4	180
5	150

The cost of raising the additional capital is 12% The scrap value at the end of the five year may be taken as zero. You are required to calculate the Net Present Value of the project
 (a) 197.91 (b) 132
 (c) 250 (d) none of these

Leasing Decision

106. A company is considering proposal of purchasing a machine either by making full payment of Rs. 4,000 or by leasing it for 4 years at an annual rent of Rs. 1,250. Which course of action is preferable, if the company can borrow money at 14% per annum? [Given: $(1.14)^4 = 1.68896$]
 (a) Leasing is preferable (b) Leasing is not preferable
 (c) Can't say. (d) None of these
107. ABC Ltd. wants to lease out an asset costing Rs. 3,60,000 for a five-year period. It has fixed a rental of Rs. 1,05,000 per annum payable annually starting from the end of first year. Suppose rate of interest is 14% per annum compounded annually on which money can be invested by the company. Is this agreement favorable to the company?
 (a) Leasing is preferable (b) Leasing is not preferable
 (c) Can't say. (d) None of these

Valuation of Bond

108. An investor intends purchasing a three-year Rs. 1,000 par value bonds having nominal interest rate of 10%. At what price the bond may be purchased now if it matures at par and the investor requires a rate of return of 14%?
 (a) Rs. 907.125 (b) 1000 (c) 825.45 (d)None of these

Compound Annual Growth Rate (CAGR)

109. Suppose the revenues of a company for four years, $V(t)$ in the above formula, have been

Year	2013	2014	2015	2016
Revenues	100	120	160	210

Calculate Compound annual Growth Rate.

- (a) =27.74% (b) 23.64% (c) 34.56% (d)None of these



Additional Question Bank

1. The difference between compound and simple interest at 5% per annum for 4 years on Rs. 20,000 is Rs.
 (a) 250 (b) 277 (c) 300 (d) 310
2. The compound interest on half-yearly rests on Rs. 10,000 the rate for the first and second years being 6% and for the third year 9% p.a. is Rs. _____
 (a) 2,200 (b) 2,287 (c) 2,285 (d) None
3. The present value of Rs. 10,000 due in 2 years at 5% p.a. compound interest when the interest is paid on yearly basis is Rs. _____
 (a) 9,070 (b) 9,000 (c) 9,061 (d) None
4. The present value of Rs. 10,000 due in 2 years at 5% p.a. compound interest when the interest is paid on half-yearly basis is Rs. _____
 (a) 9,070 (b) 9,069 (c) 9,061 (d) None
5. Johnson left Rs. 1,00,000 with the direction that it should be divided in such a way that his minor sons Tom, Dick and Harry aged 9, 12 and 15 years should each receive equally after attaining the age 25 years. The rate of interest being 3.5%, how much each son receive after getting 25 years old?
 (a) 50,000 (b) 51,994 (c) 52,000 (d) None
6. In how many years will a sum of money double at 5% p.a. compound interest?
 (a) 15 years 3 months (b) 14 years 2 months
 (c) 14 years 3 months (d) 15 years 2 months
7. In how many years a sum of money trebles at 5% p.a. compound interest payable on half-yearly basis?
 (a) 18 years 7 months (b) 18 years 6 months
 (c) 18 years 8 months (d) 22 years 3 months
8. A machine depreciates at 10% of its value at the beginning of a year. The cost and scrap value realized at the time of sale being Rs. 23,240 and Rs. 9,000 respectively. For how many years the machine was put to use?
 (a) 7 years (b) 8 years (c) 9 years (d) 10 years
9. A machine worth Rs. 4,90,740 is depreciated at 15% on its opening value each year. When its value would reduce to Rs. 2,00,000?
 (a) 4 years 6 months (b) 4 years 7 months
 (c) 4 years 5 months (d) 5 years 7 months approximately
10. A machine worth Rs. 4,90,740 is depreciated at 15% of its opening value each year. When its value would reduce by 90%?
 (a) 11 years 6 months (b) 11 years 7 months
 (c) 11 years 8 months (d) 14 years 2 months approximately
11. Alibaba borrows Rs. 6 lakhs Housing Loan at 6% repayable in 20 annual installments commencing at the end of the first year. How much annual payment is necessary.
 (a) 52,420 (b) 52,419 (c) 52,310 (d) 52,320



12. A sinking fund is created for redeeming debentures worth Rs. 5 lakhs at the end of 25 years. How much provision needs to be made out of profits each year provided sinking fund investments can earn interest at 4% p.a.?
 (a) 12,006 (b) 12,040 (c) 12,039 (d) 12,035
13. A machine costs Rs. 5,20,000 with an estimated life of 25 years. A sinking fund is created to replace it by a new model at 25% higher cost after 25 years with a scrap value realization of Rs. 25000. what amount should be set aside every year if the sinking fund investments accumulate at 3.5% compound interest p.a.?
 (a) 16,000 (b) 16,500 (c) 16,050 (d) 16,005
14. Raja aged 40 wishes his wife Rani to have Rs. 40 lakhs at his death. If his expectation of life is another 30 years and he starts making equal annual investments commencing now at 3% compound interest p.a. how much should he invest annually?
 (a) 84,448 (b) 84,450 (c) 84,449 (d) 84,077
15. Appu retires at 60 years receiving a pension of 14,400 a year paid in half-yearly installments for rest of his life after reckoning his life expectation to be 13 years and that interest at 4% p.a. is payable half-yearly. What single sum is equivalent to his pension?
 (a) 1,45,000 (b) 1,44,900 (c) 1,44,800 (d) 1,44,700
16. A stock pays annually an amount of Rs.10 from 6th year onwards, what is the present value of perpetuity, if the rate of interest is 20%?
 (a) 20.1 (b) 19.1 (c) 21.1 (d) 22.1
17. An amount is lent at nominal rate of 4.5% per annum compounded quarterly. What would be the gain in rupees over when compounded annually.
 (a) 0.056 (b) 0.045 (c) 0.076 (d) 0.085



Answer Sheet

Exercise

1.	b	2.	a	3.	c	4.	d	5.	a	6.	b	7.	a	8.	c	9.	a	10.	c
11.	b	12.	d	13.	b	14.	c	15.	a	16.	c	17.	c	18.	a	19.	b	20.	a
21.	c	22.	c	23.	b	24.	b	25.	b	26.	c	27.	a	28.	a	29.	a	30.	a
31.	c	32.	a	33.	c	34.	d	35.	b	36.	c	37.	d	38.	a	39.	a	40.	c
41.	b	42.	b	43.	a	44.	d	45.	d	46.	b	47.	a	48.	a	49.	a	50.	c
51.	a	52.	a	53.	c	54.	a	55.	b	56.	c	57.	b	58.	c	59.	d	60.	a
61.	b	62.	a	63.	c	64.	a	65.	c	66.	a	67.	b	68.	b	69.	c	70.	a
71.	d	72.	b	73.	a	74.	c	75.	a	76.	c	77.	a	78.	a	79.	b	80.	a
81.	b	82.	c	83.	a	84.	a	85.	d	86.	a	87.	b	88.	d	89.	b	90.	a
91.	a	92.	a	93.	b	94.	c	95.	c	96.	a	97.	b	98.	c	99.	c	100.	a
101.	b	102.	a	103.	c	104.	a	105.	a	106.	a	107.	a	108.	a	109.	a		

Additional Question Bank

1.	(d)	2.	(d)	3.	(a)	4.	(c)	5.	(d)	6.	(b)
7.	(d)	8.	(c)	9.	(d)	10.	(d)	11.	(c)	12.	(a)
13.	(c)	14.	(d)	15.	(b)	16.	(a)	17.	(c)		



5

Permutations & Combinations

Chapter

Business Mathematics

Exercise

Problem Based on Word's

- In how many ways can the letters of the word HEXAGON be permuted?
(a) 720 (b) 5040 (c) 740 (d) 640
- How many different words can be formed with letters of the word HARYANA?
(a) 240 (b) 360 (c) 840 (d) 640
- How many different words can be formed by using all the letters of the word ALLAHABAD?
(a) $9! / (4! \times 2!)$ (b) $11! / 4!$ (c) $11!$ (d) None
- The number of ways the letters of the word COMPUTER can be rearranged is:
(a) 40319 (b) 40340 (c) 40318 (d) None
- The number of ways in which the letters of the word "DOGMATIC" can be arranged is
(a) 40,319 (b) 40,320 (c) 40,321 (d) none of these
- In how many ways can the letters of the word PENCIL be arranged so that N is always next to E
(a) 120 (b) 130 (c) 140 (d) 160
- How many words can be formed of the letters in the word FAILURE, the four vowels always coming together?
(a) 576 (b) 586 (c) 476 (d) 486
- In how many can the letters of the word "LAUGHTER" be arranged so that the vowels may never be separated?
(a) 4320 (b) 4230 (c) 4370 (d) 4270
- The number of arrangements in which the letters of the word 'MONDAY' be arranged so that the words thus formed begin with M and do not end with N is
(a) 720 (b) 120 (c) 96 (d) none of these.
- The number of ways in which the letters of the word 'MOBILE' be arranged so that consonants always occupy the odd places is
(a) 36 (b) 63 (c) 30 (d) none of these
- In how many ways can the letters of the word "STRANGE" be arranged so that vowels may appear in the odd places?
(a) 1440 (b) 1460 (c) 1340 (d) 1360
- How many ways of the word MATHEMATICS can be arranged so that the vowels occur together?
(a) $11! / (2!)^3$ (b) $12! / (2!)^3$ (c) $(8! \times 4!) / (2!)^3$ (d) None
- The number of ways the letters of the word "TRIANGLE" to be arranged so that the word "ANGLE" will be always present is:
(a) 20 (b) 60 (c) 24 (d) 32
- How many 3 letter words can be made using the letters of the word ORIENTAL?
(a) 336 (b) 320 (c) 226 (d) 436



15. If the letters of word DAUGHTER are to be arranged so that vowels occupy the odd places then number of different words are
 (a) 2,880 (b) 676 (c) 625 (d) 576
16. The number of words that can be made by rearranging the letters of the word APURNA so that vowels and consonants appear alternate is
 (a) 18 (b) 35 (c) 36 (d) none of these
17. The number of arrangements of the letters of the word. 'COMMERCE' is
 (a) 8 (b) $8! / 2! 2! 2!$ (c) 7 (d) none of these
18. The number of different words that can be formed with 12 consonants and 5 vowels by taking 4 consonants and 3 vowels in each word is
 (a) $12C_4 \times 5C_3$ (b) $17C_7$
 (c) $4950 \times 7!$ (d) none of these
19. The ways of selecting 4 letters from the word 'EXAMINATION' is
 (a) 136 (b) 130 (c) 125 (d) none of these
20. How many words can be formed with the letters of the word 'ORIENTAL' so that A and E always occupy odd places.
 (a) 8540 (b) 8640 (c) 8460 (d) 8540

Problem Based on Number

21. How many four-digit number can be formed by using the digit 0, 1, 2, 3, 4, 5, 6, 7, 8, 9 with no digit repeated?
 (a) 4536 (b) 3604 (c) 3354 (d) 5554
22. The number of 4-digit numbers greater than 5,000 can be formed out of the digits 3,4,5,6 and 7 (No Digit is repeated) the number of such is
 (a) 72 (b) 27 (c) 70 (d) none of these
23. The number of numbers lying between 100 and 1000 can be formed with the digits 1,2,3,4, 5,6,7 is
 (a) 210 (b) 200 (c) 110 (d) none of these
24. The number of even numbers greater than 300 can be formed with the digits 1,2,3,4,5 without repetition is
 (a) 110 (b) 112 (c) 111 (d) none of these
25. The sum of all 4-digit number containing the digits 2, 4, 6, 8 without repetitions is
 (a) 1, 33,330 (b) 1, 22,220 (c) 2, 13,330 (d) none of these
26. Find the sum of all the four-digit numbers that formed with the digits 3,2,3,4.
 (a) 6666600 (b) 39996 (c) 33963 (d) none
27. How many numbers greater than 2000 can be formed with the digits 1, 2, 3, 4, 5 ?
 (a) 216 (b) 210 (c) 220 (d) 12440
28. In how many numbers greater than a million can be formed with the digits 4, 5, 5, 0, 4, 5, 3 ?
 (a) 260 (b) 360 (c) 280 (d) 380
29. The number of numbers lying between 10 and 1000 can be formed with the digits 2,3,4,0,8,9 is
 (a) 124 (b) 120 (c) 125 (d) none of these
30. The total number of 9-digit numbers of different digits is
 (a) $10! 9$ (b) $8! 9$ (c) $9! 9$ (d) none of these



Problems Based on Geometry

31. The number of straight lines obtained by joining 16 points on a plane, on twice of them being on the same line is
 (a) 120 (b) 110 (c) 210 (d) none of these
32. 8 Points are marked on the circumference of a circle. The number of chords obtained by joining these in pairs is
 (a) 25 (b) 27 (c) 28 (d) none of these
33. There are 12 points in a plane of which 5 are collinear. The number of triangles in
 (a) 200 (b) 211 (c) 210 (d) none of these
34. The number of diagonals in a decagon is
 (a) 30 (b) 35 (c) 45 (d) none of these
35. The number of parallelograms that can be formed from a set of four parallel lines intersecting another set of three parallel lines is
 (a) 6 (b) 18 (c) 12 (d) 9
36. The number of diagonals that Can be drawn by joining the angular points of a heptagon is:
 (a) 21 (b) 14 (c) 7 (d) 28

Circular Permutations

37. The number of ways in which 7 girls form a ring is
 (a) 700 (b) 710 (c) 720 (d) none of these
38. If 50 different jewels can be set to form a necklace then the number of ways is
 (a) $49! / 2$ (b) $50! / 2$ (c) $49!$ (d) none of these
39. 3 ladies and 3 gents can be seated at a round table so that any two and only two of the ladies sit together. The number of ways is
 (a) 70 (b) 27 (c) 72 (d) none of these
40. 5 persons are sitting in a round table in such way that tallest person is always on the right-side of the shortest person the number of such arrangements is
 (a) 6 (b) 8 (c) 24 (d) none of these
41. The number of ways in which 8 different beads be strung on a necklace is
 (a) 2500 (b) 2520 (c) 2250 (d) none of these

BASED ON THEOREMS

42. A person has 8 friends. The number of ways in which he may invite one or more of them to a dinner is.
 (a) 250 (b) 255 (c) 200 (d) none of these
43. The number of ways in which the letters of 10 different things taken 4 at a time in which one particular thing always occurs is
 (a) 2015 (b) 2016 (c) 2014 (d) none of these
44. The number of arrangements of 10 things taken 4 at a time in which one particular thing never occurs is
 (a) 3,020 (b) 3,025 (c) 3,024 (d) none of these
45. The number of ways in which a person can chose one or more of the four electrical appliances: T.V. Refrigerator. Washing Machine and a cooler is?
 (a) 15 (b) 25 (c) 24 (d) none of these
46. The number of ways in which 12 students can be equally divided into three groups is
 (a) 5775 (b) 7575 (c) 7755 (d) none of these
47. The number of ways in which 15 mangoes can be equally divided among 3 students is
 (a) $15! / 5!^4$ (b) $15! / 5!^3$ (c) $15! / 5!^2$ (d) none of these



MISCELLANEOUS

48. In how many ways 5 Sanskrit 3 English and 3 Hindi books be arranged keeping the books of the same language together?
 (a) $5! \cdot 3! \cdot 3! \cdot 3!$ (b) $5! \cdot 3! \cdot 3!$ (c) $11!$ (d) none
49. The number of ways a person can contribute to a fund out of 1 ten-rupee note, 1 five-rupee note, 1 two-rupee and 1 one-rupee note is
 (a) 15 (b) 25 (c) 10 (d) none of these
50. In how many ways can a student choose 5 courses out of 9 courses, if 2 courses are compulsory?
 (a) 35 (b) 25 (c) 45 (d) 15
51. 10 examination papers are arranged in such a way that the best and worst papers never come together. The numbers of arrangements is
 (a) $9! \cdot 8$ (b) $10!$ (c) $8! \cdot 9$ (d) none of these
52. If 12 school teams are participating in a quiz contest then the number of ways the first second and third positions may be won is
 (a) 1,230 (b) 1,320 (c) 3,210 (d) none of these
53. Mr. X and Mr. Y enter into a railway compartment having six vacant seats. The number of ways in which they can occupy the seats is
 (a) 25 (b) 31 (c) 32 (d) 30
54. The number of ways in which 6 men can be arranged in a row so that the particular 3 men sit together is
 (a) $4P_4$ (b) $4P_4 \times 3P_3$ (c) $4C_4$ (d) none of these
55. There are 5 speakers A, B, C, D and E. The number of ways in which A will speak always before B is
 (a) 24 (b) $4! \cdot 2$ (c) 5 (d) none of these
56. Out of 7 gents and 4 ladies a committee of 5 is to be formed. The number of committees such that each committee includes at least one lady is
 (a) 400 (b) 440 (c) 441 (d) none of these
57. At an election there are 5 candidates and 3 members are to be elected. A voter is entitled to vote for any number of candidates not greater than the number to be elected. The number of ways a voter chooses to vote is
 (a) 20 (b) 22 (c) 25 (d) none of these
58. A letter lock has three rings each marked with 10 different letters. In how many ways it is possible to make an unsuccessful attempt to open the lock?
 (a) 999 (b) 899 (c) 799 (d) 1001
59. There are 10 trains plying between Calcutta and Delhi. The number of ways in which a person can go from Calcutta to Delhi and return by a different train is
 (a) 92 (b) 90 (c) 80 (d) none of these
60. The number of ways in which 8 sweets of different sizes can be distributed among 8 persons of different ages so that the largest sweet always goes to be younger assuming that each one of them gets a sweet is
 (a) $\underline{8}$ (b) 5040 (c) 5039 (d) none of these
61. The total number of ways in which six '+' and four '-' signs can be arranged in a line such that no two '-' signs occur together is
 (a) $\underline{7} / \underline{3}$ (b) $\underline{6} \times \underline{7} / \underline{3}$ (c) 35 (d) none of these
62. The Supreme Court has given a 6 to 3 decision upholding a lower court; the number of ways it can give a majority decision reversing the lower court is
 (a) 256 (b) 276 (c) 245 (d) 226.



63. Five bulbs of which three are defective are to be tried in two bulb points in a dark room. Number of trials the room shall be lighted is
 (a) 6 (b) 8 (c) 5 (d) 7
64. The number of 4-digit numbers formed with the digits 1, 1, 2, 2, 3, 4 is
 (a) 100 (b) 101 (c) 201 (d) 102
65. 5 letters are written and there are five letter-boxes. The number of ways the letters can be dropped into the boxes, are in each
 (a) 119 (b) 120 (c) 121 (d) none of these

Algebraic Based Problems

66. The value of $1.3.5.7.9.....(2n - 1)$ is
 (a) $\frac{2n!}{4!}$ (b) $\frac{2n!}{2.n!}$ (c) $\frac{(2n)!}{2^n.n!}$ (d) $\frac{(3n)!}{2^n.n!}$
67. The LCM of $6!$ $7!$ & $8!$ Is
 (a) $8!$ (b) $7!$ (c) $6!$ (d) none
68. HCF of $3!$ $7!$ & $5!$ Is
 (a) $5!$ (b) $7!$ (c) $3!$ (d) none
69. If $\frac{1}{4!} + \frac{1}{5!} = \frac{x}{6!}$; the value of x is
 (a) 26 (b) 36 (c) 52 (d) none
70. If ${}^{18}C_r = {}^{18}C_{r+2}$ the value of rC_5 is
 (a) 55 (b) 50 (c) 56 (d) None
71. If ${}^{13}C_6 + 2 {}^{13}C_5 + {}^{13}C_4 = {}^{15}C_x$, value of x is
 (a) 6 or 7 (b) 6 or 8 (c) 6 or 9 (d) None
72. If ${}^{10}P_r = 604800$ and ${}^{10+C_r} = 120$. Find the value of r.
 (a) 7 (b) 2 (c) 5 (d) 6
73. If ${}^{2n}C_3 : {}^nC_2 = 44 : 3$, then value of n is
 (a) 8 (b) 6 (c) 18 (d) 5
74. If ${}^{167}C_{90} + {}^{167}C_x = {}^{168}C_x$ then value of x is
 (a) 89 (b) 90 (c) 91 (d) 92
75. If ${}^{1000}C_{98} = {}^{999}C_{97} + x {}^{999}C_{90}$, find the value of x
 (a) 999 (b) 989 (c) 889 (d) 898
76. If ${}^{n+1}C_4 = 9 \times {}^nC_2$, find the value of n.
 (a) $n = 11$ (b) $n = 10$ (c) $n = 9$ (d) $n = -10$
77. Find $\sum_{r=1}^5 C(5, r)$
 (a) 41 (b) 31 (c) 51 (d) 61
78. If ${}^{n+1}C_{r+1} : {}^nC_r : {}^{n-1}C_{r-1} = 8 : 3 : 1$, then n is equal to:
 (a) 20 (b) 16 (c) 10 (d) 15
79. If ${}^nP_r = 720$ and ${}^nC_r = 120$, then r is
 (a) 3 (b) 4 (c) 5 (d) 6



Additional Question Bank

- How many 3 letter words can be formed by using the letters of the word "SQUARE"
(a) 100 (b) 120 (c) 150 (d) none
- 1st, 2nd and 3rd prizes are to be awarded at a CA farewell in which 13 exhibits have been entered. In how many different ways can the prizes be awarded?
(a) 1716 (b) 1816 (c) 1516 (d) none
- How many 3 digits numbers can be made by using digits 9, 8, 7, 6, 5, when repetitions of digits are
(1) not allowed (2) allowed.
(a) 60 and 125 (b) 80 and 135 (c) 60 and 120 (d) none
- How many 4 digits even numbers can be made by using digits 0, 3, 5, 7, 9 repetitions of digits are allowed.
(a) 100 (b) 625 (c) 120 (d) none of these
- How many telephone connections may be allotted with 8 digits from the numbers 0, 1, 2,.....9?
(a) 10^8 (b) $10!$ (c) $9!$ (d) $^{10}P_8$
- In how many ways can three prizes be given away to 5 students when each student is eligible for any prizes?
(a) 125 (b) 729 (c) 625 (d) none
- Six boys and five girls are to be seated for a photograph in a row such that no two girls sit together and no two boys sit together. Find the number of ways in which this can be done.
(a) 86400 (b) 14400 (c) 518400 (d) none
- How many words can be made by using all letters of the word "TENDULKAR" so that each word starts with word TEN and ends with letter R and letters D, U, L are always together
(a) $5!$ (b) 36 (c) 6 (d) none
- Find the number of different poker hands in a pack of 52 playing cards.
(a) 2598960 (b) 3585620 (c) 3298960 (d) none
- In how many ways can a team of 11 be chosen from 14 football players, two of them can only be goalkeeper?
(a) 150 (b) 132 (c) 114 (d) none
- A candidate is required to answer 6 out of 10 questions, which are divided into two groups each containing 5 questions and he is not permitted to attempt more than 4 from each group. In how many ways can he make up his choice?
(a) 315 (b) 250 (c) 450 (d) 200
- Find the number of words which can be formed with two different consonants & one vowels out of 7 different consonants and 3 different vowels; the vowel should be between two consonants.
(a) 126 (b) 210 (c) 120 (d) none
- In how many ways can zero or more letters be selected from the letters AAAAA.
(a) 4 (b) 5 (c) 6 (d) none
- From 5 apples, 4 oranges and 3 mangoes how many selections of fruits can be made?
(a) 120 (b) 119 (c) 118 (d) none
- Find the number of divisors of 21600
(a) 72 (b) 76 (c) 71 (d) none

Answer Sheet

Exercise

1.	b	2.	c	3.	a	4.	a	5.	b	6.	a	7.	a	8.	a	9.	c	10.	a
11.	a	12.	c	13.	c	14.	a	15.	a	16.	c	17.	b	18.	c	19.	a	20.	b
21.	a	22.	a	23.	a	24.	c	25.	a	26.	b	27.	a	28.	b	29.	c	30.	c
31.	a	32.	c	33.	c	34.	b	35.	b	36.	b	37.	c	38.	a	39.	c	40.	a
41.	b	42.	b	43.	b	44.	c	45.	a	46.	a	47.	b	48.	a	49.	a	50.	a
51.	a	52.	b	53.	d	54.	b	55.	a	56.	c	57.	c	58.	a	59.	b	60.	b
61.	c	62.	a	63.	d	64.	d	65.	b	66.	c	67.	a	68.	b	69.	b	70.	c
71.	c	72.	a	73.	b	74.	c	75.	a	76.	a	77.	b	78.	d	79.	a		

Additional Question Bank

1.	b	2.	a	3.	a	4.	a	5.	a	6.	a	7.	a	8.	b	9.	a	10.	b
11.	d	12.	a	13.	c	14.	b	15.	a										



Summary Notes



6

Sequence & Series

Business Mathematics

Exercise

Arithmetic Progression

- Which term of the progression $-1, -3, -5? \dots$ Is-39
(a) 21st (b) 20th (c) 19th (d) none of these
- The value of x such that $8x + 4, 6x - 2, 2x + 7$ will form an AP is
(a) 15 (b) 2 (c) 15/2 (d) none of these
- The m^{th} term of an A.P. is n and n^{th} term is m . The r the term of it is
(a) $m + n + r$ (b) $n + m - 2r$ (c) $m + n + r/2$ (d) none of these
- The 20th term of the progression $1, 4, 7, 10, \dots$ is
(a) 58 (b) 52 (c) 50 (d) none of these
- The last term of the series $5, 7, 9, \dots$ to 21 terms is
(a) 44 (b) 43 (c) 45 (d) none of these
- The last term of the A.P. $0.6, 1.2, 1.8, \dots$ to 13 terms is
(a) 8.7 (b) 7.8 (c) 7.7 (d) none of these
- The sum of the series $9, 5, 1, \dots$ to 100 terms is
(a) -18900 (b) 18900 (c) 19900 (d) none of these
- The number of numbers between 74 and 25556 divisible by 5 is
(a) 5090 (b) 5097 (c) 5095 (d) none of these
- The first term of an A.P is 14 and the sums of the first five terms and the first ten terms are equal in magnitude but opposite in sign. The 3rd term of the AP is
(a) $6\frac{4}{11}$ (b) 6 (c) 4/11 (d) none of these
- The sum of a certain number of terms of an AP series $-8, -6, -4, \dots$ is 52. The number of terms is
(a) 12 (b) 13 (c) 11 (d) none of these
- The first and the last term of an AP are -4 and 146 . The sum of the terms is 7171 . The number of terms is
(a) 101 (b) 100 (c) 99 (d) none of these
- The sum of three integers in AP is 15 and their product is 80. The integers are
(a) 2, 8, 5 (b) 8, 2, 5 (c) 2, 5, 8 (d) none of these
- The sum of all positive integral multiples of 3 less than 100 is
(a) 1584 (b) 1665 (c) 1683 (d) None of these
- In an A.P. 3rd term is 18 & 7th term is 30, the sum of its 17 terms is
(a) 600 (b) 612 (c) 624 (d) None of these
- If the 9th term of an A.P. is zero, $\frac{t_{29}}{t_{19}}$ is
(a) 1 (b) 2 (c) 3 (d) 4



16. A person saved Rs. 16,500 in ten years. In each year after 1st year, he saved Rs. 100 more than he did in the preceding year. The amount of money he saved in the 1st year was
 (a) 1000 (b) 1500 (c) 1200 (d) None of these
17. If sum of n terms of an A.P. is $3n^2 + 5n$ & $T_m = 164$, then $m = ?$
 (a) 26 (b) 27 (c) 28 (d) 29
18. In an A.P., if $S_{10} = 550$ and $a = 100$, then find d .
 (a) 10 (b) -10 (c) 20 (d) -20
19. If 4, A_1 , A_2 , A_3 , 28 are in A.P., then the value of A_3 is equal to
 (a) 24 (b) 22 (c) 19 (d) 23

Arithmetic Mean

20. The arithmetic means between 33 and 77 is
 (a) 50 (b) 45 (c) 55 (d) none of these
21. The 4 arithmetic means between -2 and 23 are
 (a) 3, 13, 8, 18 (b) 18, 3, 8, 13
 (c) 3, 8, 13, 18 (d) none of these
22. The two-arithmetic means between -6 and 14 is
 (a) $\frac{2}{3}, \frac{1}{3}$ (b) $\frac{2}{3}, 7\frac{1}{3}$
 (c) $-\frac{2}{3}, -7\frac{1}{3}$ (d) none of these

Geometric Progression

23. The 7th term of the series 6, 12, 24,is
 (a) 384 (b) 834 (c) 438 (d) none of these
24. t_8 of the series 6, 12, 24...is
 (a) 786 (b) 768 (c) 867 (d) none of these
25. t_{12} of the series - 128, 64, -32....is
 (a) -1/6 (b) 16 (c) 1/16 (d) none of these
26. The 4th term of the series 0.04, 0.2, 1.....is
 (a) 0.5 (b) $\frac{1}{2}$ (c) 5 (d) none of these
27. The last term of the series 1, 2, 4....to 10 terms is
 (a) 512 (b) 256 (c) 1024 (d) none of these
28. The last term of the series 1, -3, 9, -27 up to 7 terms is
 (a) 297 (b) 729 (c) 927 (d) none of these
29. The sum of the series -2, 6, -18.....to 7 terms is
 (a) -1094 (b) 1094 (c) -1049 (d) none of these
30. The sum of the series 243, 81, 27, to 8 terms is
 (a) 36 (b) $\left(36\frac{13}{30}\right)$ (c) $36\frac{1}{9}$ (d) none of these
31. The sum of the series $\frac{1}{\sqrt{3}} + 1 + \frac{3}{\sqrt{3}} + \dots$ to 18 terms is
 (a) $9841\frac{(1+\sqrt{3})}{\sqrt{3}}$ (b) 9841 (c) $\frac{9841}{\sqrt{3}}$ (d) none of these



32. The second term of a G P is 24 and the fifth term is 81. The series is
 (a) 16, 36, 24, 54... (b) 24, 36, 53...
 (c) 16, 24, 36, 54... (d) none of these
33. The sum of 3 numbers of a G P is 39 and their product is 729. The numbers are
 (a) 3, 27, 9 (b) 9, 3, 27 (c) 3, 9, 27 (d) none of these
34. If you save 1 paise today, 2 paise the next day 4 paise the succeeding day and soon, then your total savings in two weeks will be
 (a) Rs. 163 (b) Rs. 183 (c) Rs. 163.83 (d) none of these
35. Sum of the series $1 + 3 + 9 + 27 + \dots$ is 364. the number of terms is
 (a) 5 (b) 6 (c) 11 (d) none of these
36. The product of 3 numbers in G P is 729 and the sum of squares is 819. The numbers are.
 (a) 9, 3, 27 (b) 27, 3, 9 (c) 3, 9, 27 (d) none of these
37. The sum of the infinite GP $14, -2, +2/7, -2/49, + \dots$ is
 (a) $4\frac{1}{12}$ (b) $12\frac{1}{4}$ (c) 12 (d) none of these
38. The number of terms to be taken so that $1 + 2 + 4 + 8 + \dots$ will be 8191 is
 (a) 10 (b) 13 (c) 12 (d) none of these
39. The sum of the infinite series $1 + 2/3 + 4/9 + \dots$ is
 (a) $1/3$ (b) 3 (c) $2/3$ (d) none of these
40. The sum of the first two terms of a G.P. is $5/3$ and the sum to infinity of the series is 3. The common ratio is
 (a) $1/3$ (b) $2/3$ (c) $-2/3$ (d) none of these

Geometric Mean

41. Four geometric means between 4 and 972 are
 (a) 12, 36, 108, 324 (b) 12, 24, 108, 320
 (c) 10, 36, 108, 320 (d) none of these
42. If Geometric mean (G.M.) of a, b, c, d is 3, then G.M. of $\frac{1}{a}, \frac{1}{b}, \frac{1}{c}, \frac{1}{d}$ will be:
 (a) $1/3$ (b) 3 (c) 81 (d) $1/81$

Harmonic Progression

43. The 10th term of H.P. $\frac{1}{5}, \frac{4}{19}, \frac{2}{9}, \frac{14}{17}, \dots$ is
 (a) $\frac{11}{4}$ (b) $\frac{14}{4}$ (c) $\frac{11}{9}$ (d) none of these
44. Calculate the sum of first 30 terms of the H.P. $-2, -5, -8, -11, \dots$
 (a) $-\frac{1}{1365}$ (b) $\frac{2}{1365}$ (c) $\frac{1}{1265}$ (d) none of these

Harmonic Mean

45. The Harmonic Mean of 2 and 13 is
 (a) $12/5$ (b) $5/12$ (c) $5/2$ (d) none of these
46. The two H.M Between $\frac{1}{2}$ and $\frac{4}{17}$ are
 (a) $12/5$ (b) $5/12$ (c) $5/2$ (d) none of these
47. If H be the Harmonic Mean Between a and b then $\frac{H}{a} + \frac{H}{b}$
 (a) 1 (b) 2 (c) ab (d) none of these



Relationship Between AM, GM, HM

48. If AM and HM of two numbers are 32 and 2 respectively then G.M. is
 (a) 8 (b) $4\sqrt{2}$ (c) 64 (d) None
49. If two numbers x and y are such that their AM exceeds their GM by $\frac{3}{2}$ and the GM exceeds their HM by $\frac{6}{5}$, then the values of (x, y)
 (a) 8,5 (b) 3,12 (c) 6,4 (d) none of these

Series Is Given & Formula Is Asked

Nth Term Formula Is Asked

50. The n th element of the sequence 1, 3, 5, 7,is
 (a) n (b) $2n - 1$ (c) $2n + 1$ (d) none of these
51. The n th element of the sequence -1,2, -4,8.....is
 (a) $(-1)^n 2^{n-1}$ (b) 2^{n-1} (c) 2^{n+x} (d) none of these
52. Find the sum to n terms of the series. $\frac{1}{2 \times 5} + \frac{1}{5 \times 8} + \frac{1}{8 \times 11} + \dots$
 (a) $\frac{n}{2(3n+2)}$ (b) $\frac{n}{2(3n-2)}$ (c) $\frac{n}{(3n+2)}$ (d) $\frac{n}{(3n-2)}$

Sum Formula Is Asked

53. Sum of n terms of the series $4 + 44 + 444 + \dots$ is
 (a) $\frac{4}{9} \{10/9 (10^n - 1) - n\}$ (b) $\frac{10}{9} (10^n - 1) - n$
 (c) $\frac{4}{9} (10^n - 1) - n$ (d) none of these
54. Sum of n terms of the series $0.1 + 0.11 + 0.111 + \dots$ is
 (a) $\frac{1}{9} \{n - (1 - (0.1)^n)\}$ (b) $\frac{1}{9} \{(1 - (0.1)^n)/9\}$
 (c) $n - 1 - (0.1)^n/9$ (d) none of these
55. The sum of $1.03 + (1.03)^2 + (1.03)^3 + \dots$ to n terms is
 (a) $103 \{(1.03)^n - 1\}$ (b) $103/3 \{(1.03)^n - 1\}$
 (c) $(1.03)^n - 1$ (d) none of these

Formula Is Given & Series Is Asked

Nth Term Formula Is Given

56. The first three terms of sequence when n th term t_n is $n^2 - 2n$ are
 (a) -1, 0, 3 (b) 1, 0, 2 (c) -1, 0, -3 (d) none of these

Sum Formula Is Given

57. The n th term of the series whose sum to n terms is $5n^2 + 2n$ is
 (a) $3n - 10$ (b) $10n - 2$ (c) $10n - 3$ (d) none of these
58. The sum of n terms of an AP is $3n^2 + 5n$. The series is.
 (a) 8, 14, 20, 26 (b) 8, 22, 42, 68 (c) 22, 68, 114, .. (d) none of these

Advance Problems

59. If p, q and r are in A.P. and x, y, z are in G.P. then $x^{q+r}, y^{r-p}, z^{p-q}$ is equal to
 (a) 0 (b) -1 (c) 1 (d) none of these
60. If a, b, c, d are in A.P. then:
 (a) $a^2 - 3b^2 + 3c^2 - d^2 = 0$ (b) $a^2 - 3b^2 + 3c^2 + d^2 = 0$
 (c) $a^2 + 3b^2 + 3c^2 - d^2 = 0$ (d) None
61. Given x, y, z are in G.P. and $x^p = y^q = z^r$, then $1/p, 1/q, 1/r$ are in
 (a) A.P. (b) G.P.
 (c) Both A.P. and G.P. (d) none of these



62. If x, y, z are in G.P., then
 (a) $y^2 = xz$ (b) $y(z^2 + x^2) = x(z^2 + y^2)$
 (c) $2y = x + z$ (d) none of these
63. If x, y, z are in A.P. and $x, y, (z + 1)$ are in G.P. then
 (a) $(x - z)^2 = 4x$ (b) $z^2 = (x - y)$
 (c) $z = x - y$ (d) none of these
64. The numbers $x, 8, y$ are in G.P. and the numbers $x, y, -8$ are in A. P. The value of x and y are
 (a) $(-8, -8)$ (b) $(16, 4)$ (c) $(8, 8)$ (d) none of these
65. The sum of three numbers in G.P. is 70. If the two extremes be multiplied each by 4 and the mean by 5, the products are in AP. The numbers are
 (a) 12, 18, 40 (b) 10, 20, 40 (c) 40, 20, 10 (d) none of these
66. If S_1, S_2, S_3 are S_n of 3 A. P., where 'a' of all is 1 & 'd' is 1, 2, 3 resp. then $\frac{(s_1 + s_3)}{s_2}$ is.
 (a) 1 (b) 2 (c) 3 (d) none of these
67. The sum of all-natural numbers from 100 to 300 which are exactly divisible by 4 or 5 is
 (a) 10200 (b) 15200 (c) 16200 (d) None
68. If a, b, c, d are in geometric progression, then $(b - c)^2 + (c - a)^2 + (d - b)^2$ is equal to
 (a) $(a - b)^2$ (b) $(c - d)^2$ (c) $(a - d)^2$ (d) $(b - d)^2$
69. If $\frac{1}{x+y}, \frac{1}{2y}, \frac{1}{y+z}$ are in A.P., then x, y, z are in
 (a) G.P. (b) A.P.
 (c) Both (a)&(b) (d) None
70. Let A_1, A_2 be two A. M's & G_1, G_2 be two G. M's between x & y then $\frac{A_1 + A_2}{G_1 G_2}$ is equal to
 (a) $\frac{xy}{x+y}$ (b) $\frac{x+y}{xy}$ (c) $\frac{x-y}{xy}$ (d) $\frac{x-y}{x+y}$
71. If $a, 4, b$ are in A.P., $a, 2, b$ are in G.P., then $\frac{1}{a}, 1, \frac{1}{b}$ are in
 (a) A.P. (b) G.P. (c) H.P. (d) none of these
72. t_4 of a G.P. in $x, t_{10} = y$ and $t_{16} = z$, Then
 (a) $x^2 = yz$ (b) $z^2 = xy$ (c) $y^2 = zx$ (d) none of these
73. If $\frac{1}{b+c}, \frac{1}{c+a}, \frac{1}{a+b}$ are in A.P., then a^2, b^2, c^2 are in:
 (a) G.P. (b) A.P. (c) H.P. (d) none of these
74. Find n such that $\frac{a^{n+1} + b^{n+1}}{a^n + b^n}$ may be the **AM** between a and b :
 (a) $1/2$ (b) 1 (c) $-1/2$ (d) 0
75. Find n such that $\frac{a^{n+1} + b^{n+1}}{a^n + b^n}$ may be the **GM** between a and b :
 (a) $1/2$ (b) 1 (c) $-1/2$ (d) 0
76. Find n such that $\frac{a^{n+1} + b^{n+1}}{a^n + b^n}$ may be the **HM** between a and b :
 (a) $1/2$ (b) -1 (c) $-1/2$ (d) 0

Divisibility Test

77. $2^{4n} - 1$ is divisible by
(a) 5 (b) 24 (c) 15 (d) 34
78. $3^n - 2n - 1$ is divisible by
(a) 25 (b) 4 (c) 36 (d) 24



Additional Question Bank

- Given x, y, z are in G.P and $x^p = y^q = z^r$, then $1/p, 1/q, 1/r$ are in
 - A.P
 - G.P
 - Both A.P and G.P
 - none of these
- The sum to ∞ of the series $-5, 25, -125, 625, \dots$ can be written as
 - $\sum_{k=1}^{\infty} (-5)^k$
 - $\sum_{k=1}^{\infty} 5^k$
 - $\sum_{k=1}^{\infty} -5^k$
 - none of these
- If S_n the sum of first n terms in a series is given by $2n^2 + 3n$ the series is in _____.
 - A.P
 - G.P
 - H.P
 - none of these
- The sum up to infinity of the series $(1 + 2^{-2}) + (2^{-1} + 2^{-4}) + (2^{-2} + 2^{-6}) + \dots$
 - $7/3$
 - $3/7$
 - $4/7$
 - none of these
- The sum up to infinity of the series $4/7 - 5/7^2 + 4/7^3 - 5/7^4 + \dots$ is
 - $23/48$
 - $25/48$
 - $1/2$
 - none of these
- If the third term of a G.P is the square of the first and the fifth term is 64 the series would be _____.
 - $4 + 8 + 16 + 32 + \dots$
 - $4 - 8 + 16 - 32 + \dots$
 - both
 - none of these
- Sum up to ∞ of the series $1/2 + 1/3^2 + 1/2^3 + 1/3^4 + 1/2^5 + 1/3^6 + \dots$ is
 - $19/24$
 - $24/19$
 - $5/24$
 - none of these
- If $1 + a + a^2 + \dots \infty = x$ and $1 + b + b^2 + \dots \infty = y$ then $1 + ab + a^2b^2 + \dots \infty = x$ is given by ____
 - $\frac{(xy)}{(x+y-1)}$
 - $\frac{(xy)}{(x-y-1)}$
 - $\frac{(xy)}{(x+y+1)}$
 - none of these
- In a G.P if the $(p+q)^{\text{th}}$ term is m and the $(p-q)^{\text{th}}$ term is n then the p^{th} term is _____.
 - $(mn)^{1/2}$
 - mn
 - $(m+n)$
 - $(m-n)$
- The sum of p term of an A.P is q and the sum of q terms is p . The sum of $p+q$ terms is _____.
 - $-(p+q)$
 - $p+q$
 - $(p-q)^2$
 - $p^2 - q^2$
- The sum of n terms of two A.P are in the ratio of $(7n-5)/(5n+17)$. Then the ____ term of the two series are equal.
 - 12
 - 6
 - 3
 - none
- If a, b, c are in A.P then $a^2(b+c), b^2(c+a), c^2(a+b)$ are in _____.
 - A.P
 - G.P
 - H.P
 - none
- If S_1, S_2, S_3 be the respectively the sum of terms of $n, 2n, 3n$ an A.P. the value of $\frac{S_3}{(S_2 - S_1)}$ is given by ____
 - 1
 - 2
 - 3
 - None
- If S_1, S_2, S_3 be the sums of n terms of three A.P.s the first term of each being unity and the respective common differences 1, 2, 3 then $\frac{S_3}{(S_2 - S_1)}$ is _____.
 - 1
 - 2
 - 1
 - None



15. The sum of n terms of $(x + y)^2, (x^2 + y^2), (x - y)^2, \dots$ is
- $(x + y)^2 - 2(n - 1)xy$
 - $n(x + y)^2 - n(n - 1)xy$
 - both the above
 - None
16. The sum of n terms of $\frac{1}{n}(n - 1), \frac{1}{n}(n - 2), \frac{1}{n}(n - 3), \dots$ is
- 0
 - $\frac{1}{2}(n - 1)$
 - $\frac{1}{2}(n + 1)$
 - None
17. The sum of n terms of the series $2.4.6 + 4.6.8 + 6.8.10 + \dots$ is
- $2n(n^3 + 6n^2 + 11n + 6)$
 - $2n(n^3 - 6n^2 + 11n - 6)$
 - $n(n^3 + 6n^2 + 11n + 6)$
 - $n(n^3 + 6n^2 + 11n - 6)$
18. The sum of n terms of the series $1 + (1 + 1/3) + (1 + 1/3 + 1/3^2) + \dots$ is
- $\frac{3}{2}(1 - 3^{-n})$
 - $\frac{3}{2}[n - \frac{1}{2}(1 - 3 - n)]$
 - Both
 - None
19. The least value of n for which the sum of n terms of the series $1 + 3 + 3^2 + \dots$ is greater than 7000 is _____.
- 9
 - 10
 - 8
 - 7
20. If 'S' be the sum, 'P' the product and 'R' the sum of the reciprocals of n terms in a G.P. then 'P' is the _____ of S^n and R^{-n} .
- Arithmetic Mean
 - Geometric Mean
 - Harmonic Mean
 - None
21. Sum upto ∞ of the series $8 + 4\sqrt{2} + 4 + \dots$ is
- $8(2 + \sqrt{2})$
 - $8(2 - \sqrt{2})$
 - $4(2 + \sqrt{2})$
 - $4(2 - \sqrt{2})$



22. Sum upto ∞ of the series $1/2 + 1/3^2 + 1/2^3 + 1/3^4 + 1/2^5 + 1/3^6 + \dots$ is
 (a) $19/24$ (b) $24/19$ (c) $5/24$ (d) None
23. If $x = a + \frac{a}{r} + \frac{a}{r^2} + \dots \infty$, $y = b - \frac{b}{r} + \frac{b}{r^2} - \dots \infty$, and $z = c + \frac{c}{r^2} + \frac{c}{r^4} + \dots \infty$, then the value of $\frac{xy}{z} - \frac{ab}{c}$ is
 (a) 0 (b) 1
 (c) -1 (d) None
24. If S_1, S_2, S_3, S_n are the sums of infinite G.P.s whose first terms are 1, 2, 3,n and whose common ratios are $1/2, 1/3, \dots, 1/(n+1)$ then the value of $S_1 + S_2 + S_3 + \dots + S_n$ is
 (a) $(n/2)(n+3)$
 (b) $(n/2)(n+2)$
 (c) $(n/2)(n+1)$
 (d) $n^2/2$
25. If the sum of n terms of a G.P. with first term 1 and common ratio $1/2$ is $1 + 127/128$, the value of n is _____.
 (a) 8 (b) 5 (c) 3 (d) None
26. The sum up to infinity of the series $\sqrt{2} + 1/\sqrt{2} + 1/(2\sqrt{2}) + \dots$ is
 (a) $2\sqrt{2}$ (b) 2 (c) 4 (d) None

Answer Sheet

Exercise

1.	b	2.	c	3.	b	4.	a	5.	c	6.	b	7.	a	8.	b	9.	d	10.	b
11.	a	12.	c	13.	c	14.	b	15.	b	16.	c	17.	b	18.	b	19.	b	20.	c
21.	c	22.	b	23.	a	24.	b	25.	c	26.	c	27.	a	28.	b	29.	a	30.	d
31.	a	32.	c	33.	c	34.	c	35.	b	36.	c	37.	b	38.	b	39.	b	40.	c
41.	a	42.	c	43.	a	44.	a	45.	a	46.	a	47.	b	48.	a	49.	b	50.	b
51.	a	52.	a	53.	a	54.	a	55.	b	56.	a	57.	c	58.	a	59.	c	60.	a
61.	a	62.	a	63.	a	64.	b	65.	b	66.	b	67.	b	68.	c	69.	a	70.	b
71.	a	72.	c	73.	b	74.	d	75.	c	76.	b	77.	c	78.	b				

Additional Question Bank

1.	a	2.	a	3.	a	4.	a	5.	a	6.	a	7.	a	8.	a	9.	a	10.	a
11.	b	12.	a	13.	c	14.	b	15.	B	16.	b	17.	a	18.	b	19.	a	20.	b
21.	a	22.	a	23.	a	24.	a	25.	26.	a									



7A

Sets

Business Mathematics

Exercise

Basics

- If $A = \{2, 5, 6, 8\}$, then $n(A)$ is
 (a) 2 (c) 5
 (b) 4 (d) 1
- If A has 70 elements, B has 32 elements and $A \cap B$ has 22 elements then $A \cup B$ is
 (a) 60 (c) 80
 (b) 124 (d) none of these
- E is a set of positive even number and O is a set of positive odd numbers, then $E \cup O$ is a
 (a) Set of whole numbers (c) a set of rational number
 (b) N (d) none of these
- If A has 32 elements, B has 42 elements and $A \cup B$ has 62 elements, the number of elements in $A \cap B$ is
 (a) 12 (c) 10
 (b) 74 (d) none of these
- If $n(P) = 3$ and $n(Q) = 4$, then $n(P \times Q)$ is
 (a) 3 (c) 12
 (b) 4 (d) 1
- If the set P has 3 elements, Q four and R two then the set $P \times Q \times R$ contains
 (a) 9 elements (c) 24 elements
 (b) 20 elements (d) none of these

Method to Write Set

- Represent the following sets in set notation: - set of all alphabets in English language set of all odd integers less than 25 set of all integers set of positive integers x satisfying the equation $x^2 + 5x + 7 = 0$
 (a) $A = \{x: x \text{ is an alphabet in English}\}$ $I = \{x: x \text{ is an odd integer} > 25\} = \{2, 4, 6, 8, \dots\}$ $I = \{x: x^2 + 5x + 7 = 0\}$
 (b) $A = \{x: x \text{ is an alphabet in English}\}$ $I = \{x: x \text{ is an odd integers} < 25\} = \{1, 3, 5, 7, \dots\}$ $I = \{x: x^2 + 5x + 7 = 0\}$
 (c) $A = \{x: x \text{ is an alphabet in English}\}$ $I = \{x: x \text{ is an odd integer} \leq 25\} = \{1, 3, 5, 7, \dots\}$ $I = \{x: x^2 + 5x + 7 = 0\}$
 (d) None of these



8. Rewrite the following sets in a set builder form: -
 $A = \{a e i o u\}$ $B = \{1 2 3 4 \dots\}$ C is a set of integers between -15 and 15.
- (a) $A = \{x: x \text{ is a constant}\}$ $B = \{x: x \text{ is an irrational number}\}$ $C = \{x: -15 < x < 15 \mid x \text{ is a fraction}\}$
- (b) $A = \{x: x \text{ is a vowel}\}$ $B = \{x: x \text{ is an natural number}\}$ $C = \{x: -15 \leq x \leq 15 \mid x \text{ is a whole number}\}$
- (c) $A = \{x: x \text{ is a vowel}\}$ $B = \{x: x \text{ is an natural number}\}$ $C = \{x: -15 < x < 15 \mid x \text{ is a whole number}\}$
- (d) None of these
9. What is the relationship between the following sets?
 $A = \{x: x \text{ is a letter in the word flower}\}$
 $B = \{x: x \text{ is a letter in the word flow}\}$
 $C = \{x: x \text{ is a letter in the word wolf}\}$
 $D = \{x: x \text{ is a letter in the word follow}\}$
- (a) $B = C = D$ and all these are subsets of the set A
- (b) $B = C \neq D$
- (c) $B \neq C \neq D$
- (d) None of these
10. Following set notations represent: $A \subset C$; $x \notin A$; $A \supset B$; $\{0\}$; $A \not\subset B$
- (a) A is a proper subset of B
 x is not an element of A
 A contains B
 singleton with an only element zero
 A is not contained in B
- (b) A is a proper subset of B
 x is an element of A
 A contains B
 singleton with an only element zero
 A is contained in B
- (c) A is a proper subset of B
 x is not an element of A
 A does not contains B
 contains elements other than zero
 A is not contained in B
- (d) None
11. Represent the following sets in set notation: -
 Set of all alphabets in English language,
 set of all odd integers less than 25,
 set of all odd integers,
 set of positive integers x satisfying the equation $x^2+5x+7=0$:
- (a) $A = \{x: x \text{ is an alphabet in English}\}$, $I = \{x: x \text{ is an odd integer} > 25\}$, $J = \{2, 4, 6, 8 \dots\}$ $K = \{x: x^2+5x+7=0\}$
- (b) $A = \{x: x \text{ is an alphabet in English}\}$, $I = \{x: x \text{ is an odd integer} < 25\}$, $J = \{1, 3, 5, 7 \dots\}$ $K = \{x: x^2+5x+7=0\}$
- (c) $A = \{x: x \text{ is an alphabet in English}\}$, $I = \{x: x \text{ is an odd integer} \notin 25\}$, $J = \{1, 3, 5, 7 \dots\}$ $K = \{x: x^2+5x+7=0\}$
- (d) None



22. Equal sets are –
 (a) Equivalent (c) null
 (b) Equal (d) singleton
23. If cardinal number of two finite sets is same, then the sets are-
 (a) Equivalent (c) null
 (b) Equal (d) singleton
24. The range set of a constant function is a –
 (a) Disjoint set (c) void set
 (b) Singleton set (d) infinite set
25. The number of subsets of a set containing n elements is
 (a) 2^n (c) n
 (b) 2^{-n} (d) none of these
26. A set containing 4 elements have –
 (a) 15 subsets (c) 14 subsets
 (b) 16 subsets (d) 13 subsets
27. The number of subsets of the set $\{2, 3, 5\}$ is
 (a) 3 (c) 6
 (b) 8 (d) none of these
28. Let $A = \{a, b\}$ set of subsets of A is called power set of A denoted by $P(A)$. now $n(P(A))$ is
 (a) 2 (c) 3
 (b) 4 (d) none of these
29. State whether the following sets are finite, infinite or empty: -
 (i) $X = \{1, 2, 3, 500\}$
 (ii) $Y = \{y: y = a^2; a \text{ is an integer}\}$
 (iii) $A = \{x: x \text{ is a positive integer multiple of } 2\}$
 (iv) $B = \{x: x \text{ is an integer which is a perfect root of } 26 < x < 35\}$
 (a) finite infinite infinite empty (b) infinite infinite finite empty
 (c) infinite finite infinite empty (d) None
30. If $A = \{a, b, c, d\}$ list the element of power set $P(A)$
 (a) $\{\phi \{a\} \{b\} \{c\} \{d\} \{a, b\} \{a, c\} \{a, d\} \{b, c\} \{b, d\} \{c, d\}\}$
 (b) $\{a, b, c\} \{a, b, d\} \{a, c, d\} \{b, c, d\}$
 (c) $\{a, b, c, d\}$
 (d) All the above elements are in $P(A)$



Difference of Set

31. If $A = (1, 2, 3, 5, 7)$ and $B = (1, 3, 6, 10, 15)$ then cardinal number of $A - B$ is
 (a) 3 (c) 6
 (b) -4 (d) none of these
32. If $A = \{1,2,3,4,5,6,7\}$ and $B = \{2,4,6,8\}$. Cardinal number of $A - B$ is:
 (a) 4 (b) 3
 (c) 9 (d) 7

Operation on Set

33. $A \cup A$ is equal to
 (a) A (c) ϕ
 (b) E (d) none of these
34. $A \cup A'$ is equal to
 (a) A (c) ϕ
 (b) Sample space (d) none of these
35. $A \cup E$ is equal to
 (a) A (c) ϕ
 (b) E (d) none of these
36. If $P = \{1, 2, 3, 4\}$; $Q = \{2, 4, 6\}$ then $P \cup Q$
 (a) $\{1, 2, 3, 4, 6\}$ (c) $\{1, 2, 3, 6\}$
 (b) $\{1, 4, 6\}$ (d) none of these
37. If $P = \{1, 2, 3, 4\}$; $Q = \{2, 4, 6\}$ then $P \cup Q$
 (a) $\{1, 2, 3, 6\}$ (c) $\{1, 2, 3, 4, 6\}$
 (b) $\{1, 4, 6\}$ (d) none of these
38. $(A \cup B)$ is equal to
 (a) $(A \cap B)$ (c) $A' \cap B'$
 (b) $A \cup B'$ (d) none of these
39. $(A \cap B)'$ is equal to
 (a) $(A' \cup B')$ (c) $A' \cap B'$
 (b) $A \cup B'$ (d) none of these
40. If $V = \{0, 1, 2, \dots, 9\}$, $X = \{0, 2, 4, 6, 8\}$, $Y = \{3, 5, 7\}$ and $Z = \{3, 7\}$ then
 (i) $Y \cup Z$, $(V \cup Y) \cap X$, $(X \cup Z) \cup V$ are respectively: -
 (a) $\{3, 5, 7\}$, $\{0, 2, 4, 6, 8\}$, $\{0, 1, 2, \dots, 9\}$
 (b) $\{2, 4, 6\}$, $\{0, 2, 4, 6, 8\}$, $\{0, 1, 2, \dots, 9\}$
 (c) $\{2, 4, 6\}$, $\{0, 1, 2, \dots, 9\}$, $\{0, 2, 4, 6, 8\}$
 (d) None
- (ii) $(X \cup Y) \cap Z$ and $(\phi \cup V) \cap \phi$ are respectively: -
 (a) $\{0, 2, 4, 6, 8\}$, ϕ (b) $\{3, 7\}$, ϕ (c) $\{3, 5, 7\}$, ϕ (d) None



41. If $A = \{0, 1\}$ state which of the following statements are true: - (i) $\{1\} \subset A$ (ii) $\{1\} \in A$ (iii) $\phi \in A$ (iv) $0 \in A$ (v) $1 \subset A$ (vi) $\{0\} \in A$ (vii) $\phi \subset A$
- (a) (i) (iv) and (vii) only are true (b) (i) (iv) and (vi) only are true
(c) (ii) (iii) and (vi) only are true (d) None
42. If four members a, b, c, d of a decision-making body are in a meeting to pass a resolution And given that a, b, c, d own 50%, 20%, 15%, 15% shares each.
- (i) list the wining coalitions (majority prevails)
- (a) $\{a, b\}$ $\{a, c\}$ $\{a, d\}$ $\{a, b, c\}$ $\{a, b, d\}$ $\{a, b, c, d\}$
(b) $\{b, c, d\}$
(c) $\{b, c\}$ $\{b, d\}$ $\{c, d\}$ $\{a, c, d\}$ $\{b, c, d\}$ $\{a\}$ $\{b\}$ $\{c\}$ $\{d\}$ ϕ
(d) None
- (ii) As per above question with same order of options (a) (b) (c) and (d) list the blocking conditions.
- (iii) As per above question with same order of options (a) (b) (c) and (d) list the losing conditions.

Venn Diagram

43. At a certain conference of 100 people there are 29 Indian women and 23 Indian men. Out of these Indian people 4 are doctors and 24 either men or doctors. There are no foreign doctors. The number of women doctors attending the conference is
- (a) 2 (c) 1
(b) 4 (d) none of these
44. Solve the below Questions using following directions.
Out 2000 staff 48% preferred coffee 54% tea and 64% cocoa. Of the total 28% used coffee and tea 32% tea and cocoa and 30% coffee and cocoa. Only 65 did none of these
- (i) Find the number having all the three
- (a) 360 (c) 160
(b) 280 (d) none
- (ii) Find the number having tea and cocoa but not coffee.
- (a) 360 (c) 160
(b) 280 (d) none
- (iii) Find the number having only coffee.
- (a) 360 (c) 160
(b) 280 (d) none



50. Out of 60 students 25 failed in paper (1), 24 in paper (2), 32 in paper (3), 9 in paper (1) alone, 6 in paper (2) alone, 5 in papers (2) and (3) and 3 in papers (1) and (2). Find how many failed in all the three papers.
- (a) 10 (b) 60 (c) 50 (d) None
51. As per above question how many passed in all the three papers?
- (a) 10 (b) 60 (c) 50 (d) None

Answer Sheet

1.	b	2.	c	3.	b	4.	a	5.	c	6.	c	7.	b	8.	c	9.	a	10.	a
11.	b	12	c	13.	a	14.	c	15.	b	16	b	17.	a	18	b	19.	b	20.	a
21.	b	22.	a	23.	a	24.	b	25.	a	26	b	27.	b	28	b	29.	a	30.	d
31.	a	32.	a	33.	a	34..	b	35.	b	36	a	37.	c	38.	c	39.	a	40 i.	a
40 ii.	b	41.	a	42 i.	a	42 ii.	b	42 iii.	c	43	c	44 i.	a	44 ii.	b	44 iii.	c	45 i.	a
45 ii.	a	46.	a	47 i.	a	47ii.	b	47 iii.	c	48	b	49 i.	a	49 ii.	b	50.	b	51.	a



7B

Relations & Functions

Business Mathematics

Exercise

Identify the Function

- $\{(x, y), Y = x^2\}$ is

(a) Not a function	(c) inverse mapping
(b) A function	(d) none of these
- $\{(x, y) \mid x = 4\}$ is a

(a) Not a function	(c) one – one mapping
(b) Function	(d) none of these
- If $A = \{1, 2, 3\}$ and $B = \{4, 6, 7\}$ then the relation $R = \{(2, 4) (3, 6)\}$ is

(a) A function from A to B	(c) A function from B to A
(b) both (a) and (b)	(d) not a function
- $\{(x, y) \mid x < y\}$ is a

(a) Not a function	(c) one-one mapping
(b) A function	(d) none of these

Domain & Range

- The domain of $\{(1, 7), (2, 6)\}$ is

(a) (1, 6)	(c) (1, 2)
(b) (7, 6)	(d) (6, 7)
- The domain and range of $\{(x, y) : y = x^2\}$ is

(a) (reals, natural numbers)	(c) (reals, reals)
(b) (reals, positive reals)	(d) none of these
- The range of $\{(3, 0), (2, 0), (1, 0), (0, 0)\}$ is

(a) (0, 0)	(c) $\{0, 0, 0, 0\}$
(b) (0)	(d) none of these
- The range of $\{(1, 6), (2, 7)\}$ is –

(a) (6, 7)	(c) (1, 2)
(b) (1, 7)	(d) (6, 2)
- Range of function $f(x) = \frac{1}{(1-x)}$ is –

(a) Set of rational numbers
(b) Set of real numbers (except zero)
(c) Set of natural numbers
(d) Set of integers
- The range of the function $f(x) = \log_{10}(1+x)$ for the domain of real values of x when $0 \leq x \leq 9$ is

(a) $\{0\}$	(c) $\{0, 1\}$
(b) $\{0, 1, 2\}$	(d) none of these



11. For the function $h(x) = 10^{1+x}$ the domain of real values of x where $0 \leq h(x) \leq 9$, the range is
 (a) $10 \leq x(x) \leq 10^{10}$ (c) $0 < h(x) < 10$
 (b) $0 \leq h(x) \leq 10^{10}$ (d) none of these
12. The range of the function $f: \mathbb{N} \rightarrow \mathbb{N}; f(x) = (-1)^{x-1}$, is
 (a) $\{0, -1\}$ (b) $\{1, -1\}$
 (c) $\{1, 0\}$ (d) $\{1, 0, -1\}$
13. The range of function f defined by $f(x) = \frac{x}{x^2+1}$ is:
 (a) $\left\{x: \frac{-1}{2} < x < \frac{1}{2}\right\}$ (b) $\left\{x: \frac{-1}{2} \leq x < \frac{1}{2}\right\}$
 (c) $\left\{x: \frac{-1}{2} \leq x \leq \frac{1}{2}\right\}$ (d) $\left\{x: x > \frac{1}{2} \text{ or } x < \frac{-1}{2}\right\}$
- One-One / Many One**
14. If $f(x) = x^2$, $x > 0$, then the function is -
 (a) Not one to one function (c) into function
 (b) One to one function (d) none of these
15. A function is invertible if and only if f is -
 (a) One - one (c) one-one, onto
 (b) One-one, into (d) many-one, into
16. \mathbb{N} is the set of all-natural numbers and \mathbb{E} is the set of all even numbers. If $f: \mathbb{N} \rightarrow \mathbb{E}$ defined by $f(x) = 2x$, for all $x \in \mathbb{N}$ is:
 (a) One - one and onto (c) Many one onto
 (b) one - one into (d) can't say
17. The function $f(x) = 2^x$ is
 (a) One One mapping (c) many one
 (b) One many (d) none of these
18. $\{(x, y) \mid x + y = 5\}$ is
 (a) Not a function (c) one - one mapping
 (b) A composite function (d) none of these
19. Let $f: A \rightarrow B$ $f(x) = x^2$, $A = \{-1, 1, -2, 2\}$, and $B = \{1, 4, 9, 16\}$, then f is
 (c) One-One (b) many one
 (d) Onto (d) none
20. Let $f: \mathbb{Z} \rightarrow \mathbb{Z}$ $f(x) = x^2 + x$ for all $x \in \mathbb{Z}$, then f is:
 (a) Many-one (b) One-One
 (b) Onto (d) None
21. Let $f: \mathbb{Z} \rightarrow \mathbb{Z}$ $f(x) = 3x+2$ for all $x \in \mathbb{Z}$, then f is
 (a) Onto (surjective) (b) One-One
 (b) Injective (d) None
22. Let $f: \mathbb{R} \rightarrow \mathbb{R}$, $f(x) = 3x^3 + 5$ for all $x \in \mathbb{R}$, then f is:
 (a) Into (b) One-One Onto
 (b) One-One into (d) None



Onto / Into Function

23. Let $A = \{2, 3, 5, 7\}$ and $B = \{0, 1, 3, 5, 7\}$. If f is a mapping from A to B such that $f(x) = x - 2$ then f is
- (a) An into function
(b) An onto function
(c) constant function
(d) identical function

Odd / Even Function

24. A function $f(x)$ is an even function if
- (a) $-f(x) = f(x)$
(b) $F(-x) = -f(x)$
(c) $f(-x) = f(x)$
(d) none of these
25. If $g(x) = 3 - x^2$ then $g(x)$ is
- (a) An odd function
(b) A periodic function
(c) an even function
(d) none of these

Composite Function

26. Given the function $f(x) = x^2 - 5$, $f(5)$ is
- (a) 0
(b) 5
(c) 10
(d) none of these
27. If $f(x + 1) = 2x + 7$ then $f(0)$ is equal to
- (a) 5
(b) 4
(c) 3
(d) 0
28. If $f(x) = x^2 + 3x$ then $f(2) - f(4)$ is equal to
- (a) -15
(b) -18
(c) 18
(d) 12
29. If $f(x) = x + 3$, $g(x) = x^2$ then $f \circ g(x)$ is
- (a) $x^2 + 3$
(b) $x^2 + x + 3$
(c) $(x + 3)^2$
(d) none of these
30. If $f(x) = x^2 + 3$, $g(x) = (x)$ then $f \circ g(x)$ is –
- (a) $x^2 + 3$
(b) $(x)^2 + (x^2 + 3)$
(c) $(x + 3)^2$
(d) $(x)^2 (x^2 + 3)$

Inverse Function

31. If $f(x) = 100x$ then $f^{-1}(x) =$
- (a) $\frac{x}{100}$
(b) $\frac{1}{100x}$
(c) $\frac{1}{100}$
(d) none of these
32. The reverse f^{-1} when $f(x) = x^2$ is
- (a) $1/x^2$
(b) x
(c) $1/x$
(d) none of these
33. The inverse $h^{-1}(x)$ when $h(x) = \log_{10} x$ is
- (a) $\log_{10} x$
(b) 10^x
(c) $\log_{10}(1/x)$
(d) none of these
34. If $f(x) = 1/1-x$, then $f^{-1}(x)$ is
- (a) $1-x$
(b) $(x-1)/x$
(c) $x/x-1$
(d) none of these
35. If $f(x) = x^2$ then f inverse is –
- (a) $1/x$
(b) \sqrt{x}
(c) $1/x^2$
(d) $\sqrt[3]{x}$



Types of Relations

36. "Is equal to" over the set of all rational numbers is
 (a) Transitive (c) reflexive
 (b) Symmetric (d) equivalence
37. "is smaller than" over the set of eggs in a box is
 (a) Transitive(T) (c) reflexive(R)
 (b) Symmetric(S) (d) equivalence(E)
38. "is greater than" over the set of all-natural number is known as
 (a) Transitive (c) reflexive
 (b) Symmetric (d) equivalence
39. The relation "is parallel to" on the set of all straight lines in a plane is –
 (a) An equivalence relation (c) reflexive relation
 (b) An equal relation (d) transitive relation
40. "Is perpendicular to" over the set of straight lines in a given plane is
 (a) Symmetric (c) transitive
 (b) Reflexive (d) equivalence
41. 'Is the reciprocal of' over the set of non-zero real numbers is
 (a) Symmetric (c) transitive
 (b) Reflexive (d) none of these
42. "Is the squares of" over n set of real numbers is
 (a) Reflexive (c) transitive
 (b) Symmetric (d) none of these
43. "Has the same father as" over the set of children
 (a) Reflexive (c) transitive
 (b) Symmetric (d) equivalence
44. If $A = \{1, 2, 3\}$ then $R = \{(1, 1), (2, 2), (3, 3), (1, 2)\}$ is
 (a) Reflexive and transitive but not symmetric
 (b) Reflexive and symmetric but not transitive
 (c) Symmetric and transitive but not reflexive
 (d) Identity relation
45. If $A = \{1, 2, 3\}$ then a relation $\{(1, 1), (2, 2), (3, 3)\}$ is-
 (a) An into relation
 (b) An identity relation
 (c) Symmetric relation
 (d) Transitive relation

Answer Sheet

1.	b	2.	a	3.	d	4.	a	5.	c	6.	b	7.	a	8.	a	9.	b	10.	c
11.	a	12.	b	13.	c	14.	b	15.	c	16.	c	17.	a	18.	c	19.	b	20.	a
21.	b	22.	b	23.	b	24.	c	25.	a	26.	a	27.	a	28.	b	29.	a	30.	c
31.	a	32.	d	33.	b	34.	b	35.	b	36.	d	37.	a	38.	a	39.	a	40.	a
41.	a	42.	d	43.	d	44.	a	45.	b										

Useful Concept



8A

Differential Calculus

Business Mathematics

Exercise

Basic Problems

- If $y = 2x + x^2$ then dy/dx is:

(a) $2(x+1)$ (b) $2(x-1)$ (c) $x+1$ (d) $x-1$
- The gradient of the curve $y = 2x^3 - 5x^2 - 3x$ at $x = 0$ is:

(a) 3 (b) -3 (c) $1/3$ (d) None
- If $y = x(x-1)(x-2)$ then $\frac{dy}{dx}$ is:

(a) $3x^2 - 6x + 2$ (b) $-6x + 2$ (c) $3x^2 + 2$ (d) None
- If $y = (3x^3 - 5x^2 + 8)^3$ then dy/dx is:

(a) $3(3x^3 - 5x^2 + 8)^3(9x^2 + 10x)$
 (b) $3(3x^3 - 5x^2 + 8)^2(9x^2 - 10x)$
 (c) $3(3x^3 - 5x^2 + 8)^3(9x^2 + 10x)$
 (d) None
- If $y = e^{ax^2+bx+c}$, the $f'(x)$ is:

(a) e^{ax^2+bx+c} (b) $e^{ax^2+bx+c} (2ax+b)$
 (c) $2ax+b$ (d) None
- The derivative of $y = \sqrt{x+1}$ is:

(a) $1/\sqrt{x+1}$ (b) $-1/\sqrt{x+1}$
 (c) $(1/2)\sqrt{x+1}$ (d) None
- If $y^2 = 4ax$, then dy/dx is:

(a) a/y (b) $2a/y$ (c) za (d) a
- The derivative of the function $\sqrt{x+\sqrt{x}}$ is

(a) $\frac{1}{2\sqrt{x+\sqrt{x}}}$ (b) $1 + \frac{1}{2\sqrt{x}}$ (c) $\frac{1}{2\sqrt{x+\sqrt{x}}}(1 + \frac{1}{2\sqrt{x}})$ (d) None of these
- Let $y = \sqrt{2x} + 3^{2x}$ then $\frac{dy}{dx}$ is equal to

(a) $(1/\sqrt{2x}) + 2 \cdot 3^{2x} \log_e 3$ (b) $1/\sqrt{2x}$
 (c) $2 \cdot 3^{2x} \log_e 3$ (d) none of these
- If $y = \frac{1}{\sqrt{x}}$ then $\frac{dy}{dx}$ is equal to:

(a) $\frac{1}{2x\sqrt{x}}$ (b) $\frac{-1}{x\sqrt{x}}$ (c) $\frac{-1}{2x\sqrt{x}}$ (d) None
- If $f(x) = x^2 - 6x + 8$ then $f'(5) - f'(8)$ is equal to:

(a) $f'(2)$ (b) $3f'(2)$ (c) $2f'(2)$ (d) None
- If $y = e^{\sqrt{2x}}$ then $\frac{dy}{dx}$ is equal to

(a) $\frac{e^{\sqrt{2x}}}{\sqrt{2x}}$ (b) $e^{\sqrt{2x}}$ (c) $\frac{e^{\sqrt{2x}}}{\sqrt{2x}}$ (d) None



Basic Level Up

13. If $\log(x/y) = x+y$ then $\frac{dy}{dy}$ is proved to be
 (a) $\frac{y(1-x)}{x(1+y)}$ (b) $\frac{y}{x}$ (c) $\frac{1-x}{1+y}$ (d) none
14. If $\frac{x^2}{a^2} - \frac{y^2}{a^2} = 1$ then $\frac{dy}{dx}$ can be express as:
 (a) $\frac{x}{a}$ (b) $\frac{x}{\sqrt{x^2-a^2}}$ (c) $\frac{x}{y}$ (d) none
15. If $x^5 + y^5 = 5xy$, then dx/dy is :
 (a) $\frac{y-x^4}{y^4-x}$ (b) $\frac{y+x^4}{y^4+x}$ (c) $\frac{x^4-y}{x-y^4}$ (d) none
16. If $y = \sqrt{\frac{1-x}{1+x}}$ then $\frac{dy}{dx}$ is equal to -
 (a) $\frac{y}{x^2-1}$ (b) $\frac{y}{1-x^2}$ (c) $\frac{y}{1+x^2}$ (d) $\frac{y}{y^2-1}$
17. If $f(x) = \log_e\left(\frac{x-1}{x+1}\right)$, then the value of x at which $f'(x) = 1$, is
 (a) 0 (b) 1 (c) $\pm\sqrt{3}$ (d) $\pm\sqrt{2}$
18. If $y = 1+x + \frac{x^2}{2!} + \frac{x^3}{3!} + \dots + \frac{x^n}{n!}$ then $\frac{dy}{dx} - y$ is proved to be
 (a) 1 (b) -1 (c) 0 (d) none
19. If $f(x) = x^k$ and $f'(1) = 10$ then the value of k is:
 (a) 10 (b) -10 (c) 1/10 (d) none
20. If $f(x) = {}^x C_3$; then $f'(1) = ?$
 (a) $\frac{1}{6}$ (b) $\frac{5}{6}$ (c) $\frac{-1}{6}$ (d) $\frac{-5}{6}$
21. Differentiate $e^{(x^x)}$:
 (a) $(1 + \log x)$ (b) $x^x (1 + \log x)$
 (c) $e^{x^x} (1 + \log x) x^x$ (d) $e^{x^x} (1 + \log x)$

Multiplication Rule

22. The derivative of $x^2 \log x$ is:
 (a) $1+2\log x$ (b) $x(1+2\log x)$ (c) $2\log x$ (d) None
23. If $y = xy$, then dx/dy is :
 (a) $\frac{y}{1-x}$ (b) $\frac{y}{1+x}$ (c) $\frac{x}{1+y}$ (d) none
24. If $y = 5xy$, then dx/dy is :
 (a) $\frac{5y}{1-5x}$ (b) $\frac{4y}{1+x}$ (c) $\frac{x}{1+5y}$ (d) none
25. If $y = a^x \log x$, then dy/dx is :
 (a) $a^x (\log x \log a + 1/x)$
 (b) $\log x \log a + a^x$
 (c) $a^x (\log x + 1/x)$
 (d) $\log x \log a + a^x$
26. if $y = x.e^x$, then dy/dx is :
 (a) $e^x(x+1)$ (b) $e^x(x-1)$ (c) $2e^x(x-1)$ (d) none



Division Rule

27. If $f(x) = \frac{x^2+1}{x^2-1}$ then $f'(x)$ is:
 (a) $-4x/(x^2-1)^2$ (b) $4x(x^2-1)^2$ (c) $x(x^2-1)^2$ (d) None
28. The derivative of $(x^2-1)/x$ is:
 (a) $1 + \frac{1}{x^2}$ (b) $1 - \frac{1}{x^2}$ (c) $\frac{1}{x^2}$ (d) none
29. If $f(x) = \frac{x^2}{e^x}$ then $f(-1)$ is equal to
 (a) $-1/e$ (b) $1/e$ (c) $-3e$ (d) none
30. The slope of the tangent to the curve $y = \frac{x-1}{x+2}$ at $x = 2$ is:
 (a) $\frac{3}{16}$ (b) $-\frac{3}{16}$ (c) $\frac{1}{4}$ (d) $-\frac{1}{4}$

Parametric Equation

31. If $x = 3t^2 - 1, y = t^3 - t$ then $\frac{dy}{dx}$ is equal to
 (a) $\frac{3t^2-1}{6t}$ (b) $3t^2-1$ (c) $\frac{3t-1}{6t}$ (d) none
32. Given $x = t + t^{-1}$ and $y = t - t^{-1}$ then the value of $\frac{dy}{dx}$ at $t = 2$ is:
 (a) $3/5$ (b) $-3/5$ (c) $5/3$ (d) none
33. Given $x = 2t+5; y = t^2 - 2$ then $\frac{dy}{dx}$ is calculated as:
 (a) t (b) $\frac{-1}{t}$ (c) $\frac{1}{t}$ (d) none
34. If $x = (1 - t^2)(1 + t^2), y = \frac{2t}{1+t^2}$ then dy/dx at $t = 1$ is:
 (a) 1 (b) 2 (c) 0 (d) none
35. If $x = \log t, y = e^t$, then $\frac{dy}{dx} =$
 (a) $1/t$ (b) $t.e^t$ (c) $-1/t^2$ (d) none of these
36. If $x = at^3 + bt^2 - t$ and $y = at^2 - 2bt$, then the value of $\frac{dy}{dx}$ at $t = 0$ is:
 (a) $2b$ (b) $-2b$ (c) $\frac{1}{2b}$ (d) $-\frac{1}{2b}$

Geometry Based Problems

37. The slope of the tangent to the curve $y = 2x^3 - 3x^2 - 12x + 8$ at $x = 0$ is:
 (a) -12 (b) 12 (c) 0 (d) none
38. The gradient of the curve $xy + px + qy = 0$ at $(1,1)$ is $1/2$. The values of p and q are:
 (a) $(0, -1)$ (b) $(2, -1)$ (c) $(1, 2)$ (d) none
39. The slope of the tangent to the curve $y = \sqrt{4 - x^2}$ at the point where the ordinate and the abscissa are equal is:
 (a) -1 (b) 1 (c) 0 (d) None
40. The gradient of the curve $y = 3x^2 - 5x + 4$ at the point $(1,2)$ is:
 (a) 1 (b) 0 (c) -1 (d) 2
41. The gradient of the curve $xy + 2px + 3qy = 0$ at the point $(3,2)$ is $-2/3$. The values of p and q are:
 (a) $(1/2, 1/2)$ (b) $(2, 2)$ (c) $(-1/2, -1/2)$ (d) $(1/2, 1/6)$



42. The slope of the tangent to the curve $y=x^2-x$ at the point where the line $y=2$ cuts the curve in the 1st quadrant is:
 (a) 2 (b) 3 (c) -3 (d) none
43. The slope of the tangent at the point (2, 2) to the curve $x^2+xy+y^2-4=0$ is given by:
 (a) 0 (b) 1 (c) -1 (d) none
44. If $x^3 - 2x^2y^2 + 5x + y - 5 = 0$ then $\frac{dy}{dx}$ at $x=1, y=1$ is equal to:
 (a) 4/3 (b) -4/3 (c) 3/4 (d) none
45. If $x^3y^2 = (x-y)^5$. Find $\frac{dy}{dx}$ at (1, 2).
 (a) -7/9 (b) 7/9 (c) 9/7 (d) -9/7
46. The points on the curve $y = x^3 - x^2 - x + 1$, where the tangent is parallel to x - axis are
 (a) $(\frac{-1}{3}, \frac{32}{27})$ and (1, 0) (b) (0, 0), and (1, 0)
 (c) (1, 0) and (1, 1) (d) (0, 1) and (1, 1)

Logarithmic Problems

47. If $x^y \cdot y^x = m$ where m is constant then $\frac{dy}{dx}$ is equal to
 (a) $\frac{-y}{x}$ (b) $\frac{-y(y+x \log y)}{x(y \log x+x)}$ (c) $\frac{y+x \log y}{y \log x+x}$ (d) none
48. If $y = \sqrt{x}^{\sqrt{x}^{\dots \infty}}$ then $\frac{dy}{dx}$ is equal to
 (a) $\frac{y^2}{2-y \log x}$ (b) $\frac{y^2}{x(2-y \log x)}$
 (c) $\frac{y^2}{\log x}$ (d) none
49. Given $e^{-xy} - 4xy=0$ then dy/dx can be proved to be equal to
 (a) -y/x (b) y/x (c) x/y (d) none
50. If x^{x^x} then the value of (dy/dx) is:
 (a) $y [x^{x-1} + \log x (1 + \log x)]$
 (b) $y [x^{x-1} + (\log x) (x)^2 (1 + \log x)]$
 (c) $y [x^{x-1} + x^2 \log x (\log x - 1)]$
 (d) none of these
51. If $y = (1+x)^x$, then dy/dx is :
 (a) $(1+x)^x \left[\log(1+x) + \frac{x}{1+x} \right]$ (b) $x(1+x)^{x-1}$
 (c) $\left(\log(1+x) + \frac{x}{1-x} \right) (1+x)^x$ (d) none
52. If $x^y = e^{x-y}$ then find dy/dx ?
 (a) $\frac{y(1-x)}{x(1+y)}$ (b) $\frac{\log x}{(1+\log x)^2}$ (c) $\frac{2 \log x}{(1+\log x)^2}$ (d) None

Implicit Function

53. If $xy=1$ then $y^2 + dy/dx$ is equal to
 (a) 1 (b) 0 (c) -1 (d) none
54. If $y = \sqrt{x^2+m^2}$ then $y y_1$ (where $y_1 = dy/dx$) is equal to
 (a) -x (b) x (c) 1/x (d) None
55. If $y = e^x + e^{-x}$ the $\frac{dy}{dx} - \sqrt{y^2 - 4}$ is equal to
 (a) 1 (b) -1 (c) 0 (d) none



Higher Order Derivation

56. If $x^2 + y^2 + 4$ then

(a) $y \frac{d^2y}{dx^2} + \left(2 \frac{dy}{dx}\right)^2 + 1 = 0$

(b) $y \frac{d^2y}{dx^2} + \left(\frac{dy}{dx}\right)^2 + 1 = 0$

(c) $y \frac{d^2y}{dx^2} \left(\frac{dy}{dx}\right)^2 + 1 = 0$

(d) $y \frac{d^2y}{dx^2} + 2 \left(\frac{dy}{dx}\right)^2 + 1 = 0$

57. If $Y = X^X$ then $\frac{d^2y}{dx^2} =$ _____

(a) $\frac{dy}{dx}(1 + \log x) + Y \frac{d}{dx}(1 + \log x)$

(b) $\frac{dy}{dx}(1 + \log x) + \frac{d}{dx}(1 + \log x)$

(c) $\frac{dy}{dx}(1 + \log x) - Y \frac{d}{dx}(1 + \log x)$

(d) $\frac{dy}{dx}(1 + \log x) - \frac{d}{dx}(1 + \log x)$

58. For the functions $y = x^3 - 3x$, the value of $\frac{d^2y}{dx^2}$ at which $\frac{dy}{dx}$ is zero, is

(a) ± 1

(b) ± 6

(c) ± 3

(d) none

59. If $y = ae^{nx} + be^{-nx}$, then $\frac{d^2y}{dx^2}$ is equal to _____.

(a) n^2y

(b) ny

(c) $-n^2y$

(d) none

60. If $y = 2x + \frac{4}{x}$ then $x^2 \frac{d^2y}{dx^2} + x \frac{dy}{dx}$ yields

(a) 3

(b) 1

(c) 0

(d) 4



Profit Function

69. The profit $P(x)$ due to advertising x , in hundreds of rupees is given by $p(x) = 120 + 80x - x^2$. what amount of advertising fetches maximum profit and what is the maximum profit?
- (a) $x = 40$, 172000 (c) $x = 50$, 170000
(b) $x = 40$, 165000 (d) none of these
70. A manufacture can sell x items per day at a price p rupee each, where $p = 125 - (5/3)x$. The cost of production for x items is $500 + 13x + 0.2x^2$. Find how much he should produce to have a maximum profit assuming that all items produced can be sold. What's the maximum profit.
- (a) 30 units, Rs.1180 (c) 40 units, Rs.1280
(b) 60 units, Rs.1300 (d) none of these
71. A firm finds that if can sell all that is produced (within limits). The demand function is $p = 260 - 3x$, where p is the price per unit at which it can sell x units. The cost function is $C = 500 + 20x$, where x is the number of units produced. Find x so that profit is maximum.
- (a) 40 (b) 50
(c) 60 (d) 5

**Answer Sheet**

1.	a	12.	a	23.	a	34.	c	45.	a	56.	b	67.	a
2.	b	13.	a	24.	a	35.	b	46.	a	57.	a	68.	c
3.	a	14.	c	25.	a	36.	a	47.	b	58.	b	69.	a
4.	b	15.	c	26.	a	37.	a	48.	b	59.	a	70.	a
5.	b	16.	a	27.	a	38.	a	49.	a	60.	c	71.	a
6.	c	17.	c	28.	a	39.	a	50.	a	61.	b		
7.	b	18.	c	29.	b	40.	a	51.	a	62.	c		
8.	c	19.	a	30.	a	41.	d	52.	b	63.	b		
9.	a	20.	c	31.	a	42.	b	53.	b	64.	a		
10.	c	21.	c	32.	c	43.	c	54.	b	65.	a		
11.	b	22.	b	33.	a	44.	a	55.	c	66.	b		



8B

Integral Calculus

Business Mathematics

Exercise

Basic Problems

1. Evaluate $\int 5x^2 dx$:

(a) $5/3x^3 + K$

(b) $\frac{5x^3}{3} + K$

(c) $5x^3$

(d) none of these

2. Integration of $3-2x-x^4$ will become

(a) $-x^2 - x^5 + 5x$

(b) $3x - x^2 - \frac{x^5}{5} + K$

(c) $12x^2 + 6x - 2x^2$

(d) none of these

3. Given $f(x) = 4x^3 + 3x^2 - 2x + 5$ and $\int f(x) dx$ is

(a) $x^4 + x^3 - x^2 + 5x + k$

(b) $x^4 + x^3 - x^2 + 5x$

(c) $12x^2 + 6x - 2x^2$

(d) none of these

4. $\int \left(x^4 + \frac{3}{x}\right) dx$ is equal to

(a) $x^5/5 + \log|x|$

(b) $1/5x^5 + 3\log|x| + k$

(c) $1/5x^5 + k$

(d) none of these

5. Evaluate $\int (x^2 - 1) dx$

(a) $x^5/5 - 2/3x^3 + x + k$

(b) $\frac{x^3}{3} - x + k$

(c) $2x$

(d) none of these

6. $\int (1 - 3x)(1 + x) dx$ is equal to

(a) $x - x^2 - x^3$

(b) $x^3 - x^2 + x$

(c) $x - x^2 - x^3 + k$

(d) none of these

7. Evaluate the integral $\int (1 - x)^3/x dx$ and the answer is equal to

(a) $\log|x| - 3x + 3/2x^2 + k$

(b) $\log x - 2 + 3x^2 + k$

(c) $\log x + 3x^2 + k$

(d) none of these

8. $\int 2^{3x} \cdot 3^{2x} \cdot 5^x \cdot dx =$

(a) $\frac{2^{3x} \cdot 3^{2x} \cdot 5^x}{\log(720)} + c$

(c) $\frac{2^{3x} \cdot 3^{2x} \cdot 5^x}{\log(180)} + c$

(b) $\frac{2^{3x} \cdot 3^{2x} \cdot 5^x}{\log(360)} + c$

(d) $\frac{2^{3x} \cdot 3^{2x} \cdot 5^x}{\log(90)} + c$

9. $\int (a)^{2x} dx$ _____

(a) $\frac{a^{2x}}{2 \log a}$

(c) $\frac{a^{2x} \cdot \log a}{2}$

(b) $\frac{2 \cdot a^{2x}}{\log a}$

(d) none of these



Method of Substitution

10. Use method of substitution of integrate the function $f(x) = (4x+5)^6 \cdot dx$ and the answer is
 (a) $1/28 (4x+5)^7 + K$ (b) $(4x+5)^{7/7} + k$
 (c) $(4x+5)^7/7$ (d) none of these
11. Use method of substitution to evaluate $\int x(x^2 + 4)^5 dx$ and the answer is
 (a) $(x^2 + 4)^6 + k$ (b) $1/12 (x^2 + 4)^6 + k$
 (c) $(x^2 + 4)^6/k$ (d) none of these
12. $\int 8x^2/(x^3 + 2)^3 dx$ is equal to
 (a) $-4/3(x^3 + 2)^2 + k$ (b) $\frac{4}{3(x^3+2)^2} + k$
 (c) $\frac{4}{3(x^3+2)^2} + k$ (d) none of these
13. $\int x^x(1+\log x) dx$ is equal to
 (a) $x^2 \log x + k$ (b) $e^{x^2} + k$
 (c) $\frac{x^2}{2} + k$ (d) $x^x + c$
14. $\int (e^x + e^{-x})^2 (e^x - e^{-x}) dx$ is
 (a) $1/3 (e^x + e^{-x})^3 + k$ (b) $1/2 (e^x - e^{-x})^2 + k$
 (c) $e^x + k$ (d) none of these
15. $\int \frac{\log(\log x)}{x} dx$ is
 (a) $\log(\log x - 1) + k$ (b) $\log x - 1 + k$
 (c) $[\log(\log x - 1)] \log x + k$ (d) none of these
16. Evaluate $\int \left(\frac{e^x - e^{-x}}{e^x + e^{-x}}\right) dx$ and the value is
 (a) $\log_e |e^x + e^{-x}|$ (b) $\log_e |e^x - e^{-x}| + k$
 (c) $\log_e |e^x - e^{-x}| + k$ (d) none of these
17. Integrate w.r.t x , $(x^3 + 1)^2 3x^2 dx$ to get
 (a) $\left(\frac{1}{3}\right) (x^3 + 1)^3 + k$ (b) $3(x^3 + 2)^3 + k$ (c) $3x^2(x^3 + 2)^3 + k$ (d) $9x^2(x^3 + 2)^3 + k$
18. $\int \frac{dx}{x(x^3+1)} =$
 (a) $[\log |x| - (1/3)\log|x^3+1|] + k$
 (b) $(1/3)[\log |x| + \log|x^3+1|] + k$
 (c) $(1/3)\log\left(\frac{x^3}{x^3-1}\right) + c$
 (d) None of these.



By Parts

19. Use integration by parts to evaluate $\int x^2 e^{3x} dx$
- (a) $\frac{x^2 e^{3x}}{3} - 2x \frac{e^{3x}}{9} + \frac{2}{27} e^{3x} + K$
 (b) $x^2 e^{3x} - 2x e^{3x} + 2e^{3x} + k$
 (c) $\frac{e^{3x}}{3} - \frac{x e^{3x}}{9} + 2e^{3x} + k$
 (d) none of these
20. $\int \log x dx$ is equal to
- (a) $x \log x + k$ (b) $x \log x - x^2 + k$ (c) $x \log x + k$ (d) none of these
21. $\int x e^x dx$ is
- (a) $(x-1)e^x + k$ (b) $(x-1)e^x$ (c) $x e^x + k$ (d) none of these.
22. $\int (\log x)^2 x dx$ and the result is
- (a) $\frac{x^2}{2} [(\log x)^2 - \log + \frac{1}{2}] + K$
 (b) $x (\log)^2 - 2x + k$
 (c) $2x (\log x - 1) + k$
 (d) None of these
23. $\int \log x^2 dx$ is equal to
- (a) $x (\log x - 1) + k$ (b) $2x (\log x - 1) + k$ (c) $2 (\log x - 1) + k$ (d) none of these
24. Using integration by parts $\int x^3 \log x dx$
- (a) $x^4 / 16 + k$ (b) $x^4 / 16 (4 \log x - 1) + k$ (c) $4 \log x - 1 + k$ (d) none of these

Geometry Based Problem

25. The equation of the curve which passes through the point (1,3) and has the slope $4x-3$ at any point (x,y) is
- (a) $y = 2x^3 - 3x + 4$ (b) $y = 2x^2 - 3x + 4$ (c) $x = 2y^2 - 3y + 4$ (d) none of these
26. If $f'(x) = 2x-1$ then the equation of a curve $y = f(x)$ passing through the point (1,0) is given by
- (a) $y = x^2 - x$ (b) $y = x^2 / 2 - x + 1$ (c) $y = x^2 / 2 - x + 1/2$ (d) none of these

Problems on Partial Fraction

27. $x(x-1)^{-1}(2x+1)^{-1} dx$ is:
- (a) $(1/3)[\log|x-1| + \log|2x+1|] + k$
 (b) $(1/3)[\log|x-1| + (1/6)\log|2x+1|] + k$
 (c) $(1/3)[\log|x-1| + (1/2)\log|2x+1|] + k$
 (d) none of these.
28. Evaluate using partial fraction $\int (x+5)dx / (x+1)(x+2)^2$ we get
- (a) $4 \log(x+1) - 4 \log(x+2) + \frac{3}{x} + 2 + K$
 (b) $1 \log(x+2) - 3/x + 2 + K$
 (c) $4 \log(x+1) - 4 \log(x+2)$
 (d) none of these
29. By the method of partial fraction $\int \frac{3x}{x^2-x-2} dx$ is
- (a) $2 \log_e|x-2| + \log_e|x+1| + k$
 (b) $2 \log_e|x-2| - \log_e|x+1| + k$
 (c) $\log_e|x-2| + \log_e|x+1| + k$
 (d) none of these

Exponential (e^x) Based Problems

30. $\int (x-1)e^x/x^2 dx$ is equal to
 (a) $e^x/x+k$ (b) $e^{-x}/x+k$ (c) $-e^x/x+k$ (d) none of these
31. $\int \frac{e^x(x \log x + 1)}{x} dx$ is equal to
 (a) $e^x \log x + k$ (b) $e^x + k$ (c) $\log x + k$ (d) none of these
32. Evaluate $\int \frac{(2-x)e^x}{(1-x)^2} dx$ and the value is
 (a) $\frac{e^x}{1-x} + k$ (b) $e^x + k$ (c) $\frac{1}{1-x} + k$ (d) none of these

Problems on Definite Integration

33. Evaluate $\int_0^1 (2x^2 - x^3) dx$ and the value is
 (a) $4/3+k$ (b) $5/12$ (c) $-4/3$ (d) none of these
34. Evaluate $\int_2^4 (3x-2)^2 dx$ and the value is
 (a) 104 (b) 100 (c) 10 (d) none of these
35. Evaluate $\int_0^1 x e^x dx$ and the value is
 (a) -1 (b) 10 (c) $10/9$ (d) +1
36. $\int_0^a [f(x) + f(-x)] dx$ is equal to
 (a) $\int_0^a 2 f(x) dx$ (b) $\int_{-a}^a f(x) dx$ (c) 0 (d) $\int_{-a}^a -f(-x) dx$
37. Evaluate $\int_1^4 (2x+5) dx$ and the value is
 (a) 3 (b) 10 (c) 30 (d) none of these
38. $\int_1^2 \frac{2x}{1+x^2} dx$ is equal to
 (a) $\log(5/2)$ (b) $\log_e 5 - \log_e 2 + k$
 (c) $\log_e (2/5)$ (d) none of these
39. $\int_0^2 \sqrt{3x+4} dx$ is equal to
 (a) $9/112$ (b) $112/9$ (c) $11/9$ (d) none of these
40. $\int_0^2 \frac{x+2}{x+1} dx$ is equal to
 (a) $2 + \log_e 2$ (b) $2 + \log_e 3$ (c) $\log_e 3$ (d) none of these
41. Evaluate $\int_1^{e^2} \frac{dx}{x(1+\log x)^2}$ and the value is
 (a) $3/2$ (b) $1/3$ (c) $26/3$ (d) $\frac{1}{2} (\log_e 5)$
42. The value of $\int_2^3 f(5-x) dx - \int_2^3 f(x) dx$ is
 (a) 1 (b) 0 (c) -1 (d) none of these
43. $\int_1^2 x \log x dx$ is equal to
 (a) $2 \log 2$ (b) $-3/4$ (c) $2 \log 2 - 3/4$ (d) none of these



44. Evaluate $\int_0^2 3x^2 dx$ is

(a) 8

(c) 5

(b) 7

(d) none of these

45. The value of $\int_0^{1/2} \frac{dx}{\sqrt{3-2x}}$ is

(a) 1

(c) $1 - \sqrt{3/2}$

(b) $\sqrt{3} - \sqrt{2}$

(d) $\sqrt{2} - \sqrt{3}$



Application of Integration

Using the data (46-49) the demand function for a monopolist is given by $x = 100 - 4p$, where x is the number of units of product produced and p is the price per unit.

46. Find total revenue function

- (a) $25x - x^2/4$ (b) $25x + x^2/4$
 (c) $25x - x^2/2$ (d) $5x - x^2/4$

47. Find the average revenue function

- (a) $25-x/6$ (b) $25-x/4$
 (c) $5-x/4$ (d) $25+x/4$

48. Find marginal revenue function

- (a) $25-x/3$ (b) $25-x/4$
 (c) $5-x/2$ (d) $25-x/2$

49. Find price and quantity at which $MR=0$.

- (a) 50,12.5 (b) 70,12.5
 (c) 100,12.5 (d) 70,10

Using the data (50-53) A firm knows that the demand function for one of its products is linear. It also knows that it can sell 1000 units when the price is Rs.4 per unit and it can sell 1500 units when the price is Rs.2 per unit.

50. Find the demand function

- (a) $2000 - 250p$ (b) $2000 - 5p$
 (c) $2000 + 5p$ (d) $2000 - 25p$

51. Find the total revenue function

- (a) $8 - x^2/250$ (b) $8x - x^2/50$
 (c) $8x - x^2/250$ (d) $8x - x^2/25$

52. Find the average revenue function

- (a) $8 - x/50$ (b) $8 - x/25$
 (c) $8 + x/250$ (d) $8 - x/250$

53. Find the marginal revenue function

- (a) $8 - x/12$ (b) $8 - x/25$
 (c) $8 - x/125$ (d) $8 + x/125$

54. A company charge Rs.15000 for a refrigerator on orders of 20 or less refrigerator. The charge is reduced on every set by Rs.100 per piece for each piece ordered in excess of 20. Find the largest size order the company should allow so as to receive a maximum revenue.

- (a) 85 (b) 80
 (c) 100 (d) 70

55. A firm has the following demand and the average cost-functions: $x = 480 - 20p$ and $AC = 10 + \frac{x}{15}$.

Determine the profit maximizing output and price of the monopolist.

- (a) 70,25 (b) 60,30
 (c) 60,25 (d) 70,30



Using the data (56-57) The marginal cost of production is $MC = 20 - 0.04x + 0.003x^2$ where x is the number of units produced. The fixed cost is Rs.7000.

56. Find the total cost function

- (a) $C = 20x - 0.02x^2 + 0.001x^3 + 7000$
 (b) $C = -20x - 0.04x^2 + 0.001x^3 + 7000$
 (c) $C = 20x + 0.02x^2 + 0.001x^3 + 7000$
 (d) $C = 20x - 0.02x^2 + 0.001x^3 - 7000$

57. Find the average cost function

- (a) $AC = 20 - 0.02x + 0.001x^2 + \frac{7000}{x}$
 (b) $AC = 20 - 0.02x + 0.001x^2 + \frac{7000}{x}$
 (c) $AC = 20 - 0.02x + 0.001x^2 - \frac{7000}{x}$
 (d) $AC = 20 + 0.02x + 0.001x^2 + \frac{7000}{x}$

Using the data (58-59) The marginal cost function of manufacturing x units of a product is given by $MC = 3x^2 - 10x + 3$. The total cost of producing one unit of the product is Rs.7.

58. Find the total cost function

- (a) $C = x^3 + 5x^2 + 3x + 7$
 (b) $C = x^3 - 5x^2 + 3x + 7$
 (c) $C = x^3 + 5x^2 - 3x + 7$
 (d) $C = x^3 - 5x^2 - 3x - 7$

59. Find the average cost function.

- (a) $AC = x^2 - 5x + 3 + \frac{7}{x}$ (b) $AC = x^2 - 5x + 3 - \frac{7}{x}$
 (c) $AC = x^2 - 5x - 3 + \frac{7}{x}$ (d) $AC = x^2 + 5x - 3 + \frac{7}{x}$

Using the data (60-61). The marginal cost function of a commodity is given by $MC = \frac{14000}{\sqrt{7x+4}}$ and the fixed cost is Rs.18000.

60. Find the total cost function

- (a) $C = 4000\sqrt{7x+4} + 10000$
 (b) $C = 4000\sqrt{7x+4} - 10000$
 (c) $C = 400\sqrt{7x+4} + 10000$
 (d) $C = 4000\sqrt{7x^2+4} + 10000$

61. Find average cost of producing 3 units of the products.

- (a) $AC = \frac{4000}{x}\sqrt{7x+4} + 2\frac{10000}{x}$
 (b) $AC = \frac{4000}{x}\sqrt{7x+4} + \frac{10000}{x}$
 (c) $AC = \frac{4000}{x}\sqrt{7x+4} + \frac{10000}{x^2}$
 (d) $AC = \frac{4000}{x}\sqrt{7x+4} + \frac{1000}{x}$

62. The marginal revenue of a function $MR = 7 - 4x - x^2$. Find the total Revenue.

- (a) $R = 7x - \frac{4x^2}{2} - \frac{x^3}{3}$ (b) $R = 7x + \frac{4x^2}{2} - \frac{x^3}{3}$
 (c) $R = 7x - \frac{4x^2}{2} + \frac{x^3}{3}$ (d) $R = 7x + \frac{4x^2}{2} + \frac{x^3}{3}$

**Answer Sheet**

1.	b	10.	a	19.	a	28.	a	37.	c	46.	a	55.	c
2.	b	11.	b	20.	d	29.	a	38.	b	47.	b	56.	a
3.	b	12.	b	21.	a	30.	a	39.	b	48.	d	57.	a
4.	b	13.	d	22.	a	31.	a	40.	b	49.	a	58.	b
5.	b	14.	a	23.	b	32.	a	41.	d	50.	a	59.	a
6.	c	15.	c	24.	b	33.	b	42.	b	51.	c	60.	a
7.	d	16.	b	25.	b	34.	a	43.	c	52.	d	61.	b
8.	a	17.	a	26.	a	35.	d	44.	a	53.	c	62.	a
9.	b	18.	c	27.	c	36.	b	45.	b	54.	a		



8C

Limits & Continuity

Business Mathematics

Exercise

Factorization

1. $\lim_{x \rightarrow 2} \frac{x^2 - 5x + 6}{x^2 - 4}$
2. $\lim_{x \rightarrow \infty} \frac{2x^2 - 7x + 5}{4x^2 + 3x - 1}$
3. $\lim_{x \rightarrow 4} \frac{x^2 - 16}{x - 4}$
4. $\lim_{x \rightarrow 5} \frac{x^3 - 125}{x^2 - 7x + 10}$
5. $\lim_{x \rightarrow 5} \frac{x^2 - 11x + 30}{x - 5}$

Rationalization

6. $\lim_{x \rightarrow 0} \frac{\sqrt{1+2x^2} - \sqrt{1-2x^2}}{x^2}$
7. $\lim_{x \rightarrow 1} \frac{x^2 - 1}{\sqrt{3x+1} - \sqrt{5x-1}}$
8. $\lim_{x \rightarrow 0} \frac{\sqrt{a-x} - \sqrt{a-x}}{x}$
9. $\lim_{x \rightarrow 1} \frac{\sqrt{x-4} - \sqrt{5}}{x-1}$

L-Hospital

10. $\lim_{x \rightarrow 5} \frac{x^3 - 125}{x^2 - 7x + 10}$
11. $\lim_{x \rightarrow 1} \frac{x^3 - 5x^2 + 2x + 2}{x^3 + 2x^2 - 6x + 3}$
12. $\lim_{x \rightarrow t} \frac{x^3 - t^3}{x^3 - t^3}$
13. $\lim_{x \rightarrow \infty} \frac{2x^2 - 7x + 6}{5x^2 - 11x + 2}$
14. $\lim_{x \rightarrow 1/2} \left(\frac{8x^3 - 1}{6x^2 - 5x + 1} \right)$

**Continuity**

1. A function f is defined as follows $f(x) = \begin{cases} -4x, & \text{when } x < 5 \\ 2x, & \text{when } x > 5 \end{cases}$.
Test the existence of $\lim_{x \rightarrow 5} f(x)$.
- (a) limit exist but not finite (b) limit does not exist
(c) infinite limit (d) none of these.
2. A function $f(x)$ defined in $(0, 3)$ as follows.
 $f(x) = x^2$ when $0 < x < 1$
 $= x$ when $1 \leq x < 2$
 $= (1/4)x^3$ when $2 \leq x < 3$
Then $f(x)$ at $x = 1$ is :
- (a) Continuous (b) Discontinuous
(c) limit not defined (d) none of these.
3. If $f(x) = \frac{x^2-1}{x-1}$ for $x \neq 1$
 $f(x) = 2$ for $x = 1$.
Then the function $f(x)$ at $x = 1$ is:
- (a) Not defined (b) Continuous
(c) Discontinuous (d) None of these.
4. If $f(x) = 5 + 3x$ for $x \geq 0$ and $f(x) = 5 - 3x$ for $x < 0$ then $f(x)$ is:
- (a) continuous at $x = 0$ (b) discontinuous and undefined at $x = 0$
(c) discontinuous and defined at $x = 0$ (d) none of these.



Useful concept



9A

Statistical Description of Data

Statistics

Exercise

- Which of the following statements is false?
 - Statistics is derived from the Latin word 'Status'
 - Statistics is derived from the Italian word 'Statista'
 - Statistics is derived from the French word 'Statistik'
 - None of these.
- Statistics is defined in terms of numerical data in the
 - Singular sense
 - Plural sense
 - Either (a) or (b)
 - Both (a) and (b).
- Statistics is applied in
 - Economics
 - Business management
 - Commerce and industry
 - All these.
- Statistics is concerned with
 - Qualitative information
 - Quantitative information
 - (a) or (b)
 - Both (a) and (b).
- An attribute is
 - A qualitative characteristic
 - A quantitative characteristic
 - A measurable characteristic
 - All these.
- Annual income of a person is
 - An attribute
 - A discrete variable
 - A continuous variable
 - (b) or (c).
- Marks of a student is an example of
 - An attribute
 - A discrete variable
 - A continuous variable
 - None of these.
- Nationality of a student is
 - An attribute
 - A continuous variable
 - A discrete variable
 - (a) or (c).
- Drinking habit of a person is
 - An attribute
 - A variable
 - A discrete variable
 - A continuous variable.
- Age of a person is
 - An attribute
 - A discrete variable
 - A continuous variable
 - A variable.
- Data collected on religion from the census reports are
 - Primary data
 - Secondary data
 - Sample data
 - (a) or (b).



12. The data collected on the height of a group of students after recording their heights with a measuring tape are
 - (a) Primary data
 - (b) Secondary data
 - (c) Discrete data
 - (d) Continuous data.

13. The primary data are collected by
 - (a) Interview method
 - (b) Observation method
 - (c) Questionnaire method
 - (d) All these.

14. The quickest method to collect primary data is
 - (a) Personal interview
 - (b) Indirect interview
 - (c) Telephone interview
 - (d) By observation.

15. The best method to collect data, in case of a natural calamity, is
 - (a) Personal interview
 - (b) Indirect interview
 - (c) Questionnaire method
 - (d) Direct observation method.

16. In case of a rail accident, the appropriate method of data collection is by
 - (a) Personal interview
 - (b) Direct interview
 - (c) Indirect interview
 - (d) All these.

17. Which method of data collection covers the widest area?
 - (a) Telephone interview method
 - (b) Mailed questionnaire method
 - (c) Direct interview method
 - (d) All these.

18. The amount of non-responses is maximum in
 - (a) Mailed questionnaire method
 - (b) Interview method
 - (c) Observation method
 - (d) All these.

19. Some important sources of secondary data are
 - (a) International and Government sources
 - (b) International and primary sources
 - (c) Private and primary sources
 - (d) Government sources.

20. Internal consistency of the collected data can be checked when
 - (a) Internal data are given
 - (b) External data are given
 - (c) Two or more series are given
 - (d) A number of related series are given.

21. The accuracy and consistency of data can be verified by
 - (a) Internal checking
 - (b) External checking
 - (c) Scrutiny
 - (d) Both (a) and (b).

22. The mode of presentation of data are
 - (a) Textual, tabulation and diagrammatic
 - (b) Tabular, internal and external
 - (c) Textual, tabular and internal
 - (d) Tabular, textual and external.

23. The best method of presentation of data is
 - (a) Textual
 - (b) Tabular
 - (c) Diagrammatic
 - (d) (b) and (c).



24. The most attractive method of data presentation is
 - (a) Tabular
 - (b) Textual
 - (c) Diagrammatic
 - (d) (a) or (b).
25. For tabulation, 'caption' is
 - (a) The upper part of the table
 - (b) The lower part of the table
 - (c) The main part of the table
 - (d) The upper part of a table that describes the column and sub-column.
26. 'Stub' of a table is the
 - (a) Left part of the table describing the columns
 - (b) Right part of the table describing the columns
 - (c) Right part of the table describing the rows
 - (d) Left part of the table describing the rows.
27. The entire upper part of a table is known as
 - (a) Caption
 - (b) Stub
 - (c) Box head
 - (d) Body.
28. The unit of measurement in tabulation is shown in
 - (a) Box head
 - (b) Body
 - (c) Caption
 - (d) Stub.
29. In tabulation source of the data, if any, is shown in the
 - (a) Footnote
 - (b) Body
 - (c) Stub
 - (d) Caption.
30. Which of the following statements is untrue for tabulation?
 - (a) Statistical analysis of data requires tabulation
 - (b) It facilitates comparison between rows and not columns
 - (c) Complicated data can be presented
 - (d) Diagrammatic representation of data requires tabulation.
31. Hidden trend, if any, in the data can be noticed in
 - (a) Textual presentation
 - (b) Tabulation
 - (c) Diagrammatic representation
 - (d) All these.
32. Diagrammatic representation of data is done by
 - (a) Diagrams
 - (b) Charts
 - (c) Pictures
 - (d) All these.
33. The most accurate mode of data presentation is
 - (a) Diagrammatic method
 - (b) Tabulation
 - (c) Textual presentation
 - (d) None of these.
34. The chart that uses logarithm of the variable is known as
 - (a) Line chart
 - (b) Ratio chart
 - (c) Multiple line chart
 - (d) Component line chart.
35. Multiple line chart is applied for
 - (a) Showing multiple charts
 - (b) Two or more related time series when the variables are expressed in the same unit
 - (c) Two or more related time series when the variables are expressed in different unit
 - (d) Multiple variations in the time series.



36. Multiple axis line chart is considered when
(a) There is more than one time series
(b) The units of the variables are different
(c) (a) or (b)
(d) (a) and (b).
37. Horizontal bar diagram is used for
(a) Qualitative data
(b) Data varying over time
(c) Data varying over space
(d) (a) or (c).
38. Vertical bar diagram is applicable when
(a) The data are qualitative
(b) The data are quantitative
(c) When the data vary over time
(d) (a) or (c).
39. Divided bar chart is considered for
(a) Comparing different components of a variable
(b) The relation of different components to the table
(c) (a) or (b)
(d) (a) and (b).
40. In order to compare two or more related series, we consider
(a) Multiple bar chart
(b) Grouped bar chart
(c) (a) or (b)
(d) (a) and (b).
41. Pie-diagram is used for
(a) Comparing different components and their relation to the total
(b) Representing qualitative data in a circle
(c) Representing quantitative data in circle
(d) (b) or (c).
42. A frequency distribution
(a) Arranges observations in an increasing order
(b) Arranges observation in terms of a number of groups
(c) Relates to a measurable characteristic
(d) All these.
43. The frequency distribution of a continuous variable is known as
(a) Grouped frequency distribution
(b) Simple frequency distribution
(c) (a) or (b)
(d) (a) and (b).
44. The distribution of shares is an example of the frequency distribution of
(a) A discrete variable
(b) A continuous variable
(c) An attribute
(d) (a) or (c).
45. The distribution of profits of a blue-chip company relates to
(a) Discrete variable
(b) Continuous variable
(c) Attributes
(d) (a) or (b).



46. Mutually exclusive classification
- Excludes both the class limits
 - Excludes the upper-class limit but includes the lower-class limit
 - Includes the upper-class limit but excludes the upper-class limit
 - Either (b) or (c).
47. Mutually inclusive classification is usually meant for
- A discrete variable
 - A continuous variable
 - An attribute
 - All these.
48. Mutually exclusive classification is usually meant for
- A discrete variable
 - A continuous variable
 - An attribute
 - Any of these.
49. The LCB is
- An upper limit to LCL
 - A lower limit to LCL
 - (a) and (b)
 - (a) or (b).
50. The UCB is
- An upper limit to UCL
 - A lower limit to LCL
 - Both (a) and (b)
 - (a) or (b).
51. length of a class is
- The difference between the UCB and LCB of that class
 - The difference between the UCL and LCL of that class
 - (a) or (b)
 - Both (a) and (b).
52. For a particular class boundary, the less than cumulative frequency and more than cumulative frequency add up to
- Total frequency
 - Fifty per cent of the total frequency
 - (a) or (b)
 - None of these.
53. Frequency density corresponding to a class interval is the ratio of
- Class frequency to the total frequency
 - Class frequency to the class length
 - Class length to the class frequency
 - Class frequency to the cumulative frequency.
54. Relative frequency for a particular class
- Lies between 0 and 1
 - Lies between 0 and 1, both inclusive
 - Lies between -1 and 0
 - Lies between -1 to 1.



55. Mode of a distribution can be obtained from
 (a) Histogram (b) Less than type ogives
 (c) More than type ogives (d) Frequency polygon.
56. Median of a distribution can be obtained from
 (a) Frequency polygon (b) Histogram
 (c) Less than type ogives (d) None of these.
57. A comparison among the class frequencies is possible only in
 (a) Frequency polygon (b) Histogram
 (c) Ogives (d) (a) or (b).
58. Frequency curve is a limiting form of
 (a) Frequency polygon
 (b) Histogram
 (c) (a) or (b)
 (d) (a) and (b).
59. Most of the commonly used frequency curves are
 (a) Mixed (b) Inverted J-shaped
 (c) U-shaped (d) Bell-shaped.
60. The distribution of profits of a company follows
 (a) J-shaped frequency curve (b) U-shaped frequency curve
 (c) Bell-shaped frequency curve (d) Any of these.
61. Out of 1000 persons, 25 per cent were industrial workers and the rest were agricultural workers. 300 persons enjoyed world cup matches on TV. 30 per cent of the people who had not watched world cup matches were industrial workers. What is the number of agricultural workers who had enjoyed world cup matches on TV?
 (a) 260 (b) 240 (c) 230 (d) 250
62. A sample study of the people of an area revealed that total number of women were 40% and the percentage of coffee drinkers were 45 as a whole and the percentage of male coffee drinkers was 20. What was the percentage of female non-coffee drinkers?
 (a) 10 (b) 15 (c) 18 (d) 20
63. The number of accidents for seven days in a locality are given below:

No. of accidents:	0	1	2	3	4	5	6
Frequency:	15	19	22	31	9	3	2

What is the number of cases when 3 or less accidents occurred?

- (a) 56 (b) 6 (c) 68 (d) 87



64. The weight of 50 students in pounds are given below:

82,	95,	120,	174,	179,	176,	159,	91,	85,	175
88	160,	97,	133,	159,	176,	151,	115,	105,	172
170,	128,	112,	101,	123,	117,	93,	117,	99,	90
113,	119,	129,	134,	178,	105,	147,	107,	155,	157
98,	117,	95,	135,	175,	97,	160,	168,	144,	175

If the data are arranged in the form of a frequency distribution with class intervals

As **81-100, 101-120, 121-140, 141-160 and 161-180**, then the frequencies for these 5 class intervals are

- (a) 6, 9, 10, 11, 14 (b) 12, 8, 7, 11, 12 (c) 10, 12, 8, 11, 9 (d) 12, 12, 6, 9, 11

65. In a study about the male and female students of commerce and science departments of a college in 5 years, the following data were obtained:

1995	2000
70% male students	75% male students
65% read Commerce	40% read Science
20% of female students read Science	50% of male students read Commerce
3000 total No. of students	3600 total No. of students.

After combining 1995 and 2000 if x denotes the ratio of female commerce student to female Science student and y denotes the ratio of male commerce student to male Science student, then

- (a) $x = y$ (b) $x > y$ (c) $x < y$ (d) $x > y$

Solu:

No. of Students	1995	2000
No Female Students		
No of Male Students		
No of Commerce Students		
No of Science Students		
No of Male Commerce Students		
No of Female Commerce Students		
No of Male Science Students		
No of Female Science Students		



Answer Sheet

1.	(c)	2.	(b)	3.	(d)	4.	(d)	5.	(a)	6.	(b)
7.	(b)	8.	(a)	9.	(a)	10.	(c)	11.	(b)	12.	(a)
13.	(d)	14.	(c)	15.	(a)	16.	(c)	17.	(b)	18.	(a)
19.	(a)	20.	(d)	21.	(c)	22.	(a)	23.	(b)	24.	(c)
25.	(d)	26.	(d)	27.	(c)	28.	(a)	29.	(a)	30.	(b)
31.	(c)	32.	(d)	33.	(b)	34.	(b)	35.	(b)	36.	(d)
37.	(d)	38.	(b)	39.	(d)	40.	(c)	41.	(a)	42.	(d)
43.	(a)	44.	(a)	45.	(b)	46.	(b)	47.	(a)	48.	(b)
49.	(b)	50.	(a)	51.	(a)	52.	(a)	53.	(b)	54.	(a)
55.	(a)	56.	(c)	57.	(b)	58.	(d)	59.	(d)	60.	(c)
61.	(a)	62.	(b)	63.	(d)	64.	(d)	65.	(b)		



9B Sampling

Statistics

Exercise

- Sampling can be described as a statistical procedure
 - To infer about the unknown universe from a knowledge of any sample
 - To infer about the unknown universe from a knowledge of a sample drawn from it
 - To infer about the unknown universe from a knowledge of a random sample drawn from it
 - Both (a) and (b)
- The law of Statistical Regularity says that
 - Sample drawn from the population under discussion possesses the characteristics of the population
 - A large sample drawn at random from the population would possess the characteristics of the population
 - A large sample drawn at random from the population would possess the characteristics of the population on an average
 - An optimum level of efficiency can be attained at a minimum cost.
- A sample survey is prone to
 - Sampling errors
 - non-Sampling errors
 - Either (a) or (b)
 - Both (a) and (b)
- The population of roses in Salt Lake City is an example of
 - A finite population
 - An infinite population
 - A hypothetical population
 - An imaginary population
- Statistical decision about an unknown universe is taken on the basis of
 - Sample Observations
 - A Sampling Frame
 - Sample Survey
 - Complete Enumeration
- Random sampling implies
 - Haphazard Sampling
 - Probability sampling
 - Systematic sampling
 - Sampling with the same probability for each unit
- A parameter is a characteristic of
 - Population
 - Sample
 - Both (a) and (b)
 - (a) or (b)
- A statistic is
 - A function of sample observations
 - A function of population units
 - A characteristics of a population
 - A part of a population
- Sampling Fluctuations may be described as
 - The variation in the values of a statistic
 - The variation in the values of a sample
 - The differences in the values of a parameter
 - The variation in the values of observations



10. The sampling distribution is
- The distribution of sample observations
 - The distribution of random samples
 - The distribution of a parameter
 - The probability distribution of a statistic
11. Standard error can be described as
- The error committed in sampling
 - The error committed in sample survey
 - The error committed in estimating a parameter
 - Standard deviation of a statistic
12. A measure of precision obtained by sampling is given by
- Standard error
 - Sampling fluctuation
 - Sampling distribution
 - expectation
13. As the sample size increases, standard error
- Increases
 - Decreases
 - Remains constant
 - Decreases proportionately
14. If from a population with 25 members, a random sample without replacement of 2 members is taken, the number of all such samples is
- 300
 - 625
 - 50
 - 600
15. A population comprises 5 members. The number of all possible samples of size 2 that can be drawn from it with replacement is
- 100
 - 15
 - 125
 - 25
16. Simple random sampling is very effective if
- The population is not very large
 - The population is not much heterogeneous
 - The population is partitioned into several sections
 - Both (a) and (b)
17. Simple random sampling is
- A probabilistic sampling
 - A non – probabilistic sampling
 - A mixed sampling
 - Both (a) and (c)
18. According to Neyman's allocation, in stratified sampling
- Sample size is proportional to the population size
 - Sample size is proportional to the sample SD
 - Sample size is proportional to the sample variance
 - Population size is proportional to the sample variance
19. Which sampling provides separate estimates for population means for different segments and also an overall estimate?
- Multistage sampling
 - Stratified sampling
 - Simple random sampling
 - Systematic sampling

**Answer Sheet**

1.	c	2.	c	3.	d	4.	b	5.	a	6.	d	7.	a	8.	a	9.	a	10.	d
11.	d	12.	a	13.	b	14.	a	15.	d	16.	b	17.	a	18.	a	19.	b	20.	d
21.	d	22.	c	23.	c	24.	d												



10A

Measures of Central Tendency

Statistics

Exercise

Mean

- If there are 3 observations 15, 20, 25 then the sum of deviation of the observation from their AM is
 - 0
 - 5
 - 5
 - none
- If there are two groups containing 30 and 20 observations and having 50 and 60 as arithmetic means, then the combined arithmetic mean is
 - 55
 - 56
 - 54
 - 52
- The average salary of a group of unskilled workers is Rs 10,000 and that of a group of skilled workers is Rs 15,000. If the combined salary is Rs 12,000, then what is the percentage of skilled workers?
 - 40%
 - 40%
 - 60%
 - none
- The mean salary of a group of 50 persons is Rs 5,850. Later on it is discovered that the salary of one employee has been wrongly taken as Rs 8,000 instead of Rs 7,800. The corrected mean salary is
 - Rs 5,854
 - Rs 5,846
 - Rs 5,650
 - none
- The average age of 15 students of a class is 15 years. Out of them, the average age of 5 students is 14 years and that of other 9 students is 16 years. The age of the 15th students is:
 - 11 years
 - 14 years
 - 15 years
 - none of these

Partition Value

- What is the median for the following observations? 5, 8, 6, 9, 11, 4.
 - 6
 - 7
 - 8
 - none of these
- What is the value of the first quartile for observations 15, 18, 10, 20, 23, 28, 12, 16?
 - 17
 - 16
 - 12.75
 - 12
- The third decile for the numbers 15, 10, 20, 25, 18, 11, 9, 12 is
 - 13
 - 10.70
 - 11
 - 11.50
- If the difference between mean and mode is 63, then the difference between mean and median will be ____
 - 63
 - 31.5
 - 21
 - none of the above

Mode

10. What is the modal value for the numbers 5, 8, 6, 4, 10, 15, 18, 10?

- (a) 18 (c) 14
(b) 10 (d) none of these

11. Find the mode of the following:

0-10	10-20	20-30	30-40	40-50	50-60
7	14	22	34	20	19

- (a) 32 (b) 34.61
(c) 25.42 (d) 35

Geometric Mean

12. What is the GM for the numbers 8, 24 and 40?

- (a) 24 (c) $8\sqrt[3]{15}$
(b) 12 (d) 10

13. If GM of x is 10 and GM of y is 15, then the GM of xy is

- (a) 150 (c) $\log 150$
(b) $\log 10 \times \log 15$ (d) none of these

Harmonic Mean

14. The harmonic mean for the numbers 2, 3, 5 is

- (a) 2.00 (c) 2.90
(b) 3.33 (d) $-\sqrt[3]{30}$

15. If there are two groups with 75 and 65 as harmonic means and containing 15 and 13 observations then the combined HM is given by

- (a) 65 (c) 70
(b) 70.36 (d) 71

16. What is the HM of 1, $\frac{1}{2}$, $\frac{1}{3}$,..... $\frac{1}{n}$?

- (a) n (c) $\frac{2}{(n+1)}$
(b) 2n (d) $\frac{n(n+1)}{2}$

17. An aero plane flies from A to B at the rate of 500 km/hour and comes back from B to A at the rate of 700 km/hour. The average speed of the aero plane is

- (a) 600 km/hr (c) $100\sqrt{35}$ km/hr
(b) 583.33 km/hr (d) 620 km/hr

18. Given the weights for the numbers 1,2,3.....n are respectively $1^2, 2^2, 3^2, \dots, n^2$ then weighted HM is _

- (a) $\frac{2n+1}{4}$ (c) $\frac{2n+1}{3}$
(b) $\frac{2n+1}{6}$ (d) $\frac{2n+1}{2}$



Problems Based on Common Property

19. Two variables x and y are given by $y = 2x - 3$. If the median of x is 20, what is the median of y ?
- (a) 20 (c) 37
(b) 40 (d) 35
20. If the relationship between two variables u and v are given by $2u + v + 7 = 0$ and if the AM of u is 10, then the AM of v is
- (a) 17 (c) -27
(b) -17 (d) 27
21. If x and y are related by $x - y - 10 = 0$ and mode of x is known to be 23, then the mode of y is
- (a) 20 (c) 3
(b) 13 (d) 23

Relation Between AM GM & HM

22. If the AM and GM for two numbers are 6.50 and 6 respectively then the two numbers are
- (a) 6 and 7 (c) 10 and 3
(b) 9 and 4 (d) 8 and 5
23. If the AM and HM for two numbers are 5 and 3.2 respectively then the GM will be
- (a) 16.00 (c) 4.05
(b) 4.10 (d) 4.00
24. If the AM and GM for 10 observations are both 15, then the value of HM is
- (a) Less than 15 (c) 15
(b) More than 15 (d) cannot be determined



Additional Question Bank

- If the difference between mean and mode is 63, then the difference between mean and median will be _____.
(a) 63 (c) 21
(b) 31.5 (d) none of the above
- If the Arithmetic mean between two numbers is 64 and the geometric mean between them is 16. The Harmonic mean between them is _____.
(a) 64 (c) 16
(b) 4 (d) 40
- The average of 5 quantities is 6 and the average of 3 is 8. What is the average of the remaining two?
(a) 4 (c) 3
(b) 5 (d) 3.5
- The average age of a group of 10 students was 20 years. The average age increased by two years when two new students joined the group. What is the average age of two new students who joined the group?
(a) 22 years (c) 44 years
(b) 30 years (d) 32 years
- Geometric Mean of three observations 40, 50 and X is 10. The value of X is
(a) 2 (c) $\frac{1}{2}$
(b) 4 (d) none of the above
- The mean of first three term is 14 and mean of next two terms is 18. The mean of all five term is :
(a) 14.5 (c) 14
(b) 15 (d) 15.6
- The mean salary of a group of 50 persons is Rs 5,850. Later on it is discovered that the salary of one employee has been wrongly taken as Rs 8,000 instead of Rs 7,800. The corrected mean salary is
(a) Rs 5,854 (c) Rs 5,650
(b) Rs 5,846 (d) none of the above
- If the mode of a data is 18 and mean is 24, then median is –
(a) 18 (c) 22
(b) 24 (d) 21
- A man travels from Agra to Gwalior at an average speed of 30 km per hour and back at an average speed of 60 km per hour. What is his average speed?
(a) 38 km per hour (c) 45 km per hour
(b) 40 km per hour (d) 35 km per hour
- Geometric mean of 8, 4, 4, 2 is
(a) 4 (c) 8
(b) 2 (d) none of these



Theory Based Questions

- Measures of central tendency for a given set of observations measures
 - The scatterings of the observations
 - The central location of the observations
 - Both (a) and (b)
 - None of these
- While computing the AM from a grouped frequency distribution, we assume that
 - The classes are of equal length
 - The classes have equal frequency
 - All the values of a class are equal to the mid-value of that class
 - None of these
- Which of the following statements is wrong?
 - Mean is rigidly defined
 - Mean is not affected due to sampling fluctuations
 - Mean has some mathematical properties
 - All these
- Which of the following statements is true?
 - Usually mean is the best measure of central tendency
 - Usually, median is the best measure of central tendency
 - Usually, mode is the best measure of central tendency
 - Normally, GM is the best measure of central tendency
- For open-end classification, which of the following is the best measure of central tendency?

(a) AM	(b) GM
(c) Median	(d) Mode
- The presence of extreme observations does not affect

(a) AM	(b) Median
(c) Mode	(d) Any of these
- In case of an even number of observations which of the following is median?
 - Any of the two middle-most value
 - The simple average of these two middle values
 - The weighted average of these two middle values
 - Any of these
- The most commonly used measure of central tendency is

(a) AM	(b) Median
(c) Mode	(d) Both GM and HM
- Which one of the following is not uniquely defined?

(a) Mean	(b) Median
(c) Mode	(d) All of these measures
- Which of the following measure of the central tendency is difficult to compute?

(a) Mean	(b) Median
(c) Mode	(d) GM



11. Which measure(s) of central tendency is (are) considered for finding the average rates?

(a) AM	(b) GM
(c) HM	(d) Both (a) and (c)

12. For a moderately skewed distribution, which of the following relationship holds?

(a) Mean – Mode = 3(Mean – Median)	(b) Median – Mode = 3 (Mean – Median)
(c) Mean – Median = 3 (Mean – Mode)	(d) Mean – Median = 3(Median – Mode)

13. Weighted averages are considered when

(a) The data are not classified	(b) The data are put in the form of grouped frequency distribution
(c) All the observations are not of equal importance	(d) Both (a) and (c)

14. Which of the following results hold for a set of distinct positive observations?

(a) $AM \geq GM \geq HM$	(b) $HM \geq GM \geq AM$
(c) $AM > GM > HM$	(d) $GM > AM > HM$

15. When a firm register both profits and losses, which of the following measure of central tendency cannot be considered?

(a) AM	(b) GM
(c) Median	(d) Mode

16. Quartiles are the values dividing a given set of observations into

(a) Two equal parts	(b) Four equal parts
(c) five equal parts	(d) None of these

17. Quartiles can be determined graphically using

(a) Histogram	(b) Frequency Polygon
(c) Ogive	(d) Pie chart

18. Which of the following measure(s) possesses (possess) mathematical properties?

(a) AM	(b) GM
(c) HM	(d) All of these

19. Which of the following measure(s) satisfies (satisfy) a linear relationship between two variables?

(a) Mean	(b) Median
(c) Mode	(d) All of these

20. Which of the following measures of central tendency is based on only fifty percent of the central values?

(a) Mean	(b) Median
(c) Mode	(d) both (a) and (b)



Answer Sheet

Exercise

1.	a	4.	b	7.	c	10.	b	13.	a	16.	c	19.	c	22.	b
2.	c	5.	a	8.	b	11.	b	14.	c	17.	b	20.	c	23.	d
3.	a	6.	b	9.	c	12.	c	15.	c	18.	c	21.	b	24.	d

Additional Question Bank

1.	c	4.	a	7.	b	10.	c	13.	c	16.	c
2.	b	5.	c	8.	c	11.	a	14.	c	17.	c
3.	c	6.	d	9.	b	12.	d	15.	c		

Theory Based Questions

1.	B	4.	A	7.	B	10.	D	13.	C	16.	B	19.	d
2.	C	5.	C	8.	A	11.	D	14.	C	17.	C	20.	b
3.	B	6.	B	9.	C	12.	A	15.	B	18.	D		



10B

Measures of Dispersion

Chapter

Statistics

Exercise

Range

- What is the coefficient of range for the following wages of 8 workers?
Rs 80, Rs 65, Rs 90, Rs 60, Rs 75, Rs 70, Rs 72, Rs 85.
(a) Rs 30 (c) 30
(b) Rs 20 (d) 20
- If R_x and R_y denote ranges of x and y respectively where x and y are related by $3x + 2y + 10 = 0$, what would be the relation between x and y ?
(a) $R_x = R_y$ (c) $3R_x = 2R_y$
(b) $2R_x = 3R_y$ (d) $R_x = 2R_y$

- What is the coefficient of range for the following distribution?

Class interval:	10 - 19	20 - 29	30 - 39	40 - 49	50 - 59
Frequency:	11	25	16	7	3

- If the range of x is 2, what would be range of $-3x + 50$?
(a) 2 (c) -6
(b) 6 (d) 44

Mean Deviation

- What is the value of mean deviation about mean for the numbers?
5, 8, 6, 3, 4.
(a) 5.20 (c) 1.44
(b) 7.20 (d) 2.23
- What is the value of mean deviation about for the following observations?
50, 60, 50, 50, 60, 60, 60, 50, 50, 50, 60, 60, 60, 50.
(a) 5 (c) 35
(b) 7 (d) 10
- The coefficient of mean deviation about mean for the first 9 natural numbers is
(a) $200/9$ (c) $400/9$
(b) 80 (d) 50
- If the relation between x and y is $5y - 3x = 10$ and the mean deviation about mean for x is 12, then the mean deviation of y about mean is
(a) 7.20 (c) 20
(b) 6.80 (d) 18.80



9. If two variables x and y are related by $2x + 3y - 7 = 0$ and the mean and mean deviation about mean of x are 1 and 0.3 respectively, then the coefficient of mean deviation of y about its mean is
- (a) -5 (c) 50
(b) 12 (d) 4
10. The mean deviation about mode for the numbers $4/11, 6/11, 8/11, 9/11, 12/11, 8/11$ is
- (a) $1/6$ (c) $6/11$
(b) $1/11$ (d) $5/11$

Quartile Deviation

11. The quartiles of a variable are 45, 52 and 65 respectively. Its quartile deviation is
- (a) 10 (c) 25
(b) 20 (d) 8.30
12. If x and y are related as $3x + 4y = 20$ and the quartile deviation of x is 12, then the quartile deviation of y is
- (a) 16 (c) 10
(b) 14 (d) 9

Standard Deviation

13. What is the standard deviation of 5, 5, 9, 9, 9, 10, 5, 10, 10?
- (a) $\sqrt{14}$ (c) 4.50
(b) $\frac{\sqrt{42}}{3}$ (d) 8
14. If the mean and SD of x are a and b respectively, then the SD of $\frac{x-a}{b}$ is
- (a) -1 (c) ab
(b) 1 (d) a/b
15. What is the coefficient of variation of the following numbers?
53, 52, 61, 60, 64.
- (a) 8.09 (c) 20.23
(b) 18.08 (d) 20.45
16. If the SD of x is 3, what is the variance of $(5-2x)$?
- (a) 36 (c) 1
(b) 6 (d) 9
17. If x and y are related by $2x + 3y + 4 = 0$ and SD of x is 6, then SD of y is
- (a) 22 (c) $\sqrt{5}$
(b) 4 (d) 9
18. If the SD of the 1st n natural numbers is 2, then the value of n must be
- (a) 2 (c) 6
(b) 7 (d) 5
19. If x and y are related by $y = 2x + 5$ and the SD and AM of x are known to be 5 and 10 respectively, then the coefficient of variation is
- (a) 25 (c) 40
(b) 30 (d) 20



20. The mean and SD for a, b and 2 are 3 and $\frac{2}{\sqrt{3}}$ respectively. The value of ab would be
(a) 5 (c) 11
(b) 6 (d) 3
21. The mean and SD for a group of 100 observations are 65 and 7.03 respectively. If 60 of these observations have mean and SD as 70 and 3 respectively, what is the SD for the group comprising 40 observations?
(a) 16 (c) 4
(b) 25 (d) 2
22. If two samples of sizes 30 and 20 have means as 55 and 60 and variances as 16 and 25 respectively, then what would be the SD of the combined sample of size 50?
(a) 5.00 (c) 5.23
(b) 5.06 (d) 5.35
23. The mean and SD of a sample of 100 observations were calculated as 40 and 5.1 respectively by a CA student who took one of the observations as 50 instead of 40 by mistake. The current value of SD would be
(a) 4.90 (c) 4.88
(b) 5.00 (d) 4.85



Additional Question Bank

- If sum of squares of the values = 3390, $N = 30$ and standard deviation = 7, find out the mean.
(a) 113 (c) 8
(b) 210 (d) none of these
- If standard deviation of first 'n' natural numbers is 2 then value of 'n' is
(a) 10 (c) 6
(b) 7 (d) 5
- The standard deviation is independent of change of
(a) Scale (c) both origin and scale
(b) Origin (d) none of these
- If the mean of a frequency distribution is 100 and coefficient of variation is 45% then standard deviation is:
(a) 45 (c) 4.5
(b) 0.45 (d) 450
- Which of the following measures of central tendency cannot be calculated by graphical method?
(a) Mean (c) median
(b) Mode (d) Quartile
- Find at the variance given that the Arithmetic Mean = $(8 + 4) / 2$
(a) 2 (c) 1
(b) 6 (d) 4
- In normal distribution mean, median and mode are
(a) Equal (c) zero
(b) Not equal (d) none of above
- Coefficient of mean deviation about mean for the first 9 natural numbers is
(a) $200/9$ (c) $400/9$
(b) 80 (d) 50
- If mean = 5, standard deviation = 2.6, median = 5 and quartile deviation = 1.5, then the coefficient of quartile deviation equals
(a) 35 (c) 30
(b) 39 (d) 32
- What is value of mean deviation about mean from the number 5, 8, 6, 3 and 4?
(a) 5.20 (c) 1.44
(b) 7.20 (d) 2.23
- For the observation of 6, 4, 1, 6, 5, 10, 4, 8 the range is :
(a) 10 (c) 8
(b) 9 (d) none
- If a variance of a random variable 'x' is 23, then what is variance of $2x + 10$?
(a) 56 (c) 46
(b) 33 (d) 92



13. If variance = 148.6 and $\bar{x} = 40$, then the coefficient of variation is :
- (a) 37.15 (c) 33.75
(b) 30.48 (d) none of the above
14. The SD of first n natural number is _____
- (a) $\sqrt{\frac{n^2-1}{12}}$ (c) $\sqrt{\frac{n(n-1)}{6}}$
(b) $\sqrt{\frac{n(n+1)}{12}}$ (d) none of these
15. If mean and coefficient of variation of the marks of 10 students is 20 and 80 respectively. What will be variance of them?
- (a) 256 (c) 25
(b) 16 (d) none of these
16. If same amount is added to or subtracted from all the values of individual series then the standard deviation and variance both shall be _____
- (a) Changed (c) same
(b) Unchanged (d) none of these
17. The sum of the squares of deviations of a set of observations has the smallest value, when the deviations are taken from their:
- (a) A.M (b) H.M
(c) G.M (d) None
18. If two samples of sizes 30 and 20 have means as 55 and 60 and variances as 16 and 25 respectively, then what would be the S.D of the combined sample size 50?
- (a) 5.33 (b) 5.17
(c) 5.06 (d) 5
19. _____ are used for measuring central tendency, dispersion and skewness:
- (a) Median (b) Deciles
(c) Percentiles (d) Quartiles
20. Which of the following companies A or B is more consistent so far as the payment of dividend is concerned?
- Dividend paid by A: 5 9 6 12 15 10 8 10
Dividend paid by B: 4 8 7 15 18 9 6 6
- (a) A (b) B
(c) Both A & B (d) Neither A nor B
21. A lady travel at a speed of 20 km/h and returned at quicker speed. If her average speed of the whole journey is 24 km/h, find the speed of return journey (in km/h)
- (a) 25 (b) 30
(c) 35 (d) 38
22. If Standard deviation of x is σ , then Standard deviation of $ax + b$, where a, b and c ($c \neq 0$) are arbitrary constants, will be
- (a) σ (b) $\frac{a\sigma+b}{c}$
(c) $\frac{a}{c} \cdot \sigma$ (d) $\left| \frac{a}{c} \right| \sigma$



23. The quartile deviation is:
- (a) $\frac{2}{3}$ of S.D
(b) $\frac{4}{5}$ of S.D
(c) $\frac{5}{6}$ of S.D
(d) None of these
24. If a variance of a random variable 'x' is 23, then what is variance of $2x + 10$?
- (a) 56
(b) 33
(c) 46
(d) 92
25. If variance = 148.6 and $\bar{x} = 40$, then the coefficient of variation is:
- (a) 37.15
(b) 30.48
(c) 33.75
(d) None

**Theory Based Questions**

1. Which of the following statements is correct?
 - (a) Two distributions may have identical measures of central tendency and dispersion.
 - (b) Two distributions may have the identical measures of central tendency but different measures of dispersion
 - (c) Two distributions may have the different measures of central tendency but identical measures of dispersion.
 - (d) All the statements (a), (b) and (c)
2. Dispersion measures
 - (a) The scatternets of a set of observations
 - (b) The concentration of a set of observations
 - (c) Both (a) and (b)
 - (d) Neither (a) and (b)
3. When it comes to comparing two or more distributions, we consider
 - (a) Absolute measures of dispersion
 - (b) Relative measures of dispersion
 - (c) Both (a) and (b)
 - (d) Either (a) or (b)
4. Which one is easier to compute?
 - (a) Relative measures of dispersion
 - (b) Absolute measures of dispersion
 - (c) Both (a) and (b)
 - (d) Range
5. Which one is an absolute measure of dispersion?
 - (a) Range
 - (b) Mean Deviation
 - (c) Standard Deviation
 - (d) All these measures
6. Which measure of dispersion is most useful?
 - (a) Standard Deviation
 - (b) Quartile deviation
 - (c) Mean Deviation
 - (d) Range
7. Which measures of dispersions is not affected by the presence of extreme observations?
 - (a) Range
 - (b) Mean deviation
 - (c) Standard deviation
 - (d) Quartile deviation
8. Which measure of dispersion is based on the absolute deviations only?
 - (a) Standard Deviation
 - (b) Mean deviation
 - (c) Quartile deviation
 - (d) Range
9. Which measure is based on only the central fifty percent of the observations?
 - (a) Standard deviation
 - (b) Quartile deviation
 - (c) Mean deviation
 - (d) All these measures
10. Which measure of dispersion is based on all the observations?
 - (a) Mean deviation
 - (b) Standard deviation
 - (c) Quartile deviation
 - (d) (a) and (b) but not (c)



11. The appropriate measure of dispersion for open-end classification is
(a) Standard deviation (b) Mean deviation
(c) Quartile deviation (d) All these measures
12. The most commonly used measure of dispersion is
(a) Range (b) Standard deviation
(c) Coefficient of variation (d) Quartile deviation
13. Which measure of dispersion has some desirable mathematical properties?
(a) Standard deviation (b) Mean deviation
(c) Quartile deviation (d) All these measure
14. If the profits of a company remain the same for the last ten months, then the standard deviation of profits for these ten months would be?
(a) Positive (b) Negative
(c) Zero (d) (a) or (c)
15. Which measure of dispersion is considered for finding a pooled measure of dispersion after combining several groups?
(a) Mean deviation (b) Standard deviation
(c) Quartile deviation (d) Any of these
16. A shift of origin has no impact on
(a) Range (b) Mean deviation
(c) Standard deviation (d) All these and quartile deviation
17. The range of 15, 12, 10, 9, 17, 20 is
(a) 5 (b) 12
(c) 13 (d) 11
18. For any two numbers SD is always
(a) Twice the range (b) Half of the range
(c) square of the range (d) None of these
19. If all the observations are increased by 10, then
(a) SD would be increased by 10
(b) Mean deviation would be increased by 10
(c) Quartile deviation would be increased by 10
(d) All these three remain unchanged
20. If all the observations are multiplied by 2, then
(a) New SD would be also multiplied by 2
(b) New SD would be half of the previous SD
(c) New SD would be increased by 2
(d) New SD would be decreased by 2

**Answer Sheet****Exercise**

1.	d	2.	c	3.	c	4.	b	5.	c	6.	a	7.	c	8.	a	9.	b	10.	b
11.	a	12.	d	13.	b	14.	b	15.	a	16.	a	17.	b	18.	b	19.	c	20.	c
21.	c	22.	b	23.	b														

Additional Question Bank

1.	c	2.	a	3.	b	4.	a	5.	a	6.	b	7.	a	8.	c	9.	c	10.	c
11.	b	12.	d	13.	b	14.	a	15.	a	16.	b	17.	a	18.	c	19.	d	20.	a
21.	b	22.	d	23.	a	24.	d	25.	b										

Theory Based Questions

1.	d	2.	a	3.	b	4.	d	5.	d	6.	a	7.	d	8.	b	9.	b	10.	d
11.	c	12.	b	13.	a	14.	c	15.	b	16.	d	17.	d	18.	b	19.	d	20.	a



Summary Notes



11A

Correlation Analysis

Statistics

Exercise

Basic Problems

1. If $y = a + bx$, then what is the coefficient of correlation between x and y ?
- (a) 1 (c) 1 or -1 according as $b > 0$ or $b < 0$
 (b) -1 (d) none of these

Karl Pearson Correlation Coefficient

2. Compute the co-efficient between x & y from the following data $n = 10$, $\sum xy = 220$, $\sum x^2 = 200$, $\sum y^2 = 262$, $\sum x = 40$, $\sum y = 50$
- (a) 0.91 (c) 0.4
 (b) 0.625 (d) 0.5
3. If for two variables x and y , the covariance, variance of x and variance of y are 40, 16 and 256 respectively, what is the value of the correlation coefficient?
- (a) 0.01 (c) 0.4
 (b) 0.625 (d) 0.5
4. If $\text{cov}(x, y) = 15$, what restrictions should be put for the standard deviations of x and y ?
- (a) No restriction
 (b) The product of the standard deviations should be more than 15.
 (c) The product of the standard deviations should be less than 15.
 (b) The sum of the standard deviations should be less than 15.
5. If the covariance between two variables is 20 and the variance of one of the variables is 16, what would be the variance of the other variable?
- (a) More than 100 (c) less than 10
 (b) More than 10 (d) more than 1.25
6. What is the value of correlation coefficient due to Pearson on the basis of the following data:

X:	-5	-4	-3	-2	-1	0	1	2	3	4	5
Y:	27	18	11	6	3	2	3	6	11	18	27

- (a) 1 (c) 0
 (b) -1 (d) -0.5

Spearman Rank Correlation

7. If the sum of squares of difference of ranks, given by two judges A and B, of 8 students in 21, what is the value of rank correlation coefficient?
- (a) 0.7 (c) 0.75
 (b) 0.65 (d) 0.8



8. If the rank correlation coefficient between marks in management and mathematics for a group of students is 0.6 and the sum of squares of the differences in ranks is 66, what is the number of students in the group?
 (a) 10 (c) 8
 (b) 9 (d) 11
9. While computing rank correlation coefficient between profit and investment for the last 6 years of a company the difference in rank for a year was taken 3 instead of 4. What is the rectified rank correlation coefficient if it is known that the original value of rank correlation coefficient was 0.4?
 (a) 0.3 (c) 0.25
 (b) 0.2 (d) 0.28

Coefficient of Concurrent Deviation

10. For 10 pairs of observations no. of concurrent deviations was found to be 4. What is the value of the coefficient of concurrent deviation?
 (a) $\sqrt{0.2}$ (c) $1/3$
 (b) $-\sqrt{0.2}$ (d) $-1/3$
11. The coefficient of concurrent deviation for p pairs of observations was found to be $1/\sqrt{3}$. If the number of concurrent deviations was found to be 6, then the value of p is
 (a) 10 (c) 8
 (b) 9 (d) none of these

Property Based Problems

12. If $u + 5x = 6$ and $3y - 7v = 20$ and the correlation coefficient between x and y is 0.58 then what would be the correlation coefficient between u and v?
 (a) 0.58 (c) -0.84
 (b) -0.58 (d) 0.84
13. If the relation between x and u is $3x + 4u + 7 = 0$ and the correlation coefficient between x and y is -0.6, then what is the correlation coefficient between u and y?
 (a) -0.6 (c) 0.6
 (b) 0.8 (d) -0.8

14. From the following data

X:	2	3	5	4	7
Y:	4	6	7	8	10

Two coefficients of correlation were found to be 0.93. what is the correlation between u and v as given below?

U:	-3	-2	0	-1	2
V:	-4	-2	-1	0	2

- (a) -0.93 (c) 0.57
 (b) 0.93 (d) -0.57
15. Referring the data presented in Q.no 8, what would be the correlation between u and v?
- | | | | | | |
|----|-----|-----|-----|-----|-----|
| U: | 10 | 15 | 25 | 20 | 35 |
| V: | -24 | -36 | -42 | -48 | -60 |
- (a) -0.6 (c) -0.93
 (b) 0.6 (d) 0.93
16. If $r = 0.6$ then the coefficient of non-determination is
 (a) 0.4 (b) -0.6 (c) 0.36 (d) 0.64



Additional Question Bank

- When each individual gets the exactly opposite rank by the two judges, then the rank correlation will be _____.

(a) 0	(c) +1
(b) -1	(d) $\frac{1}{2}$
- If the coefficient of correlation between X and Y variables is +0.90 then what will be the coefficient of determination?

(a) 0.30	(c) 0.94
(b) 0.81	(d) none of these
- In a beauty contest there were 10 competitions. Rank of these candidates are assigned by two judges A and B. the sum of squares of differences of ranks is 44. The value of rank correlation is:

(a) 0.70	(c) 0.80
(b) 0.73	(d) 0.60
- The coefficient of correlation between x and y is 0.6. If x and y values are multiplied by -1, then the coefficient of correlation will be:

(a) 0.6	(c) $\frac{1}{0.6}$
(b) -0.6	(d) $1 - 0.6$
- If two regression lines are $5y = 9x - 22$ and $20x = 9y + 350$, then the value of correlation coefficient (r) will be:

(a) 0.10	(c) -0.90
(b) -0.10	(d) 0.90
- If $r = 0.6$ then the coefficient of non-determination will be:

(a) 0.40	(c) 0.36
(b) -0.60	(d) 0.64
- The correlation coefficient (r) is the _____ of the two regression coefficients (b_{yx} and b_{xy})

(a) AM	(c) HM
(b) GM	(d) median
- The coefficient of determination is defined by the formula

(a) $r^2 = \frac{1 - \text{unexplained variance}}{\text{total variance}}$	(c) both (a) and (b)
(b) $r^2 = \frac{1 - \text{explained variance}}{\text{total variance}}$	(d) none
- A relationship $r^2 = 1 - \frac{500}{300}$ is not possible

(a) True	(c) both
(b) False	(d) none



Theory Based Questions

- Bivariate Data are the data collected for
 - Two variables
 - More than two variables
 - Two variables at the same point of time
 - Two variables at different points of time
- For a bivariate frequency table having $(p + q)$ classification the total number of cells is
 - p
 - $p + q$
 - q
 - pq
- Some of the cell frequencies in a bivariate frequency table may be
 - Negative
 - Zero
 - a or b
 - None of these
- For a $p \times q$ bivariate frequency table, the maximum number of marginal distributions is
 - p
 - $p + q$
 - 1
 - 2
- For a $p \times q$ classification of bivariate data, the maximum number of conditional distributions is
 - p
 - $p + q$
 - pq
 - p or q
- Correlation analysis aims at
 - Predicting one variable for a given value of the other variable
 - Establishing relation between two variables
 - Measuring the extent of relation between two variables
 - Both (b) and (c)
- What is spurious correlation?
 - It is a bad relation between two variables
 - It is very low correlation between two variables
 - It is the correlation between two variables having no causal relation
 - It is a negative correlation
- Scatter diagram is considered for measuring
 - Linear relationship between two variables
 - Curvilinear relationship between two variables
 - Neither (a) or (b)
 - Both (a) and (b)
- If the plotted points in a scatter diagram lie from upper left to lower right, then the correlation is
 - Positive
 - Zero
 - Negative
 - None of these
- If the plotted points in a scatter diagram are evenly distributed, then the correlation is
 - Zero
 - Negative
 - Positive
 - (a) or (b)
- If all the plotted points in a scatter diagram lie on a single line, then the correlation is
 - Perfect positive
 - Perfect negative
 - Both (a) and (b)
 - Either (a) or (b)



12. The correlation between shoe-size and intelligence is
(a) Zero (b) Positive
(c) Negative (d) None of these
13. The correlation between the speed of an automobile and the distance travelled by it after applying the brakes is
(a) Negative (b) Zero
(c) Positive (d) None of these
14. Scatter diagram helps us to
(a) Find the nature correlation between two variables
(b) Compute the extent of correlation between two variables
(c) Obtain the mathematical relationship between two variables
(d) Both (a) and (c)
15. Pearson's correlation coefficient is used for finding
(a) Correlation for any type of relation
(b) Correlation for linear relation only
(c) Correlation for curvilinear relation only
(d) Both (b) and (c)
16. Product moment correlation coefficient is considered for
(a) Finding the nature of correlation
(b) Finding the amount of correlation
(c) Both (a) and (b)
(d) Either (a) and (b)
17. If the value of correlation coefficient is positive, then the points in a scatter diagram tend to cluster
(a) From lower left corner to upper right corner
(b) From lower left corner to lower right corner
(c) From lower right corner to upper left corner
(d) From lower right corner to upper right corner
18. Product moment correlation coefficient may be defined as the ratio of
(a) The product of standard deviations of the two variables to the covariance between them
(b) The covariance between the variables to the product of the variances of them
(c) The covariance between the variables to the product of their standard deviations
(d) Either (b) or (c)
19. The covariance between two variables is
(a) Strictly positive (b) Strictly negative
(c) Always 0 (d) Either positive or negative or zero
20. The coefficient of correlation between two variables
(a) Can have any unit
(b) Is expressed as the product of units of the two variables
(c) Is a unit free measure
(d) None of these
21. What are the limits of the correlation coefficient?
(a) No limit
(b) -1 and 1
(c) 0 and 1, including the limits
(d) -1 and 1, including the limits



22. In case the correlation coefficient between two variables is 1, the relationship between the two variables would be
- (a) $y = a + bx$
 - (b) $y = a + bx, b > 0$
 - (c) $y = a + bx, b < 0$
 - (d) $y = a + bx$, both a and b being positive
23. If the relationship between two variables x and y is given by $2x + 3y + 4 = 0$, then the value of the correlation coefficient between x and y is
- (a) 0
 - (b) 1
 - (c) -1
 - (d) negative
24. For finding correlation between two attributes, we consider
- (a) Pearson's correlation coefficient
 - (b) Scatter diagram
 - (c) Spearman's rank correlation coefficient
 - (d) Coefficient of concurrent deviations.
25. For finding the degree of agreement about beauty between two judges in a beauty contest, we use
- (a) Scatter diagram
 - (b) coefficient of rank correlation
 - (c) Coefficient of correlation
 - (d) Coefficient of concurrent deviation
26. If there is a perfect disagreement between the marks in Geography and Statistics, then what would be the value of rank correlation coefficient?
- (a) Any value
 - (b) Only 1
 - (c) Only -1
 - (d) (b) or (c)
27. When we are not concerned with the magnitude of the two variables under discussion, we consider
- (a) Rank correlation coefficient
 - (b) product moment correlation coefficient
 - (c) Coefficient of concurrent deviation
 - (d) (a) or (b) but not (c)
28. What is the quickest method to find correlation between two variables?
- (a) Scatter diagram
 - (b) Method of concurrent deviation
 - (c) Method of rank correlation
 - (d) Method of product moment correlation
29. What are the limits of the coefficient of concurrent deviations?
- (a) No limit
 - (b) Between -1 and 0, including the limiting values
 - (c) Between 0 and 1, including the limiting values
 - (d) Between -1 and 1, the limiting values inclusive
30. The method applied for deriving the regression equations is known as
- (a) Least squares
 - (b) Concurrent deviation
 - (c) Product moment
 - (d) Normal equation

**Answer Sheet****Exercise**

1.	c	2.	a	3.	b	4.	b	5.	a	6.	c	7.	c	8.	a	9.	b	10.	d
11.	a	12.	b	13.	c	14.	b	15.	c	16.	d								

Theory Based Questions

1.	b	2.	b	3.	b	4.	a	5.	d	6.	d	7.	b	8.	c	9.	a
----	---	----	---	----	---	----	---	----	---	----	---	----	---	----	---	----	---

Additional Question Bank

1.	c	2.	d	3.	b	4.	d	5.	b	6.	d	7.	c	8.	d	9.	c	10.	a
11.	d	12.	a	13.	a	14.	a	15.	b	16.	c	17.	a	18.	c	19.	d	20.	c
21.	d	22.	b	23.	c	24.	c	25.	b	26.	c	27.	c	28.	b	29.	d	30.	a



Summary Notes



11B Regression Analysis

Statistics

Exercise

Regression Coefficient (AIM-1)

1. You are given the following information's:

	Price (Rs.) (X)	Amounts demanded ('000 units) (y)
Arithmetic Mean	20	55
Standard deviation	2	5

correlation coefficient $r = 0.6$

The regression coefficient of y on x (b_{yx}) is

- (a) -3 (b) +3
(c) 1.5 (d) None
2. The regression coefficient of X on Y of the following data.
 $N = 10$; $\Sigma X = 250$; $\Sigma Y = 210$; $\Sigma(X-25)^2 = 262$;
 $\Sigma(Y - 21)^2 = 322$, $\Sigma(X - 25)(Y - 21) = 192$ is
 (a) 0.596 (b) -0.414
 (c) 0.568 (d) None
3. The regression coefficient of Y on X (b_{yx}) of the following data cov. (X ; Y) = 121; $\sigma_x = 15$; $\sigma_y = 14$ is
 (a) 0.54 (b) 0.55
 (c) 0.6875 (d) None
4. Given the following data :
 $\Sigma(X - \bar{X})(Y - \bar{Y}) = 3900$, $\Sigma(X - \bar{X})^2 = 6360$,
 $\Sigma(Y - \bar{Y})^2 = 2668$
 then the regression coefficient b_{xy} is :
 (a) 1-46
 (b) 2.363
 (c) 4.363
 (d) None
5. In a correlation study of two variables X and Y, the following values are obtained: $\bar{X} = 45$, $\bar{Y} = 54$,
 $\sigma_x = 4$; $\sigma_y = 5$; $r = 0.8$, The two regression coefficients (b_{xy} , b_{yx}) are
 (a) (5 . 57,3. 12)
 (b) (0.64, 1.00)
 (c) (7.12,2.67)
 (d) None of these
6. Regression equation of Y on X is $4X - 5 Y + 31 = 0$ and $\sigma_x = 9$. Hence Cov.(X, Y) is equal to :
 (a) 9.25
 (b) 7.2
 (c) 5.4
 (d) None of these.



Regression Lines (AIM-2)

7. Following are the two normal equations obtained for deriving the regression line of y and x :
- $$5a + 10b = 40$$
- $$10a + 25b = 95$$
- The regression line of y on x is given by
- (a) $2x + 3y = 5$ (b) $y = 2 + 3x$
 (c) $2y + 3x = 5$ (d) $y = 3 + 5x$
8. Given the regression equations as $3x + y = 13$ and $2x + 5y = 20$, which one is the regression equation of y on x ?
- (a) 1st equation (b) both (a) and (b)
 (c) 2nd equation (d) none of these
9. Given that the variance of x is equal to the square of standard deviation by and the regression line of y on x is $y = 40 + 0.5(x - 30)$. Then regression line of x on y is
- (a) $y = 40 + 4(x - 30)$
 (b) $y = 40 + (x - 30)$
 (c) $y = 40 + 2(x - 30)$
 (d) $x = 30 + 2(x - 40)$

Estimating Value (AIM-3)

10. Find the regression equation from the following data:
 If $\sum X = 34$, $\sum Y = 56$, $\sum XY = 351$,
 $\sum X^2 = 234$, $\sum Y^2 = 554$, $N = 6$
 Hence estimate Y when X is 10 and estimate also x when Y is 12.
- (a) 12 & 13 (b) 12.60 & 15.89
 (c) 11.76 & 15.30 (d) none

Property Based Problem

11. If $u = 2x + 5$ and $v = -3y - 6$ and regression coefficient of y on x is 2.4, what is the regression coefficient of v on u ?
- (a) 3.6 (b) 2.4
 (c) -3.6 (d) -2.4
12. If $4y - 5x = 15$ is the regression line of y on x and the coefficient of correlation between x and y is 0.75, what is the value of the regression coefficient of x on y ?
- (a) 0.45 (b) 0.6
 (c) 0.9375 (d) none of these
13. If $y = 3x + 4$ is the regression line of y on x and the arithmetic mean of x is -1, what is the arithmetic mean of y ?
- (a) 1 (b) 7
 (c) -1 (d) none of these
14. If the regression line of y on x and of x on y are given by $2x + 3y = -1$ and $5x + 6y = -1$ then the arithmetic means of x and y are given by
- (a) (1, -1) (b) (-1, -1)
 (c) (-1, 1) (d) (2, 3)



Correlation & Regression

15. If the regression line of y on x and that of x on y are given by $y = -2x + 3$ and $8x = -y + 3$ respectively, what is the coefficient of correlation between x and y ?
- (a) 0.5 (b) -0.5
(c) $-1/\sqrt{2}$ (d) none of these
16. If the regression coefficient of y on x , the coefficient of correlation between x and y and variance of y are $-3/4$, $\frac{\sqrt{3}}{2}$ and 4 respectively, what is the variance of x ?
- (a) $2/\sqrt{3/2}$ (b) $4/3$
(c) $16/3$ (d) 4
17. In a bivariate distribution $b_{xy} = 0.49$ and $b_{yx} = 0.25$, then the coefficient of determination is given by:
- (a) 0.1313 (b) 0.1225
(c) 0.1523 (d) None
18. In a bivariate data $b_{xy} = 0.14$ and $b_{yx} = 0.38$, then the coefficient of non-determination is given by:
- (a) 0.3425 (b) 0.9468
(c) 0.5729 (d) None
19. In a bivariate data: $\sigma_x = 15$, $r = 0.60$, then the standard error of estimate of X on Y is given by :
- (a) 24 (b) 14
(c) 12 (d) None
20. For a bivariate data, the two lines of regression are $4x - y + 13 = 0$ and $4x - 9y + 17 = 0$. For this data $r =$
- (a) $1/9$ (b) $1/3$
(c) $3/4$ (d) None
21. If the correlation coefficient between two variables X and Y is 0.5 and the regression coefficient of X on Y is 0.2, then the regression coefficient of Y on X is:
- (a) 0.7 (b) ± 0.5
(c) 1.25 (d) None of these.



Additional Question Bank

- Two regression equations are as follows:
Regression equation of x on y: $5x - y = 22$
Regression equation of y on x: $64x - 45y = 24$
What will be the mean of x and y?
(a) $\bar{x} = 8, \bar{y} = 6$ (b) $\bar{x} = 6, \bar{y} = 8$
(c) $\bar{x} = 6, \bar{y} = 6$ (d) $\bar{x} = 8, \bar{y} = 8$
- The two lines of regression become identical when
(a) $R = 1$ (b) $r = 0$
(c) $R = -1$ (d) (a) or (b)
- If $r = 0.6$, then the coefficient of determination is
(a) 0.4 (b) 0.36
(c) -0.6 (d) 0.64
- The two regression lines passing through
(a) Represent means (b) (a) and (b)
(c) Represent S.Ds (d) none of these
- Out of the following the one which effects the regression coefficient is
(a) Change of origin only
(b) Change of scale and origin both
(c) change of scale only
(d) neither change in origin nor change of scale
- The regression equation x and y is $3x + 2y = 100$, the value of b_{xy}
(a) $-\frac{2}{3}$ (b) $\frac{3}{2}$
(c) $\frac{100}{3}$ (d) $\frac{2}{3}$
- The equation of two lines of regression for 'x' and 'y' are $5x = 22 + y$ and $64x = 24 + 45y$ then the value of regression coefficient of 'y' on 'x' will be _____.
(a) 5 (b) $\frac{64}{45}$
(c) $\frac{1}{5}$ (d) $\frac{45}{64}$
- If the correlation coefficient between two variables is zero, then the lines of regression are :
(a) Parallel (b) coincide
(c) Perpendicular (d) none of these
- If the value of correlation between x & y is 1, then the value of correlation coefficient between $x - 2$ and $\frac{-y}{2} + 1$ is :
(a) 1 (b) -1/2
(c) -1 (d) $\frac{1}{2}$
- The equations of two regression lines are $x + y = 6$ and $x + 2y = 10$, then the value of correlation coefficient between x and y is :
(a) -1/2 (b) $-1/\sqrt{2}$
(c) +1/2 (d) $+1/\sqrt{2}$



11. Two regression lines are

$$16x - 20y + 132 = 0$$

$$80x - 36y - 428 = 0$$

The value of the correlation coefficient is

- (a) 0.6 (b) 0.54
(c) -0.6 (d) 0.45

12. When the correlation coefficient r is equal to $+1$, all the points in a scatter diagram would be

- (a) On a straight line directed from upper left to lower right
(b) On a straight line directed from lower to upper right
(c) On a straight line
(d) Both (a) and (b)

13. Out of following which is correct?

- (a) $b_{yx} = r \frac{\sigma_x}{\sigma_y}$ (b) $b_{yx} = \frac{\pi \cdot \sum xy}{\sigma_x}$
(c) $b_{yx} = r \frac{\sigma_y}{\sigma_x}$ (d) $b_{yx} = \frac{\pi \cdot \sum xy}{\sigma_y}$



Theory Based Questions

- Regression analysis is concerned with
 - Establishing a mathematical relationship between two variables
 - Measuring the extent of association between two variables
 - Predicting the value of the dependent variable for a given value of the independent
 - Both (a) and (c)
- If there are two variables x and y , then the number of regression equations could be
 - 1
 - 2
 - Any number
 - 3
- Since Blood Pressure of a person depends on age, we need consider
 - The regression equation of Blood Pressure on age
 - The regression equation of age on Blood Pressure
 - Both (a) and (b)
 - Either (a) or (b)
- The difference between the observed value and the estimated value in regression analysis is known as
 - Error
 - Residue
 - Deviation
 - (a) or (b)
- The errors in case of regression equations are
 - Positive
 - Negative
 - Zero
 - All these
- The regression line of y on x is derived by
 - The minimization of vertical distances in the scatter diagram
 - The minimization of horizontal distances in the scatter diagram
 - Both (a) and (b)
 - (a) or (b)
- The two lines of regression become identical when
 - $r = 1$
 - $r = -1$
 - $r = 0$
 - (a) or (b)
- What are the limits of the two regression coefficients?
 - No limit
 - Must be positive
 - One positive and the other negative
 - Product of the regression coefficient must be numerically less than unity
- The regression coefficients remain unchanged due to a
 - Shift of origin
 - Shift of scale
 - Both (a) and (b)
 - (a) or (b)
- The method of least squares dictates that we choose a regression line where the sum of the square of deviations of the points from the line is:
 - Maximum
 - Minimum
 - Zero
 - Positive



11. A relationship where the flow of the data points is best represented by a curve is called:
- (a) Linear relationship
 - (b) Nonlinear relationship
 - (c) Linear positive
 - (d) Linear negative
12. What are the limits of the two regression coefficients?
- (a) Both positive or both negative.
 - (b) Must be positive,
 - (c) No limit.
 - (d) One positive and the other negative
13. The value we would predict for the dependent variable when the independent variables are all equal to zero is called:
- (a) Slope
 - (b) Sum of residual
 - (c) Intercept
 - (d) Difficult to tell

**Answer Sheet****Exercise**

1.	c	4.	a	7.	c	10.	c	13.	a	16.	c	19.	c
2.	a	5.	b	8.	c	11.	c	14.	a	17.	b	20.	b
3.	a	6.	b	9.	d	12.	a	15.	b	18.	b	21.	c

Additional Question Bank

1.	a	3.	b	5.	b	7.	b	9.	c	11.	a	13.	c
2.	d	4.	a	6.	a	8.	c	10.	b	12.	b		

Theory Based Questions

1.	d	3.	a	5.	d	7.	d	9.	a	11.	a	13.	c
2.	b	4.	d	6.	a	8.	d	10.	b	12.	a		



12

Probability

Chapter

Statistics

Exercise

Single Event

- Two balls are drawn from a bag containing 5 white and 7 black balls at random. What is the probability that they would be of different colors?
(a) $35/66$ (b) $30/66$
(c) $12/66$ (d) None of these
- What is the chance of throwing at least 7 in a single cast with 2 dice?
(a) $5/12$ (b) $7/12$
(c) $1/4$ (d) $17/36$
- If two unbiased dice are rolled together, what is the probability of getting no difference of points?
(a) $1/2$ (b) $1/3$
(c) $1/5$ (d) $1/6$
- There are 10 balls numbered from 1 to 10 in a box. If one of them is selected at random, what is the probability that the number printed on the ball would be an odd number greater than 4?
(a) 0.50 (b) 0.40
(c) 0.60 (d) 0.30
- Following are the wages of 8 workers in rupees: 50, 62, 40, 70, 45, 56, 32, 45
If one of the workers is selected at random, what is the probability that his wage would be lower than the average wage?
(a) 0.625 (b) 0.500
(c) 0.375 (d) 0.450
- It is given that a family of 2 children has a girl, what is the probability that the other child is also a girl?
(a) 0.50 (b) 0.75
(c) $1/3$ (d) $2/3$
- X and Y stand in a line with 6 other people. What is the probability that there are 3 persons between them?
(a) $1/5$ (b) $1/6$
(c) $1/7$ (d) $1/3$
- Four digits 1, 2, 4 and 6 are selected at random to form a four-digit number. What is the probability that the number so formed, would be divisible by 4?
(a) $1/2$ (b) $1/5$
(c) $1/4$ (d) $1/3$
- Find the probability that a leap year, selected at random, will contain 53 Sundays.
(a) $1/2$ (b) $1/5$
(c) $1/4$ (d) $2/7$



10. A bag contains 12 balls which are numbered from 1 to 12. If a ball is selected at random, what is the probability that the number of the ball will be a multiple of 5 or 6?
(a) 0.30 (b) 0.25
(c) 0.20 (d) $\frac{1}{3}$
11. If two unbiased dice are rolled, what is the probability of getting points neither 6 nor 9?
(a) 0.25 (b) 0.50
(c) .075 (d) 0.80
12. A number is selected at random from the first 1000 natural numbers. What is the probability that the number so selected would be a multiple of 7 or 11?
(a) 0.25 (b) 0.32
(c) 0.22 (d) 0.33
13. Probability that a truck stopped at a roadblock will have faulty brakes or badly worn tires are 0.23 and 0.24 respectively. Also, the probability is .38 that a truck stopped at a roadblock will have faulty brakes and or badly working tires. What is the probability that a truck stopped at the roadblock will have faulty brakes as well as badly worn tires?
(a) 0.45 (b) 0.39
(c) 0.62 (d) None of These
14. One number is chosen from numbers 1 to 200. Find the probability that it is divisible by 4 or 6?
(a) $\frac{67}{200}$ (b) $\frac{89}{200}$
(c) $\frac{56}{200}$ (d) None of These
15. A drawer contains 50 bolts and 150 nuts. Half of the bolts and half of the nuts are rusted. If one item is chosen at random, what is the probability that it is rusted or a bolt?
(a) $\frac{5}{8}$ (b) $\frac{1}{8}$
(c) $\frac{6}{8}$ (d) None of These
16. Two dice are thrown together. What is the probability that the sum of the numbers on the two faces is neither divisible by 3 nor by 4?
(a) $\frac{5}{10}$ (b) $\frac{4}{9}$
(c) $\frac{4}{7}$ (d) None of These
17. Two cards are drawn from a pack of 52 cards. What is the probability that either both are red or both are kings?
(a) $\frac{55}{120}$ (b) $\frac{55}{221}$
(c) $\frac{45}{78}$ (d) None of These
18. The probability that a person will get an electric contract is $\frac{2}{5}$ and the probability that he will not get plumbing contract is $\frac{4}{7}$. If the probability of getting at least one contract is $\frac{2}{3}$ what is the probability that he will get both?
(a) $\frac{19}{105}$ (b) $\frac{17}{105}$
(c) $\frac{21}{105}$ (d) None of These
19. The probability that a person visiting a dentist will have his teeth cleaned is 0.44, the probability that he will have a cavity filled is 0.24. The probability that he will have his teeth cleaned or a cavity filled is 0.60. What is the probability that a person visiting a dentist will have his teeth cleaned and cavity filled?
(a) 0.06 (b) 0.08
(c) 0.8 (d) None of These



20. Probability that Hameed passes in mathematics is $\frac{2}{3}$ and the probability that he passes in English is $\frac{4}{9}$. If the probability of passing both courses is $\frac{1}{4}$ what is the probability that Hameed will pass in at least one of these subjects?
 (a) $\frac{31}{36}$ (b) $\frac{17}{36}$
 (c) $\frac{6}{15}$ (d) None of These
21. The probability that an Accountant's job applicant has a B. Com. Degree is 0.85, that he is a CA is 0.30 and that he is both B. Com. and CA is 0.25 out of 500 applicants how many would be B. Com. or CA?
 (a) 450 (b) 535
 (c) 615 (d) None of These
22. A card is drawn from a deck of 52 cards. Find the probability of getting a king or a heart or a red card.
 (a) $\frac{5}{13}$ (b) $\frac{7}{13}$
 (c) $\frac{6}{15}$ (d) None of These

Where Question Demands At least One Event to Occur for *INDEPENDENT EVENTS*

23. A problem in probability was given to three CA students A, B and C whose chances of solving it are $\frac{1}{3}$, $\frac{1}{5}$ and $\frac{1}{2}$ respectively. What is the probability that the problem would be solved?
 (a) $\frac{4}{15}$ (b) $\frac{7}{8}$
 (c) $\frac{8}{15}$ (d) $\frac{11}{15}$
24. A problem in mathematics is given to 3 students whose chances of solving it are $\frac{1}{2}$, $\frac{1}{3}$, $\frac{1}{4}$ What is the probability that the problem is solved?
 (a) $\frac{3}{5}$ (b) $\frac{3}{4}$
 (c) $\frac{5}{6}$ (d) None of These
25. A can solve 90% of the problems given in a book and B can solve 70%. What is the probability that at least one of them will solve the problem, selected at random from the book?
 (a) 0.97 (b) 0.89
 (c) 0.56 (d) None of These
26. A machine operates if all of its three components function. The probability that the first component fails during the year is 0.14, the second component fails is 0.10 and the third component fails is 0.05. What is the probability that the machine will fail during the year?
 (a) 0.2647 (b) 0.8954
 (c) 0.5623 (d) None of These
27. A bag contains 5 white, 7 red and 8 black balls. Four balls are drawn one by one with replacement, what is the probability that at least one is white?
 (a) $1 - \left(\frac{3}{4}\right)^5$ (b) $1 - \left(\frac{3}{4}\right)^4$
 (c) $1 - \left(\frac{5}{4}\right)^4$ (d) none of These



More Than One Event

28. A bag contains 8 red and 5 white balls. Two successive draws of 3 balls are made without replacement. The probability that the first draw will produce 3 white balls and the second 3 red balls is
- (a) $5/223$ (b) $6/257$
(c) $7/429$ (d) $3/548$
29. A police-man fires four bullets on a dacoit. The probability that the dacoit will be killed by one bullet is 0.6. What is the probability that the dacoit is still alive?
- (a) 0.0256 (b) 0.8954
(c) 0.5623 (d) None of These
30. A bag contains 10 white and 15 black balls. Two balls are drawn in succession without replacement. What is the probability that first is white and second is black?
- (a) $5/7$ (b) $1/4$
(c) $7/9$ (d) $3/5$
31. Find the probability of drawing a diamond card in each of the two consecutive draws from a well shuffled pack of cards, if the card drawn is not replaced after the first draw.
- (a) $5/17$ (b) $1/16$
(c) $1/17$ (d) $3/17$
32. A bag contains 5 white, 7 red and 8 black balls. If four balls are drawn one by one without replacement, find the probability of getting all white balls.
- (a) $5/969$ (b) $6/969$
(c) $7/969$ (d) $1/969$
33. A bag contains 19 tickets, numbered from 1 to 19. A ticket is drawn and then another ticket is drawn without replacement. Find the probability that both tickets will show even numbers.
- (a) $5/17$ (b) $1/16$
(c) $4/19$ (d) $3/17$
34. A box contains 5 white and 7 black balls. Two successive drawn of 3 balls are made
(i) With replacement (ii) without replacement.
The probability that the first draw would produce white balls and the second draw would produce black balls are respectively
- (a) $6/321$ and $3/926$ (b) $1/20$ and $1/30$
(c) $35/144$ and $35/108$ (d) $7/968$ and $5/264$



Total Probability

35. There are two urns. The first urn contains 3 red and 5 white balls whereas the second urn contains 4 red and 6 white balls. A ball is taken at random from the first urn and is transferred to the second urn. Now another ball is selected at random from the second arm. The probability that the second ball would be red is
- (a) $7/20$ (b) $35/88$
(c) $17/52$ (d) $3/20$
36. There are three boxes with the following composition:
Box I: 5 Red + 7 White + 6 Blue balls
Box II: 4 Red + 8 White + 6 Blue balls
Box III: 3 Red + 4 White + 2 Blue balls
If one ball is drawn at random, then what is the probability that they would be of same colour?
- (a) $89/729$ (b) $97/729$
(c) $82/729$ (d) $23/32$
37. There are two boxes containing 5 white and 6 blue balls and 3 white and 7 blue balls respectively. If one of the the boxes is selected at random and a ball is drawn from it, then the probability that the ball is blue is
- (a) $115/227$ (b) $83/250$
(c) $137/220$ (d) $127/250$
38. A packet of 10 electronic components is known to include 2 defectives. If a sample of 4 components is selected at random from the packet, what is the probability that the sample does not contain more than 1 defective?
- (a) $1/3$ (b) $2/3$
(c) $13/15$ (d) $3/15$
39. To test the quality of electric bulbs produced in a factory, two bulbs are randomly selected from a large sample without replacement. If either bulb is defective, the entire lot is rejected. Suppose a sample of 200 bulbs contains 5 defective bulbs. Find the probability that the sample will be rejected.
- (a) $197/3980$ (b) $125/3980$
(c) $189/3980$ (d) None of These
40. Tom speaks truth in 30 percent cases and Harry speaks truth in 25 percent cases. What is the probability that they would contradict each other?
- (a) 0.325 (b) 0.400
(c) 0.925 (d) 0.075
41. There are three persons aged 60, 65 and 70 years old. The survival probabilities for these three persons for another 5 years are 0.7, 0.4 and 0.2 respectively. What is the probability that at least two of them would survive another five years?
- (a) 0.425 (b) 0.456
(c) 0.392 (d) 0.388



Conditional Probability

42. Given that for two events A and B, $P(A) = 3/5$, $P(B) = 2/3$ and $P(A \cup B) = 3/4$, what is $P(A/B)$?
- (a) 0.655 (b) 13/60
(c) 31/60 (d) 0.775
43. Given that $P(a) = 1/2$, $P(B) = 1/3$, $P(A \cap B) = 1/4$, what is $P(A/B)$?
- (a) 1/2 (b) 7/8
(c) 5/8 (d) 2/3
44. If $P(a) = p$ and $P(B) = q$, then
- (a) $P(A/B) \leq p/q$ (b) $P(A/B) \leq p/q$
(c) $P(A/B) \leq q/p$ (d) None of these
45. If $P(A) = 2/3$, $P(B) = 3/4$, $P(A/B) = 2/3$, then what is $P(B/A)$?
- (a) 1/3 (b) 2/3
(c) 3/4 (d) 1/2
46. For a group of students, 30 %, 40% and 50% failed in Physics, Chemistry and at least one of the two subjects respectively. If an examinee is selected at random, what is the probability that he passed in Physics if it is known that he failed in Chemistry?
- (a) 1/2 (b) 1/3
(c) 1/4 (d) 1/6
47. In a school, there are 1000 students, out of which 430 are girls. It is known that out of 430, 10% of the girl's study in class XII. What is the probability that a student chosen randomly studies in class XII given that the chosen student is a girl?
- (a) 1/10 (b) 1/13
(c) 1/5 (d) 1/6
48. Ten cards numbered 1 through 10 are placed in a box, mixed up thoroughly and then one card is drawn randomly. If it is known that the number on the drawn card is more than 3, what is the probability that it is an even number?
- (a) 3/10 (b) 6/13
(c) 4/7 (d) 1/6
49. Assume that each child born is equally likely to be a boy or a girl. If a family has two children, what is the conditional probability that both are girls given that (i) the youngest is a girl, (ii) at least one is a girl?
- (a) 1/2 and 1/3 (b) 2/5 and 1/3
(c) 1/2 and 2/3 (d) None of These
50. In a class 40 % students read Mathematics, 25 % Biology and 15 % both Mathematics and Biology. One student is select at random. The probability that he reads Mathematics if it is known that he reads Biology is
- (a) 2/5 (b) 3/5 (c) 4/5 (d) none
51. In a class 40 % students read Mathematics, 25 % Biology and 15 % both Mathematics and Biology. One student is select at random. The probability that he reads Biology if he reads Mathematics
- (a) 7/8 (b) 1/8 (c) 3/8 (d) none
52. Two coins are tossed simultaneously. What is the probability that the second coin would show a tail given that the first coin has shown a head?
- (a) 0.50 (b) 0.25 (c) 0.75 (d) 0.125



Expected Value

53. If a random variable x assumes the values 0, 1 and 2 with probabilities 0.30, 0.50 and 0.20, then its expected value is
 (a) 1.50 (b) 3
 (c) 0.90 (d) 1
54. A packet of 10 electronic components is known to include 3 defectives. If 4 components are selected from the packet at random, what is the expected value of the number of defective?
 (a) 1.20 (b) 1.21
 (c) 1.69 (d) 1.72
55. The probability that there is at least one error in an account statement prepared by 3 persons A, B and C are 0.2, 0.3 and 0.1 respectively. If A, B and C prepare 60, 70 and 90 such statements, then the expected number of correct statements
 (a) 170 (b) 176
 (c) 178 (d) 180
56. A bag contains 6 white and 4 red balls. If a person draws 2 balls and receives Rs. 10 and Rs. 20 for a white and red balls respectively, then his expected amount is
 (a) Rs. 25 (b) Rs. 26
 (c) Rs. 29 (d) Rs. 28
57. The probability of winning of a person is $\frac{6}{11}$ and at a result he gets Rs. 77/-. The expectation of this person is
 (a) Rs. 35/- (b) ' 42/-
 (c) ' 58/- (d) none
58. If two random variables x and y are related as $y = -3x + 4$ and standard deviation of x is 2, then the standard deviation of y is
 (a) - 6 (b) 6
 (c) 18 (d) 3.50
59. If $2x + 3y + 4 = 0$ and $v(x) = 6$ then $v(y)$ is
 (a) $\frac{8}{3}$ (b) 9
 (c) - 9 (d) 6
60. The probability distribution of a random variable x is given below:

X:	1	2	4	5	6
P:	0.15	0.25	0.20	0.30	0.10

What is the standard deviation of x ?

- (a) 1.49 (b) 1.56
 (c) 1.69 (d) 1.72
61. The probability distribution of a random variable is as follows:

X:	1	2	4	6	8
P:	k	$2k$	$3k$	$3k$	k

The variance of x is

- (a) 2.1 (b) 4.41
 (c) 2.32 (d) 2.47



Odds In Favor /Against

62. The odds in favor of one student passing a test are 3:7. The odds against another student passing at are 3:5. The probability that both pass is
- (a) $\frac{7}{16}$ (b) $\frac{21}{80}$
(c) $\frac{9}{80}$ (d) $\frac{3}{16}$
63. The odds in favor of one student passing a test are 3:7. The odds against another student passing at are 3:5. The probability that both fail is
- (a) $\frac{7}{16}$ (b) $\frac{21}{80}$
(c) $\frac{9}{80}$ (d) $\frac{3}{16}$



Theory Based Questions

- Initially, probability was a branch of
 - Physics
 - Mathematics
 - Statistics
 - Economics.
- Two broad divisions of probability are
 - Subjective probability and objective probability
 - Deductive probability and non-deductive probability
 - Statistical probability and Mathematical probability
 - None of these.
- Subjective probability may be used in
 - Mathematics
 - Management
 - Statistics
 - Accountancy.
- An experiment is known to be random if the results of the experiment
 - Can not be predicted
 - Can be predicted
 - Can be split into further experiments
 - Can be selected at random.
- An event that can be split into further events is known as
 - Complex event
 - Simple event
 - Mixed event
 - Composite event.
- Which of the following pairs of events are mutually exclusive?
 - A : The student reads in a school. B : He studies Philosophy.
 - A : Raju was born in India. B : He is a fine Engineer.
 - A : Ruma is 16 years old. B : She is a good singer.
 - A : Peter is under 15 years of age. B : Peter is a voter of Kolkata.
- If $P(A) = P(B)$, then
 - A and B are the same events
 - A and B may be different events
 - A and B must be same events
 - A and B are mutually exclusive events.
- If $P(A \cap B) = 0$, then the two events A and B are
 - Mutually exclusive
 - Equally likely
 - Exhaustive
 - Independent.
- If for two events A and B, $P(A \cup B) = 1$, then A and B are
 - Mutually exclusive events
 - Exhaustive events
 - Equally likely events
 - Dependent events.
- If an unbiased coin is tossed once, then the two events Head and Tail are
 - Mutually exclusive
 - Equally likely
 - Exhaustive
 - All these (a), (b) and (c).
- If $P(A) = P(B)$, then the two events A and B are
 - Independent
 - Equally likely
 - Dependent
 - Both (a) and (c).
- If for two events A and B, $P(A \cap B) \neq P(A) \times P(B)$, then the two events A and B are
 - Independent
 - Not equally likely
 - Dependent
 - Not exhaustive.



13. If $P(A/B) = P(A)$, then
 (a) A is independent of B
 (b) B is independent of A
 (c) B is dependent of A
 (d) Both (a) and (b).
14. If two events A and B are independent, then
 (a) A and the complement of B are independent
 (b) B and the complement of A are independent
 (c) Complements of A and B are independent
 (d) All of these (a), (b) and (c).
15. If two events A and B are independent, then
 (a) They can be mutually exclusive
 (b) They cannot be mutually exclusive
 (c) They cannot be exhaustive
 (d) Both (b) and (c).
16. If two events A and B are mutually exclusive, then
 (a) They are always independent
 (b) They may be independent
 (c) They can not be independent
 (d) They can not be equally likely.
17. If a coin is tossed twice, then the events 'occurrence of one head', 'occurrence of 2 heads' and 'occurrence of no head' are
 (a) Independent
 (b) Equally likely
 (c) Not equally likely
 (d) Both (a) and (b).
18. Probability mass function is always
 (a) 0
 (b) greater than 0
 (c) greater than equal to 0
 (d) less than 0
19. The sum of probability mass function is equal to
 (a) -1
 (b) 0
 (c) 1
 (d) none
20. When X is a continues function $f(x)$ is called
 (a) probability mass function
 (b) probability density function
 (c) both
 (d) none
21. Which of the following set of function define a probability space on $S = \{a_1, a_2, a_3\}$
 (a) $P(a_1) = \frac{1}{3}, P(a_2) = \frac{1}{2}, P(a_3) = \frac{1}{4}$
 (b) $P(a_1) = \frac{1}{3}, P(a_2) = \frac{1}{6}, P(a_3) = \frac{1}{2}$
 (c) $P(a_1) = P(a_2) = \frac{2}{3}, P(a_3) = \frac{1}{4}$
 (d) None
22. If $p(a_1) = 0, P(a_2) = \frac{1}{3}, P(a_3) = \frac{2}{3}$ then $S = \{a_1, a_2, a_3\}$ is a probability space,
 (a) true
 (b) false
 (c) both
 (d) none
23. If two events are independent then
 (a) $P(B/A) = P(AB) P(A)$
 (b) $P(B/A) = P(AB) P(B)$
 (c) $P(B/A) = P(B)$
 (d) $P(B/A) P(A)$
24. In formula $P(B/A)$, P (a) is
 (a) greater than zero
 (b) less than zero
 (c) equal to zero
 (d) greater than equal to zero



25. Two events A and B are mutually exclusive means they are
(a) not disjoint (b) disjoint
(c) equally likely (d) none
26. For a event A which is certain, P (a) is equal to
(a) 1 (b) 0
(c) -1 (d) none
27. When none of the outcomes is favorable to the event then the event is said to be
(a) certain (b) sample
(c) impossible (d) none
28. All possible outcomes of a random experiment forms the
(a) events (b) sample space
(c) both (d) none
29. If one of outcomes cannot be expected to occur in preference to the other in an experiment the events are
(a) simple events (b) compound events
(c) favorable events (d) equally likely events
30. If two events cannot occur simultaneously in the same trial then they are
(a) mutually exclusive events (b) simple events
(c) favorable events (d) none
31. When the number of cases favorable to the event A is none then P(A) is equal to
(a) 1 (b) 0
(c) $\frac{1}{2}$ (d) none
32. If events A and B are independent then
(a) A^c and B^c are dependent (b) A^c and B are dependent
(c) A and B^c are dependent (d) A^c and B^c are also independent

Answer SheetExercise

1	A	2	B	3	D	4	D	5	B	6	C	7	C	8	D	9	D	10	D
11	C	12	C	13	B	14	A	15	A	16	B	17	B	18	B	19	B	20	A
21	A	22	B	23	D	24	B	25	A	26	A	27	B	28	C	29	A	30	B
31	C	32	D	33	C	34	D	35	B	36	A	37	C	38	C	39	A	40	B
41	D	42	D	43	C	44	A	45	C	46	A	47	A	48	C	49	A	50	B
51	C	52	A	53	C	54	A	55	C	56	D	57	B	58	B	59	A	60	C
61	B	62	D	63	B	64	C	65	A	66	C	67	D	68	D	69	D	70	C
71	A	72	C	73	D	74	C	75	B	76	D	77	D	78	B	79	C	80	C
81	C	82	C	83	B	84	B	85	A	86	C	87	A	88	B	89	A	90	C
91	B	92	D	93	A	94	B	95	D										

Theory Based Questions

1	C	2	A	3	C	4	D	5	D	6	D	7	C	8	A	9	C	10	D
11	C	12	B	13	D	14	D	15	B	16	C	17	C	18	C	19	C	20	B
21	B	22	A	23	C	24	A	25	B	26	A	27	C	28	B	29	D	30	A
31	B	32	D																



13

Theoretical Distribution

Statistics

Exercise

BINOMIAL DISTRIBUTION

- If x is binomial variate with parameter 15 and $1/3$, what is the value of mode of the distribution?

(a) 5 and 6	(c) 5.50
(b) 5	(d) 6
- What is the standard deviation of the number of recoveries among 48 patients when the probability of recovering is 0.75?

(a) 36	(c) 9
(b) 81	(d) 3
- What is the number of trials of a binomial distribution having mean and SD as 3 and 1.5 respectively?

(a) 2	(c) 8
(b) 4	(d) 12
- What is the probability of getting 3 heads if 6 unbiased coins are tossed simultaneously?

(a) 0.50	(c) 0.3125
(b) 0.25	(d) 0.6875
- What is the probability of making 3 correct guesses in 5 True- False answer type questions?

(a) 0.3125	(c) 0.6875
(b) 0.5676	(d) 0.4325
- X is binomial variable with $n = 20$. What is the mean of X if it is known that x is symmetric?

(a) 5	(c) 2
(b) 10	(d) 8
- If $X \sim B(n - p)$, what would be greatest value of the variance of x when $n = 16$?

(a) 2	(c) 8
(b) 4	(d) $\sqrt{5}$
- If the overall percentage of success in an exam is 60, what is the probability that out of a group of 4 students, at least one has passed?

(a) 0.6525	(c) 0.8704
(b) 0.9744	(d) 0.0256
- If a random variable X follows binomial with mean as 5 and satisfying the condition $10P(X=0) = P(X=1)$, what is the value of $P(x \geq 1/x > 0)$?

(a) 0.67	(c) 0.99
(b) 0.56	(d) 0.82
- X is a binomial variable such that $2P(X=2) = P(X=3)$ and mean of X is known to be $10/3$. What would be the probability that X assumes at most the value 2?

(a) $16/81$	(c) $47/243$
(b) $17/81$	(d) $46/243$



POISSON DISTRIBUTION

11. If a mean of a Poisson variable X is 1, what is $P(X = \text{takes the value at least } 1)$?
 (a) 0.456 (c) 0.632
 (b) 0.821 (d) 0.254
12. If 1 percent of an airline's flight suffer a minor equipment failure in an aircraft, what is the probability that there will be exactly two such failures in the next 100 such flights?
 (a) 0.50 (c) 0.265
 (b) 0.184 (d) 0.256
13. If for a Poisson variable X , $f(2) = 3 f(4)$, what is the variance of X ?
 (a) 2 (c) $\sqrt{2}$
 (b) 4 (d) 3
14. If the standard deviation of a Poisson variate X is 2, what is $P(1.5 < X < 2.9)$?
 (a) 0.231 (c) 0.15
 (b) 0.158 (d) 0.144
15. X is a Poisson variate satisfying the following condition $9 P(X = 4) + 90 P(X = 6) = P(X = 2)$. What is the value of $P(X \leq 1)$?
 (a) 0.5655 (c) 0.7358
 (b) 0.6559 (d) 0.8201
16. A random variable x follows Poisson distribution and its coefficient of variation is 50. What is the value of $P(x > 1/x > 0)$?
 (a) 0.1876 (c) 0.9254
 (b) 0.2341 (d) 0.8756
17. If $X \sim P(m)$ and its coefficient of variation is 50, what is the probability that X would assume only non-zero values?
 (a) 0.018 (c) 0.989
 (b) 0.982 (d) 0.976
18. If 1.5 per cent of items produced by a manufacturing unit are known to be defective, what is the probability that a sample of 200 items would contain no defective item?
 (a) 0.05 (c) 0.20
 (b) 0.15 (d) 0.22
19. For a Poisson variate X , $P(X = 1) = P(X = 2)$. What is the mean of X ?
 (a) 1.00 (c) 2.00
 (b) 1.50 (d) 2.50
20. If it is known that the probability of a missile hitting a target is $1/8$, what is the probability that out missiles fired, at least 2 will hit the target?
 (a) 0.4258 (c) 0.5238
 (b) 0.3968 (d) 0.3611

Normal Distribution

21. What is the coefficient of variation of x , characterized by the following probability density function
 $f(x) = \frac{1}{4\sqrt{2\pi}} e^{-(x-10)^2/32}$ for $-\infty < x < \infty$
 (a) 50 (c) 40
 (b) 60 (d) 30
22. What is the quartile of X having the following probability density function? $f(x) = \frac{1}{\sqrt{72\pi}} e^{-(x-10)^2/72}$ for $-\infty < x < \infty$
 (a) 4 (c) 5.95
 (b) 5 (d) 6.75



23. If the two quartiles of $N(\mu, \sigma^2)$ are 14.6 and 25.4 respectively, what is the standard deviation of the distribution?
(a) 9 (c) 10
(b) 6 (d) 8
24. If the mean deviation of a normal variable is 16, what is its quartile deviation?
(a) 10.00 (c) 15.00
(b) 13.50 (d) 12.05
25. If the points of inflexion of a normal curve are 40 and 60 respectively, then its mean deviation is
(a) 40 (c) 50
(b) 45 (d) 60
26. If the quartile deviation of a normal curve is 4.05, then its mean deviation is
(a) 5.26 (c) 4.24
(b) 6.24 (d) 4.80
27. If the 1st quartile and mean deviation about median of a normal distribution are 13.25 and 8 respectively, then the mode of the distribution is
(a) 20 (c) 15
(b) 10 (d) 12
28. If the area of standard normal curve between $z = 0$ to $z = 1$ is 0.3413, then the value of $\phi(1)$ is
(a) 0.5000 (c) -0.5000
(b) 0.8413 (d) 1
29. If X and Y are 2 independent normal variables with mean as 10 and 12 and SD as 3 and 4, then $(X+Y)$ is normally distributed with
(a) Mean = 22 and SD = 7 (c) Mean = 22 and SD = 5
(b) Mean = 22 and SD = 25 (d) Mean = 22 and SD = 49



Theory Based Questions

- A theoretical probability distribution
 - Does not exist
 - Exists only in theory
 - Exists in real life
 - Both (b) and (c)
- Probability distribution may be
 - Discrete
 - Continuous
 - Infinite
 - (a) or (b)
- An important discrete probability distribution is
 - Poisson distribution
 - Normal distribution
 - Cauchy distribution
 - log normal distribution
- An important continuous probability distribution
 - Binomial distribution
 - Poisson distribution
 - Geometric distribution
 - Normal distribution
- Parameter is a characteristic of
 - Population
 - Sample
 - Probability distribution
 - Both (a) and (b)
- An example of a parameter is
 - Sample mean
 - Population mean
 - Binomial distribution
 - Sample size
- A trial is an attempt to
 - Make something possible
 - Make something impossible
 - Prosecute an offender in a court of law
 - Produce an outcome which is neither certain nor impossible
- The important characteristic(s) of Bernoulli trials
 - Each trial is associated with just two possible outcomes
 - Trials are independent
 - Trials are infinite
 - Both (a) and (b)
- The probability mass function of binomial distribution is given by
 - $f(x) = p^x q^{n-x}$
 - $f(x) = {}^n C_x p^x q^{n-x}$
 - $f(x) = {}^n C_x q^x p^{n-x}$
 - $f(x) = {}^n C_x p^{n-x} q^x$
- If x is a binomial variable with parameters n and p , then x can assume
 - Any value between 0 and n
 - Any value between 0 and n , both inclusive
 - Any whole number between 0 and n , both inclusive
 - Any number between 0 and infinity
- A binomial distribution is
 - Never symmetrical
 - Never positively skewed
 - never negatively skewed
 - Symmetrical when $p = 0.5$
- The mean of a binomial distribution with parameter n and p is
 - $n(1 - p)$
 - $np(1 - p)$
 - np
 - $\sqrt{np(1 - p)}$
- The variance of a binomial distribution with parameters n and p is
 - $np^2(1 - p)$
 - $\sqrt{np(1 - p)}$
 - $nq(1 - q)$
 - $n^2 p^2(1 - p)^2$



14. An example of a bi-parametric discrete probability distribution is
(a) Binomial distribution (b) Poisson distribution
(c) Normal distribution (d) Both (a) and (b)
15. For a binomial distribution, mean and mode
(a) Are never equal (b) Are always equal
(c) Are equal when $q = 0.50$ (d) Do not always exist
16. The mean of binomial distribution is
(a) Always more than its variance
(b) Always equal to its variance
(c) Always less than its variance
(d) Always equal to its standard deviation
17. For a binomial distribution, there may be
(a) One mode (b) Two modes
(c) (a) (d) (a) or (b)
18. The maximum value of the variance of a binomial distribution with parameters n and p is
(a) $n/2$ (b) $n/4$
(c) $np(1 - p)$ (d) $2n$
19. The method usually applied for fitting a binomial distribution is known as
(a) Method of least square
(b) Method of moments
(c) Method of probability distribution
(d) Method of deviation
20. Which one is uniparametric distribution?
(a) Binomial (b) Poisson
(c) Normal (d) Hyper geometric
21. For a Poisson distribution
(a) Mean and standard deviation are equal
(b) Mean and variance are equal
(c) Standard deviation and variance are equal
(d) Both (a) and (b)
22. Poisson distribution may be
(a) Unimodal (b) Bimodal
(c) Multi-modal (d) (a) or (b)
23. Poisson distribution is
(a) Always symmetric (b) Always positively skewed
(c) Always negatively skewed (d) symmetric only when $m = 2$
24. A binomial distribution with parameters n and p can be approximated by a Poisson distribution with parameter $m = np$ is
(a) $n \rightarrow \infty$ (b) $p \rightarrow \infty$
(c) $n \rightarrow \infty$ and $p \rightarrow 0$ (d) $n \rightarrow \infty$ and $p \rightarrow 0$ so that np remains finite
25. For Poisson fitting to an observed frequency distribution
(a) We equate the Poisson parameter to the mean of the frequency distribution
(b) We equate the Poisson parameter to the median of the frequency distribution
(c) We equate the Poisson parameter to the mode of the frequency distribution
(d) None of these
26. The most important continuous probability distribution is known as
(a) Binomial distribution (b) Normal distribution
(c) Chi-square distribution (d) Sampling distribution



27. The probability density function of a normal variable x is given by
- (a) $f(x) = \frac{1}{\sigma\sqrt{2\pi}} e^{-\frac{1}{2}\left(\frac{x-\mu}{\sigma}\right)^2}$ for $-\infty < x < \infty$
- (b) $f(x) = f(x) = \frac{1}{\sigma\sqrt{2\pi}} e^{-\frac{(x-\mu)^2}{2\sigma}}$ for $0 < x < \infty$
- (c) $f(x) = \frac{1}{\sigma\sqrt{2\pi}} e^{-\frac{(x-\mu)^2}{2\sigma^2}}$ for $-\infty < x < \infty$
- (d) None of these
28. The total area of the normal curve is
- (a) One (b) 50 per cent
(c) 0.50 (d) Any value between 0 and 1
29. The normal curve is
- (a) Bell-shaped (b) U-shaped
(c) J-shaped (d) Inverted J-shaped
30. The normal curve is
- (a) Positively skewed (b) negatively skewed
(c) Symmetrical (d) All these
31. Area of the normal curve
- (a) Between $-\infty$ to μ is 0.50 (b) Between μ to ∞ is 0.50
(c) Between $-\infty$ to ∞ is 0.50 (d) Both (a) and (b)
32. The cumulative distribution function of a random variable X is given by
- (a) $F(x) = P(X \leq x)$ (b) $F(X) = P(X \leq x)$
(c) $F(x) = P(X \geq x)$ (d) $F(x) = P(X = x)$
33. The mean and mode of a normal distribution
- (a) May be equal (b) May be different
(c) Are always equal (d) (a) or (b)
34. The mean deviation about median of a standard normal variate is
- (a) 0.675σ (b) 0.675
(c) 0.80σ (d) 0.80
35. The quartile deviation of a normal distribution with mean 10 and SD 4 is
- (a) 0.675 (b) 67.50
(c) 2.70 (d) 3.20
36. For a standard normal distribution, the points of inflexion are given by
- (a) $\mu - \sigma$ and $\mu + \sigma$ (b) $-\sigma$ and σ
(c) -1 and 1 (d) 0 and 1
37. The symbol ϕ (a) indicates the area of the standard normal curve between
- (a) 0 to a (b) a to ∞
(c) $-\infty$ to a (d) $-\infty$ to ∞
38. The interval $(\mu - 3\sigma, \mu + 3\sigma)$ covers
- (a) 95% area of a normal distribution
(b) 96% area of a normal distribution
(c) 99% area of a normal distribution
(d) All but 0.27% area of a normal distribution
39. Number of misprints per page of a hick book follows
- (a) Normal distribution (b) Poisson distribution
(c) Binomial distribution (d) Standard normal distribution



40. The results of ODI matches between India and Pakistan follows
 (a) Binomial distribution (b) Poisson distribution
 (c) Normal distribution (d) (b) or (c)
41. The wages of workers of a factory follow
 (a) Binomial distribution (b) Poisson distribution
 (c) Normal distribution (d) (Chi-square distribution)
42. If X and Y are two independent normal random variables, then the distribution of $(X + Y)$ is
 (a) Normal (b) Standard normal
 (c) T (d) Chi-square

Answer Sheet

Exercise

1.	b	2.	d	3.	d	4.	c	5.	a	6.	b	7.	b	8.	a	9.	c	10.	b
11.	c	12.	b	13.	a	14.	d	15.	c	16.	c	17.	b	18.	a	19.	c	20.	d
21.	c	22.	c	23.	d	24.	b	25.	a	26.	d	27.	a	28.	b	29.	c		

Theory Based Questions

1.	d	2.	d	3.	a	4.	d	5.	a	6.	b	7.	d	8.	d	9.	b	10.	c
11.	d	12.	c	13.	c	14.	a	15.	c	16.	a	17.	c	18.	b	19.	b	20.	b
21.	b	22.	d	23.	b	24.	d	25.	a	26.	b	27.	a	28.	a	29.	a	30.	c
31.	d	32.	a	33.	c	34.	d	35.	c	36.	c	37.	c	38.	d	39.	b	40.	a
41.	c	42.	a																



Summary Notes



14 Index Number

Statistics

Exercise

Basic Questions & Unweighted Index Number

- The index number in whole sale prices is 152 for August 1999 compared to August 1998. During the year there is net increase in prices of whole sale commodities to the extent of
 - 45%
 - 35%
 - 52%
 - 48%
- The price level of a country in a certain year has increased 25% over the base period. The index number is
 - 25
 - 125
 - 225
 - 2500
- If the price of all commodities in a place have increased 1.25 times in comparison to the base period prices, then the index number of prices for the place is now
 - 100
 - 125
 - 225
 - None of the above
- The wholesale price index number or agricultural commodities in a given region at a given date is 280. The percentage increase in prices of agricultural commodities over the base year is:
 - 380
 - 280
 - 180
 - 80
- If now the prices of all the commodities in a place have been decreased by 35% over the base period prices, then the index number of prices for the place is now (index number of prices of base period = 100)
 - 100
 - 135
 - 65
 - None of these
- If the index number of prices at a place in 1994 is 250 with 1984 as base year, then the prices have increased on average by
 - 250%
 - 150%
 - 350%
 - None of these.

7. From the following data

Commodity	Base Price	Current Price
Rice	35	42
Wheat	30	35
Pulse	40	38
Fish	107	120

The simple Aggregative Index is

- 115.8
 - 110.8
 - 112.5
 - 113.4
8. From the following data

Commodities	Base Year 1922 Price	Current Year 1934 Price
A	6	10
B	2	2
C	4	6
D	11	12
E	8	12

The price index number for the year 1934 is:

- 140
- 145
- 147
- None of these



9. From the following data

Commodities	Base Price 1964	Current Price 1968
Rice	36	54
Pulse	30	50
Fish	130	155
Potato	40	35
Oil	110	110

The index number by unweighted methods:

- (a) 116.8 (b) 117.25
(c) 115.35 (d) 119.37
10. The price of a number of commodities are given below in the current year 1975 and base year 1970.

Commodities	A	B	C	D	E	F
Base Price	45	60	20	50	85	120
Current Price	55	70	30	75	90	130

For 1975 with base 1970 by the Method of price relatives using Geometrical mean, the price index is:

- (a) 125.3 (b) 124.3
(c) 128.8 (d) None of these
11. The price of a commodity increases from Rs. 5 per unit in 1990 to Rs. 7.50 per unit in 1995 and the quantity consumed decreases from 120 units in 1990 to 90 units in 1995. The price and quantity in 1995 are 150% and 75% respectively of the corresponding price and quantity in 1990. Therefore, the product of the price ratio and quantity ratio is:
- (a) 1.8 (b) 1.125
(c) 1.75 (d) None of these.
12. The average price of certain commodities in 1980 was Rs.60 and the average price of the same commodities in 1982 was Rs. 120. Therefore, the increase in 1982 on the basis of 1980 was 100%. 80. The decrease in 1980 with 1982 as base is: using 1982, comment on the above statement is:
- (a) The price in 1980 decreases by 60% using 1982 as base
(b) The price in 1980 decreases by 50% using 1982 as base
(c) The price in 1980 decreases by 90% using 1982 as base
(d) None of these

13. From the following data

Commodities	Base year	Current year
A	25	55
B	30	45

Then index numbers from G. M. Method is:

- (a) 181.66 (b) 185.25
(c) 181.75 (d) None of these
- Weighted Index Number**
14. If $\sum P_n q_n = 249$, $\sum P_0 q_0 = 150$, Paasche's Index Number = 150 and Drobiseh and Bowley's Index number = 145, then the Fisher's Ideal Index Number is
- (a) 75 (b) 60
(c) 145.97 (d) None of these
15. Bowley's index number is 150. Fisher's index number is 149.95. Paasche's index number is
- (a) 158 (b) 154
(c) 148 (d) 156



16. From the following data base year: -

Commodity	Base Year		Current Year	
	Price	Quantity	Price	Quantity
A	4	3	6	2
B	5	4	6	4
C	7	2	9	2
D	2	3	1	5

Fisher's Ideal Index is

- (a) 117.3 (b) 115.43
(c) 118.35 (d) 116.48

17. From the following data

Commodity	Base Year		Current Year	
	Price	Quantity	Price	Quantity
A	7	17	13	25
B	6	23	7	25
C	11	14	13	15
D	4	10	8	8

The Marshall Edge Worth Index number is:

- (a) 148.25 (b) 144.19
(c) 147.25 (d) None of these

18. If $\sum P_0Q_0 = 1360$, $\sum P_nQ_0 = 1900$, $\sum P_0Q_n = 1344$, $\sum P_nQ_n = 1880$ then the Laspeyre's Index number is

- (a) 0.71 (b) 1.39
(c) 1.75 (d) None of these

19. From the following data

Commodities	Q_0	P_0	Q_1	P_1
A	2	2	6	18
B	5	5	2	2
C	7	7	4	24

Then the fisher's quantity index number is

- (a) 87.34 (b) 85.24
(c) 87.25 (d) None of these

20. Using the following data

Commodity	Base Year		Current Year	
	Price	Quantity	Price	Quantity
X	4	10	6	15
Y	6	15	4	20
Z	8	5	10	4

The Paasche's formula for index is:

- (a) 125.38 (b) 147.25
(c) 129.8 (d) None of these

21. If the ratio between Laspeyre's index number and Paasche's Index number is 28: 27. Then the missing figure in the following table p is:

Commodity	Base Year		Current Year	
	Price	Quantity	Price	Quantity
X	L	10	2	5
Y	L	5	P	2

- (a) 7 (b) 4
(c) 3 (d) 9



Chain Based & Link Relative

22. The prices of a commodity in the year 1975 and 1980 were 25 and 30 respectively taking 1980 as base year the price relative is:
 (a) 109.78 (b) 110.25
 (c) 113.25 (d) None of these
23. In 1976 the average price of a commodity was 20% more than that in 1975 but 20% less than that in 1974 and more over it was 50% more than that in 1977. The price relatives using 1975 as base year (1975 price relative = 100) then the reduce date is:
 (a) 8.75 (b) 150,100,120,80
 (c) 75.125 (d) None of these

24. From the following data

Year	1992	1993	1995	1996	1997
Link Index	100	103	105	112	108

(Base 1992 = 100) for the years 1993-97. The construction of chain index is:

- (a) 103, 100.94, 107, 118.72 (b) 103, 108.15, 121.3, 130.82
 (c) 107, 100.25, 104, 118.72 (d) None of these

Splicing

25. If the 1970 index with base 1965 is 200 and 1965 index with base 1960 is 150, the index 1970 on base 1960 will be:
 (a) 700 (b) 300
 (c) 500 (d) 600

Value Index Number

26. From the following data

Commodity	Base Year		Current Year	
	Price	Quantity	Price	Quantity
A	4	3	6	2
B	5	4	6	4
C	7	2	9	2
D	2	3	1	5

Then the value ratio is:

- (a) $\frac{59}{52}$ (b) $\frac{49}{47}$
 (c) $\frac{41}{53}$ (d) $\frac{47}{53}$

27. The total value of retained imports into India in 1960 was Rs.71.5 million per month. The corresponding total for 1967 was Rs.87.6 million per month. The index of volume of retained imports in 1967 composed with 1960 (= 100) was 62.0. The price index for retained inputs for 1967 our 1960 as base is
 (a) 198.61 (b) 197.61
 (c) 198.25 (d) None of these.

28. From the following data with 1966 as base year

Commodity	Quantity Units	Values (Rs)
A	100	500
B	80	320
C	60	150
D	30	360

The price per unit of commodity A in 1966 is

- (a) Rs.5 (b) Rs.6
 (c) Rs.4 (d) Rs.12



Consumer Price Index & Real Terms

29. Consumer Price index number for the year 1957 was 313 with 1940 as the base year 96 the Average Monthly wages in 1957 of the workers into factory be Rs. 160/- their real wages is
(a) Rs. 48.40 (b) Rs.51.12
(c) Rs. 40.30 (d) None of these
30. With the base year 1960 the C. L. I. in 1972 stood at 250. x was getting a monthly Salary of Rs.500 in 1960 and Rs. 750 in 1972. In 1972 to maintain his standard of living in 1960 he has to receive as extra allowances of
(a) Rs. 600/- (b) Rs. 500/-
(c) Rs. 300/- (d) None of these
31. Consumer price index number goes up from 110 to 200 and the Salary of a worker is also raised from Rs. 325 to Rs.500. Therefore, in real terms, to maintain his previous standard of living he should get an additional amount of:
(a) Rs.85 (b) Rs.90.91
(c) Rs.98.25 (d) None of these
32. During a certain period, the cost-of-living index number goes up from 110 to 200 and the salary of a worker is also raised from Rs. 325 to Rs. 500. The worker does not get really gain. Then the real wages decreased by:
(a) Rs. 45.45 (b) Rs. 43.25
(c) Rs.100 (d) None of these
33. Net monthly salary of an employee was Rs.3000 in 1980. The consumer price index number in 1985 is 250 with 1980 as base year. If he has to be rightly compensated then, 7th dearness allowances to be paid to the employee is:
(a) Rs.4,800.00 (b) Rs.4,700.00
(c) Rs. 4,500.00 (d) None of these
34. Net Monthly income of an employee was Rs. 800 in 1980. The consumer price Index number was 160 in 1980. It is rises to 200 in 1984. If he has to be rightly compensated. The additional dearness allowance to be paid to the employee is:
(a) 175 (b) 185
(c) 200 (d) 125
35. When the cost of Tobacco was increased by 50%, a certain hardened smoker, who maintained his formal scale of consumption, said that the rise had increased his cost of living by 5%. Before the change in price, the percentage of his cost of living was due to buying Tobacco is
(a) 15% (b) 8%
(c) 10% (d)None of these
36. The consumer price Index for April 1985 was 125. The food price index was 120 and other items index was 135. The percentage of food weight in the total weight of the index is
(a) 66.67 (b) 68.28
(c) 90.25 (d) None of these
37. During the certain period the C.L.I. goes up from 110 to 200 and the Salary of a worker is also raised from 330 to 500, then the real terms is
(a) Loss by Rs.50 (b) Loss by Rs.75
(c) Loss by Rs.90 (d) None of these



C.P.I By Family Budget Method

38. From the following data

Group	Weight	Index Number Base: 1952–53 = 100
Food	50	241
Clothing	2	221
Fuel and Light	3	204
Rent	16	256
Miscellaneous	29	179

The Cost-of-living index numbers is:

- (a) 224.5 (b) 223.91
(c) 225.32 (d) None of these
39. From the following data for the 5 groups combined

Group	Weight	Index Number
Food	35	425
Cloth	15	235
Power & Fuel	20	215
Rent & Rates	8	115
Miscellaneous	22	150

The general Index number is

- (a) 270 (b) 269.2
(c) 268.5 (d) 272.5

40. From the data given below

Commodity	Price Relative	Weight
A	125	5
B	67	2
C	250	3

Then the suitable index number is

- (a) 150.9 (b) 155.8
(c) 145.8 (d) None of these
41. Given below are the data on prices of some consumer goods and the weights attached to the various items
Compute price index number for the year 1985 (Base 1984 = 100)

Items	Unit	1984	1985	Weight
Wheat	Kg.	0.50	0.75	2
Milk	Litre	0.60	0.75	5
Egg	Dozen	2.00	2.40	4
Sugar	Kg.	1.80	2.10	8
Shoes	Pair	8.00	10.00	1

Then weighted average of price Relative Index is:

- (a) 125.43 (b) 123.3
(c) 124.53 (d) 124.52
42. From the following data

Group	A	B	C	D	E	F
Group Index	120	132	98	115	108	95
Weight	6	3	4	2	1	4

The general Index I is given by:

- (a) 111.3 (b) 113.45
(c) 117.25 (d) 114.75

Purchasing Power of Money

43. If the price index for the year, say 1960 be 110.3 and the price index for the year, say 1950 be 98.4, then the purchasing power of money (Rupees) of 1950 will in 1960 is
- (a) 1.12 (b) 1.25
(c) 1.37 (d) None of these
44. Purchasing power of money fall when
- (a) Price level increases (b) Price level decreases
(c) Income level increases (d) Money supply falls



Theory Based Questions

- We use price index numbers
 - To measure and compare prices
 - To measure prices
 - To compare prices
 - None
- The series of numerical figures which shows the relative position is called:
 - Index number
 - absolute number
 - Relative number
 - none of these
- Index number for the base period is always taken as
 - 200
 - 1
 - 50
 - 100
- _____ play a very important part in the construction of index numbers.
 - Weights
 - estimations
 - Classes
 - none of these
- _____ is particularly suitable for the construction of index numbers.
 - H.M.
 - G.M.
 - A.M.
 - none of these
- Index numbers show _____ changes rather than absolute amounts of change.
 - Relative
 - both
 - Percentage
 - none of these
- The _____ makes index numbers time-reversible.
 - A.M.
 - H.M.
 - G.M.
 - none of these
- Price relative is equal to
 - $\frac{\text{price in the given year} \times 100}{\text{price in the base year}}$
 - price in the given year $\times 100$
 - $\frac{\text{price in the year base year} \times 100}{\text{price in the given year}}$
 - price in the base year $\times 100$
- Index number is equal to
 - Sum of price relatives
 - product of price relative
 - Average of the price relatives
 - none of these
- The _____ of group indices given the General Index
 - H.M.
 - A.M.
 - G.M.
 - none of these
- Circular Test is one of the tests of
 - Index numbers
 - both
 - Hypothesis
 - none of these
- _____ is an extension of time reversal test
 - Factor Reversal test
 - both
 - Circular test
 - none of these



13. Weighted G.M. of relative formula satisfy _____ test
 (a) Time Reversal Test (b) factor reversal test
 (c) Circular test (d) none of these
14. Factor reversal test is satisfied by
 (a) Fisher's ideal index (b) Paasches index
 (c) Laspeyres index (d) none of these
15. Laspeyre's formula does not satisfy
 (a) Factor reversal test (b) circular test
 (c) Time reversal test (d) all the above
16. A ratio or an average of ratios expressed as a percentage is called
 (a) A relative number (b) an index number
 (c) An absolute number (d) none of these
17. The value at the base time period serves as the standard point of comparison
 (a) False (b) both
 (c) True (d) none of these
18. An index time series is a list of _____ numbers for two or more periods of times
 (a) Index (b) relative
 (c) Absolute (d) none of these
19. Index numbers are often constructed from the
 (a) Frequency (b) sample
 (c) Class (d) none of these
20. _____ is a point of reference in comparing various data describing individual behavior.
 (a) Sample (b) estimation
 (c) Base period (d) none of these
21. The ratio of price of single commodity in a given period to its price in the preceding year price is called the
 (a) Base period (b) relative price
 (c) Price ratio (d) none of these
22. $\frac{\text{sum of all commodity prices in the current year} \times 100}{\text{sum of all commodity prices in the base year}}$ is
 (a) Relative Price Index
 (b) both
 (c) Simple Aggregative Price Index
 (d) none of these
23. Chain index is equal to
 (a) $\frac{\text{link relative of current year} \times \text{chain index of the current year}}{100}$
 (b) $\frac{\text{link relative of previous year} \times \text{chain index of the current year}}{100}$
 (c) $\frac{\text{link relative of current year} \times \text{chain index of the previous year}}{100}$
 (d) $\frac{\text{link relative of previous year} \times \text{chain index of the previous year}}{100}$



24. P_{01} is the index for time
 (a) 1 on 0 (b) 1 on 1
 (c) 0 on 1 (d) 0 on 0
25. P_{10} is the index for time
 (a) 1 on 0 (b) 1 on 1
 (c) 0 on 1 (d) 0 on 0
26. When the product of price index and the quantity index to the corresponding value index then the test that holds is
 (a) Unit test (b) factor reversal test
 (c) Time reversal test (d) none holds
27. The formula should be independent of the unit in which or for which price and quantities are quoted in
 (a) Unit test (b) factor reversal test
 (c) Time reversal test (d) none
28. Laspeyre's method and Paasche's method do not satisfy
 (a) Unit test (b) factor reversal test
 (c) Time reversal test (d) b & c
29. The purpose determines the type of index number to use
 (a) Yes (b) may be
 (c) No (d) may not be
30. The index number is a special type of average
 (a) False (b) both
 (c) True (d) none
31. The choice of suitable base period is at best temporary solution
 (a) True (b) both
 (c) False (d) none
32. Fisher's Ideal Formula for calculating index numbers satisfies the ___ tests
 (a) Unit test (b) both
 (c) Factor reversal test (d) none
33. Fisher's Ideal Formula does not satisfy _____ test
 (a) Unit test (b) time reversal test
 (c) Circular test (d) none
34. _____ satisfies circular test
 (a) G.M of price relatives or the weighted aggregate with fixed weights
 (b) A.M of price relatives or the weighted aggregate with fixed weights
 (c) G\H.M of price relatives or the weighted aggregate with fixed weights
 (d) None
35. Laspeyre's and Paasche's method _____ time reversal test
 (a) Satisfy (b) are
 (c) Do not satisfy (d) are not



36. There is no such thing as un weighted index numbers
 (a) False (c) both
 (b) True (d) none
37. Theoretically, G.M is the best average in the construction of index numbers but in practice, mostly the A. M is used
 (a) False (b) both
 (c) True (d) none
38. Laspeyre's or Paasche's or the Fisher's ideal index do not satisfy
 (a) Time reversal test (b) circular test
 (c) Unit test (d) none of these
39. _____ is concerned with the measurement of price changes over a period of years, when it is desirable to shift the base
 (a) Unit test (b) time reversal test
 (c) Circular test (d) none of these
40. The test of shifting the base is called
 (a) Unit test (b) circular test
 (c) Time reversal test (d) none of these
41. The formula for conversion to current value
 (a) Deflated value = $\frac{\text{price index of the current year}}{\text{previous value}}$
 (b) Deflated value = $\frac{\text{price index of the current year}}{\text{current value}}$
 (c) Deflated value = $\frac{\text{price index of the previous year}}{\text{previous value}}$
 (d) Deflated value = $\frac{\text{price index of the previous year}}{\text{previous value}}$
42. Shifted price index = $\frac{\text{original price} \times 100}{\text{price Index of the year on which it has to be shifted}}$
 (a) True (b) both
 (c) False (d) none
43. The number of tests of Adequacy is
 (a) 2 (b) 3
 (c) 5 (d) 4
44. We use price index numbers
 (a) To measure and compare prices
 (b) To measure prices
 (c) To compare prices
 (d) None
45. Simple aggregate of quantities is a type of
 (a) Quantity control (b) both
 (c) Quantity indices (d) none



Answer Sheet

Exercise

1.	c	2.	b	3.	c	4.	c	5.	c	6.	b	7.	b	8.	d	9.	a	10.	b
11.	b	12.	b	13.	a	14.	d	15.	b	16.	a	17.	b	18.	b	19.	a	20.	d
21.	b	22.	d	23.	b	24.	b	25.	b	26.	a	27.	b	28.	a	29.	b	30.	b
31.	b	32.	a	33.	c	34.	c	35.	c	36.	a	37.	a	38.	b	39.	b	40.	a
41.	b	42.	a	43.	a	44.	a												

Theory Based Questions

1.	a	2.	a	3.	d	4.	a	5.	b	6.	c	7.	c	8.	a	9.	c	10.	b
11.	a	12.	c	13.	a	14.	d	15.	b	16.	b	17.	c	18.	a	19.	b	20.	c
21.	b	22.	c	23.	c	24.	a	25.	c	26.	b	27.	a	28.	d	29.	a	30.	c
31.	a	32.	b	33.	c	34.	a	35.	c	36.	a	37.	c	38.	b	39.	c	40.	c
41.	b	42.	a	43.	d	44.	a	45.	c										



15A Number Series

Logical Reasoning

Exercise

- 6, 11, 21, 36, 56?
(a) 42 (b) 51 (c) 81 (d) 91
- 10, 100, 200, 310?
(a) 400 (b) 410 (c) 420 (d) 430
- 11, 13, 17, 19, 23, 25, 29, ?
(a) 33 (b) 27 (c) 31 (d) 49
- 6, 12, 21, 33 ?
(a) 33 (b) 38 (c) 40 (d) 48
- 2, 5, 9, 14, ? , 27
(a) 20 (b) 16 (c) 18 (d) 24
- 6, 11, 21, ? , 56, 81
(a) 42 (b) 36 (c) 91 (d) 51
- 10, 18, 28, 40, 54, ? , 88
(a) 70 (b) 86 (c) 87 (d) 98
- 120, 99, ? , 63, 48, 35
(a) 80 (b) 36 (c) 45 (d) 40
- 22, 24, 28, 36, ? , 84
(a) 44 (b) 52 (c) 38 (d) 54
- 4832, 5840, 6848, 7856 ?
(a) 8864 (b) 8815 (c) 8846 (d) 8887
- 10, 100, 200, 310, 430, ?
(a) 560 (b) 540 (c) 550 (d) 590
- 28, 33, 31, 36, 34 ?
(a) 38 (b) 39 (c) 40 (d) 42
- 120, 80, 40, 45, ? , 5
(a) 15 (b) 20 (c) 25 (d) 47
- 2, 15, 41, 80, 132 ?
(a) 184 (b) 144 (c) 186 (d) 196
- 6, 17, 39, ? , 116
(a) 72 (b) 75 (c) 85 (d) 80



16. 1, 4, 10, 22, ?, 94
 (a) 46 (b) 48 (c) 49 (d) 47
17. 4, 9, 25, 48, ?, 169, 289, 361
 (a) 120 (b) 121 (c) 122 (d) 164
18. 4, 12, 36, ?, 324
 (a) 107 (b) 109 (c) 108 (d) 110
19. 1, 1, 4, 8, 9, ?, 16, 64
 (a) 27 (b) 28 (c) 32 (d) 40
20. 5760, 960, 192, ?, 16, 8
 (a) 47 (b) 48 (c) 52 (d) 50
21. 1, 2, 6, 7, 21, 22, 66, ?, 201
 (a) 69 (b) 68 (c) 67 (d) 69
22. 48, 24, 96, ?, 192
 (a) 48 (b) 47 (c) 44 (d) 54
23. 165, 195, 255, 285, ?, 375
 (a) 345 (b) 390 (c) 335 (d) 395
24. 2, 3, 3, 5, 10, 13, 39, ?, 172, 177
 (a) 42 (b) 44 (c) 43 (d) 40
25. 7, 26, 63, 214, 215, ?, 511
 (a) 342 (b) 343 (c) 441 (d) 421
26. 3, 7, 15, 31, ? 127
 (a) 62 (b) 63 (c) 64 (d) 65
27. 8, 28, 116, 584, ?
 (a) 1752 (b) 3502 (c) 3504 (d) 3508
28. 6, 13, 28, 59, ?
 (a) 122 (b) 114 (c) 113 (d) 112
29. 2, 7, 27, 107, 427, ?
 (a) 1707 (b) 4027 (c) 4207 (d) 1207
30. 5, 2, 7, 9, 16, 25, 41, ?
 (a) 65 (b) 66 (c) 67 (d) 68

Answer Sheet

1.	c	2.	d	3.	c	4.	d	5.	a	6.	b	7.	a	8.	a	9.	b	10.	a
11.	c	12.	b	13.	a	14.	d	15.	a	16.	a	17.	b	18.	c	19.	a	20.	b
21.	c	22.	a	23.	a	24.	c	25.	b	26.	b	27.	d	28.	a	29.	a	30.	b



15B Coding Decoding

Logical Reasoning

Exercise

- In a certain language, MADRAS is coded NBESBT, how DELHI is coded in that code?
 (a) EMMJI (b) EFMIJ (c) EMFIJ (d) JIFEM
- If RAMAN is written as 12325 and DINESH as 675489 how HAMAM is written?
 (a) 92323 (b) 92233 (c) 93233 (d) 93292
- If RED is coded as 6720 then GREEN would be coded as
 (a) 9207716 (b) 167129 (c) 1677209 (d) 1672091
- If A = 1, FAT = 27, FAITH = ?
 (a) 44 (b) 45 (c) 46 (d) 36
- If BROTHER is coded 2456784, SISTER coded as 919684, what is coded for BORBERS?
 (a) 2542889 (b) 2542898 (c) 2454889 (d) 2524889
- If DELHI is coded 73541 and CALCUTTA as 82589662, How can CALICUT be coded?
 (a) 5279431 (b) 5978213 (c) 8251896 (d) 8543962
- If CLOCK is coded 34235 and TIME is 8679, what will be code of MOTEL?
 (a) 72894 (b) 77684 (c) 72964 (d) 27894
- If PALE is coded as 2134 and EARTH is coded as 41590, how is PEARL is code?
 (a) 29530 (b) 24153 (c) 25430 (d) 254313
- If LOSE is coded as 1357 and GAIN is coded as 2468, what do figure 82146 stands for?
 (a) NGLAI (b) NGLIA (c) GNLIA (d) GNLIA
- If MEKLF is coded as 91782 and LLLJK as 88867, how can IHJED is coded as?
 (a) 97854 (b) 64512 (c) 54310 (d) 75632
- If in a certain code language NAME is written as 4258 then what is coded as MEAN?
 (a) 2458 (b) 5842 (c) 8524 (d) 5824
- If GOLD is written as IQNF, how WIND can be written as code?
 (a) VHMC (b) VHCM (c) XJOE (d) DNIW
- If ROSE is written as TQUG, how BISCUIT can be written in that code?
 (a) DKUEWKV (b) CJTDVJU (c) DKVEWKV (d) DKUEWKY



(Q. No. 14-16) In each of the following questions find out the correctly coded alternative from amongst the given four alternatives (a), (b), (c), (d).

LETTER:	C	Z	N	V	R	S	W	F	D
CODE DIGIT:	8	6	4	7	2	9	3	5	1

14. ZDRCVF
 (a) 612875 (b) 619875 (c) 612845 (d) 612835
15. WNCSZV
 (a) 348267 (b) 318267 (c) 348957 (d) 348967
16. RDNFVS
 (a) 21679 (b) 216549 (c) 214579 (d) 218579
17. If DELHI is coded as CCIDD, how would you encode BOMBAY?
 (a) AJMTVT (b) AMJXVS (c) MJXVSU (d) WXYZAX
18. In a certain code, RIPPLE is written as 613382 and LIFE is written as 8192. How is PILLER written in that code?
 (a) 318826 (b) 318286 (c) 618826 (d) 338816
19. If PALAM could be given the code number 43, what code number can be given to SANTACRUZ?
 (a) 123 (b) 85 (c) 120 (d) 125

Directions: The number in each question below is to be codified in the following code:

Digit	7	2	1	5	3	9	8	6	4
Letter	W	L	M	S	I	N	D	J	B

20. 184632
 (a) MDJBSI (b) MDJBIL (c) MDJBWL (d) MDBJIL
21. In a certain code '256' means 'you are good', '637' means 'we are bad' and '358' means 'good and bad'. Which of the following represents 'and' in that code?
 (a) 2 (b) 5 (c) 8 (d) 3

Answer Sheet

1.	b	2.	a	3.	c	4.	a	5.	A	6.	c	7.	a	8.	b	9.	a	10.	c
11.	d	12.	a	13.	a	14.	a	15.	d	16.	c	17.	a	18.	a	19.	a	20.	d
21.	c																		



15C Odd Man Out

Logical Reasoning

Exercise

Find the Odd Man in Following

- 3, 5, 7, 15, 17, 19
(a) 15 (b) 17 (c) 19 (d) 7
- 10, 14, 16, 18, 23, 24, 26
(a) 26 (b) 23 (c) 24 (d) 18
- 1, 4, 9, 16, 24, 25, 36
(a) 9 (b) 24 (c) 25 (d) 36
- 41, 43, 47, 53, 61, 71, 73, 75
(a) 75 (b) 73 (c) 71 (d) 53
- 16, 25, 36, 73, 144, 196, 225
(a) 36 (b) 73 (c) 196 (d) 225
- 1, 4, 9, 16, 19, 36, 49
(a) 19 (b) 9 (c) 49 (d) 16
- 1, 5, 14, 30, 49, 55, 91
(a) 49 (b) 30 (c) 55 (d) 91
- 835, 734, 642, 751, 853, 981, 532
(a) 751 (b) 853 (c) 981 (d) 532
- 4, 5, 7, 10, 14, 18, 25, 32
(a) 7 (b) 14 (c) 18 (d) 33
- 52, 51, 48, 43, 34, 27, 16
(a) 27 (b) 34 (c) 43 (d) 48
- Choose out the odd one of the following:
(a) December (b) February (c) March (d) July
- Choose out the odd one of the following:
(a) June (b) July (c) Aug (d) Oct
- Choose out the odd one of the following:
(a) June (b) July (c) Sept (d) Nov



14. Choose out the odd one of the following:

(a) Month

(b) Week

(c) Fortnight

(d) Season

15. Choose out the odd one of the following:

(a) Calendar

(b) Year

(c) Date

(d) Month

Answer Sheet

1.	a	2.	b	3.	b	4.	a	5.	b	6.	a	7.	a	8.	a	9.	c	10.	b
11.	b	12.	b	13.	b	14.	d	15.	a										



16

Direction Tests

Logical Reasoning

Exercise

In which Direction is he moving now

- Mohan starts from point A and walks 1 km towards south, turns left and walks 1km. Then he turns left again and walks 1 km. Now he is facing.
 (a) East (b) West (c) North (d) South-west
- Suresh starts from a point, walks 2 miles towards south, turns right and walks $1\frac{1}{2}$ miles, turns left and walks V miles and then he turns back. What is the direction he is facing now?
 (a) East (b) West (c) South (d) North
- A man starts from a point, walks 4 miles towards north and turns left and walks 6 miles, turns right and walks for 3 miles and again turns right and walks 4 miles and takes rest for 30 minutes. He gets up and walks straight 2 miles in the same direction and turns right and walks one mile. What is the direction he is facing?
 (a) North (b) South (c) South-east (d) West
- A start from a point and walks 5 kms north, then turns left and walks 3 kms. Then again turns left and walks 5 km. Point out the direction in which he is going now.
 (a) North (b) South (c) East (d) West
- A rat run 20 towards East and turns to right runs 10 and turns to right runs 9 and again turns to left runs 5 and then turns to left runs 12 and finally turns to left and runs 6. Now what direction is the rat facing?
 (a) East (b) North (c) West (d) South
- A driver left his village and drove North for 20 km, after which he stopped for breakfast. Then he turned left and drove another 30 km, when he stopped for lunch. After some rest, he again turned left and drove 20 kms before stopping for evening tea. Once more he turned left and drove 30 kms to reach the town where he had supper. After evening tea in which direction did, he drive?
 (a) West (b) East (c) North (d) South
- A man started walking West. He turned right, then right again and finally turned left. Towards which direction was he walking now?
 (a) North (b) South (c) West (d) East
- One evening, Raja started to walk toward the Sun. After walking a while, he turned to his right and again to his right. After walking a while, he again turned right. In which direction is he facing?
 (a) South (b) East (c) West (d) North
- If a man on a moped start from a point and rides 4 km South then turns left and rides 2 km and turn again to the right to ride to go more towards which direction is, he moving?
 (a) North (b) West (c) East (d) South
- I drove East for 5 miles then drove North 3 miles, then turned to my left and drove for 2 miles and again turned to my left. Which direction am I going now?
 (a) South (b) North (c) West (d) North-west



11. A car travelling from south covers a distance of 8 km, then turns right and runs another 9 kms and again turns to the right and was stopped. Which direction does it face now?
(a) South (b) North (c) West (d) East
12. A taxi driver commenced his journey from a point and drove 10 km toward north and turned to his left and drove another 5 km. After waiting to meet a friend here, he turned to his right and continued to drive another 10 km. He has covered a distance of 25 km so far, but in which direction would he be now?
(a) South (b) North (c) East (d) South-east
13. A walk 3 kms northward and then he turns left and goes 2 km. He again turns left and goes 3 km. He turns right and walks straight. In which direction is he walking now?
(a) East (b) West (c) North (d) South
14. A man starts from a point, walks 15 meters towards East, turns left and walks 10 meters, turns right again and walks. Towards which direction is he now waking?
(a) North (b) East (c) West (d) South
15. A boy starts walking towards West, he turns right and again he turns right and then turns left at last. Towards which direction is he walking now?
(a) West (b) North (c) West (d) East
16. If a person moves 4 km towards west, then turns right and moves 3 km and then turns right and moves 6 km, which is the directions in which he is now moving?
(a) East (b) West (c) North (d) South
17. I started walking down a road in the morning facing the Sun. After walking for some time, I turned to my left. Then I turned to my right. In which direction was I going then?
(a) East (b) West (c) North (d) South
18. Lakshmi walked 2 furlongs north from her house and took a turn to left and continued to walk another one kilometer and finally she turned left and reached the school. Which direction is she facing now?
(a) West (b) North (c) South (d) North
19. You are going straight, first eastwards, then turn to the right, then right again, then left. In which direction would you be going now?
(a) East (b) West (c) South (d) North
20. You go North, turn right, then right again and then go to the left. In which direction are you now?
(a) South (b) East (c) West (d) North
21. Roopa starts from a point and walks 15 meters towards west, turns left and walks 12 meters, turns right again and walks. What is the direction she is now facing?
(a) South (b) West (c) East (d) North
22. A man starts his journey facing the sun early morning. He then turns right and walks 2 km. He then walks 3 km after turning right again. Which is the direction he is facing now?
(a) North-East (b) North (c) West (d) South
23. Shyam was facing East. He walked 5 km forward and then after turning to his right walked 3 km. Again, he turned to his right and walked 4 km. After this he turned back. Which direction was he facing at that time?
(a) East (b) West (c) North (d) South
24. Raju is standing facing north. He goes 30 meters ahead and turns left and goes for 15 meters. Now he turns right and goes for 50 meters and finally turns to his right and walks. In which direction is he heading?
(a) North (b) East (c) South (d) West



25. Sanmitra starts from his house and walks 3 km towards north. Then he turns right and walks 2 km and then turns right and walks 5 km, then turns right and walks 2 km and then again turns right and walks 2 km. Which direction is he facing now?
 (a) North (b) South (c) West (d) East
26. X walks southwards and then turns right, then left and then right, in which direction is he moving now?
 (a) South (b) North (c) West (d) South-West
27. A man started to walk East. After moving a distance, he turned to his right. After moving a distance, he turned to his right again. After moving a little he turned in the end to his left. In which direction was he going now?
 (a) North (b) South (c) East (d) West

In which Direction is he From Starting Point

28. Arun started from point A and walked 10 km East to point B, then turned to North and walked 3 km to point C and then turned West and walked 12 kms to point D, then again turned South and walked 3 kms to point E. In which direction is he from his straight point?
 (a) East (b) South (c) West (d) North
29. A man is facing East, then he turns left and goes 10 m, then turns right and goes 5 m then goes 5 m to the South and from there 5 m to West. In which direction is he from his original place?
 (a) East (b) West (c) North (d) South
30. A child walks 25 feet towards North, turns right and walks 40 feet, turns right again and walks 45 feet. He then turns left and walks 20 feet. He turns left again walks 20 feet. Finally, he turns to his left to walks another 20 feet. In which direction is the child from his starting point?
 (a) North (b) South (c) West (d) East
31. A tourist drives 10 km towards west and turns to left and takes a drive of another 4 km. He then drives towards east another 4 km and then turns to his right and drives 5 km. Afterwards he turns to his left and travels 6 km. In which direction is he from the starting point?
 (a) North (b) East (c) West (d) South
32. Ashok went 8 km South and turned West and walked 3 km again he turned North and walked 5 kms. He took a final turn to East and walked 3 kms. In which direction was Ashok from the starting point?
 (a) East (b) North (c) West (d) South
33. A walk southwards, then turns right, then left and then right. In which direction is he from the starting point?
 (a) South (b) East (c) West (d) North
34. Laxman went 15 km to North then he turned West and covered 10 kms. Then he turned south and covered 5 kms. Finally turning to East, he covered 10 kms. In which direction he is from his house?
 (a) East (b) West (c) North (d) South
35. A man starts from a point, walks 4 miles North, turns to his right and walks 2 miles, again turns to his right and walks 2 miles, again turns to his right and walks 2 miles. In which direction would he be now from its starting point?
 (a) North (b) South (c) East (d) West
36. Seeta starts from a point, walks 2 km towards north, turns towards her right and walks 2 km, turns right again and walks. What is the direction she is facing now?
 (a) East (b) West (c) South (d) North



37. Ramesh walked 3 km, towards West and turned to his left and walked 2 km. He, then turned to his right and walked 3 km. Finally, he turned to his right again and walked another 2 km. In which direction is Ramesh from his starting point now?
 (a) East (b) West (c) North (d) South
38. Deepa starts walking north towards and after a while she turns to her right. After walking some distance, she turns to his left and walks a distance of 1 km. She then turns to her left again. In which direction she moving now?
 (a) North (b) West (c) East (d) South
39. Raman starts walking in the morning facing the Sun. After sometime, he turned to the left later again he turned to his left. At what direction is Raman moving now?
 (a) East (b) West (c) South (d) North
40. Roy walks 2 km to East, then turns North-West and walks 3 km. Then he turns South and walks 5 km. Then again, he turns West and walks 2 km. Finally, he turns North and walks 6 km. In which direction, is he from the starting point?
 (a) South-West (b) South-East (c) North-West (d) North-East

Upside Down

41. If X stands on his head with his face towards south, to which direction will his left-hand point?
 (a) East (b) West (c) North (d) South
42. If A stands on his head with his face towards north. In which direction will his left-hand point?
 (a) North-East (b) North (c) East (d) North-West

Clock Questions

43. The hour hand of a clock is in west direction when time is 3:00 clock. What is the direction of minutes hand when time is 6:45?
 (a) East (b) West (c) North (d) South
44. Daily in the morning the shadow of a Clock Tower installed on Railway Station falls on high rise Mall and in the evening the shadow of the same mall falls on the Clock Tower installed on Railway Station exactly. So in which direction is Clock Tower to Mall?
 (a) Eastern side (b) Western side
 (c) Northern Side (d) Southern side

Clockwise & Anticlockwise

45. A man is facing west. He turns 45 degrees in clockwise direction and then another 180 degrees in the same direction and then 270 degrees in anticlockwise direction. In which direction is he facing now?
 (a) South-East (b) West (c) South (d) South-West

Position of One with respect to Another

46. K is a place which is located 2 km away in the north-west direction from the capital P. R is another place that is located 2 km away in the south-west direction from K. M is another place and that is located 2 km away in the north-west direction from R. T is yet another place that is located 2 km away in the south-west direction from M. In which direction is T located in relation to P?
 (a) South-west (b) North-west (c) West (d) North



47. Babu is Rahim's neighbor and his house is 200 meters away in the north-west direction. Joseph is Rahim's neighbor and his house is located 200 meters away in the south-west direction. Gopal is Joseph's neighbor and he stays 200 meters away in the south-east direction. Roy is Gopal's neighbor and his house is located 200 meters away in the north-east direction. Then where is the position of Roy's house in relation to Babu's?
- (a) South-east (b) south-west (c) North (d) North-east

Shadow Concept

48. Daily in the morning the shadow of Gol Gumbaz falls on Bara Kaman and in the evening the shadow of Bara Kaman falls on Gol Gumbaz exactly. So in which direction is Gol Gumbaz to Bara Kaman?
- (a) Easter side (b) Western side (c) Northern side (d) Southern side
49. If Mohan sees the rising sun behind the temple and the setting sun behind the railway station from his house, what is the direction of the temple from the railway station?
- (a) South (b) North (c) East (d) West
50. One morning after Sunrise, Vikram and Shailesh were standing in a down with their back towards each other. Vikram's shadow fell exactly towards left hand side. Which direction was Shailesh facing?
- (a) South-West (b) West (c) South (d) East-South

Misc. Questions

51. A man starts from a point, walk 8 km towards North, turns right and walks 12 km, turns left and walks 7 km turns and walks 20 km towards South, turns right and walks 12 km. In which direction is he from the starting point?
- (a) North (b) South (c) West (d) East
52. Five boys A, B, C, F, E, are sitting in a park in a circle. A is facing South-West, D is facing South-East, B and E are right opposite A and D respectively and C is equidistant between D and B. Which direction is C facing?
- (a) West (b) South (c) North (d) East
53. If Ahmed travels towards North from his house, then to left, then to South covering equal distances in each direction to reach Sohan's house, in which direction is Ahmed's house now?
- (a) East (b) South (c) North (d) West
54. Raju is Ramu's neighbor and he stays 100 meters away towards southeast. Venu is Raju's neighbor and he stays 100 meters away towards southwest. Khader is Venu's neighbor and he stays 100 meters away towards, north-west. Then where is the position of Khader's home in relation to Ramu's?
- (a) South-East (b) South-West (c) North-West (d) East
55. I stand with my right-hand extended side-ways towards South. Towards which direction will my back be?
- (a) North (b) West (c) East (d) South
56. A start walking towards North turns left, again turns left, turns right, again turns right once again turns left. In which direction is A walking now?
- (a) East (b) South (c) West (d) South-East
57. A man started to walk East, after moving a distance, he turned to his right. After moving a distance, he turned to his right again. After moving a little he turned in the end to his left. In which direction was he going now?
- (a) East (b) West (c) North (d) South



58. Madhuri moved a distance of 75 meters toward north. She then turned to her left and walked for about 25m, turned left again and walked 80m. Finally, she turned to her right at an angle of 45° . In which direction was she moving now?
 (a) South - East
 (b) South - West
 (c) North - West
 (d) North – East
59. A and B start moving towards each other from two places 200m apart. After walking 60m, B turns left and goes 20m, then he turns right and goes 40 m. He then turns right again and comes back to the road on which he had started walking. If A and B walk with the same speed, what is the distance between them now?
 (a) 80 m
 (b) 70 m
 (c) 40 m
 (d) 60 m
60. R's office is 4 km. in East direction from his home and club is 4km. in North direction from his home. On midway from office to club, R starts moving towards his home. In which direction is he facing his back?
 (a) South-East
 (b) North-West
 (c) North-East
 (d) South-West

Answer Sheet

1.	c	2.	d	3.	b	4.	b	5.	b	6.	b	7.	a	8.	a	9.	d	10.	a
11.	a	12.	b	13.	b	14.	b	15.	b	16.	a	17.	a	18.	c	19.	c	20.	b
21.	b	22.	c	23.	a	24.	b	25.	a	26.	c	27.	b	28.	c	29.	c	30.	d
31.	d	32.	d	33.	a	34.	c	35.	a	36.	c	37.	b	38.	b	39.	b	40.	c
41.	b	42.	c	43.	a	44.	a	45.	d	46.	c	47.	a	48.	a	49.	c	50.	c
51.	b	52.	d	53.	a	54.	b	55.	b	56.	c	57.	d	58.	b	59.	c	60.	c



17

Seating Arrangements

Chapter

Logical Reasoning

Exercise

Single Row Arrangement

- Five boys A, B, C, D and E are sitting in a row A is to the right of B and E is to the left of B but to the right of C. A is to the left of D. Who is second from the left end? (U.P.B. Ed 2013)
(a) D (b) A (c) E (d) B
- There are five different houses, A to E, in a row. A is to the right of B and E is to the left of C and right of A, B is to the right of D. Which of the houses is in the middle? IB CA (IO) 2013
(a) A (b) B (c) C (d) D
- Five friends P, Q, R, S and T are sitting in a row facing North. Here, S is between T and Q and Q is to the immediate left of R. P is to the immediate left of T. Who is in the middle? (SSC (Multi Task)2014)
(a) S (b) T (c) Q (d) R
- Six children A, B, C, D, E and F are standing in a row. B is between F and D. E is between A and C. A does not stand next to either F or D. C does not stand next to D. F is between which of the following pairs of children? (SSC (FCI) 2012)
(a) B and E (b) B and C (c) B and D (d) B and A
- There are eight books kept one over the other. Two books are on Organization Behavior, two books on TQM, three books on Industrial Relations and one book is on Economics. Counting from the top, the second, fifth and sixth books are on Industrial Relations. Two books on Industrial Relations are between two books on TQM. One book of Industrial Relations is between two books on Organizational Behavior while the book above the book of Economics is a book of TQM. Which book is the last book from the top? (MAT 2011)
(a) Economics (b) TQM
(c) Industrial Relations (d) Organizational Behavior
- Five boys are standing in a row facing East. Pavan is left of Tavan, Vipin and Chavan to the left of Nakul. Chavan is between Tavan and Vipin. Vipin is fourth from the left, then how far is Tavan to the right? (CLAT 2014)
(a) First (b) Second (c) Third (d) Fourth
- Six persons M, N, O, P, Q and R are sitting in two rows with three persons in each row. Both the row are in front of each other. Q is not at the end of any row. P is second the left of R. O is the neighbor of Q and diagonally opposite to P. N is the neighbor of R. Who is in front N? (UPSC (CSAT) 2011)
(a) R (b) Q (c) P (d) M



8. Six persons A, B, C, D, E and F are sitting in two rows, three in each row. (MAT 2011)
 (I) E is not at the end of any row
 (II) D is second to the left of F
 (III) C, the neighbor of E, is sitting diagonally opposite
 (IV) B is the neighbor of F.
 Which of the following are in one of the two rows?
 (a) D, B and F (b) C, E and B (c) A, E and F (d) F, B
9. Five boys A_1, A_2, A_3, A_4 and A_5 are sitting in a stair in the following way. (RRB (TC/CC) 2010)
 I. A_5 is above A_1 .
 II. A_4 is under A_2
 III. A_2 is under A_1
 IV. A_4 is between A_2 and A_3 .
 Who is at the lowest position of the stair?
 (a) A_1 (b) A_3 (c) A_5 (d) A_2
10. Five children are sitting in a row. S is sitting next to P but not T. K is sitting next to R, who is sitting on the extreme left and T is not sitting next to K. Who is/are adjacent to S? (NIFT (UG) 2014)
 (a) K and P (b) R and P (c) Only P (d) P and T
11. Five senior citizens are living in a multistoried building. Mr. Muan lives in a flat above Mr. Ashokan, Mr. Lokesh in a flat below Mr. Gaurav, Mr. Ashokan lives in a flat below Mr. Gaurav and Mr. Rakesh lives in a flat below Mr. Lokesh. Who lives in the topmost flat? (MAT 2013).
 (a) Mr. Lokesh (b) Mr. Gaurav (c) Mr. Muan (d) Mr. Rakesh
12. In a gathering seven members are sitting in a row. 'C' is sitting left to 'B' but on the right to 'D'. 'A' is sitting right to 'B', 'F' is sitting right to 'E' but left to 'D'. 'H' is sitting left to 'E'. Find the person sitting in the middle (SSC (10+2) 2013)
 (a) C (b) D (c) E (d) F
- Directions (No: 13-17):** Study the following information carefully to answer the given questions. A to H are seated in straight line facing North. C sits fourth left of G. D sits second to right of G. Only two people sit between D and A. B and F are immediate neighbors of each other. B is not an immediate neighbor of A. H is not neighbor of D. (GIC 2012)
13. Who amongst the following sits exactly in the middle of the persons who sit fifth from the left and the person who sit sixth from the right?
 (a) C (b) H (c) E (d) F
14. Who amongst the following sits third to the right of C?
 (a) B (b) F (c) A (d) E
15. Which of the following represents persons seated at the two extreme ends of the line?
 (a) C, D (b) A, B (c) B, G (d) D, H
16. What is the position of H with respect to F?
 (a) Third to the left (b) Immediate right (c) Second to right (d) Fourth to left
17. How many persons are seated between A and E?
 (a) One (b) Two (c) Three (d) Four

**Directions (Q. No. 18-22)**

Study the following information carefully to answer the given questions.

Ten students are A to J are sitting in a row facing west.

- I. B and F are not sitting on either of the edges.
- II. G is sitting left of D and H is sitting to the right of J.
- III. There are four persons between E and A.
- IV. I is the north of B and F is the south of D.
- V. J is between A and D and G is in E and F.
- VI. There are two persons between H and C.

18. Who is sitting at the seventh place counting from left?
 (a) H (b) C (c) J (d) Either H or C
19. Who among the following is definitely sitting at one of the ends?
 (a) C (b) H (c) E (d) Cannot be determined
20. Who are immediate neighbors of I?
 (a) BC (b) BH (c) AH (d) Cannot determined
21. Who is sitting second left of D?
 (a) G (b) F (c) E (d) J
22. If G and A interchange their positions, then who become the immediate neighbors of E?
 (a) G and F (b) Only F (c) Only A (d) J and H

Directions (Q. Nos. 23-24) Read the following information carefully and then answer the questions that follow.

A group of singers, facing the audience, are standing in line on the stage as follows.

- I. D is not right to C
- II. F is not standing beside G.
- III. B is not left of F
- IV. E is not left of A
- V. C and B have one person between E and F
- VI. There are two persons H and C.

23. Who is on the Second extreme right?
 (a) D (b) F (c) G (d) E
24. If we start counting from the left, on which number is B?
 (a) 1st (b) 2nd (c) 3rd (d) 5th



Double Row Arrangement

Directions (Q. No. 25- 27): Study the following information carefully to answer the given questions.

Eight persons P to W are sitting in front of one another in two rows. Each row has four persons. P is between U and V and facing North. Q, who is to the immediate left of M is facing W. R is between T and M and W is to the immediate right of V. (UCO Bank 2011)

25. Who is sitting in front of R?
(a) U (b) Q (c) V (d) P
26. Who is to the immediate right of R?
(a) M (b) U (c) M or W (d) None of these
27. In which of the following pairs, persons are sitting in front of each other?
(a) MV (b) RV (c) TV (d) UR
28. Four girls A, B, C, D are sitting around a circle facing the centre. B and C in front of each other, which of the following is definitely true? (MAT 2009)
(a) A and D Infront of each other (b) A is not between B and C
(c) D is left of C (d) A is left of C

Rectangular & Circular Arrangement

29. Siva, Satish, Amar and Praveen are playing cards. Amar is to the right of Satish who is to the right of Siva. Who is to the right of Amar?
(a) Satish (b) Amar (c) Praveen (d) Shiva

Directions (Q. No. 30- 33): Study the following information carefully to answer the given questions.

(a) P, Q, R, S, T, U, V and w are sitting round the circle and are facing the centre.

(b) P is second to the right of T who is the neighbor of R and V

(c) S is not the neighbor of P

(d) V is the neighbor of U

(e) Q is not between S and W. W is not between U and S

30. Which two of the following are not neighbor?
(a) RV (b) UV (c) RP (d) QW
31. Who is immediate right to the V?
(a) P (b) U (c) R (d) T
32. Which of the following is correct?
(a) P is not the immediate right of Q.
(b) R is between U and V
(c) Q is to the immediate left of W
(d) U is between W and S
33. What is the position of S?
(a) Between U and V
(b) Second to right of P
(c) To the immediate right of W
(d) Data inadequate



Directions (Q. No. 34- 37): Study the following information carefully to answer the given questions.

Six friends are sitting in a circle and are facing the centre of the circle. Deepa is between Prakash and Pankaj. Priya is between Mukesh and Lalit. Prakash and Mukesh are opposite to each other.

34. Who is sitting right to Prakash?
 (a) Mukesh (b) Deepa (c) Pankaj (d) Lalit
35. Who is just right to Pankaj?
 (a) Deepa (b) Lalit (c) Prakash (d) Priya
36. Who are the neighbors of Mukesh?
 (a) Prakash and Deepa (c) Priya and Pankaj
 (b) Deepa and Priya (d) Lalit and Priya
37. Who is sitting opposite to Priya?
 (a) Prakash (c) Pankaj
 (b) Deepa (d) Lalit

Answer Sheet

1.	c	2.	a	3.	a	4.	b	5.	a	6.	d	7.	b	8.	a	9.	b	10.	d
11.	c	12.	b	13.	d	14.	c	15.	d	16.	a	17.	a	18.	d	19.	c	20.	d
21.	a	22.	c	23.	b	24.	d	25.	d	26.	b	27.	a	28.	a	29.	c	30.	a
31.	d	32.	c	33.	c	34.	d	35.	a	36.	c	37.	b						



18 Blood Relations

Logical Reasoning

Exercise

- A is B's brother. C is A's mother. D is C's father; E is B's son. How is D related to A?
 (a) Son (b) Grandson (c) Grandfather (d) Great Grandfather
- As is B's brother. C is A's father. D is C's sister and E is D's mother. How is B related to E?
 (a) Grand-daughter
 (b) Great grands daughter
 (c) Grand aunt
 (d) Daughter
- A is B's Sister. C is B's Mother. D is C's Father. E is D's Mother. Then how is A related to D?
 (a) Grandmother (b) Grandfather (c) Daughter (d) Grands-daughter
- A is the father of B. C is the daughter of B. D is the brother of B. E is the son of A. What is the relationship between C and E?
 (a) Brother and sister (b) Cousins (c) Niece and uncle (d) Uncle and aunt
- If P is the husband of Q and R is the mother of S and Q. What is R to P?
 (a) Mother (b) Sister (c) Aunt (d) Mother-in-law
- P and Q are brothers. R and S are sister. P's son is S's brother. How is Q related to R?
 (a) Uncle (b) Brother (c) Father (d) Grandfather
- X is the husband of Y. W is the daughter of X. Z is husband of W. N is the daughter of Z. What is the relationship of N to Y?
 (a) Cousin (b) Niece (c) Daughter (d) Grand-daughter
- A reads a book and find the name of the author familiar. The author 'B' is the paternal uncle of C. C is the daughter of A. How is B related to A?
 (a) Brother (b) Sister (c) Father (d) Uncle
- A's mother is sister of B and she has a daughter C who is 21 years old. How is B related to D?
 (a) Uncle (b) Maternal Uncle (c) Niece (d) Daughter
- A is B's brother. C is A's mother. D is C's father. F is A's son. How is F related to D?
 (a) Son
 (b) Grandson
 (c) Grand-grandson
 (d) Grand-daughter
- A is B's brother. C is A's mother. D is C's father. E is B's son. How is B related to D?
 (a) Son (b) Grand-daughter (c) Grandfather (d) Great grandfather
- A is B's brother. C is A's mother. D is C's father. F a is A's son. How is B related to F's child?
 (a) Aunt (b) Cousin (c) Nephew (d) Grandfather
- A is B's daughter. B is C's mother. D is C's brother. How is D related to A?
 (a) Father (b) Grandfather (c) Brother (d) Son



14. A is D's brother. D is B's father. B and C are sisters. How is C related to A?
 (a) Cousin (b) Niece (c) Aunt (d) Nephew
15. A is B's brother. C is A's mother; D is C's father. E is B's son. How is D related to E?
 (a) Grandson
 (b) Great Grandson
 (c) Great Grandfather
 (d) Grandfather
16. X and Y are the children of A. A is the father of X but Y is not his son. How is Y related to A?
 (a) Sister (b) Brother (c) Son (d) Daughter
17. A is B's brother. C is A's mother. D is C's father. E is B's son. How is E related to A?
 (a) Cousin (b) Nephew (c) Uncle (d) Grandson
18. Based on the statements given below, find out who is the uncle of P?
 (i) K is the brother of J
 (ii) M is the sister of K
 (iii) P is the brother of N
 (iv) N is the daughter of J
 (a) K (b) J (c) N (d) M
19. A and B are sisters. A is mother of D. D has a daughter C who is married to F. G is the husband of A. How is C related to D?
 (a) Cousin (b) Niece (c) Aunt (d) Sister-in-law
20. R and S are brothers. X is the sister of Y and X is mother of R. What is Y to S?
 (a) Uncle (b) brother (c) Father (d) Mother
21. A is B's brother. C is A's mother. D is C's father. B and D's grand-daughter. How is B related to D.? Who is A's son?
 (a) Aunt (b) Cousin (c) Niece (d) Grand aunt
22. A is the son of B while B and C are sisters to one another. E is the mother of C. If D is the son of E. which of the following statements is correct?
 (a) D is the maternal uncle of A
 (b) E is the brother of B
 (c) D is the cousin of A
 (d) B and D are brothers
23. P is the father of T. T is the daughter of M. M is the daughter of K. What is P to K?
 (a) Father (b) Father-in-law (c) Brother (d) Son-in-law
24. A and B are brothers. E is the daughter of F. F is the wife of B. What is the relation of E to A?
 (a) Sister (b) Daughter (c) Niece (d) Daughter
25. M and F are a married couple. A and B are sisters. A is the sister of F. Who is B to M?
 (a) Sister (b) Sister-in-law (c) Niece (d) Daughter
26. If A is the mother of D. B is not the son of C. C is the father of D, D is the sister of B, then how is A related to B?
 (a) Mother (b) Brother (c) Step son (d) Sister
27. A and B are brother and sister respectively. C is A's father. D is C's sister and E is D's mother. How is B related to E?
 (a) Grand-daughter (b) Great grand-daughter
 (c) Aunt (d) Daughter



28. Q is the son of P. X is the daughter of Q. R is the aunt (Bua) of X and L is the son of R, then what is L to P?
 (a) Grandson (b) Grand-daughter (c) Daughter (d) Nephew
29. P and Q are brothers. R and S are sisters. P's son is S's brother. How is Q related to R?
 (a) Uncle (b) Brother (c) Father (d) Grandfather
30. A and B are the young ones of C. If C is the mother of B but A is not the daughter of C, then what is the relationship between C and A?
 (a) Nephew and Aunt (b) Brother and Sister
 (c) Mother and son (d) Niece and Aunt
31. A is the mother of D and sister of B. B has a daughter C who is married to F. G is the husband of A. How is G related to D?
 (a) Uncle (b) Husband (c) Son (d) Father
32. Pointing towards A, B said "your mother is the younger sister of my mother". How is A related to B?
 (a) Uncle (b) Cousin (c) Nephew (d) Father
33. A is B's wife's husband's brother. C and D are sisters of B. How is A related to C?
 (a) Brother (b) Sister-in-law (c) Wife (d) Sister
34. A and B are brothers. C and D are sisters. A's son is D's brother. How is B related to C?
 (a) Father (b) Brother (c) Uncle (d) Son
35. A is B's sister. C is B's mother. D is C's father. E is D's mother. Then how is A related to D?
 (a) Grandmother (b) Grandfather (c) Daughter (d) Grand-daughter
36. P, Q, R, S, T, U are 6 members of a family in which there are two married couples. T, a teacher is married to a doctor who is mother of R and U. Q the lawyer is married to P. P has one son and one grandson. Of the two married ladies one is a housewife. There is also one student and one male engineer in the family. Which of the following is true about the grand-daughter of the family?
 (a) She is a lawyer (b) She is an engineer
 (c) She is a student (d) She is a doctor
37. Six members of a family namely A, B, C, D, E and F are travelling together. 'B' is the son of C but C is not the mother of B. A and C are married couple. E is the brother of C. D is the daughter of A. F is the brother of B. How many male members are there in the family?
 (a) 3 (b) 2 (c) 4 (d) 1
38. A's mother is sister of B and has a daughter C. How can A be related to B from among the following?
 (a) Niece (b) Uncle (c) Daughter (d) Father
39. Rajiv is the brother of Atul. Sonia is the sister of Sunil. Atul is the son of Sonia. How is Rajiv related to Sonia?
 (a) Nephew (b) Son (c) Brother (d) Father
40. Sita is the niece of Ashok. Ashok's mother is Lakshmi. Kalyani is Lakshmi's mother. Kalyani's husband is Gopal. Parvathi is the mother-in-law of Gopal. How is Sita related to Gopal?
 (a) Great grandson's daughter (b) Gopal's Sita's father
 (c) Sita is Gopal's great grand-daughter (d) Grand niece
41. Seema is the daughter-in-law of Sudhir and sister-in-law of Ramesh. Mohan is the son of Sudhir and only brother of Ramesh. Find the relation between Seema and Mohan.
 (a) Sister-in-law (b) Aunt
 (c) Cousin (d) Wife



42. Suresh introduces a man as "He is the son of the woman who is the mother of the husband of my mother". How is Suresh related to the man?
 (a) Uncle (b) Son (c) Cousin (d) Grandson
43. Pointing to a lady in a photograph. Meera said. "Her father's only son's wife is my mother-in-law". How is Meera's husband related to that lady in the photo?
 (a) Nephew (b) Uncle (c) Son (d) Father
44. Pointing to a photograph Vikas said "She is the daughter of my grandfather's only son". How is she related to Vikas in the photograph?
 (a) Father (b) Brother (c) Sister (d) Mother
45. Suresh's sister is the wife of Ram. Ram is Rani's brother. Ram's father is Madhur. Sheetal is Ram's grandmother. Rema is Sheetal's daughter-in-law. Rohit is Rani's brother's son. Who is Rohit to Suresh?
 (a) Brother-in-law (b) Son
 (c) Brother (d) Nephew
46. Vinod introduces Vishal as the son of the only brother of his father's wife. How is Vinod related to Vishal?
 (a) Cousin (b) Brother (c) Son (d) Uncle
47. Among her children, Ganga's favorites are Ram and Rekha. Rekha is the mother of Sharat, who is loved most by his uncle Mithun. The head of the family is Ram Lal, who is succeeded by his sons Gopal and Mohan. Gopal and Ganga have been married for 35 years and have 3 children. What is the relation between Mithun and Mohan?
 (a) Uncle (b) Son (c) Brother (d) No relation
48. Rahul and Robin are brothers. Pramod is Rohin's father. Sheela is Pramod's sister. Prema is Pramod's niece. Shubha is Sheela's grand-daughter. How is Rahul related to Shubha?
 (a) Brother (b) Cousin (c) Uncle (d) Nephew
49. Preeti has a son, named Arun. Ram is Preeti's brother. Neeta too has a daughter named Reema. Neeta is Ram's sister. What is Arun's relationship to Reema?
 (a) Brother (b) Nephew (c) Cousin (d) Uncle
50. There are 2 film stars. One is the father of the other's son. What is the relationship of the two with each other?
 (a) Grandfather and Grandson (b) Grandfather and son
 (c) Husband and wife (d) Father and Son
51. Ramu's mother said to Ramu "My mother has a son whose son is Achyut". How is Achyut related to Ramu?
 (a) Uncle (b) Cousin (c) Brother (d) Nephew
52. Ravi's father has a son Rohit who has an aunt Laxmi who has a husband Rao whose father-in-law is Mohan. What is the relation of Mohan to Ravi?
 (a) Nephew (b) Grandfather (c) Son (d) Uncle
53. Vijay says, Ananda's mother is the only daughter of my mother". How is Ananda related to Vijay?
 (a) Brother (b) Father (c) Nephew (d) Grandfather
54. Introducing a man, a woman said, "His wife is the only daughter of my mother." How is the woman related with the man?
 (a) Sister-in-law (b) Wife (c) Aunt (d) Mother-in-law
55. A prisoner introduced a boy who came to visit him to the jailor as "Brothers and sisters I have none, he is my father's son's son". Who is the boy?
 (a) Nephew (b) Son (c) Cousin (d) Uncle

Answer Sheet

1.	c	2.	a	3.	d	4.	c	5.	d	6.	a	7.	d	8.	a	9.	b	10.	c
11.	b	12.	d	13.	c	14.	b	15.	c	16.	d	17.	b	18.	a	19.	a	20.	a
21.	a	22.	a	23.	d	24.	c	25.	b	26.	a	27.	a	28.	a	29.	a	30.	c
31.	d	32.	b	33.	a	34.	c	35.	d	36.	c	37.	c	38.	a	39.	b	40.	c
41.	d	42.	b	43.	a	44.	c	45.	d	46.	a	47.	d	48.	c	49.	c	50.	d
51.	b	52.	b	53.	c	54.	b	55.	b										

