

INDEX












CHAPTER	TOPIC	PAGE NO.
1	Ratio, Proportion, Indices & Logarithms	71 – 82
2	Equations	83 – 90
3	Inequalities	91 – 94
4	Simple and Compound Interest Including Annuity Applications	95 – 108
5	Permutation & Combination	109 – 118
6	Sequence and Series – Arithmetic and Geometric Progression	119 – 128
7	Set, Functions & Relations	129 – 138
8	Statistical Description of Data	139 – 148
9	Measures of Central Tendency	149 – 156
10	Measures of Dispersion	157 – 162
11	Probability	163 – 176
12	Theoretical Distributions	177 – 186
13	Correlation	187 – 192
14	Regression	193 – 198
15	Index Number	199 – 206



COMPILATION OF PAST YEAR QUESTIONS

(This is Vidhyoday's unique compilation of past attempts CA-F/CPT questions asked under Maths/Stats section.)

CHAPTER – 1 RATIO, PROPORTION, INDICES & LOGARITHMS

1. $y^y\sqrt{y} = (y\sqrt{y})^y$ then y
- (A) $\frac{3}{2}$
 (B) $\frac{9}{4}$
 (C) $\frac{27}{8}$
 (D) $\frac{81}{16}$
- 
2. $\log\left(\frac{a+b}{4}\right) = \frac{1}{2}(\log a + \log b)$ then $\frac{a}{b} + \frac{b}{a}$ is
- (A) 16
 (B) 18
 (C) 14
 (D) 20
- 
3. $\log\left(\frac{ab}{a^2}\right) + \log\left(\frac{bc}{b^2}\right) + \log\left(\frac{ac}{c^2}\right)$
- (A) 1
 (B) 0
 (C) 2
 (D) 3
- 
4. $\log_4 x = \frac{-3}{2}$ then x is
- (A) 4
 (B) $\frac{1}{4}$
 (C) 8
 (D) $\frac{1}{8}$
- 
5. $2^x \cdot 3^y = 108, 3^{3x-y} = 27$ find x & y
- (A) (3, 2)
 (B) (2, 3)
 (C) (1, 3)
 (D) (3, 1)
- 
6. If $\frac{p}{q} = \frac{r}{s}$ then which of the following isn't true
- (A) $\frac{p}{r} = \frac{q}{s}$
 (B) $\frac{p+q}{q} = \frac{r+s}{s}$
 (C) $\frac{q}{q-p} = \frac{s}{s-r}$
- 
- (D) $\frac{p}{s} = \frac{r}{q}$
7. $\frac{2^n + 2^{n-1}}{2^{n+1} - 2^n}$ Solve,
- [Dec. 2009 & 15, May 2018]
- (A) $\frac{1}{2}$
 (B) $\frac{5}{2}$
 (C) $\frac{3}{2}$
 (D) 1
- 
8. If A invest Rs. 1,26,000, B invest Rs. 84,000, C invest Rs. 2,10,000 & Total Profit is 242000 then Profit Ratio is
- (A) 3:2:5
 (B) 3:5:7
 (C) 5:3:7
 (D) 3:5:2
- 
9. If the ratio of angles triangle are 1:2:6 find obtuse angle
- (A) 100°
 (B) 120°
 (C) 150°
 (D) 140°
- 
10. $[\log_{10}\sqrt{25} - \log_{10}(2)^3 + \log_{10}(4^2)]^x$ is
- [Dec. 2009]
- (A) -1
 (B) 0
 (C) 1
 (D) $\frac{1}{2}$
- 
11. What is the fourth proportion of $x, 2x, x + 1$?
- [June 2009]
- (A) $\frac{x+1}{2}$
 (B) $2(x+1)$
 (C) $2x+1$
 (D) $x + \frac{1}{2}$
- 

COMPILATION OF PAST YEAR QUESTIONS

12. $\{1 - \{1 - \{1 - x^2\}^{-1}\}^{-1}\}^{-1/2}$ [June 2009]

- (A) x
- (B) $\frac{1}{x}$
- (C) x^2
- (D) x^3



13. If $\frac{p}{q} = \frac{2}{3}$ find $\frac{2p+q}{2p-q}$ [June 2009]

- (A) 5
- (B) 3
- (C) 1
- (D) 7



14. $\log_4[x^2 + x] - \log_4[x + 1] = 2$ find x [June 2009]

- (A) 4
- (B) 8
- (C) 16
- (D) 32



15. If $\log(m+n) = \log mn$ then [June 2009]

- (A) $n = \frac{m}{m+1}$
- (B) $m = n^n$
- (C) $m = \frac{n}{n-1}$
- (D) $mn = 1$



16. $\log_2 5 \times \log_5 2$

- (A) 1
- (B) 0
- (C) $\log_5 2$
- (D) $\log_2 5$



17. $2^x \cdot 3^y \cdot 5^z = 360$, then x, y, z respectively are [Dec. 2009]

- (A) (1, 2, 3)
- (B) (2, 1, 3)
- (C) (3, 2, 1)
- (D) Not



18. $\log_a b + \log_a c = 0$ then what is the relation between b & c [June 2010]

- (A) $b = c = 1$
- (B) b and c are reciprocals
- (C) $b = c$
- (D) $b^2 = c$



19. Number of students in two classes in the ratio of 5:7. If 10 students are removed from both the classes then their ratio becomes 4:6 Number of students are

- (A) (20, 28) [June 2010]
- (B) (40, 56)
- (C) (50, 70)
- (D) Not



20. Two number are in the Ratio 49:68 What must be added to each of them such that their ratio becomes 3:4 [June 2010]

- (A) 5
- (B) 6
- (C) 7
- (D) 8



21. $2^x - 2^{x-1} = 4$ find x^x

- (A) 4
- (B) 27
- (C) 256
- (D) None



22. $2\log x + 2\log x^2 + 2\log x^3 + \dots + 2\log x^n$ [Dec. 2010]

- (A) $n \log x$
- (B) $(n+1) \log x$
- (C) $n(n+1) \log x$
- (D) $\frac{(n+1)}{2} \log x$



23. $\frac{\log_{10}(x)-3}{2} + \frac{11-\log_{10}(x)}{3} = 2$, find x ?

- (A) 10 [Dec. 2010]
- (B) 100
- (C) $\frac{1}{100}$
- (D) $\frac{1}{10}$



24. $A : B = 2 : 5$ then $\frac{10A+3B}{5A+2B}$ [Dec. 2010]

- (A) $\frac{7}{4}$
- (B) $\frac{8}{3}$
- (C) $\frac{14}{5}$
- (D) $\frac{15}{7}$



COMPILATION OF PAST YEAR QUESTIONS

25. In a film shooting, A and B received money in a certain ratio and B and C also received the Money in the same ratio. If A gets Rs. 1,60,000 and C gets Rs. 2,50,000. Find the amount received by B? [June 2011]

- (A) 100000
- (B) 150000
- (C) 200000
- (D) 175000



26. If the ratio of $(5x-3y)$ and $(5y-3x)$ is 3:4, then the value of x:y is: [June 2011]

- (A) 5:9
- (B) 27:29
- (C) 14:13
- (D) 9:4



27. If $n = m!$ where ('m' is a positive integer > 2) then the value of: [June 2011]

$$\frac{1}{\log_2 n} + \frac{1}{\log_3 n} + \frac{1}{\log_4 n} + \dots + \frac{1}{\log_m n}$$

- (A) $\log n$
- (B) $n \log m$
- (C) 0
- (D) 1



28. The ratio compounded of 4:5 and sub-duplicated of "a":9 is 8:5. Then value of "a" is [Dec. 2011]

- (A) 16
- (B) 9
- (C) 4
- (D) 36



29. If $\log_2 x + \log_4 x = 6$, then the value of x is [Dec. 2011]

- (A) 2
- (B) 8
- (C) 16
- (D) 32



30. If $\log_x y = 100$ and $\log_{2x} = 10$ then the value of y [June 2012]

- (A) $2^{\frac{1}{10}}$
- (B) 2^{1000}
- (C) $2^{\frac{1}{100}}$
- (D) 2^{100}



31. Which of the following are not in proportion

- (A) 6, 8, 5, 7
- (B) 7, 3, 14, 6
- (C) 18, 27, 12, 18
- (D) 8, 6, 12, 9

[June 2012]



32. The value of $\frac{3^{n+1}+3^n}{3^{n+3}-3^{n-1}}$ [June 2012]

- (A) $\frac{3}{20}$
- (B) $\frac{1}{9}$
- (C) $\frac{1}{8}$
- (D) $\frac{1}{6}$



33. Find the two numbers such that the mean proportional between them is 18 and third proportional between them is 144.

- (A) (15, 24)
- (B) (9, 24)
- (C) (9, 36)
- (D) (8, 36)

[Dec. 2012]



34. If $\log_{10} 5 + \log_{10}(5x+1) = \log_{10}(x+5)+1$ then x = [Dec. 2012]

- (A) 3
- (B) 2
- (C) 1
- (D) 0



35. Value of x, if $x \cdot x^{\frac{1}{3}} = (x^{\frac{1}{3}})^x$ [Dec. 2012]

- (A) 2
- (B) 4
- (C) 8
- (D) 16



36. Which is True if $\frac{1}{ab} + \frac{1}{bc} + \frac{1}{ca} = \frac{1}{abc}$

[Dec. 2012]

- (A) $\log(a+b+c) = 1$
- (B) $\log(abc) = 0$
- (C) $\log(abc) = 1$
- (D) $\log(a+b+c) = 0$



COMPILATION OF PAST YEAR QUESTIONS

37. if $(\log_{\sqrt{x}}2)^2 = \log_x 2$ then $x =$
 (A) 2 [June 2013]
 (B) 4
 (C) 8
 (D) 16



38. Triplicate ratio of 4:5 is [June 2013]
 (A) $\frac{\sqrt[3]{4}}{\sqrt[3]{5}}$
 (B) $\frac{64}{125}$
 (C) $\frac{2}{\sqrt{5}}$
 (D) $\frac{16}{25}$



39. The mean proportion between 24 and 54 is _____ [June 2013, May 2018]
 (A) 40
 (B) 32
 (C) 36
 (D) 30



40. Find the value of $[\log_y x \cdot \log_z y \cdot \log_x z]^3$ [Dec. 2013]
 (A) 2
 (B) 1
 (C) 0
 (D) \log_{xyz}



41. Find the value of $\log_4 9 \log_3 2$ [Dec. 2013, May 2018]
 (A) 1
 (B) 2
 (C) $\frac{3}{2}$
 (D) $\frac{2}{3}$



42. If $\sqrt[3]{a} + \sqrt[3]{b} + \sqrt[3]{c} = 0$ then find the value of $\left[\frac{a+b+c}{3}\right]^3$ [Dec. 2013]
 (A) $a+b+c$
 (B) abc
 (C) $\frac{a+b+c}{9}$
 (D) $\frac{abc}{9}$



43. The ratio of numbers is 1:2:3 and sum of their squares is 504 then the numbers are [Dec. 2013]
 (A) 6, 12, 18
 (B) 3, 6, 9
 (C) 4, 8, 12
 (D) 5, 10, 15



44. If $x = \log_{24} 12; y = \log_{36} 24; z = \log_{48} 36$ then $xyz+1 = ?$ [June 2014]
 (A) $2xy$
 (B) $2xz$
 (C) $2yz$
 (D) $2xyz$



45. If $x^2+y^2 = 7xy$ then $\log_{\frac{1}{3}}(x+y)$
 (A) $\frac{1}{2}(\log x + \log y)$ [June 2014]
 (B) $\log(xy)$
 (C) $\log(x+y)^3$
 (D) $\frac{1}{3}\log(x+y)$



46. If $(25)^{150} = (25x)^{50}$ then the value of x will be [June 2014]
 (A) 5
 (B) 25
 (C) 125
 (D) 625



47. The value of $\left(\frac{y^a}{y^b}\right)^{a^2+ab+b^2} \left(\frac{y^b}{y^c}\right)^{b^2+bc+c^2} \left(\frac{y^c}{y^a}\right)^{c^2+ca+a^2}$ [June 2014]
 (A) 0
 (B) 1
 (C) $\frac{1}{y}$
 (D) y^{a+b+c}



48. If P is 25% less than Q and R is 20% higher than Q the Ratio of R and P [June 2014]
 (A) 5:8
 (B) 5:3
 (C) 8:5
 (D) 3:5



COMPILATION OF PAST YEAR QUESTIONS

49. A person has assets worth Rs. 1,48,200. He wishes to divide it amongst his wife, son and daughter in the ratio 3:2:1 respectively. From the assets the share of his son will be:

- (A) 45,000 [June 2014]
 (B) 39,600
 (C) 49,400
 (D) 52,000



50. If $x:y = 2:3$ then $(5x+2y) : (3x-y) =$

- (A) $\frac{16}{3}$ [June 2014]
 (B) $\frac{15}{7}$
 (C) $\frac{4}{3}$
 (D) $\frac{8}{3}$



51. If $\log x = a+b$; $\log y = a - b$ then $\log\left(\frac{10x}{y^2}\right)$

- (A) $1-a+3b$ [Dec. 2014]
 (B) $a-1+3b$
 (C) $a+3b+1$
 (D) $1-b+3a$



52. $x = 1 + \log_p qr$, $y = 1 + \log_q rp$, $z = 1 + \log_r pq$, find $\frac{1}{x} + \frac{1}{y} + \frac{1}{z}$ [Dec. 2014]

- (A) 1
 (B) 2
 (C) 3
 (D) 4



53. The first, second and third month salaries of a person are in the ratio 2:4:5. The difference between the product of the salaries of first 2 months & last 2 months is 4,80,00,000. Find the salary of the second month [Dec. 2014]

- (A) 9000
 (B) 7500
 (C) 7000
 (D) 8000



54. If $p^x = q$, $q^y = r$, $r^z = p^6$ then the value of xyz is [June 2015]

- (A) 1
 (B) $\frac{1}{6}$
 (C) 6
 (D) 3



55. $15(2p^2 - q^2) = 7pq$ where are positive then $p:q$ [June 2015]

- (A) 3:5
 (B) 5:6
 (C) 6:5
 (D) 5:3



56. If one type of rice of cost Rs. 13.84 is mixed with another type of rice of cost Rs. 15.54 & the mixture is sold at Rs. 17.60 with a profit of 14.6% on selling price then in which proportion the two types of rice are mixed?

- (A) 3:7 [June 2015]
 (B) 4:5
 (C) 7:3
 (D) 5:3



57. Find the ratio of third proportional of 12 & 30 and mean proportional of 9, 25

- (A) 5:2 [Dec. 2015]
 (B) 5:3
 (C) 5:4
 (D) 5:1



58. $\log_3 5 \times \log_5 4 \times \log_2 3$ [Dec. 2015]

- (A) $\log 2$
 (B) $\log 3$
 (C) 2
 (D) 1



59. What must be added to each of the number 10, 18, 22, 38 to make them proportional

- (A) 1 [Dec. 2015]
 (B) 2
 (C) 3
 (D) 4



60. The integral part of logarithm is called _____, and the decimal part of a logarithm is called _____. [June 2016]

- (A) Mantissa, Characteristic
 (B) Characteristic, Mantissa
 (C) Integer, Fraction
 (D) Fraction, Integer



61. The value of $\frac{1}{\log_3 60} + \frac{1}{\log_4 60} + \frac{1}{\log_5 60} =$

- (A) 1
- (B) 2
- (C) $\log 5$
- (D) $\log 2$



62. If $2^{x-y} = 2^{2x-y} = \sqrt{8}$ then the respective value of x and y are _____

- (A) $(\frac{3}{2}, 0)$
- (B) $(0, \frac{-3}{2})$
- (C) $(0, \frac{3}{2})$
- (D) $(\frac{-3}{2}, 0)$



63. x, y, z together starts a business. If x invests 3 times as much as y invests and y invests two third of what z invests, then the ratio of capitals of x, y, z is _____ [Dec. 2015]

- (A) 6:2:3
- (B) 2:3:6
- (C) 3:6:2
- (D) 3:4:6



64. Given $\log 2 = 0.3010$ and $\log 3 = 0.4771$ then the value of $\log 24$ [Dec. 2016]

- (A) 1.0936
- (B) 1.3801
- (C) 1.6258
- (D) 1.1937



65. If $3^x = 5^y = (75)^z$ then [Dec. 2016]

- (A) $\frac{1}{x} + \frac{1}{z} = \frac{2}{y}$
- (B) $\frac{1}{x} + \frac{2}{z} = \frac{1}{y}$
- (C) $\frac{1}{x} + \frac{2}{y} = \frac{1}{z}$
- (D) $\frac{1}{z} + \frac{1}{y} = \frac{2}{z}$



66. A bag contains 23 numbers of coins in the form of 1 rupee, 2 and 5 rupee coins. The total sum of the coins is Rs. 43. The ratio between 1 rupee and 2 rupees coins is 3:2. Then the number of 1 rupee coins.

- (A) 16 [Dec. 2016]
- (B) 12
- (C) 10
- (D) 8



67. If $x = 3^{1/3} + 3^{-1/3}$ then find value of $3x^3 - 9x$ [June 2009]

- (A) 3
- (B) 9
- (C) 12
- (D) 10



68. The recurring decimal 2.7777.....can be expressed as: [Dec. 2010]

- (A) $\frac{24}{9}$
- (B) $\frac{22}{9}$
- (C) $\frac{26}{9}$
- (D) $\frac{25}{9}$



69. The value of $(\log_y x \cdot \log_z y \cdot \log_x z)^3$ is

- (A) 0 [Dec. 2013]
- (B) -1
- (C) 1
- (D) 3



70. If $\log x = m + n$ and $\log y = m - n$, then $\log \left(\frac{10x}{y^2} \right) =$ [June 2015]

- (A) $3n - m + 1$
- (B) $3m - n + 1$
- (C) $3n + n + 1$
- (D) $3m + n + 1$



71. The value of $\left[\frac{x^2 - (y-z)^2}{(x+z)^2 - y^2} + \frac{y^2 - (x-z)^2}{(x+y)^2 - z^2} + \frac{z^2 - (x-y)^2}{(y+z)^2 - x^2} \right]$ is
[June 2016]

- (A) 0
- (B) 1
- (C) -1
- (D) ∞



72. If $\log_4(x^2 + x) - \log_4(x+1) = 2$, then the value of X is:
[June 2016]

- (A) 2
- (B) 3
- (C) 16
- (D) 8



73. Value of $\frac{1}{\log_3 60} + \frac{1}{\log_4 60} + \frac{1}{\log_5 60}$ is:

- (A) 0
- (B) 1
- (C) 5
- (D) 60

[June 2016]



74. If $abc = 2$, then the value of $\frac{1}{1+a+2b^{-1}} + \frac{1}{1+\frac{1}{2}b+c^{-1}} + \frac{1}{1+c+a^{-1}}$ is:

- (A) 1
- (B) 2
- (C) 3
- (D) $\frac{1}{2}$

[Dec. 2016]



75. If $a : b = 2 : 3$, $b : c = 4 : 5$ and $c : d = 6 : 7$, then $a : d$ is:
[June 2017]

- (A) 24 : 35
- (B) 8 : 15
- (C) 16 : 35
- (D) 7 : 15



76. The value of $\log(1^3 + 2^3 + 3^3 + \dots + n^3)$ is equal to:
[June 2017]

- (A) $3 \log 1 + 3 \log 2 + \dots + 3 \log n$
- (B) $2 \log n + 2 \log(n+1) - 2 \log 2$
- (C) $\log n + \log(n+1) + \log(2n+1) - \log 6$
- (D) 1



77. If $a = \frac{\sqrt{6} + \sqrt{5}}{\sqrt{6} - \sqrt{5}}$ and $b = \frac{\sqrt{6} - \sqrt{5}}{\sqrt{6} + \sqrt{5}}$ then the value of $\frac{1}{a^2} + \frac{1}{b^2}$ is equal to:

- (A) 480
- (B) 482
- (C) 484
- (D) 486

[June 2017]



78. The ratio of the number of Rs. 5 coins and Rs. 10 coins is 8 : 15. If the value of Rs. 5 coins is Rs. 360, then the number of Rs. 10 coins will be:
[Dec. 2017]

- (A) 72
- (B) 120
- (C) 135
- (D) 185



79. If $\log_3[\log_4(\log_2 x)] = 0$, then the value of 'x' will be:
[Dec. 2017]

- (A) 4
- (B) 8
- (C) 16
- (D) 32



80. If $\log\left(\frac{x-y}{2}\right) = \frac{1}{2}(\log x + \log y)$, then the value of $x^2 + y^2 =$ _____.
[Dec. 2017]

- (A) 2xy
- (B) 4xy
- (C) $2x^2y^2$
- (D) 6xy



81. If $\frac{1}{2}, \frac{1}{3}, \frac{1}{5}$ and $\frac{1}{x}$ are in proportion, then the value of 'x' will be:
[Dec. 2017]

- (A) $\frac{15}{2}$
- (B) $\frac{6}{5}$
- (C) $\frac{10}{3}$



- (D) $\frac{5}{6}$
82. If $p : q$ is the sub-duplicate ratio of $p - x^2 : q - x^2$, then x^2 is: [May 2018]

(A) $\frac{p}{p+q}$

(B) $\frac{q}{p+q}$

(C) $\frac{qp}{p-q}$

(D) None



83. The value of the expression:
 $a^{\log_b b \cdot \log_c c \cdot \log_d d \cdot \log_t t}$ [May 2018]

(A) t

(B) $abcdt$

(C) $(a + d + c + d + t)$

(D) None



84. $\frac{3x-2}{5x+6}$ is the duplicate ratio of $\frac{2}{3}$ then find the value of x : [Nov. 2018]

(A) 2

(B) 6

(C) 5

(D) 9



85. $\frac{2^{m+1} \times 3^{2m+n+3} \times 5^{n+m+4} \times 6^{2n+m}}{6^{2m+n} \times 10^{n+1} \times 15^{m+3}}$ [Nov. 2018]

(A) 3^{2m-2n}

(B) 3^{2n-2m}

(C) 1

(D) None of the above



86. The ratio of two numbers are 3 : 4. The difference of their squares is 28 Greater no. is: [Nov. 2019]

(A) 8

(B) 12

(C) 24

(D) 64



87. The price of scooter and moped are in the ratio 7 : 9. The price of moped is Rs. 1,600 more than that of scooter. Then the price of moped is: [Nov. 2019]

(A) Rs. 7,200

(B) Rs. 5,600

(C) Rs. 800

(D) Rs. 700



88. $\log_{0.01} 10,000 = ?$ [Nov. 2019]

(A) 2

(B) -2

(C) 4

(D) -4



89. Value of $\left| 9^{n+\frac{1}{4}} \cdot \frac{\sqrt{3 \cdot 3^n}}{3\sqrt{3^{-n}}} \right|^{\frac{1}{n}}$ [Nov. 2019]

(A) 9

(B) 27

(C) 81

(D) 3



90. If $x = \sqrt{3} + \frac{1}{\sqrt{3}}$ then

$$\left(x - \frac{\sqrt{126}}{\sqrt{42}} \right) \left(x - \frac{1}{x - \frac{2\sqrt{3}}{3}} \right) = ?$$

(A) $\frac{5}{6}$

(B) $\frac{6}{5}$

(C) $\frac{2}{3}$

(D) $-\frac{3}{5}$

[Nov. 2019]



91. If $a : b = 3 : 7$, then $3a + 2b : 4a + 5b = ?$

(A) 23 : 47

(B) 27 : 43

(C) 24 : 51

(D) 29 : 53

[Nov. 2020]



92. If $\log_a \sqrt{3} = \frac{1}{6}$, find the value of a:

- (A) 9 [Nov. 2020]
 (B) 81
 (C) 27
 (D) 3



93. $\log 9 + \log 5$ is expressed as:
 (A) $\log 4$ [Nov. 2020]

- (B) $\log \frac{9}{5}$
 (C) $\log \frac{5}{9}$
 (D) $\log 45$



94. If $a : b = 9 : 4$, then $\sqrt{\frac{a}{b}} + \sqrt{\frac{b}{a}} = ?$

- (A) $\frac{3}{2}$ [Nov. 2020]
 (B) $\frac{2}{3}$
 (C) $\frac{6}{13}$
 (D) $\frac{13}{6}$



95. The ratio of number of boys and the number of girls in a school is found to be 15 : 32. How many boys and equal number of girls should be added to bring the ratio to $\frac{2}{3}$? [Nov. 2020]

- (A) 19
 (B) 20
 (C) 23
 (D) 27



96. Find the value of a from the following:

$$\sqrt{(9)^{-5}} \times \sqrt{(3)^{-7}} = \sqrt{(3)^{-a}} \quad \text{[Nov. 2020]}$$

- (A) 11
 (B) 13
 (C) 15
 (D) 17



97. Find the value of $\frac{3t^{-1}}{t^{-1/3}}$ [Jan. 2021]

- (A) $\frac{3}{t^{2/3}}$
 (B) $\frac{3}{t^{3/2}}$
 (C) $\frac{3}{t^{1/3}}$
 (D) $\frac{3}{t^2}$



98. If $\log_a(ab) = x$, then $\log_b(ab)$ is [Jan. 2021]

- (A) $\frac{1}{x}$
 (B) $\frac{x}{1+x}$
 (C) $\frac{x}{x-1}$
 (D) None of these



99. In a certain business A and B received profit in a certain ratio B and C received profits in the same ratio. If A gets Rs. 1600 and C gets Rs. 2500 then how much does B get?

- (A) Rs. 2,000 [Jan. 2021]
 (B) Rs. 2,500
 (C) Rs. 1,000
 (D) Rs. 1,500



100. The ratio of two quantities is 15 : 17. If the consequent of its inverse ratio is 15, then the antecedent is; [Jan. 2021]

- (A) 15
 (B) $\sqrt{15}$
 (C) 17
 (D) 14



101. The salaries of A, B and C are in the ratio 2 : 3 : 5. If increments of 15%, 10% and 20% are allowed respectively to their salary, then what will be the new ratio of their salaries? [Jan. 2021]

- (A) 3 : 3 : 10
 (B) 10 : 11 : 20
 (C) 23 : 33 : 60



- (D) Cannot be determined
102. The salaries of A, B and C are in the ratio 2 : 3 : 5. If increments of 15%, 10% and 20% are allowed respectively to their salary, then what will be the new ratio of their salaries? [July 2021]
- (A) 23 : 33 : 60
(B) 33 : 23 : 60
(C) 23 : 60 : 33
(D) 33 : 60 : 23
103. If A : B = 5 : 3, B : C = 6 : 7 and C : D = 14 : 9 then the value of A : B : C : D is: [July 2021]
- (A) 20 : 14 : 12 : 9
(B) 20 : 9 : 12 : 14
(C) 20 : 9 : 14 : 12
(D) 20 : 12 : 14 : 9
104. A vessel contained a solution of acid and water in which water was 64%. Four litres of the solution were taken out of the vessel and the same quantity of water was added. If the resulting solution contains 30% acid, the quantity (in litres) of the solution, in the beginning in the vessel, was [July 2021]
- (A) 12
(B) 36
(C) 24
(D) 2
105. If $xy + yz + zx = -1$ then the value of $\left(\frac{x+y}{1+xy} + \frac{z+y}{1+zy} + \frac{x+z}{1+zx}\right)$ is: [July 2021]
- (A) xyz
(B) $\frac{-1}{yz}$
(C) $\frac{1}{xyz}$
(D) $\frac{1}{x+y+z}$

106. If $\log_4 x + \log_{16} x + \log_{64} x + \log_{256} x = \frac{25}{6}$ then the value of x is [July 2021]
- (A) 64
(B) 4
(C) 16
(D) 2
107. Let $a = \frac{(\sqrt{5} + \sqrt{3})}{(\sqrt{5} - \sqrt{3})}$ and $b = \frac{(\sqrt{5} - \sqrt{3})}{(\sqrt{5} + \sqrt{3})}$. What is the value of $a^2 + b^2$? [Dec. 2021]
- (A) 64
(B) 62
(C) 60
(D) 254
108. Incomes of R and S are in the ratio 7 : 9 and their expenditures are in the ratio 4 : 5. Their total expenditure is equal to income of R. What is the ratio of their savings? [Dec. 2021]
- (A) 23 : 36
(B) 28 : 41
(C) 31 : 43
(D) 35 : 46
109. A bag contains 105 coins containing some 50 paise, and 25 paise coins. The ratio of the number of these coins is 4 : 3. The total value (in Rs.) in the bag is [Dec. 2021]
- (A) 43.25
(B) 41.25
(C) 39.25
(D) 35.25
110. If $\log_{10} 3 = x$ and $\log_{10} 4 = y$, then the value of $\log_{10} 120$ can be expressed as [Dec. 2021]
- (A) $x - y + 1$
(B) $x + y + 1$
(C) $x + y - 1$
(D) $2x + y - 1$

111. Find the value of $\log(x^6)$, if $\log(x) + 2\log(x^2) + 3\log(x^3) = 14$.

- (A) 3 [Dec. 2021]
- (B) 4
- (C) 5
- (D) 6



112. The value of $\frac{6^{n+4} + 3^{n+3} \times 2^{n+3}}{5 \times 6^n + 6^n}$ is:

- (A) 232 [Dec. 2021]
- (B) 242
- (C) 252
- (D) 262



113. In a department, the number of males and females are in the ratio 3 : 2. If 2 males and 5 females join the department, then the ratio becomes 1 : 1. Initially, the number of females in the department is

- (A) 9 [Dec. 2021]
- (B) 6
- (C) 3
- (D) 8



114. If $\left(\frac{3a}{2b}\right)^{2x-4} = \left(\frac{2b}{3a}\right)^{2x-4}$, for some a and b, then the value of x is [Dec. 2021]

- (A) 8
- (B) 6
- (C) 4
- (D) 2



115. The value of $\left(1 - \sqrt[3]{0.027} \left(\frac{5}{6}\right) \left(\frac{1}{2}\right)^2\right)$ is:

- (A) $\frac{11}{16}$
- (B) $\frac{13}{16}$
- (C) $\frac{15}{16}$
- (D) 1

[Dec. 2021]



COMPILATION OF PAST YEAR QUESTIONS

ANSWER KEY

1.	B	2.	C	3.	B	4.	D	5.	B
6.	D	7.	C	8.	A	9.	B	10.	C
11.	B	12.	A	13.	D	14.	C	15.	C
16.	A	17.	C	18.	B	19.	C	20.	D
21.	B	22.	C	23.	D	24.	A	25.	C
26.	B	27.	D	28.	D	29.	C	30.	B
31.	A	32.	D	33.	C	34.	A	35.	A
36.	D	37.	D	38.	B	39.	C	40.	B
41.	A	42.	B	43.	A	44.	C	45.	A
46.	D	47.	B	48.	C	49.	C	50.	A
51.	A	52.	A	53.	C	54.	C	55.	B
56.	C	57.	D	58.	C	59.	B	60.	B
61.	A	62.	B	63.	A	64.	B	65.	C
66.	B	67.	D	68.	D	69.	C	70.	A
71.	B	72.	C	73.	B	74.	A	75.	C
76.	B	77.	B	78.	C	79.	C	80.	D
81.	A	82.	D	83.	A	84.	B	85.	D
86.	A	87.	A	88.	B	89.	B	90.	A
91.	A	92.	C	93.	D	94.	D	95.	A
96.	D	97.	A	98.	C	99.	A	100.	C
101.	C	102.	A	103.	D	104.	C	105.	C
106.	C	107.	B	108.	D	109.	B	110.	B
111.	D	112.	C	113.	B	114.	D	115.	C

COMPILATION OF PAST YEAR QUESTIONS

(This is Vidhyoday's unique compilation of past attempts CA-F/CPT questions asked under Maths/Stats section.)

CHAPTER – 2 EQUATIONS

1. $x^3 - 6x^2 + 11x - 6 = 0$ find $3x - 4$

- (A) (1, -2, 5)
- (B) (1, 2, 5)
- (C) (-1, 2, 5)
- (D) (1, 2, -5)



2. The age of father is 3 times the age of his son. 15 years later, the age of father double's the age of son, then present age of father is?

- (A) 60 years
- (B) 45 years
- (C) 30 years
- (D) 35 years



3. If the cost of manufacturing 10 box is Rs. 28,000 & cost of manufacturing 20 box is Rs. 36,000. Find the cost equation.

- (A) $y = 20000 + 800x$
- (B) $y = 10000 + 800x$
- (C) $y = 5000 + 400x$
- (D) $y = 12000 + 800x$



4. α & β are roots of Equation $4x^2 - 5x + 9 = 0$ then $\frac{1}{\alpha^2} + \frac{1}{\beta^2} = ?$

- (A) $\frac{40}{81}$
- (B) $\frac{-47}{81}$
- (C) $\frac{47}{69}$
- (D) None of these



5. $2 + \sqrt{3}$ is one root of the equation $&x^2 + px + q = 0$, then $p = ?, q = ?$

- (A) (1, 4)
- (B) (-4, 1)
- (C) (-1, 4)
- (D) (-1, -4)



6. If area of Rectangle is 6000 mt^2 & perimeter is 340 mt then length of rectangle is

- (A) 50
- (B) 100
- (C) 120
- (D) 140



7. If $x^2 - 2(2 + 3m)x + (2 + 7m) = 0$ & if one root is reciprocal of other then what is the sum of roots?

- (A) 3
- (B) 2
- (C) $\frac{15}{7}$
- (D) $\frac{22}{7}$



8. If $3^{\frac{1}{3}} + 9^{\frac{1}{3}} = x$ find $x^3 - 9x$

- (A) 10
- (B) -12
- (C) 12
- (D) -10



9. Point of intersection of $2x - 5y = 6, x - y = 3$ is

- (A) (2, 2)
- (B) (3, 0)
- (C) (0, 3)
- (D) (3, -3)



10. If the length of rectangle is 5 more than the breadth & its perimeter is 40, find length & breadth [Dec. 2009]

- (A) $L = 15, B = 10$
- (B) $L = 20, L = 15$
- (C) $L = 12.5, B = 7.5$
- (D) None of these



11. $3x^2 - 14x + K = 0$ what is the value of K such that roots are reciprocal of each other

- (A) 3
- (B) $\frac{1}{3}$
- (C) $\frac{14}{3}$
- (D) $-\frac{3}{14}$

[June 2010]



12. If life expectancy (E) is defined as a linear function of time. If is given that in 1980, life expectancy was 70 yrs & in 2000 it was 75 yrs. What would be the life expectancy in 2012?

- (A) 76 years
- (B) 78 years
- (C) 80 years
- (D) Not



13. If $x^2 - 3x + 2 = 0$ then x is

- (A) (1, 2)
- (B) (-2, 1)
- (C) (-1, 2)
- (D) Not



14. $12x^2 + Kx + 5 = 0$ if ratio of roots $\frac{\alpha}{\beta} = \frac{3}{2}$ then k is

- (A) $\sqrt[5]{10}$
- (B) $\sqrt[2]{5}$
- (C) 50
- (D) 100



15. If one root of the Equation $px^2 + qx + r = 0$ is r then other root of the equation will be [Dec. 2011]

- (A) $\frac{1}{q}$
- (B) q
- (C) p
- (D) $\frac{1}{p}$



16. If the ratio of the roots of the equation $4x^2 - 6x + p = 0$ is 1:2 then the value of p is [Dec. 2011]

- (A) 1
- (B) 2
- (C) -1
- (D) 4



17. If p & q are the roots of the Equation $x^2 - bx + c = 0$, then what is the Equation whose roots are $(pq+p+q)$ and $(pq-p-q)$?

- (A) $x^2 - 2cx + c^2 - b^2 = 0$ [Dec. 2011]
- (B) $x^2 - 2cx + b^2 - c^2 = 0$
- (C) $x^2 - 2bx + b^2 - c^2 = 0$
- (D) $x^2 - 2bx + c^2 - b^2 = 0$



18. If x Varies inversely as square of y and given that $y = 2$ for $x = 1$, then the value of x for $y = 6$ will be [Dec. 2011]

- (A) $\frac{4}{9}$
- (B) $\frac{1}{9}$
- (C) $\frac{2}{7}$
- (D) $\frac{5}{12}$



19. If the A.M. between the roots of a quadratic equation is '8' and G.M. is '5' then the equation is

- (A) $x^2 - 25x + 16 = 0$
- (B) $x^2 + 25x - 16 = 0$
- (C) $x^2 - 5x + 8 = 0$
- (D) $x^2 + 5x - 8 = 0$



20. α, β are the roots of the equation $2x^2 + 3x + 7 = 0$. Then the value of $\alpha\beta^{-1} + \beta\alpha^{-1}$ is

- (A) $-\frac{10}{13}$
- (B) $-\frac{14}{19}$
- (C) $-\frac{19}{14}$
- (D) $-\frac{13}{10}$



21. If $|x - 2| + |x - 3| = 7$ then [Dec. 2012]

- (A) 6
- (B) -1
- (C) 6 & -1
- (D) None



22. The quadratic equation $x^2 - 2kx + 16 = 0$ will have equal roots then $k =$

- (A) 4 [Dec. 2012]
- (B) -4
- (C) ± 4
- (D) None of these



23. If α, β are roots of $x^2 + 7x + 11 = 0$ then the equation whose roots as $(\alpha + \beta)^2$ & $(\alpha - \beta)^2$ is [June 2013]

- (A) $x^2 - 49x + 145 = 0$
- (B) $x^2 - 54x + 176 = 0$
- (C) $x^2 - 54x + 245 = 0$
- (D) $x^2 - 35x + 170 = 0$



24. A seller makes an offer of selling certain articles that can be described by the equation $x = 25 - 25y$ where x is price per unit and y denotes that no. of units. The cost price of the article is Rs. 10 per unit. The maximum quantity that can be offered in a single deal to avoid loss is

- (A) 7 [Dec. 2013]
 (B) 5
 (C) 10
 (D) 12



25. Divide 80 into two parts so that their products is maximum, then the numbers are

- (A) 15, 65 [Dec. 2013]
 (B) 25, 55
 (C) 35, 45
 (D) 40, 40



26. If $b^2 - 4ac$ is a perfect square but not equal to zero then the roots of the equation

- (A) Irrational and equal [Dec. 2013]
 (B) Rational and equal
 (C) Rational and unequal
 (D) Imaginary



27. If the equation $kx + 2y = 5$, $3x + y = 1$ has no solution then the value of k is

- (A) 3 [Dec. 2013]
 (B) 6
 (C) 2
 (D) 4



28. If $kx - 4 = (k - 1)x$ which of the following is true [Dec. 2013]

- (A) $x = -5$
 (B) $x = -4$
 (C) $x = -3$
 (D) $x = 4$



29. The roots of equation $y^3 + y^2 - y - 1 = 0$ are [June 2014]

- (A) (1, -1, -1)
 (B) (1, 1, -1)
 (C) (-1, -1, -1)
 (D) (1, 1, 1)



30. If $x + 5y = 33$ and $\frac{x+y}{x-y} = \frac{13}{3}$ then $(x, y) =$

- (A) (8, 5) [Dec. 2014]
 (B) (5, -8)
 (C) (4, -3)
 (D) (5, 7)



31. The age of a person is 8 years more than thrice the age of the sum of his two grandsons who were twins. After 8 years his age will be 10 years more than twice the sum of the ages of his grandsons. Then the age of the person when the twins were born is [June 2015]

- (A) 75 years
 (B) 77 years
 (C) 73 years
 (D) 80 years



32. Roots of the cubic equation $x^2 - 7x + 6 = 0$ are _____ [June 2015]

- (A) (6, -1)
 (B) (-6, 1)
 (C) (1, 6)
 (D) (-1, -6)



33. In a school number of students in each section is 36. If 12 new students are added, then the number of sections are increased by 4, and the number of students in each section becomes 30. The original number of sections at first is [June 2015]

- (A) 20
 (B) 18
 (C) 22
 (D) 16



34. A person on a tour has Rs. 9600 for his expenses. But the tour was extended for another 16 days, so he has to cut down his daily expenses by Rs. 20. The original duration of the tour had been?

- (A) 80 [June 2015]
 (B) 96
 (C) 100
 (D) 120



35. If α, β be the roots of a quadratic equation if $\alpha + \beta = -2, \alpha\beta = -3$. Find quadratic equation [Dec. 2015]

- (A) $x^2 - 2x - 3 = 0$
- (B) $x^2 - 2x + 3 = 0$
- (C) $x^2 + 2x + 3 = 0$
- (D) $x^2 + 2x - 3 = 0$



36. Value of k for which roots are equal of given equation $4x^2 - 12x + k = 0$ are equal [Dec. 2015]

- (A) 8
- (B) 9
- (C) 10
- (D) 12



37. The value of $\frac{x^2 - (y-x)^2}{(x+z)^2 - y^2} + \frac{y^2 - (x-z)^2}{(x+y)^2 - z^2} + \frac{z^2 - (x-y)^2}{(y+z)^2 - x^2}$

- (A) 0
- (B) 1
- (C) $\frac{1}{2}$
- (D) -1



38. If difference between the roots of the equation $x^2 - kx + 8 = 0$ is 4 then the value of K is [June 2016]

- (A) $\pm 2\sqrt{3}$
- (B) $\pm 3\sqrt{2}$
- (C) $\pm 4\sqrt{2}$
- (D) $\pm 4\sqrt{3}$



39. Particular company produces some articles on a day. The cost of production per article is Rs. 2 more than thrice the number of articles and the total cost of production is Rs. 800 on a day then the number of articles is

- (A) 15
- (B) 16
- (C) 20
- (D) 22



40. One root of the equation: $x^2 - 2(5+m)x + 3(7+m) = 0$ is reciprocal of the other. Find the value of m.

- (A) $-\frac{20}{3}$
- (B) 7
- (C) $\frac{1}{7}$
- (D) $-\frac{1}{7}$

[June 2009]



41. Positive value of 'k' for which the roots of equation $12x^2 + kx + 5 = 0$ are in ratio 3:2, is:

- (A) $\frac{5}{12}$
- (B) $\frac{12}{5}$
- (C) $\frac{5\sqrt{10}}{2}$
- (D) $5\sqrt{10}$

[Dec. 2010]



42. If one root of the equation $x^2 - 3x + k = 0$ is 2, then value of k will be: [Dec. 2010]

- (A) -10
- (B) 0
- (C) 2
- (D) 10



43. If one of the roots of the equation $x^2 + px + a = 0$ is $\sqrt{3} + 2$, then the value of 'p' and 'a' is: [June 2012]

- (A) -4, -1
- (B) 4, -1
- (C) -4, 1
- (D) 4, 1



44. Roots of equation $2x^2 + 3x + 7 = 0$ and α and β . The value of $\alpha\beta^{-1} + \beta\alpha^{-1}$ is

- (A) 2
- (B) $\frac{3}{7}$
- (C) $\frac{7}{2}$
- (D) $-\frac{19}{14}$

[Dec. 2012]



45. If α and β be the roots of the quadratic equation $2x^2 - 4x = 1$, the value of $\frac{\alpha^2}{\beta} + \frac{\beta^2}{\alpha}$ is _____. [June 2015]

- (A) -11
- (B) 22
- (C) -22
- (D) 11



46. Let E_1 and E_2 are two linear equations in two variables x and y . $(0, 1)$ is a solution of both equations E_1 and E_2 . $(2, -1)$ is a solution of equation E_1 only and $(-2, -1)$ is solution of E_2 only then E_1 and E_2 are _____. [June 2016]

- (A) $x = 0, y = 1$
- (B) $2x - y = -1, 4x + y = 1$
- (C) $x + y = 1, x - y = -1$
- (D) $x + 2y = 2, x + y = 1$



47. If $2^{x+y} = 2^{2x-y} = \sqrt{8}$ then the respective values of X and Y are _____. [June 2016]

- (A) $1, \frac{1}{2}$
- (B) $\frac{1}{2}, 1$
- (C) $\frac{1}{2}, \frac{1}{2}$
- (D) None of these



48. If the sides of an equilateral triangle are shortened by 3 units, 4 units and 5 units respectively and a right triangle is formed, then the side of and equilateral triangle is: [June 2017]

- (A) 6 units
- (B) 7 units
- (C) 8 units
- (D) 10 units



49. If α, β are the roots of the equation $x^2 + x + 5 = 0$ then $\frac{\alpha^2}{\beta} + \frac{\beta^2}{\alpha}$ is equal to

- (A) $\frac{16}{5}$
- (B) 2
- (C) 3
- (D) $\frac{14}{5}$

[June 2017]



50. If $\frac{3}{x+y} + \frac{2}{x-y} = -1$ and $\frac{1}{x+y} - \frac{1}{x-y} = \frac{4}{3}$ then (x, y) is: [June 2017]

- (A) $(2, 1)$
- (B) $(1, 2)$
- (C) $(-1, 2)$
- (D) $(-2, 1)$



51. The roots of the cubic equation $x^3 + 7x^2 - 21x - 27 = 0$ are [Dec. 2017]

- (A) -1, 3, 9
- (B) 1, -3, 9
- (C) -1, 3, -9
- (D) -1, -3, 9



52. The difference between the roots of the equation $x^2 - 7x - 9 = 0$ is: [Dec. 2017]

- (A) 7
- (B) $\sqrt{85}$
- (C) 9
- (D) $2\sqrt{85}$



53. If the sum of two numbers is 13 and the sum of their squares is 85 then the numbers will be: [Dec. 2017]

- (A) 3, 10
- (B) 5, 8
- (C) 4, 9
- (D) 6, 7



54. If $u^{5x} = v^{5y} = w^{5z}$ and $u^2 = VW$, then the value of $xy + xz - 2yz$ will be: [Dec. 2017]

- (A) 5
- (B) 2
- (C) 1
- (D) 0



55. If $\alpha + \beta = -2$ and $\alpha\beta = -3$, then α, β are the roots of the equation, which is:

- (A) $x^2 - 2x - 3 = 0$ [May 2018]
- (B) $x^2 + 2x - 3 = 0$
- (C) $x^2 + 2x + 3 = 0$
- (D) $x^2 - 2x + 3 = 0$



56. If $2^{x+y} = 2^{2x-y} = \sqrt{8}$, then the respective values of x and y are ____ [May 2018]

- (A) $1, \frac{1}{2}$
- (B) $\frac{1}{2}, 1$
- (C) $\frac{1}{2}, \frac{1}{2}$
- (D) None of these



57. If $\frac{3}{x+y} + \frac{2}{x-y} = -1$ and $\frac{1}{x+y} - \frac{1}{x-y} = \frac{4}{3}$ then (x, y) is: [May 2018]

- (A) (2, 1)
- (B) (1, 2)
- (C) (-1, 2)
- (D) (-2, 1)



58. If α, β are the roots of the equation $x^2 + x + 5 = 0$ then $\frac{\alpha^2}{\beta} + \frac{\beta^2}{\alpha}$ is equal to

- (A) $\frac{16}{5}$ [May 2018]
- (B) 2
- (C) 3
- (D) $\frac{14}{5}$



59. Let α and β be the roots of $x^2 + 7x + 12 = 0$. Then the value of $\left(\frac{\alpha^2}{\beta} + \frac{\beta^2}{\alpha}\right)$ will be:

[Nov. 2018]

- (A) $\frac{7}{12} + \frac{12}{7}$
- (B) $\frac{49}{144} + \frac{144}{49}$
- (C) $-\frac{91}{12}$
- (D) None of the above



60. When two roots of quadratic equation are $\alpha, \frac{1}{\alpha}$ then what will be the quadratic equation: [Nov. 2018]

- (A) $\alpha x^2 - (\alpha^2 + 1)x + \alpha = 0$
- (B) $\alpha x^2 - \alpha^2 x + 1 = 0$
- (C) $\alpha x^2 - (\alpha^2 + 1)x + 1 = 0$
- (D) None of these



61. A number consists of two digits such that the digit in one's place is thrice the digit in ten's place. If 36 be added then the digits are reversed. Find the number ____.

[June 2019]

- (A) 62
- (B) 26
- (C) 39
- (D) None of these



62. Find the condition that one roots is double the other of $ax^2 + bx + c = 0$

- (A) $2b^2 = 3ac$ [June 2019]
- (B) $b^2 = 3ac$
- (C) $2b^2 = 9ac$
- (D) $2b^2 > 9ac$



63. Roots of the equation $x^3 + 9x^2 - x - 9 = 0$.

[Nov. 2019]

- (A) 1, 2, 3
- (B) 1, -1, -9
- (C) 2, 3, -9
- (D) 1, 3, 9



64. $\frac{2x+5}{10} + \frac{3x+10}{15} = 5$ [Nov. 2019]

- (A) 10.58
- (B) 9.58
- (C) 9.5
- (D) None



65. Find value of $x^2 - 10x + 1$ if $x = \frac{1}{5-2\sqrt{6}}$ [Nov. 2019]

- (A) 25
- (B) 1
- (C) 0
- (D) 49



66. Find the value of K in $3x^2 - 2kx + 5 = 0$ if $x = 2$

- (A) $\frac{17}{4}$
- (B) $-\frac{7}{14}$
- (C) $\frac{4}{17}$
- (D) $-\frac{4}{17}$

[Nov. 2019]



67. The rational root of the equation $2p^3 - p^2 - 4p + 2 = 0$ is: [Nov. 2020]

- (A) 2
- (B) -2
- (C) $\frac{1}{2}$
- (D) $-\frac{1}{2}$



68. If $2x^2 - (a+6)2x + 12a - 0$, then the roots are: [Nov. 2020]

- (A) 6 and a
- (B) 4 and a^2
- (C) 3 and 2a
- (D) 6 and 3a



69. Solving equation $m + \sqrt{m} = \frac{6}{25}$, the value of m works out to: [Nov. 2020]

- (A) $\frac{1}{25}$
- (B) $\frac{2}{25}$
- (C) $\frac{3}{25}$
- (D) 1



70. The value of P for which the difference between the root of equation $x^2 + px + 8 = 0$ is 2 is [Jan. 2021]

- (A) ± 2
- (B) ± 4
- (C) ± 6
- (D) ± 8



71. If the quadratic equation $x^2 + px + q = 0$ and $x^2 + qx + p = 0$ have common root then $p + q = ?$ [Jan. 2021]

- (A) 0
- (B) 1
- (C) -1
- (D) 2



72. The harmonic mean of the roots of the equation $(5 + \sqrt{2})x^2 - (4 + \sqrt{5})x + 8 + 2\sqrt{5} = 0$ is [Jan. 2021]

- (A) 2
- (B) 4
- (C) 6
- (D) 8



73. If α and β are the roots of the equation $2x^2 + 5x + k = 0$, and $4(\alpha^2 + \beta^2 + \alpha\beta) = 23$, then which of the following is true?

- (A) $k^2 + 3k - 2 = 0$ [July 2021]
- (B) $k^2 - 2k + 3 = 0$
- (C) $k^2 - 2k - 3 = 0$
- (D) $k^2 - 3k + 2 = 0$



COMPILATION OF PAST YEAR QUESTIONS

74. The value of 'k' is _____, if 2 is one of the root of the following cubic equation:
 $x^3 - (k+1)x + k = 0$. [July 2021]

- (A) 2
- (B) 6
- (C) 1
- (D) 4



75. The cost of 2 oranges and 3 apples is Rs. 28. If the cost of an apple is doubled then the cost of 3 oranges and 5 apples is Rs. 75. The original cost of 7 oranges and 4 apples (in Rs.) is: [July 2021]

- (A) 59
- (B) 47
- (C) 71
- (D) 63



76. The sum of square of any real positive quantity and its reciprocal is never less than: [July 2021]

- (A) 1
- (B) 2
- (C) 3
- (D) 4



77. If one root is half of the other of a quadratic equation and the difference in roots is a, then the equation is

- (A) $x^2 + ax + 2a^2 = 0$ [Dec.2021]
- (B) $x^2 - 3ax - 2a^2 = 0$

- (C) $x^2 - 3ax + 2a^2 = 0$
- (D) $x^2 + 3ax - 2a^2 = 0$



78. In a multiple choice question paper consisting of 100 questions of 1 mark each, a candidate gets 60% marks. If the candidate attempted all questions and there was a penalty of 0.25 marks for wrong answer, the difference between number of right answers and wrong answers is:

- (A) 32 [Dec. 2021]
- (B) 36
- (C) 40
- (D) 38



79. If the square of a number exceeds twice of the number by 15, then number that satisfies the condition is [Dec. 2021]

- (A) -5
- (B) 3
- (C) 5
- (D) 15



80. Solve $x^3 - 7x + 6 = 0$ [Dec. 2021]

- (A) $x = 6, 7, -4$
- (B) $x = -1, -2, -3$
- (C) $x = 1, 2, -3$
- (D) $x = 2, 4, 6$













ANSWER KEY

1.	C	2.	B	3.	A	4.	B	5.	B
6.	C	7.	D	8.	C	9.	B	10.	C
11.	A	12.	B	13.	A	14.	A	15.	D
16.	B	17.	A	18.	B	19.	A	20.	C
21.	C	22.	C	23.	C	24.	A	25.	D
26.	C	27.	B	28.	D	29.	A	30.	A
31.	C	32.	C	33.	B	34.	A	35.	D
36.	B	37.	B	38.	D	39.	B	40.	A
41.	D	42.	C	43.	C	44.	D	45.	C
46.	C	47.	A	48.	C	49.	D	50.	B
51.	C	52.	B	53.	D	54.	D	55.	B
56.	A	57.	B	58.	D	59.	C	60.	A
61.	B	62.	C	63.	B	64.	B	65.	C
66.	A	67.	C	68.	A	69.	A	70.	C
71.	C	72.	B	73.	D	74.	B	75.	A
76.	B	77.	C	78.	B	79.	C	80.	C

COMPILATION OF PAST YEAR QUESTIONS

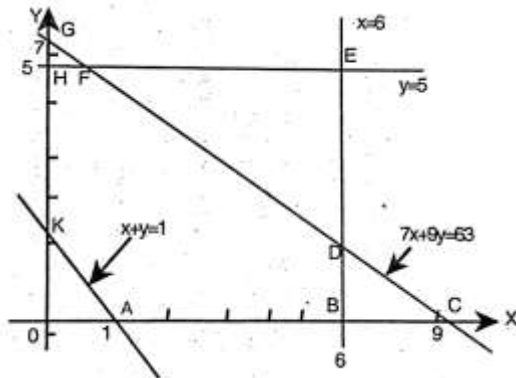
(This is Vidhyoday's unique compilation of past attempts CA-F/CPT questions asked under Maths/Stats section.)

CHAPTER - 3 INEQUALITIES

1. $3x + 2y = 6, 3x - y = 12$ will intersect in which quadrant
(A) 1st
(B) 2nd
(C) 3rd
(D) 4th 
2. If $x > 0$ & $y < 0$ then which quadrant is this?
(A) 1st
(B) 2nd
(C) 3rd
(D) 4th 
3. Graph of a line $x = 15$ is
(A) Line Parallel to x axis
(B) Line Parallel to y axis
(C) Parabola
(D) Circle 
4. What is the solution of $\frac{5-2x}{3} \leq \frac{x}{6} - 5$
(A) $x \geq 5$ [June 2010]
(B) $x \geq 8$
(C) $x \geq 7$
(D) $x \geq 10$ 
5. if one experienced worker manufactures 7 units/day & one inexperienced worker manufactures 5 unit/day. If the employer requires at least 35 unit to be manufactured per day then it can be expressed as.
[Dec. 2010, 11 & 12]
(A) $7x + 5y \geq 35$
(B) $7x + 5y \leq 35$
(C) $7x + 5y > 35$
(D) $7x + 5y < 35$ 
6. Solution space of the inequalities $2x + y \leq 10$ and $x - y \leq 5$:
(i) includes the origin
(ii) includes the point (4, 3)
Which one is correct?
(A) Both (i) and (ii)
(B) Neither (i) nor (ii)
(C) Only (i)
(D) Only (ii) 
7. The range of real value of 'x' satisfying the inequality $3x - 2 > 7$ and $4x - 13 > 15$ is
(A) $x > 3$ [June 2012]
(B) $x > 7$
(C) $x < 7$
(D) $x < 3$ 
8. The union forbids the employer to employ less than 2 experienced persons (x) to each fresh person (y). This situation can be expressed as [June 2013]
(A) $x \leq 2y$
(B) $x \geq 2y$
(C) $x > 2y$
(D) $x < 2y$ 
9. The solution of the inequality $8x + 6 < 12x + 14$ is [Dec. 2013]
(A) (-2, 2)
(B) (-2, 0)
(C) (2, ∞)
(D) (-2, ∞) 
10. The common region represented by the inequalities $2x + y \geq 8, x + y \geq 12, 3x + 2y \leq 34$ is
(A) Unbounded [June 2015]
(B) In feasible
(C) Feasible and bounded
(D) Feasible and unbounded 

COMPILATION OF PAST YEAR QUESTIONS

11. The graph of linear inequalities $7x+9y \leq 63$, $x+y \geq 1$, $0 \leq x \leq 6$ and

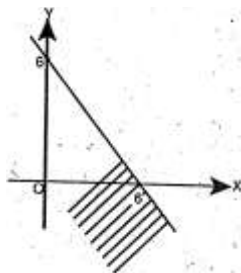


Common region of the inequalities is:

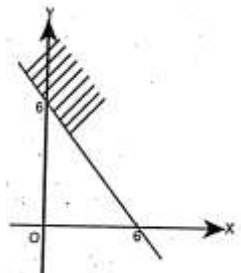
- (A) BCDB and DEFD [June 2014]
- (B) Unbounded
- (C) HFGH
- (D) ABDFHKA



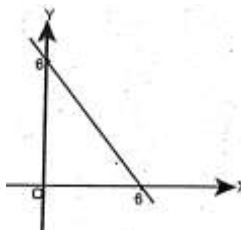
12. The graph to express the inequality $x+y \leq 6$ is: [Dec. 2014]



(A)



(B)



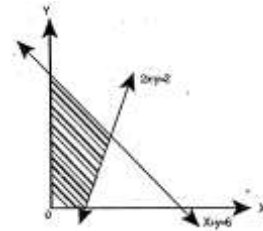
(C)

(D) None of these



13. The common shaded region in the graph represents the linear inequalities as:

[Dec. 2015]



- (A) $x+y \geq 6$
 $2x-y-2 \geq 0$
 $x,y \geq 0$
 $x+y \geq 6$
- (B) $2x-y-2 \leq 0$
 $x,y \geq 0$
 $x+y \leq 6$
- (C) $2x-y-2 \leq 0$
 $x,y \geq 0$
 $x+y \leq 6$
- (D) $2x-y-2 \geq 0$
 $x,y \geq 0$



14. A dietician wishes to mix together two kinds of food so that the vitamins content of the mixture is atleast 9 units of vitamin A, 7 units of vitamin B, 10 units of vitamin C, 12 units of vitamin D. The vitamin content per kg. of each food is shown in table. Assuming 'x' units of food I is to be mixed with 'y' units of food II the situation can be expressed as:

	A	B	C	D
Food I	2	1	1	2
Food II	1	1	2	3

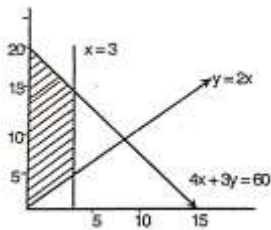
- (A) $2x+y \leq 9$
 $x+y \leq 7$
 $x+2y \leq 10$
 $2x+3y \leq 12$
 $x > 0, y > 0$
 $2x+y \geq 30$
 $x+y \leq 7$
- (B) $x+2y \geq 10$
 $2x+3y \geq 12$
 $x > 0, y > 0$

[June 2017]

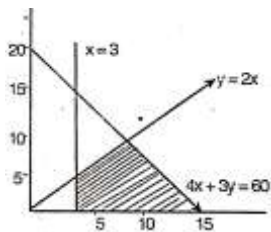
- $2x + y \geq 9$
 $x + y \geq 7$
 (C) $x + 2y \leq 10$
 $x + 3y \leq 12$
 $x \geq 0, y > 0$
 $2x + y \geq 9$
 $x + y \geq 7$
 (D) $x + 2y \geq 10$
 $2x + 3y \geq 12$
 $x \geq 0, y \geq 0$



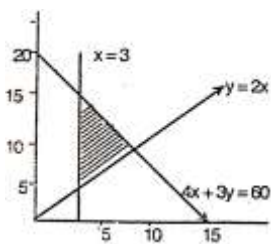
15. The common regions by the inequalities $4x + 3y \leq 60$; $y \geq 2x$; $x \geq 3$, $x \geq 0$ and $y \geq 0$ is [June 2017]



(A)



(B)



(C)

(D) None of these



16. The linear relationship between two variables in an inequality: [May 2018]

- (A) $ax + by \leq c$
 (B) $ax \cdot by \leq c$
 (C) $axy + by \leq c$
 (D) $ax + bxy \leq c$



17. An employer recruits experienced (x) and fresh workmen (y) for his under the condition that he cannot employ more than 11 people. x and y can related by the inequality. [June 2019]

- (A) $x + y \neq 11$
 (B) $x + y \leq 11, x \geq 0, y \geq 0$
 (C) $x + y \geq 11, x \geq 0, y \geq 0$
 (D) None of these



18. The solution set of the in equations $x + 2 > 0$ and $2x - 6 > 0$ is [June 2019]

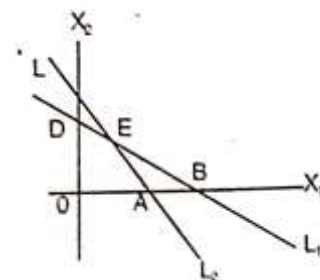
- (A) $(-2, \infty)$
 (B) $(3, \infty)$
 (C) $(-\infty, -2)$
 (D) $(-\infty, -3)$



19. The common region represented by the following in equalities

$$L_1 = X_1 + X_2 < 4; L_2 = 2X_1 + X_2 > 6$$

[June 2019]



- (A) OABC
 (B) Outside of OAB
 (C) $\triangle BCE$
 (D) $\triangle ABE$



20. $6x + y \geq 18, x + 4y \geq 12, 2x + y \geq 10$

On solving the inequalities; we get

[Nov. 2019]

- (A) $(0, 18), (12, 0), (4, 2), \& (7, 6)$
 (B) $(3, 0), (0, 3), (4, 2) \& (7, 6)$
 (C) $(5, 0), (0, 10), (4, 2) \& (7, 6)$
 (D) $(0,18),(12,0),(4,2),(0,0)\text{and}(7,6)$



COMPILATION OF PAST YEAR QUESTIONS

21. Solve for x of the Inequalities $2 \leq \frac{3x-2}{5} \leq 4$
where x - N [Nov. 2020]

- (A) {5, 6, 7}
- (B) {3, 4, 5, 6}
- (C) {4, 5, 6}
- (D) None



22. The common region in the graph of the inequalities $x + y \leq 4, x - y \leq 4, x \geq 2$ is

- (A) Equilateral triangle [Jan. 2021]
- (B) Isosceles triangle
- (C) Quadrilateral
- (D) Square

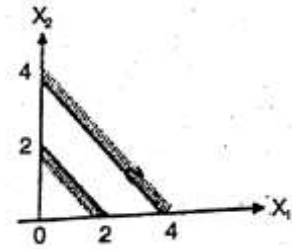


23. XYZ Company has a policy for its recruitment as: it should not recruit more than eight men (x) to three women (y). How can this fact be expressed in inequality? [Dec. 2021]

- (A) $3y \geq 8x$
- (B) $3y \leq \frac{x}{8}$
- (C) $8y \geq 3x$
- (D) $8y \leq 3x$



24. The region indicated by the shading in the graph is expressed by the inequalities [Dec. 2021]



- (A) $x_1 + x_2 \leq 2;$
 $x_1 + x_2 \geq 4;$
 $x_1 \geq 0, x_2 \geq 0$
- (B) $x_1 + x_2 \leq 2;$
 $x_2 x_1 + x_2 \leq 4;$
 $x_1 \geq 0, x_2 \geq 0$
- (C) $x_1 + x_2 \geq 2;$
 $x_1 + x_2 \geq 4;$
 $x_1 \geq 0, x_2 \geq 0$
- (D) $x_1 + x_2 \leq 2;$
 $x_1 + x_2 \geq 4;$
 $x_1 \geq 0, x_2 \geq 0$



ANSWER KEY












1.	D	2.	D	3.	B	4.	B	5.	A
6.	C	7.	B	8.	B	9.	D	10.	C
11.	D	12.	A	13.	C	14.	D	15.	C
16.	A	17.	A	18.	B	19.	D	20.	A
21.	D	22.	B	23.	C	24.	A		

COMPILATION OF PAST YEAR QUESTIONS

(This is Vidhyoday's unique compilation of past attempts CA-F/CPT questions asked under Maths/Stats section.)

CHAPTER - 4

SIMPLE AND COMPOUND INTEREST INCLUDING ANNUITY APPLICATIONS

1. If an amount doubles at 5% p.a. C.I. then find time period? [June 2009]
- (A) 16 years
(B) 14 years
(C) 20 years
(D) 18 years
- 
2. If effective interest is 7% then what is compound interest p.a. compounded semiannually.
- (A) 7.109%
(B) 7.243%
(C) 7.122%
(D) 7.07%
- 
3. Find principal if simple interest is 340 Rs. less than the principal at 4% p.a. for 8 years.
- (A) 600
(B) 500
(C) 800
(D) 1000
- 
4. If in 4 yrs, the price doubles then rate of compound interest is
- (A) 18%
(B) 17.5%
(C) 18.2%
(D) 18.9%
- 
5. What is effective interest rate if rate of compound interest is 10% p.a. compounded 3 times a year?
- (A) 10.24%
(B) 10.34%
(C) 10.55%
(D) 10.78%
- 
6. If an amount double in 5 yrs, Compound interest, then in how many years it will become 8 times.
- (A) 10 years
(B) 14 years
(C) 15 years
(D) 20 years
- 
7. If $P = 4000$ Rs., $A = 4560$, $T = 2$ yrs. Then $P = 5000$ Rs., $T = 4$ yrs, $A = ?$
- (A) 6400
(B) 7200
(C) 7400
(D) 8000
- 
8. If the difference between simple & compound interest at 10% p.a. compounded annually for 2 years is 11 Rs. then principal is
- (A) 1000
(B) 1100
(C) 1200
(D) 1500
- 
9. If a sum becomes Rs. 2688 in 3 yrs & 2784 Rs. in 4 yrs then rate of SI is [June 2009]
- (A) 5%
(B) 8%
(C) 6%
(D) 4%
- 
10. If the sum doubles itself in 15 yrs at compound interest then in how many years it will become 8 times
- (A) 30 years
(B) 60 years
(C) 50 years
(D) 45 years
- 
11. Compound interest on certain sum @ 5% for 1 yr is Rs. 25 then find out simple interest of 2 yrs at the same rate & sum. [Dec. 2009]
- (A) 50.25
(B) 50
(C) 51
(D) 51.5
- 

COMPILATION OF PAST YEAR QUESTIONS

12. In how many years will Rs. 1000 become Rs. 1331 at 10% p.a. compounded annually

- (A) 2.5 years [June 2009, Dec. 2009]
 (B) 3 years
 (C) 4 years
 (D) 5 years



13. If 1000 Rs. is deposited at the end of each month @ 6% p.a. paid annually. Find the amount that will be received at the end of 10th Installment

- (A) 10526
 (B) 10104
 (C) 10228
 (D) 10714



14. What is the present value of Annuity in which a sum of Rs. 1000 is deposited every year for 10 yrs, rate of interest being 6% p.a.

- (A) 6984
 (B) 7355
 (C) 7927
 (D) 7524



15. At what rate of CI will the sum of money becomes 16 times in 4 yrs. [June 2010]

- (A) 75%
 (B) 50%
 (C) 150%
 (D) 100%



16. Simple interest on a sum for 2 yrs @ 12% is 3600 Rs. What is the Compound Interest on the same sum for same time & same rate

- (A) 3750 [June 2010]
 (B) 3600
 (C) 3816
 (D) 3590



17. If the original value of Machine is Rs. 1,25,000. Find the scrap value after 20 yrs if depreciation is at the rate of 10%. Given $(0.90)^{20} = 0.12157665458$

- (A) 15197 [Dec. 2010]
 (B) 17403
 (C) 16521
 (D) 15649



18. If SI on principal P is calculated @ 10% for 2 yrs & CI on principal Q is calculated @ 5% for same time then what is relation between P & Q. if interest in both case is same

- (A) $P = \frac{80}{81}Q$ [Dec. 2010]
 (B) $P = \frac{41}{80}Q$
 (C) $Q = \frac{80}{81}P$
 (D) $Q = \frac{41}{80}P$



19. Bank A gives 9.25%, annual interest while gives Bank B gives 9.00%, Semi Annual interest. Which bank is better?

- (A) A is better
 (B) B is better
 (C) Both are equally good
 (D) Indeterminate



20. Calculate effective interest rate if rate of compound interest is 6% p.a. compounded half yearly. [Dec. 2010]

- (A) 6.16%
 (B) 6.03%
 (C) 6.09%
 (D) 6.21%



21. If 5000 Rs. is deposited every year at 9% p.a. for 20 yrs. Find the future value.

- (A) 240305
 (B) 260763
 (C) 255800
 (D) 251314



22. If the difference of S.I. and C.I. is 72 at 12% for 2 years. Calculate the amount.

- (A) 6000 [June 2011]
 (B) 5500
 (C) 5000
 (D) 7000



23. If a simple interest on a sum of money at 6% p.a. for 7 years is equal to twice of simple interest on another sum for 9 years at 5% p.a. The ratio will be:

- (A) 15:14 [June 2011]
 (B) 15:7
 (C) 7:8
 (D) 14:15



COMPILATION OF PAST YEAR QUESTIONS

24. By mistake a clerk, calculated the simple interest on principal for 5 months at 6.5% p.a. instead of 6 months at 5.5% p.a. If the error in calculation was Rs. 25.40. The original sum of principal was ____

- (A) 50400 [June 2011]
 (B) 48600
 (C) 60960
 (D) 71350



25. If the simple interest on Rs. 1,400 for 3 years is less than the simple interest on Rs. 1,800 for the same period by Rs. 80, then the rate of interest is [Dec. 2011]

- (A) $5\frac{2}{3}\%$
 (B) $6\frac{1}{3}\%$
 (C) $6\frac{2}{3}\%$
 (D) $7\frac{1}{3}\%$



26. Nominal rate of interest is 9.9% p.a. if interest is compound monthly, what will be the effective rate of interest $\left(\frac{4000}{4033}\right)^{12}$ given = 1.1036 (approx) [Dec. 2011]

- (A) 10.25%
 (B) 10.45%
 (C) 10.55%
 (D) 10.36%



27. The S.I. on Rs. 2000 for 5 months at the rate of 16% per annum is [June 2012]

- (A) 150
 (B) 125
 (C) 140
 (D) 133.33



28. The S.I. on a sum of money is $\frac{4}{9}$ of the principal and the no. of years is equal to the rate of interest per annum. Find the rate of interest per annum. [June 2012]

- (A) $5\frac{2}{3}\%$
 (B) $6\frac{1}{3}\%$
 (C) $6\frac{2}{3}\%$
 (D) $7\frac{1}{3}\%$



29. How much investment is required to yield an annual income of Rs. 420 at the rate of 7% p.a. by simple interest?

- (A) 6000 [Dec. 2012]
 (B) 3000
 (C) 4500
 (D) 7000



30. Principal of 90.50 with simple rate of interest 7.5% p.a. was wrongly taken 5.7% and the difference came as Rs. 9.774. Find the time period? [Dec. 2012]

- (A) 5 years
 (B) 6 years
 (C) 7 years
 (D) 10 years



31. The difference between CI and SI on a certain sum of money for 2 years at 4% per annum is Rs. 1. The sum is

- (A) 650 [June 2013]
 (B) 625
 (C) 700
 (D) 720



32. If the sum of money when compounded annually become 1140 in 2 years and 1710 in 3 years at rate of interest

- (A) 30% [June 2013]
 (B) 40%
 (C) 45%
 (D) 50%



33. What principle will amount to Rs. 370 in 6 years at 8% p.a. at simple interest

- (A) 280 [Dec. 2013]
 (B) 250
 (C) 300
 (D) 325



34. The difference between C.I. & S.I. at 7% p.a. for 2 years is Rs. 29.4 then principal is

- (A) 5000 [Dec. 2013]
 (B) 6000
 (C) 6500
 (D) 7000



COMPILATION OF PAST YEAR QUESTIONS

35. In what time will a sum money double itself at 6.25% p.a. simple interest

- (A) 15 years [Dec. 2013]
 (B) 20 years
 (C) 16 years
 (D) 25 years



36. If a sum triples in 15 yrs at Simple rate of interest then the rate of interest per annum will be [June 2014]

- (A) 15%
 (B) 12%
 (C) 13.3%
 (D) 14.5%



37. The Partners A & B together lent Rs. 3903 at 4% p.a. interest compounded annually. After a span of 7 years. A gets the same amount as B gets after 9 years. The share of A in the sum of Rs. 3903/- would have been.

- (A) 1875 [June 2014]
 (B) 2028
 (C) 2130
 (D) 1940



38. How much amount is required to be invested every year as to accumulate Rs. 6,00,000 at the end of 10th year, if interest is compounded annually at 10% rate of interest? [Given : $(1.1)^{10} = 2.59374$]

- (A) 35430 [June 2014]
 (B) 37380
 (C) 37650
 (D) 36144



39. A certain sum of money was invested at S.I. for 3 years. If it has invested at rate 7% higher, then the interest have been Rs. 882 more, then the sum is [Dec. 2014]

- (A) 4400
 (B) 4200
 (C) 4500
 (D) 4000



40. A certain sum of money double itself in 4 years at C.I. In how many years it will become 32 times to itself [Dec. 2014]

- (A) 8 years
 (B) 12 years
 (C) 16 years
 (D) 20 years



41. The future value of an annuity of Rs. 1,000 made annually for 5 years at the rate of interest 14% compound annually is [Dec. 2014, May 2018]

- (A) 6430
 (B) 6570
 (C) 6610
 (D) 6715



42. A sum money will be doubled itself in 8 years at S.I. In how many years the sum will be tripled itself. [June 2015]

- (A) 10 years
 (B) 12 years
 (C) 14 years
 (D) 16 years



43. A sum of 44,000 is divided into 3 parts such that the corresponding interest earned after 2 years, 3 years and 6 years may be equal at the rate of simple interest rate 6% p.a., 8% p.a., & 6% p.a. respectively. Then the smallest part of the sum will be.

- (A) 9000 [June 2015]
 (B) 8000
 (C) 6000
 (D) 10000



44. Suppose your mom decides to gift you Rs. 10,000 every year starting from today for the next sixteen years. You deposit this amount in a bank as and when you receive and get 8.5% per annum interest rate compound annually. What is the present value of this money : Give that $P(15, 0.085) = 8.304236$ [Dec. 2015]

- (A) 93042
 (B) 73042
 (C) 83042
 (D) 83542



COMPILATION OF PAST YEAR QUESTIONS

45. Number of years a sum becomes 4 times itself at 12% p.a. simple interest is

- (A) 20 years [Dec. 2015]
- (B) 25 years
- (C) 30 years
- (D) 40 years



46. On a certain sum rate of interest @ 10% p.a. SI is Rs. 90 & term is 2 year, Find compound interest for the same. [Dec. 2015]

- (A) 90
- (B) 92
- (C) 94.5
- (D) 98



47. If an amount is kept at Simple Interest, it earns Rs. 600 in first 2 years but when kept at Compound Interest it earns at interest of Rs. 660 for the same period; then the rate of interest and principle amount respectively are. [June 2016, May 2018]

- (A) 20%, 1500
- (B) 20%, 3000
- (C) 15%, 3000
- (D) 15%, 1500



48. The difference between the simple interest and compound interest on a certain sum of money invested for 2 years at 5% p.a. is Rs. 30. Then the sum. [Dec. 2016]

- (A) 15000
- (B) 12000
- (C) 10000
- (D) 20000



49. If a person lends Rs. 6000 for 4 years and Rs. 8,000 for 3 years at S.I. The total interest earned is Rs. 2400 then the rate of interest is. [Dec. 2016]

- (A) 8%
- (B) 10%
- (C) 6%
- (D) 5%



50. A sum of money amount to Rs. 7803 for one year at the rate of 4% compounded semiannually then the sum invested is

- (A) 7000 [Dec. 2016]
- (B) 7200
- (C) 7500
- (D) 7600



51. The time by which a sum of money is 8 times of itself if it doubles itself in 15 years interest compounded annually.

- (A) 42 years [June 2009]
- (B) 43 years
- (C) 45 years
- (D) 46 years



52. Paul borrows Rs. 20,000 on condition to repay it with compound interest at 5% p.a. in annual instalment of Rs. 2,000 each. Find the number of years in which the debt would be paid off. [June 2009]

- (A) 10 years
- (B) 12 years
- (C) 14 years
- (D) 15 years



53. Find the present value of an annuity of Rs. 1,000 payable at the end of each year for 10 years. If rate of interest is 6% compounding per annum (given $(1.06)^{-10} = 0.5584$):

- (A) Rs. 7,360 [June 2010]
- (B) Rs. 8,360
- (C) Rs. 12,000
- (D) None of these



54. The future value of an annuity of Rs. 5,000 is made annually for 8 years at interest rate of 9% compounded annually [Given that $(1.09)^8 = 1.99256$] is _____

- (A) Rs. 55,142.22 [Dec. 2010]
- (B) Rs. 65,142.22
- (C) Rs. 65,532.22
- (D) Rs. 57,425.22



COMPILATION OF PAST YEAR QUESTIONS

55. Mr. X bought an electronic item for Rs. 1,000. What would be the future value of the same item after 2 years, if the value is compounded semi annually at 22% per annum? [June 2016]

- (A) Rs. 1,488.40
- (B) Rs. 1,518.07
- (C) Rs. 2,008.07
- (D) Rs. 2,200.00



56. The future value of an annuity of Rs. 1,500 made annually for five years at interest rate 10% compounded annually is (Given that $(1.1)^5 = 1.61051$): [June 2017]

- (A) Rs. 9,517.56
- (B) Rs. 9,157.65
- (C) Rs. 9,715.56
- (D) Rs. 9,175.65



57. The difference between the Compound interest and Simple interest at 10% per annum for 4 years on Rs. 10,000 is Rs. _____. [June 2017]

- (A) 650
- (B) 640
- (C) 641
- (D) 600



58. How much amount is required to be invested every year as to accumulate Rs. 7,96,870 at the end of 10 years, if interest compounded annually at 10% given that $A(10, 0.1) = 15.9374$? [June 2017]

- (A) Rs. 40,000
- (B) Rs. 4,50,000
- (C) Rs. 48,000
- (D) Rs. 50,000



59. If compound interest on any sum at the rate of 5% for two years is Rs. 512.50 then the sum would be: [Dec. 2017]

- (A) Rs. 3,000
- (B) Rs. 4,000
- (C) Rs. 5,000
- (D) Rs. 6,000



60. The effective rate of interest equivalent to the nominal rate of 7% converted monthly:

- (A) 7.26% [Dec. 2017]
- (B) 7.22%
- (C) 7.02%
- (D) 7.20%



61. Mr. X invest Rs. 10,000 every year starting from today for next: 10 years suppose interest rate is 8% per annual compounded annually. Calculate future value of the annuity. [May 2018]

- (A) Rs. 1,56,454.88
- (B) Rs. 1,56,554.88
- (C) Rs. 1,44,865.625
- (D) None of these



62. How much amount is required to be invested every year so as to accumulate Rs. 3,00,000 at the end of 10 years, if interest is compounded annually at 10%?

- (A) Rs. 18,823.65 [May 2018]
- (B) Rs. 1,56,554.88
- (C) Rs. 1,44,865.625
- (D) None of these



63. If Rs. 1,000 be invested at interest rate of 5% and the interest be added to the principal every 10 years, than the number of years in which it will amount to Rs. 2,000 is: [May 2018]

- (A) $16\frac{2}{3}$ years
- (B) $6\frac{1}{4}$ years
- (C) 16 years
- (D) $6\frac{2}{3}$ years



64. A person borrows Rs. 5,000 for 2 years at 4% per annual simple interest. He immediately lends to another person at $6\frac{1}{4}$ %. Per annual for 2 years find his gain in the transaction for year: [May 2018]

- (A) Rs. 112.50
- (B) Rs. 225
- (C) Rs. 125



COMPILATION OF PAST YEAR QUESTIONS

- (D) Rs. 107.50
65. If an amount is kept at S.I. it earns an interest of Rs. 600 in first two years but when kept at compound interest it earns an interest of Rs. 660 for the same period, then the rate of interest and principal amount respectively are: [May 2018]
- (A) 20%, Rs. 1,200
(B) 20%, Rs. 1,500
(C) 10%, Rs. 1,200
(D) 10%, Rs. 1,500
66. If Rs. 10,000 is invested at 8% per year compounded quarterly, then the value of the investment after 2 years is: [Nov. 2018]
- (A) Rs. 11,716.59
(B) Rs. 10,716.59
(C) Rs. 117.1659
(D) None of the above
67. A bank pays 10% rate of interest compounded annually. A sum of Rs. 400 is deposited in the bank. The amount at the end of 1 year will be [Nov. 2018]
- (A) Rs. 440
(B) Rs. 439
(C) Rs. 441
(D) Rs. 442
68. The certain sum of money became Rs. 692/- in 2 yrs and Rs. 800/- in 5 yrs then the principle amount is _____ [June 2019]
- (A) Rs. 520
(B) Rs. 620
(C) Rs. 720
(D) Rs. 820
69. A sum of money amount to Rs. 6,200 in 2 years and Rs. 7,400 in 3 years as per S.I. then the principal is [June 2019]
- (A) Rs. 3,000
(B) Rs. 3,500
(C) Rs. 3,800
(D) None

70. A sum was invested for 3 years as per C.I. and the rate of interest for first year is 9%, 2nd year is 6% and 3rd year is 3% p.a. respectively. Find the sum if the amount in three years is Rs. 550? [June 2019]
- (A) Rs. 250
(B) Rs. 300
(C) Rs. 462.16
(D) Rs. 350
71. $P = \text{Rs. } 5,000$ $R = 15\%$ $T = 4^{1/2}$ using $I = \frac{PTR}{100}$ then I will be [June 2019]
- (A) Rs. 3,375
(B) Rs. 3,300
(C) Rs. 3,735
(D) None
72. The effective rate of interest does not depend upon [June 2019]
- (A) Amount of Principal
(B) Amount of Interest
(C) Number of Conversion Periods
(D) None of these
73. A person wants to lease out a machine costing Rs. 5,00,000 for a 10 year period. It has fixed a rental of Rs. 51,272 per annum payable annually starting from the end of first year. Suppose rate of interest is 10% per annum compounded annually on which money can be invested. To whom this agreement is favourable? [June 2019]
- (A) Favour of Lessee
(B) Favour of Lessor
(C) Not for both
(D) Can't be determined
74. Let a person invest a fixed sum at the end of each month in an account paying interest 12% per year compounded monthly. If the future value of this annuity after the 12th payment is Rs. 55,000 then the amount invested every month is? [June 2019]
- (A) Rs. 4,837
(B) Rs. 4,637
(C) Rs. 4,337
(D) Rs. 3,337

COMPILATION OF PAST YEAR QUESTIONS

75. If $P i^2 = \text{Rs. } 96$, and $R = 8\%$ compounded annually then $P =$ [June 2019]

- (A) Rs. 14,000
- (B) Rs. 15,000
- (C) Rs. 16,000
- (D) Rs. 17,000



76. Determine the present value of perpetuity of Rs. 50,000 per month @ rate of interest 12% p.a. is _____ [June 2019]

- (A) Rs. 45,00,000
- (B) Rs. 50,00,000
- (C) Rs. 55,00,000
- (D) Rs. 60,00,000



77. In simple interest if the principal is Rs. 2,000 and the rate and time are the roots of the equation $x^2 - 11x + 30 = 0$ then simple interest is [June 2019]

- (A) Rs. 500
- (B) Rs. 600
- (C) Rs. 700
- (D) Rs. 800



78. A man invests Rs. 12,000 at 10% p.a. and another sum of money at 20% p.a. for one year. The total investment earns at 14% p.a. simple interest the total investment is: [Nov. 2019]

- (A) Rs. 8,000
- (B) Rs. 20,000
- (C) Rs. 14,000
- (D) Rs. 16,000



79. The difference in simple interest of a sum invested of Rs. 1,500 for 3 years is Rs. 18. The difference in their rates is: [Nov. 2019]

- (A) 0.4
- (B) 0.6
- (C) 0.8
- (D) 0.10



80. Find the effective rate of interest on Rs. 10,000 on which interest is payable half yearly at 5% p.a. [Nov. 2019]

- (A) 5.06%
- (B) 4%
- (C) 0.4%
- (D) 3%



81. Find the effective rate of interest at 10% p.a. when interest is payable quarterly. [Nov. 2019]

- (A) 10.38%
- (B) 5%
- (C) 5.04%
- (D) 4%



82. What will be the population after 3 years when present population is Rs. 25,000 and population increases at the rate of 3% in I year, at 4% in II year and at 5% in III year? [Nov. 2019]

- (A) Rs. 28,119
- (B) Rs. 29,118
- (C) Rs. 27,000
- (D) Rs. 30,000



83. The value of scooter is Rs. 10,000 find its value after 7 years if rate of depreciation is 10% p.a. [Nov. 2019]

- (A) Rs. 4,782.96
- (B) Rs. 4,278.69
- (C) Rs. 42,079
- (D) Rs. 42,000



84. $SI = 0.125P$ at 10% p.a. Find time. [Nov. 2019]

- (A) 1.25 years
- (B) 25 years
- (C) 0.25 years
- (D) None



85. Scrap value of a machine valued at Rs. 10,00,000, after 10 years within depreciation at 10% p.a.: [Nov. 2019]

- (A) Rs. 3,48,678.44
- (B) Rs. 3,84,679.45
- (C) Rs. 4,00,000
- (D) Rs. 3,00,000



86. The difference between CI and SI for 2 years, is 21. If rate of interest is 5% find principal [Nov. 2019]

- (A) Rs. 8,400
- (B) Rs. 4,800
- (C) Rs. 8,000
- (D) Rs. 8,200



COMPILATION OF PAST YEAR QUESTIONS

87. Present value of a scooter is Rs. 7,290 if its value decreases every year by 10% then its value before 3 years is equal to:

- (A) 10,000 [Nov. 2019]
 (B) 10,500
 (C) 20,000
 (D) 20,500



88. On what sum will the compound interest at 5% per annum for 2 year compounded annually be Rs. 3,280.

- (A) Rs. 32,000 [Nov. 2020]
 (B) Rs. 16,000
 (C) Rs. 48,000
 (D) Rs. 64,000



89. An amount P becomes Rs. 5,100.5 and Rs. 5,203 after second and fourth years respectively at 1% of interest per annum compounded annually. Thus values of P and R are:

- (A) Rs. 4,000 and 1.5 [Nov. 2020]
 (B) Rs. 5,000 and 1
 (C) Rs. 6,000 and 2
 (D) Rs. 5,500 and 3



90. A certain sum invested at 4% per annum compounded semi-annually amounts to Rs. 1,20,000 at the end of one year. Find the sum:

- (A) 1,15,340 [Nov. 2020]
 (B) 1,10,120
 (C) 1,12,812
 (D) 1,13,113



91. Find the future value of annuity of Rs. 1,000 made annually for 7 years at interest rate of 14% compounded annually. Given that $1.14^7 = 2.5023$

- (A) 10,730.7 [Nov. 2020]
 (B) 5,365.35
 (C) 8,756
 (D) 9,892.34



92. Find the present value of Rs. 1,00,000 to be required after 5 years if the interest rate be 9%. Given that $1.09^5 = 1.5386$.

- (A) 78,995.98 [Nov. 2020]
 (B) 64,994.15
 (C) 88,992.43
 (D) 93,902.12



93. A five year annuity due has periodic cash flow of Rs. 100 each year. If the interest rate is 8% the future value of this annuity is given by:

- (A) $(Rs. 100) \times (\text{future value at rate } 8\% \text{ for } 5 \text{ years}) \times (0.08)$
 (B) $(Rs. 100) \times (\text{future value at rate } 8\% \text{ for } 5 \text{ years}) \times (1 - .08)$
 (C) $(Rs. 100) \times (\text{future value at rate } 8\% \text{ for } 5 \text{ years}) \times (1 + 0.08)$
 (D) $(Rs. 100) \times (\text{future value at rate } 8\% \text{ for } 5 \text{ years}) \times \left(\frac{1}{0.08}\right)$ [Nov. 2020]



94. A person decides to invest Rs. 1,25,000 per year for the next five years in an annuity which gives 5% per annum compounded annually. What is the approx. future value? (use $1.05^5 = 1.2762$, if needed)

- (A) 1,59,535 [Nov. 2020]
 (B) 6,90,500
 (C) 5,90,704
 (D) 3,59,535



95. Find the compound interest if an amount of Rs. 50,000 is deposited in a bank for one year at the rate of 8% per annum compounded semi-annually.

- (A) Rs. 3,080 [Nov. 2020]
 (B) Rs. 4,080
 (C) Rs. 5,456
 (D) Rs. 7,856



COMPILATION OF PAST YEAR QUESTIONS

96. Which of the following statements is True? (assume that the yearly cash flow? Are identical for both annuities) [Nov. 2020]

- (A) The present value of an annuity due is greater than the present value of an ordinary annuity
- (B) The present value of an ordinary annuity is greater than the present value of an annuity due
- (C) The future value of an ordinary annuity is greater than the future value of an annuity due
- (D) The future value of an annuity due is equal to future value of an ordinary annuity



97. Rs. 2,500 is paid every year for 10 years to pay off a loan. What is the loan amount if interest rate be 14% per annum compounded annually? [Nov. 2020]

- (A) Rs. 15,847.90
- (B) Rs. 13,040.27
- (C) Rs. 14,674.21
- (D) Rs. 16,345.11



98. An amount is lent at a nominal rate of 4.5% per annum compounded quarterly. What would be the gain in rupees over when compounded annually? [Nov. 2020]

- (A) 0.56
- (B) 0.45
- (C) 0.076
- (D) 0.85



99. What sum of money will produce Rs. 42,800 as an interest in 3 years and 3 months at 2.5% p.a. simple interest? [Nov. 2020]

- (A) Rs. 3,78,000
- (B) Rs. 5,26,769
- (C) Rs. 4,22,000
- (D) Rs. 2,24,000



100. The ratio of principal and the compound interest value for three years (compounded annually) is 216 : 127. The rate of interest is: [Nov. 2020]

- (A) 0.1777
- (B) 0.1567
- (C) 0.1666
- (D) 0.1587



101. A stock pays annually an amount of Rs. 10 from 6th year onwards. What is the present value of the perpetuity, if the rate of return is 20%? [Nov. 2020]

- (A) 20.1
- (B) 19.1
- (C) 21.1
- (D) 22.1



102. A certain sum amounted to Rs. 575 at 5% in a time in which Rs. 750 amounted to Rs. 840 at 4%. If the rate of interest is simple, find the sum- [Jan. 2021]

- (A) 525
- (B) 550
- (C) 515
- (D) 500



103. Find the amount of compound interest, if an amount of Rs. 50,000 is deposited in a bank for one year at the rate of 8% per annum compounded semiannually

- (A) 3,080
- (B) 4,080
- (C) 5,456
- (D) 7,856

[Jan. 2021]



104. The population of a town increase by 2% of the population at the beginning of the year. The number of year by which the total increases in population would be 40% is:

- (A) 7 years
- (B) 10 years
- (C) 17 years
- (D) 19 years (approx.)

[Jan. 2021]



105. Find the future value of annuity of Rs. 1,000 made annually for 7 year at interest rate of 14% compounded annually (Given that $1.14^7 = 2.5023$)

- (A) Rs. 10,730.7
- (B) Rs. 5,365.35
- (C) Rs. 8,756
- (D) Rs. 9892.34

[Jan. 2021]



COMPILATION OF PAST YEAR QUESTIONS

106. Two equal amounts of money are deposited in two banks each at 15% p.a. for 3.5 years in the first bank and for 5 years in the other. The difference between the interest amount from the bank is Rs. 144. Find the sum

- (A) Rs. 620 [Jan. 2021]
 (B) Rs. 640
 (C) Rs. 820
 (D) Rs. 840



107. The simple interest on a sum at 4% p.a. for 2 years is Rs. 80. Find the CI on the same sum for the same period. [Jan. 2021]

- (A) Rs. 81.60
 (B) Rs. 80.80
 (C) Rs. 83.20
 (D) Rs. 82.30



108. Which is a better investment 9% p.a. compounded quarterly or 9.1% p.a. simple interest? [Jan. 2021]

- (A) 9% compounded
 (B) 9.1% S.T.
 (C) Both are same
 (D) Cannot be said



109. The effective rate of interest corresponding to a nominal rate of 7% p.a. compounded quarterly is [Jan. 2021]

- (A) 7.5%
 (B) 7.6%
 (C) 7.7%
 (D) 7.18%



110. Assuming that the discount rate is 7% p.a. how much would you pay to receive Rs. 200 growing at 5% annually for ever?

- (A) Rs. 2,500 [Jan. 2021]
 (B) Rs. 5,000
 (C) Rs. 7,500
 (D) Rs. 10,000



111. A man invested one-third of his capital at 7% one-fourth at 8% and the remainder at 10%. If the annual income is Rs. 561. The capital is- [Jan. 2021]

- (A) Rs. 4,400
 (B) Rs. 5,500
 (C) Rs. 6,600
 (D) Rs. 5,800



112. A sum of money is lent at C.I. Rate 20% p.a. for 2 years. It would fetch Rs. 482 more if the interest is compounded half yearly. The sum is: [Jan. 2021]

- (A) Rs. 19,800
 (B) Rs. 19,900
 (C) Rs. 20,000
 (D) Rs. 20,100



113. Rs. 800 is invested at the end of each month in an account paying interest 6% per year compounded monthly. What is the future value of this annuity after 10th payment?

- (A) Rs. 4,444 [Jan. 2021]
 (B) Rs. 8,756
 (C) Rs. 3,491
 (D) Rs. 8,151.67



114. What 'i' denote the actual rate of interest in decimal, and n denote the number of conversion periods, the formula for computing the effective rate of interest E is given by. [Jan. 2021]

- (A) $(1+i)^n$
 (B) $(1+i)^n - 1$
 (C) $1 - (1+i)^n$
 (D) $(1+i)^{-n}$



115. The present value of an Annuity immediate is the same as [Jan. 2021]

- (A) Annuity regular for (n - 1) year plus the initial receipt in the beginning of the period
 (B) Annuity regular for (n - 1) years
 (C) Annuity regular for (n + 1) years
 (D) Annuity regular for (n + 1) years plus the initial receipt in the beginning of the period



116. If the desired future value after 5 years with 18% interest rate is Rs. 1,50,000, then the present value (in Rs.) is (Given that $(1.18)^5 = 2.2877$)?

- (A) 63,712 [July 2021]
 (B) 65,568
 (C) 53,712
 (D) 41,712



COMPILATION OF PAST YEAR QUESTIONS

117. The effective rate of return for 24% per annum convertible monthly is given as:

- (A) 24% [July 2021]
 (B) 26.82%
 (C) 18%
 (D) 24.24%



118. What is the compound interest (in Rs.) on a sum of Rs. 12,600 for $1\frac{1}{2}$ years at 20% per annum if the interest is compounded half yearly? [July 2021]

- (A) 4,271
 (B) 4,171
 (C) 4,711
 (D) 4,117



119. If discount rate is 14% per annum, then how much a company has to pay to receive Rs. 280 growing at 9% annually forever?

- (A) Rs. 5,600 [July 2021]
 (B) Rs. 2,800
 (C) Rs. 1,400
 (D) Rs. 4,200



120. If the nominal rate of growth is 17% and inflation is 9% for the five years. Let P be the Gross Domestic Product (GDP) amount at the present year then the projected real GDP after 6 years is: [July 2021]

- (A) 1.587 P
 (B) 1.921 P
 (C) 1.403 P
 (D) 2.51 P



121. A sum of Rs. 7,500 amounts to Rs. 9,075 at 10% p.a., interest being compounded yearly in a certain time. The simple interest (in Rs.) on the same sum for the same time and the same rate is: [July 2021]

- (A) 1,000
 (B) 1,250
 (C) 1,800
 (D) 1,500



122. A loan of Rs. 1,02,000 is to be paid back in two equal annual instalments. If the rate of interest is 4% p.a., compounded annually, then the total interest charged (in Rs.) under this installment plan is:

- (A) 6,160 [July 2021]
 (B) 8,120
 (C) 5,980
 (D) 7,560



123. If a person bought a house by paying Rs. 45,00,000 down payment and Rs. 80,000 at the end of each year till the perpetuity. Assuming the rate of interest as 16% the present value of house (in Rs.) is given as:

- (A) 47,00,000 [July 2021]
 (B) 45,00,000
 (C) 57,80,000
 (D) 50,00,000



124. Let the operating profit of a manufacturer for five years is given as:

Years	1	2	3	4	5	6
Operating profit (in lakh Rs.)	90	100	106.4	107.14	120.24	157.34

Then the operating profit of Compound Annual Growth Rate (CAGR) for year 6 with respect to year 2 is given that:

- (A) 9% [July 2021]
 (B) 12%
 (C) 11%
 (D) 13%



125. If the cost of capital be 12% per annual, then the net present value (in nearest Rs.) from the given cash flow is given as:

Years	0	1	2	3
Operating profit (in thousands Rs.)	(100)	60	40	50

- (A) 31048 [July 2021]
 (B) 34185
 (C) 21048
 (D) 24187



COMPILATION OF PAST YEAR QUESTIONS

126. A certain sum amounts to Rs. 15,748 in 3 years at simple interest at $r\%$ p.a. The same sum amounts to Rs. 16,510 at $(r + 2)\%$ p.a. simple
[July 2021]

- (A) 10%
- (B) 8%
- (C) 12%
- (D) 6%



127. What is the difference (in Rs.) between the simple interest and the compound interest on a sum of Rs. 8,000 for $2\frac{2}{5}$ years at the rate of 10% p.a. when the interest is compounded yearly?
[July 2021]

- (A) 136.12
- (B) 129.50
- (C) 151.75
- (D) 147.20



128. The future value of annuity of Rs. 2,000 for 5 years at 5% compounded annually is given (in nearest Rs.) as:
[July 2021]

- (A) 51,051
- (B) 21,021
- (C) 11,051
- (D) 61,254



129. A sum of Rs. x amounts to Rs. 27,900 in 3 years and to Rs. 41,850 in 6 years at a certain rate percent per annum when the interest is compounded yearly. The value of x is:
[July 2021]

- (A) 16,080
- (B) 18,600
- (C) 18,060
- (D) 16,800



130. Mr. X wants to accumulate Rs. 50,00,000 at the end of 10 years. Then how much amount is required to be invested every year if interest is compounded annually at 10%? (Given that $P(10, 0.10) = 15.9374298$)
[Dec. 2021]

- (A) Rs. 3,13,726.87
- (B) Rs. 4,13,726.87
- (C) Rs. 3,53,726.87
- (D) Rs. 4,53,726.87



131. Rahul invested Rs. 70,000 in a bank at the rate of 6.5% p.a. simple interest rate. He received Rs. 85,925 after the end of term. Find out the period for which sum was invested by Rahul.
[Dec. 2021]

- (A) 2 years
- (B) 3 years
- (C) 3.5 years
- (D) 2.5 years



132. A company needs Rs. 10,000 in five years to replace as equipment. How much (in Rs.) should be invested now at an interest rate of 8% p.a. in order to provide for this equipment?
[Dec. 2021]

- (A) 6,000
- (B) 6,805
- (C) 10,000
- (D) 11,000



133. R needs money to pay Rs. 5,00,000 in 10 years. He invested a sum in a scheme at 9% rate of interest compounded half-yearly. How much amount (in Rs.) he invested? ($1.046^{20} = 2.41171$)
[Dec. 2021]

- (A) 3,07,321
- (B) 2,70,321
- (C) 2,07,321
- (D) 3,40,321



134. An amount is lent at $R\%$ simple interest for R years and the simple interest amount was one-fourth of the principal amount. Then R is _____
[Dec. 2021]

- (A) 5
- (B) 6
- (C) $5\frac{1}{2}$
- (D) $6\frac{1}{2}$



135. A sum of money is put at 20% compound interest rate p.a. At which year the aggregated amount just exceeds the double of the original sum?
[Dec. 2021]

- (A) 6
- (B) 5
- (C) 4
- (D) 3



COMPILATION OF PAST YEAR QUESTIONS

136. The present value of Rs. 25,000 to be received after 10 years at 6% per annum compounded annually is Rs. _____.
 $(1.06^5 = 1.33823)$ [Dec. 2021]

- (A) Rs. 15,960
- (B) Rs. 13,960
- (C) Rs. 11,960
- (D) Rs. 17,960















ANSWER KEY

1.	B	2.	C	3.	B	4.	D	5.	B
6.	C	7.	A	8.	B	9.	D	10.	D
11.	B	12.	B	13.	C	14.	B	15.	D
16.	C	17.	A	18.	B	19.	A	20.	C
21.	C	22.	C	23.	B	24.	C	25.	C
26.	D	27.	D	28.	C	29.	A	30.	B
31.	B	32.	D	33.	B	34.	B	35.	C
36.	C	37.	A	38.	C	39.	B	40.	D
41.	C	42.	D	43.	B	44.	A	45.	B
46.	C	47.	A	48.	B	49.	D	50.	C
51.	C	52.	D	53.	A	54.	A	55.	B
56.	B	57.	C	58.	D	59.	C	60.	B
61.	A	62.	A	63.	A	64.	B	65.	B
66.	A	67.	A	68.	B	69.	C	70.	C
71.	A	72.	A	73.	A	74.	C	75.	B
76.	B	77.	B	78.	B	79.	A	80.	A
81.	A	82.	A	83.	A	84.	A	85.	A
86.	A	87.	A	88.	A	89.	B	90.	A
91.	A	92.	B	93.	C	94.	B	95.	B
96.	A	97.	B	98.	C	99.	B	100.	C
101.	A	102.	D	103.	B	104.	C	105.	A
106.	B	107.	A	108.	A	109.	D	110.	D
111.	C	112.	C	113.	D	114.	B	115.	A
116.	B	117.	B	118.	B	119.	A	120.	A
121.	D	122.	A	123.	D	124.	B	125.	D
126.	B	127.	A	128.	C	129.	B	130.	A
131.	C	132.	B	133.	C	134.	A	135.	C
136.	B								

COMPILATION OF PAST YEAR QUESTIONS

(This is Vidhyoday's unique compilation of past attempts CA-F/CPT questions asked under Maths/Stats section.)

CHAPTER – 5 PERMUTATION & COMBINATION

- | | |
|---|---|
| <p>1. If ${}^n C_{18} = {}^n C_{12}$ find ${}^{32} C_n$</p> <p>(A) 496</p> <p>(B) 420</p> <p>(C) 286</p> <p>(D) 252</p>  | <p>7. How many numbers are greater than 40,000 can be made from 1, 2, 3, 4 & 5.</p> <p>(A) 48</p> <p>(B) 24</p> <p>(C) 96</p> <p>(D) 72</p>  |
| <p>2. ${}^n P_3 = 120$ find n?</p> <p>(A) 8</p> <p>(B) 5</p> <p>(C) 7</p> <p>(D) 6</p>  | <p>8. ${}^6 P_r = 24 * 6 C_r$ then r is?</p> <p>(A) 3</p> <p>(B) 4</p> <p>(C) 5</p> <p>(D) 6</p>  |
| <p>3. In how many ways a committee of a 7 be made from 8 men & 5 women such that 2 women are must in the committee?</p> <p>(A) 1475</p> <p>(B) 1568</p> <p>(C) 1620</p> <p>(D) 1748</p>  | <p>9. How many arrangements of the letter of word "EXAMINATION" be made such that vowels come together?</p> <p>(A) 50300</p> <p>(B) 48600</p> <p>(C) 64800</p> <p>(D) 72400</p>  |
| <p>4. How many necklaces can be made by 40 different beads?</p> <p>(A) 39!</p> <p>(B) $\frac{39!}{2}$</p> <p>(C) 40!</p> <p>(D) $\frac{40!}{2}$</p>  | <p>10. In how many ways 7 men & 5 women grouped in 4 such that there will be exactly 3 women?</p> <p>(A) 140</p> <p>(B) 35</p> <p>(C) 14</p> <p>(D) 70</p>  |
| <p>5. How many words can be formed from letter of the word LUCKNOW such that no two letters out of U, C, K should come together?</p> <p>(A) 720</p> <p>(B) 360</p> <p>(C) 1440</p> <p>(D) 120</p>  | <p>11. ${}^n P_3 : {}^{n-1} P_2 = 7 : 1$ find n?</p> <p>(A) 6</p> <p>(B) 7</p> <p>(C) 8</p> <p>(D) 10</p>  |
| <p>6. $(2n-1)! = 20n!$ then n is</p> <p>(A) 5</p> <p>(B) 6</p> <p>(C) 4</p> <p>(D) 3</p>  | <p>12. In how many ways 5 Maths book, 3 Accounts book & 2 Biology book be arranged so that all Maths, all Accounts & all the Biology books are together</p> <p>(A) 8460</p> <p>(B) 8064</p> <p>(C) 8406</p> <p>(D) 8640</p>  |

COMPILATION OF PAST YEAR QUESTIONS

13. If $5!x + 6!(x - 1) - 7! = 0$, then $x =$

- (A) $\frac{24}{7}$
- (B) $\frac{48}{7}$
- (C) $\frac{36}{7}$
- (D) $\frac{30}{7}$



14. There are 7 paintings in a room. How many ways are there which there is a specific painting on either side of 1 painting?

- (A) 720
- (B) 360
- (C) 840
- (D) 1440



15. ${}^nC_6 = {}^nC_8$, find nP_3

- (A) 2184
- (B) 3024
- (C) 1296
- (D) 2914



16. In how many ways a committee of 6 be made out of 7 boys and 4 girls such that there are at least there are 2 girls in it?

- (A) 273
- (B) 310
- (C) 371
- (D) 425



17. How many 6 digit telephone numbers can be made?

- (A) $9 \times 9!$
- (B) 900000
- (C) $9 \times 8!$
- (D) None of these



18. In how many ways 7 books be arranged in an almirah so that 2 specific books are that corner. [June 2009]

- (A) 60
- (B) 120
- (C) 240
- (D) 480



19. ${}^{18}C_r = {}^{18}C_{r+2}$, then ${}^rC_5 =$

- (A) 28
- (B) 42
- (C) 56
- (D) 21

[June 2009]



20. Number of ways of painting a face of a cube by 6 colours is [June 2009]

- (A) 15
- (B) 6
- (C) 30
- (D) 18



21. $(n+1)! = 20(n-1)!$ Find n. [Dec. 2009]

- (A) 5
- (B) 4
- (C) 3
- (D) 2



22. In how many ways letters of the word REGULATIONS be arranged so that vowels always comes at even place?

- (A) $4! \times 5!$
- (B) $6! \times 4!$
- (C) $5! \times 6!$
- (D) $3! \times 4!$

[Dec. 2009]



23. In how many ways a committee can be formed from 4 men & 6 women such that women are twice of man selected?

- (A) 144
- (B) 150
- (C) 154
- (D) 172



24. In how many ways 6 boys & 4 girls be arranged in a row so that all girls are together. [June 2010]

- (A) $4! \times 6!$
- (B) $4! \times 7!$
- (C) $4! \times 5!$
- (D) $5! \times 6!$




COMPILATION OF PAST YEAR QUESTIONS

25. How many numbers can be made from the numbers 1, 2, 3, 4, 5, 6, 7, 8, 9 such that the number does not exceed 1000?

- (A) 504 [June 2010]
 (B) 480
 (C) 585
 (D) 420
- 

26. 6 different points are given on a circle. How many quadrilateral can be formed using these points as vertices?

- (A) 10 [June 2010]
 (B) 12
 (C) 14
 (D) 15
- 

27. 5 children are to be arranged between 6 trees such that there is 1 child between 2 trees. In how many ways they can be arranged [Dec. 2010]

- (A) $5! \times 6!$
 (B) $6!$
 (C) $5!$
 (D) $5! \times 4!$
- 


28. In how many ways 11 players can be chosen from 15 players such that 1 player should not come. [Dec. 2010]

- (A) 256
 (B) 320
 (C) 364
 (D) 426
- 


29. ${}^{15}C_3 + {}^{15}C_{13}$ is [Dec. 2010]

- (A) 364
 (B) 490
 (C) 560
 (D) 645
- 


30. Find the number of arrangements of 5 things taken out of 12 things, in which one particular thing must always be included.

- (A) $11c_5 \times 5!$ [June 2011]
 (B) $11c_3 \times 4!$
 (C) $11c_4 \times 5!$
 (D) None of these
- 

31. In how many ways a team of 5 can be made out of 7 boys and 8 girls, if 2 girls are compulsory to Form a team?

- (A) $8c_2 \times 13c_3$ [June 2011]
 (B) 2702
 (C) 3609
 (D) 2945
- 

32. If 15 persons are to be seated around 2 round tables, one occupying 8 persons and another 7 persons. Find the number of ways in which they can be seated.

- (A) $15c_7 \times 7! \times 6!$ [June 2011]
 (B) $2 \times 15c_7 \times 7! \times 6!$
 (C) $15c_6 \times 8! \times 7!$
 (D) $2 \times 15c_6 \times 8! \times 7!$
- 

33. In no. of ways of distributing 3 prizes to 5 brothers is [Dec. 2011]

- (A) $5!$
 (B) 60
 (C) 30
 (D) 5
- 

34. There are 12 questions to be answered to be yes or no. how many ways can these be answered? (Assume you have to answer all the questions) [Dec. 2011]

- (A) 1023
 (B) 1024
 (C) 4095
 (D) 4096
- 

35. A team of 5 is to be selected from 8 boys and three girls. Find the probability that it includes two particular girls.

- (A) $\frac{1}{252}$
 (B) $\frac{1}{84}$
 (C) $\frac{1}{152}$
 (D) $\frac{1}{110}$
- 

36. ${}^nP_4 = 20 \times {}^nP_2$ then n = [June 2012]

- (A) 6
 (B) 7
 (C) 9
 (D) 10
- 

COMPILATION OF PAST YEAR QUESTIONS

37. In a company there are 7 CA's, 6 M.B.A.'s and 3 Engineers. How many ways can be they form a Committee, if there are two members from each field is? [June 2012]

- (A) 720
- (B) 864
- (C) 926
- (D) 945



38. The letter of the word "VIOLENT" are arranged so that vowels occupy even places only. The number of permutations is

- (A) 72
- (B) 144
- (C) 36
- (D) 288

[June 2012]



39. A man has 3 sons and 6 schools within his reach. How many ways can his sons go to school, if No. two of them are in the same school? [Dec. 2012]

- (A) 60
- (B) 216
- (C) 124
- (D) 120



40. If ${}^{13}C_6 + 2{}^{13}C_5 + {}^{13}C_4 = {}^{15}C_x$ then x =

- (A) 4
- (B) 8
- (C) 6
- (D) 3

[Dec. 2012]



41. Number of permutations can be formed from the letter of the word "DRAUGHT", if the two vowels are in separable.

- (A) 720
- (B) 360
- (C) 1440
- (D) 480

[Dec. 2012]



42. The total number of shake hands in a group of 10 persons to each other are _____

- (A) 90
- (B) 10!
- (C) 45
- (D) $\frac{10!}{2}$

[June 2013]



43. A regular polygon has 44 diagonal then the no. of sides are _____ [June 2013]

- (A) 11
- (B) 12
- (C) 9
- (D) 10



44. In how many ways the letter of the word "ARTICLES" can be arranged in a row so that vowels occupy even places?

- (A) 1440
- (B) 2880
- (C) 720
- (D) 8640

[June 2013]



45. If ${}^{15}C_r = {}^{15}C_{r+3}$ then r =?

[Dec. 2013]

- (A) 4
- (B) 5
- (C) 6
- (D) 7



46. In how many ways can a family consists of 3 children have different birthdays in a leap year? [Dec. 2013]

- (A) ${}^{365}P_3$
- (B) ${}^{366}P_3$
- (C) ${}^{365}C_3$
- (D) ${}^{366}C_3$



47. If 6 times the number of permutations of n items taken 3 at a time is equal to 7 times the Numbers of permutations of (n-1) items taken 3 at a time then the value of n will be

- (A) 15
- (B) 18
- (C) 20
- (D) 21

[June 2014]





48. ${}^{1000}C_{98} = {}^{999}C_{97} + {}^x C_{901}$ then value of x will be? [June 2014 & May 2018]


- (A) 1000
- (B) 98
- (C) 97
- (D) 999





COMPILATION OF PAST YEAR QUESTIONS


49. ${}^6P_r = 360$ then find r [Dec. 2014]
- (A) 2
(B) 3
(C) 4
(D) 5
- 


50. If 5 books of English, 4 books of Tamil and 3 books of Hindi are to be arranged in a single row so that books of same language come together. [Dec. 2014]
- (A) $5! \times 4! \times 3!$
(B) $4! \times 3! \times 3!$
(C) $3! \times 3! \times 5! \times 4!$
(D) $4! \times 5!$
- 


51. 5 Boys and 4 Girls are to be seated in row. If the girls occupy even places then the no. of such arrangements [Dec. 2014]
- (A) $5! \times 4!$
(B) $2! \times 5! \times 4!$
(C) $\frac{4! \times 5!}{2}$
(D) None of these
- 


52. A person has 10 friends of which 6 of them are relatives. He wishes to invite 5 persons so that 3 of them are relatives. In how many ways he can invite? [June 2015]
- (A) 60
(B) 90
(C) 100
(D) 120
- 


53. A student has 3 books on computer, 3 books of Economics, 5 on Commerce. If these books are to be arranged subject wise that these can be placed on a shelf in the _____ number of ways. [June 2015 & Dec. 2017]
- (A) $3! \times 3! \times 3! \times 5!$
(B) $3! \times 3! \times 4! \times 5!$
(C) $3! \times 4! \times 5!$
(D) None of these
- 


54. The number of 4 digit numbers that can be formed from seven digits 1, 2, 3, 5, 7, 8, 9 such that no digit being repeated in any number, which are greater than 3000 are [June 2015]
- (A) 7P_4
(B) 420
(C) 600
(D) 540
- 

55. A question paper consist 10 questions, 6 Que. in Maths and 4 in Stats. Find the number of ways to solve question paper if at least one question is to be attempted from each section. [Dec. 2015]
- (A) 840
(B) 1023
(C) 945
(D) 511
- 

56. There are 6 gents and 4 ladies. A committee of 5 is to be formed so that it includes at least two ladies. [Dec. 2015]
- (A) 144
(B) 172
(C) 192
(D) 186
- 

57. ${}^nP_r = 720$ and ${}^nC_r = 120$ find r? [Dec. 2015 & Nov. 2018]
- (A) 4
(B) 2
(C) 3
(D) 5
- 

58. How many numbers between 1000 and 10,000 can be formed with the digits 1, 2, 3, 4, 5, 6 [Dec. 2016]
- (A) 120
(B) 144
(C) 240
(D) 360
- 

59. If ${}^{n+1}C_{r+1} : {}^nC_r : {}^{n-1}C_{r-1} = 8:3:1$ then find the value of n [Dec. 2016]
- (A) 15
(B) 16
(C) 20
(D) 21
- 

COMPILATION OF PAST YEAR QUESTIONS

60. In how many ways 4 members can occupy 9 vacant seats in a row. [Dec. 2016]

- (A) 1400
- (B) 1920
- (C) 2520
- (D) 3024



61. Find the number of arrangements in which the letters of the word 'MONDAY' be arranged so that the words thus formed begin with 'M' and do not end with 'N'.

- (A) 720 [June 2009]
- (B) 120
- (C) 96
- (D) None



62. In how many ways can 17 billiard balls be arranged if 7 of them are black, 6 red and 4 white? [June 2009]

- (A) 4084080
- (B) 1
- (C) 8048040
- (D) None of these



63. Out of 4 gents and 6 ladies, a committee is to be formed. Find the number of ways the committee can be formed such that it comprises of at least 2 gents and the number of ladies should at least be double of gents. [Dec. 2009]

- (A) 94
- (B) 132
- (C) 136
- (D) 104



64. How many different words can be formed with the letters of the word "LIBERTY"

- (A) 4050 [Dec. 2013]
- (B) 5040
- (C) 5400
- (D) 4500



65. In how many ways can a selection of 6 out of 4 teachers and 8 students be done so as to include at least two teachers?

- (A) 220 [June 2016]
- (B) 672
- (C) 596
- (D) 968



66. There are 10 students in a class including 3 girls. The number of ways to arrange them in a row when any two girls out of three never come together:

- (A) ${}^8P_3|7$ [June 2016]
- (B) ${}^3P_3|7$
- (C) ${}^8P_3|10$
- (D) None of these



67. The maximum number of points of intersection of 10 circles will be: [June 2016]

- (A) 2
- (B) 20
- (C) 90
- (D) 180



68. If ${}^{10}C_3 + 2 \cdot {}^{10}C_4 + {}^{10}C_5 = {}^nC_5$ then value of n is: [June 2017]

- (A) 10
- (B) 11
- (C) 12
- (D) 13



69. The number of parallelograms, formed from a set of six parallel lines intersecting another set of four parallel lines is:

- (A) 360 [June 2017]
- (B) 90
- (C) 180
- (D) 45



70. If ${}^nP_{13} : {}^{n+1}P_{12} = 3:4$, then the value of 'n' will be: [Dec. 2017]

- (A) 13
- (B) 15
- (C) 18
- (D) 31



71. The number of triangle that can be formed by choosing the vertices from a set of 12 points, seven of which lie on the same straight line, is: [May 2018]

- (A) 185
- (B) 175
- (C) 115
- (D) 105



COMPILATION OF PAST YEAR QUESTIONS

72. The number of words from the letters of the word BHARAT, in which B and H will never come together, is [Nov. 2018]

- (A) 360
- (B) 240
- (C) 120
- (D) None of the above



73. The value of N in $\frac{1}{7!} + \frac{1}{8!} = \frac{N}{9!}$ is [Nov.2018]

- (A) 81
- (B) 78
- (C) 89
- (D) 64



74. Which of the following is a correct statement. [June 2019]

- (A) ${}^n P_n = {}^n P_{n-1}$
- (B) ${}^n P_n = {}^{2n} P_{n-2}$
- (C) ${}^n P_n = {}^{3n} P_{n-3}$
- (D) ${}^n P_n = {}^{n(n-1)} P_{n-1}$



75. If these are 40 guests in a party. If each guest takes a shake hand with all the remaining guests. Then the total number of hands shake is _____. [June 2019]

- (A) 780
- (B) 840
- (C) 1,560
- (D) 1,600



76. If ${}^{11}C_x = {}^{11}C_{2x-4}$ and $x \neq 4$ than the value of ${}^7C_x =$ [June 2019]

- (A) 20
- (B) 21
- (C) 22
- (D) 23



77. In how many ways can the crew of an eight member boat be arranged so that 3 particular of crew can row only one side and 2 row on the other side? [June 2019]

- (A) 1,728
- (B) 256
- (C) 164
- (D) 126



78. Three girls and five boys are to be seated in a row so that no two girls sit together. Total no. of ways of this arrangement are: [Nov. 2019]

- (A) 14,400
- (B) 120
- (C) ${}^5 P_3$
- (D) $3! \times 5!$



79. How many numbers can be formed with the help of 2, 3, 4, 5, 6, 1 which are not divisible by 5, given that it is a five-digit no. and digits are not repeating? [Nov. 2019]

- (A) 600
- (B) 400
- (C) 1200
- (D) 1400



80. How many different groups of 3 people can be formed from a group of 5 people? [Nov. 2019]

- (A) 5
- (B) 6
- (C) 10
- (D) 9



81. In how many ways can 4 people be selected at random from 6 boys and 4 girls if there are to be exactly 2 girls? [Nov. 2019]

- (A) 90
- (B) 360
- (C) 92
- (D) 480



82. ${}^n P_3 : {}^n P_2 = 2 : 1$. Find n. [Nov. 2019]

- (A) 4
- (B) $\frac{7}{2}$
- (C) 5
- (D) $\frac{2}{7}$



83. A fruity basket contains 7 apples, 6 bananas, and 4 mangoes. How many selections of 3 fruits can be made so that all 3 are apples? [Nov. 2020]

- (A) 35 ways
- (B) 120 ways
- (C) 165 ways
- (D) 70 ways



COMPILATION OF PAST YEAR QUESTIONS

84. Out of 7 boys and 4 girls, a team of a debate club of 5 is to be chosen. The number of teams such that each team includes at least one girl is: [Nov. 2020]

- (A) 439
- (B) 429
- (C) 419
- (D) 441



85. If ${}^n P_4 = 20 {}^n P_2$ where p denotes the number of permutations, then n is:

- (A) 4 [Nov. 2020]
- (B) 2
- (C) 5
- (D) 7



86. From a group of 8 men and 4 women, 4 persons are to be selected to form a committee so that at least 2 women are there on the committee. In how many ways can it be done? [Nov. 2020]

- (A) 168
- (B) 201
- (C) 202
- (D) 220



87. Eight Chairs are numbered from 1 to 8. Two women and three men are to be seated by allowing one chair for each. First, the women choose the chairs from the chairs numbered 1 to 4 and then men select the chairs from the remaining.

The number of possible arrangement is:

- (A) 120 [Jan. 2021]
- (B) 288
- (C) 32
- (D) 1440



88. 'n' locks and 'n' corresponding keys are available but the actual combination is not known. The maximum number of trials that are needed to assigns the keys to the corresponding locks is:

- (A) $(n-1)C_2$ [Jan. 2021]
- (B) $(n+1)C_2$
- (C) $\sum_{k=2}^n (k-1)$
- (D) $\sum_{k=2}^n k$



89. There are ten flights operating between city A and city B. The number of ways in which a person can travel from city A to city B and return by different flight is:

- (A) 90 [Jan. 2021]
- (B) 95
- (C) 80
- (D) 78



90. How many four-digit odd numbers can be formed with digits 0, 1, 2, 3, 4, 7 and 8?

- (A) 150 [Jan. 2021]
- (B) 300
- (C) 120
- (D) 210



91. In how many different ways can the letters of the word 'DETAIL' be arranged so that the vowels occupy only the odd positions?

- (A) 32 [Jan. 2021]
- (B) 36
- (C) 48
- (D) 60



92. ${}^n C_p + 2 {}^n C_{p-1} + {}^n C_{p-2} = ?$ [Jan. 2021]

- (A) ${}^{n+1} C_p$
- (B) ${}^{n+2} C_p$
- (C) ${}^{n+1} C_{p+1}$
- (D) ${}^{n+2} C_{p-1}$



93. A business houses wishes to simultaneously elevate two of its six branch heads. In how many ways can these elevations take place?

- (A) 12 [Jan. 2021]
- (B) 3
- (C) 6
- (D) 15



94. If ${}^n P_6 = 20 {}^n P_4$ then the value of n is given by: [July 2021]

- (A) $n = 5$
- (B) $n = 3$
- (C) $n = 9$
- (D) $n = 8$



COMPILATION OF PAST YEAR QUESTIONS

95. How many numbers of seven digit numbers which can be formed from the digits 3, 4, 5, 6, 7, 8, 9 no digits being repeated are not divisible by 5? [July 2021]

- (A) 4320
- (B) 4690
- (C) 3900
- (D) 3890



96. A person can go from place 'A' to 'B' by 11 different modes of transport but is allowed to return to "A" by any mode other than the one earlier. The number of different ways in which the entire journey can be completed is: [July 2021]

- (A) 110
- (B) 10^{10}
- (C) 9^5
- (D) 10^9



97. The number of ways 5 boys and 5 girls can be seated at a round table, so no two boys are adjacent is: [July 2021]

- (A) 2,550
- (B) 2,880
- (C) 625
- (D) 2,476



98. The number of four letter words can be formed using the letters of the word DECTIONARY is [Dec. 2021]

- (A) 5040
- (B) 720
- (C) 90
- (D) 30240



99. The number of words that can be formed using the letters of the "PETROL" such that the words do not have "P" in the first position, is

[Dec. 2021]

- (A) 720
- (B) 120
- (C) 600
- (D) 540



100. If ${}^n P_2 = 12$, then the value of n is

[Dec.2021]

- (A) 2
- (B) 3
- (C) 4
- (D) 6



101. The number of different ways the letters of the word "DETAIL" can be arranged in such a way that the vowels can occupy only the odd position is

[Dec. 2021]

- (A) 32
- (B) 36
- (C) 48
- (D) 60



102. Six boys and five girls are to be seated for a photograph in a row such that no two girls sit together and no two boys sit together. Find the number of ways in which this can be done. [Dec. 2021]

- (A) 74,200
- (B) 96,900
- (C) 45,990
- (D) 86,400



COMPILATION OF PAST YEAR QUESTIONS

ANSWER KEY












1.	A	2.	D	3.	B	4.	B	5.	C
6.	D	7.	A	8.	B	9.	C	10.	D
11.	B	12.	D	13.	B	14.	D	15.	A
16.	C	17.	B	18.	C	19.	C	20.	C
21.	B	22.	C	23.	C	24.	B	25.	C
26.	D	27.	C	28.	C	29.	C	30.	C
31.	B	32.	B	33.	B	34.	D	35.	B
36.	B	37.	D	38.	B	39.	D	40.	C
41.	C	42.	C	43.	A	44.	B	45.	C
46.	B	47.	D	48.	D	49.	C	50.	C
51.	A	52.	D	53.	A	54.	C	55.	C
56.	D	57.	C	58.	D	59.	A	60.	D
61.	C	62.	A	63.	C	64.	B	65.	B
66.	A	67.	C	68.	C	69.	B	70.	B
71.	A	72.	B	73.	A	74.	A	75.	A
76.	B	77.	A	78.	A	79.	A	80.	C
81.	A	82.	A	83.	A	84.	D	85.	D
86.	B	87.	D	88.	C	89.	A	90.	B
91.	B	92.	B	93.	D	94.	C	95.	A
96.	A	97.	B	98.	A	99.	C	100.	C
101.	B	102.	D						

COMPILATION OF PAST YEAR QUESTIONS

(This is Vidhyoday's unique compilation of past attempts CA-F/CPT questions asked under Maths/Stats section.)

CHAPTER – 6

SEQUENCE AND SERIES-ARITHMETIC AND GEOMETRIC PROGRESSION

- | | |
|---|---|
| <p>1. If the series is in AP with common difference 2 & T_1, T_3, T_7 are in GP find T_2</p> <p>(A) 4
(B) 6
(C) 8
(D) 10</p>  <p>2. If the series is an A.P. $T_p = \frac{1}{q}, T_q = \frac{1}{p}$ then, $T_{pq} = ?$</p> <p>(A) 1
(B) pq
(C) p+q
(D) $\frac{1}{p+q}$</p>  <p>3. Sum of all the integers between 2 & 100 which are divisible by 3</p> <p>(A) 1430
(B) 1620
(C) 1595
(D) 1683</p>  <p>4. If $k^2 + k + 1, 2k^2 + k + 1, 3k^2 - 4k + 1$ are in A.P. then K is</p> <p>(A) $\frac{1}{5}$
(B) 1
(C) $\frac{2}{5}$
(D) $\frac{1}{2}$</p>  <p>5. Divide 144 in 3 parts such that they are in A.P. & the largest is the double of smallest. Find the smallest part [June 2010]</p> <p>(A) 32
(B) 34
(C) 64
(D) 68</p>  | <p>6. $1 + \frac{1}{3} + \frac{1}{3^2} + \dots = x$
$1 + \frac{1}{4} + \frac{1}{4^2} + \dots = y$ find x.y</p> <p>(A) 1
(B) $\frac{1}{2}$
(C) 2
(D) $\frac{1}{3}$</p>  <p>7. $\sqrt{2}, 5\sqrt{2}, 9\sqrt{2} \dots$ find 9th term of series.</p> <p>(A) $29\sqrt{2}$
(B) $33\sqrt{2}$
(C) $37\sqrt{2}$
(D) None of these</p>  <p>8. How many terms of the series $256 + 128 + 64 + \dots$ will give a total of 511</p> <p>(A) 7
(B) 9
(C) 8
(D) 10</p>  <p>9. If in an AP, $T_7 : T_{10} = 5:7$ then what is $T_8 : T_{11} = ?$ [June 2009]</p> <p>(A) 6:7
(B) 15:17
(C) 17:23
(D) 21:25</p>  <p>10. $\sum n^2$ is</p> <p>(A) $\frac{n(n+1)}{2}$
(B) $\frac{n(n+1)(2n+1)}{6}$
(C) $\left[\frac{n(n+1)}{2}\right]^2$
(D) None of these</p>  <p>11. Sum of infinite GP is 15 & sum of square of these term is 45. Find the common ratio. [June 2009]</p> <p>(A) $\frac{1}{2}$
(B) $\frac{1}{3}$
(C) $\frac{3}{4}$
(D) $\frac{2}{3}$</p>  |
|---|---|

COMPILATION OF PAST YEAR QUESTIONS

12. If first terms of AP is -4 & last term of AP is 146 then sum of its terms is 7171. Find the number of terms.

- (A) 100
- (B) 101
- (C) 80
- (D) 90



13. Insert two geometric means between $1/\sqrt{2}$ & 2

- (A) $\sqrt{2}, \frac{1}{2}$
- (B) $1, \sqrt{2}$
- (C) $\sqrt{2}, \frac{1}{\sqrt{2}}$
- (D) None of these



14. $1-1+1-1+1-1+1-1+\dots$ [Dec. 2009]

- (A) 0
- (B) $\frac{1}{2}$
- (C) 1
- (D) None of the above



15. If a_1, a_2, a_3 are in A.P. & $a_1 = 2$ What should be the common difference such that $(a_1 + a_2) a_3$ is min.

- (A) $\frac{5}{2}$
- (B) $-\frac{5}{2}$
- (C) $\frac{2}{5}$
- (D) $-\frac{2}{5}$



16. $1+4/5+7/5^2+10/5^3+\dots\infty$ [June 2010]

- (A) $\frac{23}{29}$
- (B) $\frac{35}{48}$
- (C) $\frac{35}{16}$
- (D) $\frac{23}{58}$



17. If Sum (S_n) of 'n' terms of an Arithmetic Progression is $(2n^2+n)$. What is the difference of its 10th and 1st term?

- (A) 40
- (B) 38
- (C) 36
- (D) 30

[June 2011]



18. Find the product of :

$(243), (243)^{1/6}, (243)^{1/36} \dots\infty$

- (A) 243
- (B) 81
- (C) 729
- (D) 256

[June 2011]



19. Insert two arithmetic means between 68 and 260 [June 2011, May 2018]

- (A) 132, 196
- (B) 120, 190
- (C) 152, 210
- (D) 145, 190



20. Geometric Mean of $P, P^2, P^3 \dots P^n$ will be:

- (A) $P^{\frac{n}{2}}$
- (B) $P^{\frac{n+1}{2}}$
- (C) P^n
- (D) P^{n+1}

[June 2011]



21. Find the number whose arithmetic mean is 12.5 and geometric mean is 10.

- (A) 12, 13
- (B) 5, 20
- (C) 10, 15
- (D) 4, 25

[Dec. 2011]



22. If sum of 3 arithmetic means between "a" and 22 is 42, then "a" is [Dec. 2011]

- (A) 5
- (B) 7
- (C) 6
- (D) 8



23. If each month Rs. 100 increases in any sum then find out the total sum after 10 month, if the sum of first month is Rs. 2,000

- (A) 22000
- (B) 22500
- (C) 23500
- (D) 24500

[Dec. 2011]



COMPILATION OF PAST YEAR QUESTIONS

24. The sum of all two digit odd numbers is
 (A) 2550 [Dec. 2011]
 (B) 2450
 (C) 2475
 (D) 2400
25. If 5th term of a G.P. is $(3)^{1/3}$, then the product of first nine terms is [Dec. 2011]
 (A) 27
 (B) 9
 (C) $\sqrt[3]{3}$
 (D) 3^9
26. The sum of the third and ninth term of an A.P. is 8. Find the sum of the first 11 term of the progression. [Dec. 2011]
 (A) 40
 (B) 41
 (C) 44
 (D) 48
27. In an A.P. if the 4th term is 3 times the first term and 7th term exceeds twice the 3rd term by 1 then the values of a and d are respectively. [June 2012]
 (A) 3, 4
 (B) 4, 3
 (C) 2, 3
 (D) 3, 2
28. If the 8th term of an A.P. is 15 then the sum of first 15 term is [June 2012]
 (A) 144
 (B) 169
 (C) 225
 (D) 361
29. Find the sum of the series $2, \frac{4}{y}, \frac{8}{y^2}, \frac{16}{y^3}, \dots \dots \infty$ given that $y > 2$ is [June 2012]
 (A) $\frac{y}{2-y}$
 (B) $\frac{y}{y-2}$
 (C) $\frac{2y}{y-2}$
 (D) $\frac{y}{2y-1}$

30. In an A.P. the common difference is 2 and sum of n terms is 49. Find n if 7th term is 13 [Dec. 2012]
 (A) 10
 (B) 8
 (C) 9
 (D) 7
31. If the sum of n terms is $2n^2 + 5n$ then is nth term is [Dec. 2012]
 (A) $4n+3$
 (B) $4n-3$
 (C) $2n+3$
 (D) $2n-3$
32. The first term of G.P. whose second term is 2 and sum to infinity is 8 will be [Dec. 2012]
 (A) 3
 (B) 4
 (C) 5
 (D) 6
33. In an A.P. If $S_n = 3n^2 - n$ and its common difference is '6' then first term is ____ [June 2013]
 (A) 2
 (B) 1
 (C) 3
 (D) 5
34. In an A.P. if the sum of 4th & 12th terms is '8' then sum of first 15 term is ____ [June 2013]
 (A) 75
 (B) 50
 (C) 48
 (D) 60
35. There are 'n' AMs between 7 & 71 and 5th AM is 27 then 'n' = ____ [June 2013]
 (A) 14
 (B) 16
 (C) 15
 (D) 20

COMPILATION OF PAST YEAR QUESTIONS


36. In a G.P. the 6th term is 729 and the common ratio is 3 then 1st term is _____

- (A) 3
(B) 6
(C) 9
(D) 18
- [June 2013]
- 

37. An AP has 13 terms whose sum is 143. The third term is 5, then first term is

- (A) 3
(B) 5
(C) 2
(D) 6
- [Dec. 2013]
- 


38. The value of $1^3 + 2^3 + 3^3 + \dots + n^3$ is equal to

- (A) $\frac{n(n+1)}{2}$
(B) $\left[\frac{n(n+1)}{2}\right]^2$
(C) $\frac{n(n-1)}{6}$
(D) None of these
- [June 2014]
- 

39. The sum of the infinite GP $1 + \frac{1}{3} + \frac{1}{9} + \frac{1}{27} + \dots \infty$ is equal to

- (A) $\frac{2}{3}$
(B) $\frac{3}{2}$
(C) $\frac{5}{3}$
(D) $\frac{4}{3}$
- [June 2014]
- 

40. The sum of m terms of the series is $1+11+111+\dots$ is equal to

- [June 2014 & 15, May 2018]
- (A) $\frac{1}{9} [10(10^n - 1) - \frac{n}{9}]$
(B) $\frac{1}{9} \left[\frac{10}{9} (10^n - 1) - n \right]$
(C) $\frac{1}{81} [10(10^n - 1) - n]$
(D) $\frac{1}{81} \left[\frac{10}{9} (10^n - 1) - n \right]$
- 


41. Sum of first n terms of an A.P. is $6n^2 + 6n$. Then find 4th term of series.

- (A) 42
(B) 46
(C) 48
(D) 50
- [Dec. 2014]
- 

42. In an A.P. If $S_n = n^2p$ and $S_m = m^2p$, ($m \neq n$) then $S_p =$

- (A) p^2
(B) p^3
(C) $2p^3$
(D) p^4
- [Dec. 2014]
- 

43. If the numbers x, y, z are in G.P. then the numbers $x^2 + y^2, xy + yz, y^2 + z^2$ are in _____

- (A) AP
(B) HP
(C) GP
(D) None of these
- 


44. In an A.P. if the 3rd term is 18, 7th term is 30 then the sum of first 20 terms is

- (A) 495
(B) 620
(C) 545
(D) 810
- [June 2015]
- 


45. The sum of n terms of an AP is $3n^2 + 5n$, which terms of AP is 164.

- [Dec. 2015]
- (A) 25
(B) 26
(C) 27
(D) 28
- 

46. Three numbers a, b, c are in A.P. find $a-b+$

- [Dec. 2015]
- (A) a
(B) b
(C) c
(D) $\frac{a+b}{2}$
- 

47. If $\frac{1}{b+c}, \frac{1}{c+a}, \frac{1}{a+b}$ are in Arithmetic Progression then a^2, b^2, c^2 are in _____

- [June 2016]
- (A) AP
(B) GP
(C) HP
(D) None of these
- 

COMPILATION OF PAST YEAR QUESTIONS

48. A G.P. (Geometric Progression) consists of $2n$ terms. If the sum of the terms occupying the odd places is S_1 and that of the terms in even places is S_2 , the common ratio of the progression is [June 2016]

- (A) $\frac{S_1}{S_2}$
- (B) $\frac{S_2}{S_1}$
- (C) $\frac{S_2^2}{S_1^2}$
- (D) $\sqrt{S_1 S_2}$



49. $2.353535 \dots =$ [Dec. 2016]

- (A) $\frac{233}{99}$
- (B) $\frac{237}{99}$
- (C) $\frac{235}{100}$
- (D) $\frac{235}{99}$



50. The number of terms of the series $50 + 45 + 40 + \dots$ To become zero [Dec. 2016]

- (A) 18
- (B) 19
- (C) 20
- (D) 21



51. A person received the salary for the 1st year is Rs. 5,00,000 per year and he received an increment of Rs. 15,000 per year than the sum of the salary he taken in 10 years.

- (A) 48,50,000 [Dec. 2016]
- (B) 50,30,000
- (C) 56,75,000
- (D) 60,20,000



52. If G be Geometric Mean between two numbers a and b , then the value of $\frac{1}{G^2 - a^2} + \frac{1}{G^2 - b^2}$ is equal to [Dec. 2010]

- (A) G^2
- (B) $3G^2$
- (C) $\frac{1}{G^2}$
- (D) $\frac{2}{G^2}$



53. If arithmetic mean between roots of a quadratic equation is 8 and the geometric mean between them is 5, the equation is _____. [June 2012]

- (A) $x^2 - 16x - 25 = 0$
- (B) $x^2 - 16x + 25 = 0$
- (C) $x^2 - 16x + 5 = 0$
- (D) None of these



54. If Geometric mean (G.M.) of a, b, c, d is 3, then G.M. of $\frac{1}{a}, \frac{1}{b}, \frac{1}{c}, \frac{1}{d}$ will be:

- (A) $\frac{1}{3}$ [Dec. 2013]
- (B) 3
- (C) 81
- (D) $\frac{1}{81}$



55. The arithmetic mean of the square of first $2n$ natural numbers is: [Dec. 2014]

- (A) $\frac{1}{6}(2n+1)(4n-1)$
- (B) $\frac{1}{6}(2n-1)(4n-1)$
- (C) $\frac{1}{6}(2n-1)(4n+1)$
- (D) $\frac{1}{6}(2n+1)(4n+1)$



56. If S be the sum, P the product and R is the sum of reciprocals of n -terms in G.P. then $P^2 R^n =$ _____. [June 2015]

- (A) S^{2n}
- (B) S^n
- (C) S^{-2n}
- (D) S^{-n}



57. Find the two numbers whose geometric mean is 5 and arithmetic mean in 7.5.

- (A) 10 and 5 [Dec. 2015]
- (B) 13.09 and 1.91
- (C) 12 and 3
- (D) None of the above



COMPILATION OF PAST YEAR QUESTIONS

58. The sum of n terms of the series $\log x + \log \frac{x^2}{y} + \log \frac{x^3}{y^2} + \dots$ is [June 2016]

(A) $\frac{n}{2} \left[2n \log \left(\frac{x}{y} \right) + \log xy \right]$

(B) $\frac{n}{2} \left[n \log xy + \log \left(\frac{x}{y} \right) \right]$

(C) $\frac{n}{2} \left[n \log \left(\frac{x}{y} \right) - \log xy \right]$

(D) $\frac{n}{2} \left[n \log \left(\frac{x}{y} \right) + \log xy \right]$



59. The sum of n terms of the series $1 + (1 + 3) + (1 + 3 + 5) + \dots$ is [June 2017]

(A) $\frac{n(n+1)(2n-1)}{6}$

(B) $\frac{n(n+1)(n+2)}{6}$

(C) $\frac{n(n+1)(2n+1)}{3}$

(D) None of these



60. The sum of first 20 terms of a GP is 1025 times the sum of first 10 terms of same GP then common ratio is: [June 2017]

(A) $\sqrt{2}$

(B) 2

(C) $2\sqrt{2}$

(D) $\frac{1}{2}$



61. The value C such that $a, -3, b, 5, c$ are in A.P. is:

(A) -7

(B) 1

(C) 13

(D) 9

[June 2017]



62. The sum of all numbers between 100 and 1000 which are divisible by 11 will be:

(A) 44550

(B) 66770

(C) 55440

(D) 33440

[Dec. 2017]



63. A person pays Rs. 975 in monthly instalments, each instalment is less than former by Rs. 5. The amount of 1st instalment is Rs. 100. In what time will the entire amount be paid? [May 2018]

(A) 26 months

(B) 15 months

(C) Both (A) and (B)

(D) 18 months



64. If the sum of n terms of an AP is $(3n^2 - n)$ and its common difference is 6, then its first term is: [May 2018]

(A) 3

(B) 2

(C) 4

(D) 1



65. If the P^{th} term of an A.P. is 'q' and the q^{th} term is 'p', then its r^{th} term is

(A) $p + q - r$

(B) $p + q + r$

(C) $p - q - r$

(D) $p - q$

[Nov. 2018]



66. The 3rd term of a G.P. is $\frac{2}{3}$ and the 6th term is $\frac{2}{81}$, then the 1st term is

(A) 6

(B) $\frac{1}{3}$

(C) 9

(D) 2

[Nov. 2018]



67. The sum of the series $-8, -6, -4, \dots, n$ terms is 52. The number of terms n is

(A) 11

(B) 12

(C) 13

(D) 10

[Nov. 2018]



COMPILATION OF PAST YEAR QUESTIONS

68. The value of K, for which the terms $7K + 3$, $4K - 5$, $2K + 10$ are in A.P., is

- (A) 13 [Nov. 2018]
- (B) -13
- (C) 23
- (D) -23



69. If the ratio of sum of n terms of two Aps is $(n + 1) : (n - 1)$, then the ratio of their mth terms is: [June 2019]

- (A) $(m + 1) : 2m$
- (B) $(m + 1) : (m - 1)$
- (C) $(2m - 1) : (m + 1)$
- (D) $m : (m - 1)$



70. In a G.P. If the fourth term is '3' then the product of first seven terms is

- (A) 3^5 [June 2019]
- (B) 3^7
- (C) 3^6
- (D) 3^8



71. If $2 + 6 + 10 + 14 + 18 + \dots + x = 882$ then the value of x [June 2019]

- (A) 78
- (B) 80
- (C) 82
- (D) 86



72. If $y = 1 + x + x^2 + \dots + \infty$ then $x =$

- (A) $\frac{y-1}{y}$ [June 2019]
- (B) $\frac{y+1}{y}$
- (C) $\frac{y}{y+1}$
- (D) $\frac{y}{y-1}$



73. If $\frac{(b+c-a)}{a}, \frac{(c+a-b)}{b}, \frac{(a+b-c)}{c}$ are in AP then a, b, c are in: [Nov. 2019]

- (A) AP
- (B) GP
- (C) HP
- (D) None



74. Sum upto infinity of series $\frac{1}{2} + \frac{1}{3^2} + \frac{1}{2^3} + \frac{1}{3^4} + \frac{1}{2^5} + \dots$ [Nov. 2019]

- (A) $\frac{19}{24}$
- (B) $\frac{24}{19}$
- (C) $\frac{5}{24}$
- (D) None



75. Sum the series $\frac{1}{5} + \frac{1}{5^2} + \frac{1}{5^3} + \dots + \frac{1}{5^n}$.

- (A) $\frac{1}{4} \left[1 - \left(\frac{1}{5} \right)^n \right]$
- (B) $\frac{1}{5} \left[1 - \left(\frac{1}{4} \right)^n \right]$
- (C) Both
- (D) None



76. Find the no. of terms of the series 25, 5, 1, $\frac{1}{3125}$ [Nov. 2019]

- (A) 6
- (B) 7
- (C) 8
- (D) 9



77. If the sum of five terms of AP is 75. Find the third term of the series [Nov. 2019]

- (A) 35
- (B) 30
- (C) 15
- (D) 20



COMPILATION OF PAST YEAR QUESTIONS

78. If the AM and GM of two numbers is 6.5 and 6 the no.'s are: [Nov. 2019]

- (A) 3 and 2
- (B) 9 and 4
- (C) 81 and 16
- (D) None



79. If AM and HM for two numbers are 5 and 3.2, respectively. GM will be: [Nov. 2019]

- (A) 20
- (B) 16
- (C) 4
- (D) 5



80. Three numbers in G.P. with their Sum 130 and their product 27,000 are: [Nov.2020]

- (A) 10, 30, 90
- (B) 90, 30, 10
- (C) (A) and (B) both
- (D) 10, 20, 30



81. The 20th term of arithmetic progression whose 6th term is 38 and 10th term is 66 is: [Nov. 2020]

- (A) 118
- (B) 136
- (C) 178
- (D) 210



82. Divide 69 into 3 parts which are in A.P. and are such that the product of first two parts is 460: [Nov. 2020]

- (A) 20, 23, 26
- (B) 21, 23, 25
- (C) 19, 23, 27
- (D) 22, 23, 24



83. The n^{th} terms of the series $3 + 7 + 13 + 21 + 31 + \dots$ is [Jan. 2021]

- (A) $4n - 1$
- (B) $n^2 + 2n$
- (C) $n^2 + n + 1$
- (D) $n^3 + 2$



84. In a geometric progression the 3rd and 6th terms are respectively 1 and $-\frac{1}{8}$.

The first term (a) and common ratio are respectively. [Jan. 2021]

- (A) 4 and $\frac{1}{2}$
- (B) 4 and $\frac{-1}{4}$
- (C) 4 and $\frac{-1}{2}$
- (D) 4 and $\frac{1}{4}$



85. The sum of three numbers in a geometric progression is 28. When 7, 2 and 1 are subtracted from the first, second and the third numbers respectively, then the resulting numbers are in arithmetic progression. What is the sum of squares of the original three numbers? [July 2021]

- (A) 510
- (B) 456
- (C) 400
- (D) 336



86. The number of terms of the series: $5 + 7 + 9 + \dots$ must be taken so that the sum may be 480. [July 2021]

- (A) 20
- (B) 10
- (C) 15
- (D) 25



87. If the sum of 'n' terms of an AP (Arithmetic Progression) is $2n^2$, the fifth term is _____. [July 2021]

- (A) 20
- (B) 50
- (C) 18
- (D) 25



88. If the sum and product of three numbers in G.P. are 7 and 8 respectively, then 4th term of the series is [Dec. 2021]

- (A) 6
- (B) 4
- (C) 8
- (D) 16



COMPILATION OF PAST YEAR QUESTIONS

89. The sum of series $7 + 14 + 21 + \dots$ to 17th term is: [Dec. 2021]

- (A) 1071
- (B) 971
- (C) 1171
- (D) 1271



90. The sum of first n terms an AP is $3n^2 + 5n$. The series is: [Dec. 2021]

- (A) 8, 14, 20, 26,
- (B) 8, 22, 42, 68,
- (C) 22, 68, 114,
- (D) 8, 14, 28, 44,



91. The largest value of n for which $\frac{1}{2} + \frac{1}{2^2} + \dots + \frac{1}{2^n} < 0.998$ is [Dec. 2021]

- (A) 9
- (B) 6
- (C) 7
- (D) 8



COMPILATION OF PAST YEAR QUESTIONS

ANSWER KEY

1.	B	2.	A	3.	D	4.	C	5.	A
6.	C	7.	B	8.	B	9.	C	10.	B
11.	D	12.	B	13.	B	14.	B	15.	B
16.	C	17.	C	18.	C	19.	A	20.	B
21.	B	22.	C	23.	D	24.	C	25.	A
26.	C	27.	D	28.	C	29.	C	30.	D
31.	A	32.	B	33.	A	34.	D	35.	C
36.	A	37.	C	38.	B	39.	B	40.	B
41.	C	42.	B	43.	C	44.	D	45.	C
46.	B	47.	A	48.	B	49.	A	50.	D
51.	C	52.	C	53.	B	54.	A	55.	D
56.	B	57.	B	58.	D	59.	A	60.	B
61.	D	62.	A	63.	B	64.	B	65.	A
66.	A	67.	C	68.	D	69.	D	70.	B
71.	C	72.	A	73.	C	74.	A	75.	A
76.	C	77.	C	78.	B	79.	C	80.	C
81.	B	82.	A	83.	C	84.	C	85.	D
86.	A	87.	C	88.	D	89.	A	90.	A
91.	D								

COMPILATION OF PAST YEAR QUESTIONS

(This is Vidhyoday's unique compilation of past attempts CA-F/CPT questions asked under Maths/Stats section.)

CHAPTER - 7 SET, FUNCTIONS & RELATIONS

- | | |
|--|--|
| <p>1. $x^2 + y^2 = 1$ is which type of relation?
 (A) Symmetric
 (B) Asymmetric
 (C) Linear
 (D) None of these</p> <p>2. $F(x) = 2x^3 + 4$, find $f^{-1}(6)$
 (A) $\frac{1}{2}$
 (B) 1
 (C) -1
 (D) $\frac{-1}{2}$</p> <p>3. Reversible function is
 (A) Infective
 (B) Subjective
 (C) Bijective
 (D) One-one</p> <p>4. $F(x) = x^2 + 7$, find $f[f(x)] = ?$
 (A) $x^4 + 7x^2 + 50$
 (B) $x^4 + 14x^2 + 50$
 (C) $x^4 + 7x^2 + 56$
 (D) $x^4 + 14x^2 + 56$</p> <p>5. $F(x) = 2x, g(x) = x^2 + 2$ find $fog(2) = ?$
 (A) 9
 (B) 10
 (C) 12
 (D) 15</p> <p>6. $F(x) = x^2, g(x) = x^2 + 5$ find fog
 (A) $x^4 + 10x^2 + 25$
 (B) $x^4 + 10x^2 + 20$
 (C) $x^4 + x^2 + 25$
 (D) $x^4 + 4x^2 + 24$</p> | <p>7. If $x \in N; N = \text{Natural Numbers}$ & $x^2 = 1$ then no. of element in set x is
 (A) One
 (B) Two
 (C) Four
 (D) None of these</p> <p>8. $G(x) = \frac{1}{1-x}; f(x) = \frac{(x-1)}{x}$ find $fog = ?$
 (A) $\frac{1}{x}$ [June 2017]
 (B) x
 (C) $\frac{1}{x-1}$
 (D) 1-x</p> <p>9. Out of the following the Expression to denote only one is
 (A) 'AUB'
 (B) A-B
 (C) $(A-B) \cap (B-A)$
 (D) $(A-B) \cup (B-A)$</p> <p>10. If $f(x) = 2x + 1, g(x) = x^2 - 2$ then $gof(3)$ is
 (A) 5
 (B) 15
 (C) 47
 (D) None of these</p> <p>11. $y = \frac{(2-x)}{2+x}$ find $f^{-1}(x)$
 (A) $\frac{1-x}{1+x}$
 (B) $\frac{2(1-x)}{1+x}$
 (C) $\frac{1+x}{1-x}$
 (D) $\frac{2(1+x)}{1-x}$</p> <p>12. $A = \{a, b, c\}, B = \{p, q, r\}, C = \{q, r, t\}$ $B \cup C - A = ?$
 (A) $\{p, q, r\}$
 (B) $\{a, b, c\}$
 (C) $\{a, b, p, q\}$
 (D) $\{p, q, r, t\}$</p> |
|--|--|

13. If $x = 1, 2, 3$ $Y = 4, 5, 6$ on a \rightarrow b mapping
 $f(1) = 4, f(2) = 5, f(3) = 6$ find $f^{-1}(x)$

- (A) $x+3$
- (B) $3-x$
- (C) $x-3$
- (D) $\frac{x+3}{2}$



14. $x^2 + x - 1 = f(x), 4f(x) = f(2x)$ find x

- (A) $\frac{2}{3}$
- (B) $\frac{3}{2}$
- (C) $\frac{-4}{3}$
- (D) $\frac{-3}{2}$



15. If there are total 40 people, out of which 25 know oracle, 28 know java & 7 know none Languages then how many people know both the languages.

- (A) 18
- (B) 22
- (C) 20
- (D) 15



16. What is $[(A \cup B) - B] \cap C$

- (A) $A \cap C$
- (B) $(A-B) \cap C$
- (C) $(A-C) \cap B$
- (D) $A-B$



17. Domain of function $y = \sqrt{x-a}$ is

- (A) $[a, \infty)$
- (B) (a, ∞)
- (C) $(-\infty, a)$
- (D) $(-\infty, a]$



18. $F(x) = 2x + 3$ then $f(2x) - 2f(x) + 3$ is

- (A) 1
- (B) 0
- (C) 2
- (D) 3

[Dec. 2009]



19. If $A = \{1, 2, 3, 4, 5\}, B = \{x, y, z, k\}$ then
 $C = \{(x,1), (y, 2), (y, 3), (z, x)\}$ is

- (A) A function
- (B) A relation
- (C) Not a function
- (D) None of these



20. $A = \{x, x^2 - 3x + 2 = 0\},$
 $B = \{x, x^2 + 4x - 12 = 0\}$
what is $B - A = ?$

[June 2010]

- (A) $\{-6, 2\}$
- (B) $\{2\}$
- (C) $\{-6\}$
- (D) $\{ \}$



21. If the relation is defined as $A \rightarrow R$ as $f(x) = 1/x$ the value of A will be

[June 2010]

- (A) All real number
- (B) All integers
- (C) All real number except 0
- (D) All integers except 0



22. $F(x) = x + 1, g(x) = x^2 + 1, fog(-2) = ?$

- (A) 4
- (B) 6
- (C) 8
- (D) 10



23. If $f(x-1) = x^2 - 4x + 8$ find $f(x+1) = ?$

- (A) x^2
- (B) $x^2 - 4$
- (C) $x^2 + 4$
- (D) $x^2 + 1$



24. There are 40 students, 30 of them passed in English, 25 of them passed in Maths and 15 of them passed in both. Assuming that every student has passed at least in one subject. How many student passed in English only but no in Maths?

[June 2011]

- (A) 15
- (B) 10
- (C) 12
- (D) 14



COMPILATION OF PAST YEAR QUESTIONS

25. If $A = (\pm 2, \pm 3)$, $B = (4, 9)$ and $F = \{(2, 4), (-2, 4), (3, 9), (-3, 9)\}$ then F is defined as: [June 2011]
- (A) One-one function
(B) onto function
(C) Into function
(D) None of these
26. $F(x) = \frac{x}{\sqrt{1+x^2}}$ and $G(x) = \frac{x}{\sqrt{1-x^2}}$ find fog? [June 2011]
- (A) x^2
(B) $\frac{1}{x^2}$
(C) $\frac{1}{x}$
(D) x
27. $F(x) = 3 + x$, for $-3 < x < 0$ and $3 - 2x$ for $0 < x < 3$, then the value of $f(2)$ will be [Dec. 2011]
- (A) 5
(B) -1
(C) Either (A) or (B)
(D) Neither (A) nor (B)
28. If $A = (1, 2, 3, 4, 5)$, $B = (2, 4)$ and $C = (1, 3, 5)$ then $(A-C) \times B$ is [Dec. 2011]
- (A) $\{(2, 2) (2, 4) (4, 2) (4, 4)\}$
(B) $\{(2, 3) (3, 2) (2, 4) (4, 2)\}$
(C) $\{(2, 2) (4, 2) (4, 4)\}$
(D) $\{(2, 2) (2, 4) (4, 2)\}$
29. For any two sets A and B the set $(A \cup B)$ is equal to (where denotes compliments of the set) [Dec. 2011]
- (A) $A - B$
(B) $B - A$
(C) $A \cap (B - A)$
(D) $(A - B) \cap B$
30. The number of proper sub set of the set $\{3, 4, 5, 6, 7\}$ is [June 2012]
- (A) 32
(B) 31
(C) 30
(D) 15

31. On the set of lines in a plane the relation "is perpendicular to" is [June 2012]
- (A) Reflexive
(B) Symmetric
(C) Transitive
(D) Equivalence
32. The range of the function $f: \mathbb{N} \rightarrow \mathbb{N}$ defined by $f(x) = (-1)^{x-1}$ is [June 2012]
- (A) $\{1\}$
(B) $\{0\}$
(C) $\{0, 1\}$
(D) $\{-1, 1\}$
33. The minimum value of the function $f(x) = x^2 - 6x + 10$ is [June 2012]
- (A) 0
(B) -1
(C) 1
(D) 2
34. In a group of 200 people. 100 are interested in music, 70 in photography and 40 in swimming. 40 are interested in both music and photography, 30 in music and swimming, 20 in photography and swimming and 10 in all the three. How many are interested in photography but not in music or swimming? [Dec. 2012]
- (A) 18
(B) 20
(C) 22
(D) 25
35. If $f: \mathbb{R} \rightarrow \mathbb{R}$ is a function defined by $f(x) = 10x - 7$ and $g(x) = f^{-1}(x)$ then $g(x)$ is equal to [Dec. 2012]
- (A) $10(x-7)$
(B) $\frac{x+7}{10}$
(C) $\frac{x+10}{7}$
(D) $7(x+10)$

COMPILATION OF PAST YEAR QUESTIONS

36. The number of elements in range of constant function is [Dec. 2012]

- (A) Zero
- (B) Two
- (C) One
- (D) Infinite



37. If $f(x) = x + 2$, $g(x) = 7^x$ then $g \circ f(x) =$

- (A) $7^x + 2$ [June 2013]
- (B) $7(x+2)$
- (C) 7^{x+2}
- (D) None of these



38. If $A = \{1, 2, 3\}$ then the relation $R = \{(1, 1), (2, 3), (2, 2), (3, 3), (1, 2)\}$ on A is:

- (A) Reflexive [June 2013]
- (B) Symmetric
- (C) Transitive
- (D) Equivalence



39. Of the 200 candidates who were interviewed for a position at call center, 100 had a two wheeler, 70 had a credit card and 140 had a mobile phone. 40 of them had both a two wheeler and a credit card, 30 had both a credit card and mobile phone, 60 had both a two wheeler and a mobile phone and 10 had all the three. How many candidates had none of them? [Dec. 2013]

- (A) 20
- (B) 10
- (C) 30
- (D) 0



40. $F(x) = (a - x^n)^{\frac{1}{n}}$, $a > 0$ and n is positive integer then $f[f(x)] =$ [Dec. 2013]

- (A) a^n
- (B) x^n
- (C) a
- (D) x



41. In a class of 50 students, 35 opted for maths, 37 opted for commerce. The number of such students who opted for both maths and commerce is [June 2014]

- (A) 12
- (B) 2
- (C) 22
- (D) 15



42. The range of a relation $\{(1, 0), (2, 0), (3, 0), (4, 0), (0, 0)\}$ is

- (A) $\{0, 1, 2, 3\}$ [June 2014]
- (B) $\{0\}$
- (C) $\{1, 2, 3, 4\}$
- (D) $\{0, 1, 2\}$



43. There were 200 employees in an office in which 150 were married. Total male employees were 160 out of which 120 were married. What was the number of female unmarried employees?

- (A) 20 [June 2014]
- (B) 10
- (C) 5
- (D) None of these



44. $A = \{2, 3\}$, $B = \{4, 5\}$, $C = \{5, 6\}$ then $A \times (B \cap C)$ [Dec. 2014]

- (A) $\{(2, 5) (3, 5)\}$
- (B) $\{(3, 4) (4, 5)\}$
- (C) $\{(2, 4) (4, 5)\}$
- (D) $\{(3, 4) (5, 6)\}$



45. $F(x) = \frac{x}{x-1}$, then $\frac{f(\frac{x}{y})}{f(\frac{y}{x})}$ [Dec. 2014]

- (A) $\frac{-y}{x}$
- (B) $\frac{-x}{y}$
- (C) $\frac{y}{x}$
- (D) $\frac{x}{y}$



46. If N is the set of all natural numbers, E is the set of all even natural numbers and $f: N \rightarrow E$ defined By $f(x) = 2x, x \in N$ then f is

[Dec. 2014, June 2015 & May 2018]

- (A) One - one
- (B) Onto
- (C) One-one, onto
- (D) Into



COMPILATION OF PAST YEAR QUESTIONS

47. The distribution function of a random variable x be $f(x) = p(x \leq x)$ then $f(5) - f(2)$

- (A) $f(4) + f(5)$
- (B) $f(3) + f(4) + f(5)$
- (C) $f(3) + f(4)$
- (D) $f(4)$



48. Which of these is a function from $A \rightarrow B$ $A = \{x, y, z\}$, $B = \{a, b, c, d\}$: [Dec. 2015]

- (A) $\{(x, a), (x, b), (y, c)\}$
- (B) $\{(x, a), (y, b), (z, d)\}$
- (C) $\{(x, a), (x, b), (y, c), (z, d)\}$
- (D) $\{(a, x), (b, z), (c, y)\}$



49. $F(x) = 2x + 2$, $g(x) = x^2$, $f \circ g(4) = ?$

- (A) 24 [Dec. 2015]
- (B) 30
- (C) 34
- (D) 40



50. In a class of 80 students, 35% play only cricket, 45% only Tennis, How many play Cricket? [Dec. 2015]

- (A) 55
- (B) 44
- (C) 33
- (D) 30



51. If set $A = \{ \frac{x}{2} \mid x \in z, 0 \leq z \leq 10 \}$

$B = \{x : x \text{ as one digit prime number}\}$

and $C = \{x : \frac{x}{2} \in z, 0 \leq x \leq 12\}$ then

$A \cap (B \cap C)$ [June 2016]

- (A) $\{0, 2\}$
- (B) $\{2\}$
- (C) $\{0\}$
- (D) $\{ \}$



52. The domain (D) and range (r) of the function $f(x) = 2 - |x - 1|$ is

- (A) Real Nos., Real Nos. [June 2016]
- (B) Real Nos., $(2, \infty)$
- (C) Real Nos., $(-\infty, 2)$
- (D) None of these



53. If $F(x) = 100x$ then $f^{-1}(x) =$

- (A) $\frac{100}{x}$ [Dec. 2016]
- (B) $100x$
- (C) x^{100}
- (D) 100^x



54. $F : R \rightarrow R$ is defined by $f(x) = 2^x$ then f is

- (A) One-one [Dec. 2016]
- (B) Many-one
- (C) Many-many
- (D) One-many



55. The number of subsets formed from the letters of the word "ALLAHABAD".

- (A) 2^9 [Dec. 2016]
- (B) 2^5
- (C) 2^6
- (D) $2^9 - 1$



56. $X = \{x, y, w, z\}$, $Y = \{1, 2, 3, 4\}$

$H = \{(x, 1), (y, 2), (y, 3), (z, 4), (x, 4)\}$

[Dec. 2009]

- (A) H is a function from X to Y
- (B) H is not a function from X to Y
- (C) H is a relation from Y to X
- (D) None of the above



57. If $f(x) = 2x + h$ then find $f(x + h) - 2f(x)$

- (A) $h - 2x$ [Dec. 2009]
- (B) $2x - h$
- (C) $2x + h$
- (D) None of these



58. In the set N of all natural numbers the relation R defined by $a R b$ "if and only if, a divide b", then the relation R is:

[Dec. 2009]

- (A) Partial order relation
- (B) Equivalence relation
- (C) Symmetric relation
- (D) None of these



59. For any two sets A and B, $A \cap (A' \cup B) =$ _____, where A' represent the compliment of the set A [Dec. 2010]

- (A) $A \cap B$
- (B) $A \cup B$
- (C) $A' \cup B$
- (D) None of these



60. If $f: \mathbb{R} \rightarrow \mathbb{R}, f(x) = x + 1,$

$$g: \mathbb{R} \rightarrow \mathbb{R} \quad g(x) = x^2 + 1$$

then $f \circ g(-2)$ equals to [Dec. 2010]

- (A) 6
- (B) 5
- (C) -2
- (D) None



61. If $A \subset B$, then which one of the following is true [Dec. 2010]

- (A) $A \cap B = B$
- (B) $A \cup B = B$
- (C) $A \cap B = A'$
- (D) $A \cap B = \emptyset$



62. If $f(x-1) = x^2 - 4x + 8$, then $f(x+1) =$ _____ [Dec. 2010]

- (A) $x^2 + 8$
- (B) $x^2 + 7$
- (C) $x^2 + 4$
- (D) $x^2 - 4x$



63. If $f(x) = \log\left(\frac{1+x}{1-x}\right)$, then $f\left(\frac{2x}{1+x^2}\right)$ is equal to: [June 2013]

- (A) $f(x)$
- (B) $2f(x)$
- (C) $3f(x)$
- (D) $-f(x)$



64. If $f(x) = \frac{x^2 - 25}{x - 5}$, then $f(5)$ is [Dec. 2013]

- (A) 0
- (B) 1
- (C) 10
- (D) Not defined



65. Let $A = \{1, 2, 3\}$ and $B = \{6, 4, 7\}$. Then, the relation $R = \{(2, 4), (3, 6)\}$ will be:

[June 2014]

- (A) Function from A to B
- (B) Function from B to A
- (C) Both A and B
- (D) Not a function



66. If $S = \{1, 2, 3\}$ then the relation $\{(1, 1), (2, 2), (1, 2), (2, 1)\}$ is symmetric and [Dec. 2014]

- (A) Reflexive but not transitive
- (B) Reflexive as well as transitive
- (C) Transitive but not reflexive
- (D) Neither transitive nor reflexive



67. Let A be the set of squares of natural numbers and let $x \in A, y \in A$ then

[June 2016]

- (A) $X + Y \in A$
- (B) $X - Y \in A$
- (C) $\frac{X}{Y} \in A$
- (D) $xy \in A$



68. The range of function f defined by $f(x) = \frac{x}{x^2 + 1}$ is: [June 2017]

- (A) $\left\{x: \frac{-1}{2} < x < \frac{1}{2}\right\}$
- (B) $\left\{x: \frac{-1}{2} \leq x < \frac{1}{2}\right\}$
- (C) $\left\{x: \frac{-1}{2} \leq x \leq \frac{1}{2}\right\}$
- (D) $\left\{x: x > \frac{1}{2} \text{ or } x < \frac{-1}{2}\right\}$



69. In a group of students 80 can speak Hindi, 60 can speak English and 40 can speak English and Hindi both, then number of students is: [June 2017]

- (A) 100
- (B) 140
- (C) 180
- (D) 60



70. If $f(x) = \frac{x+1}{x+2}$, then $f\left\{f\left(\frac{1}{x}\right)\right\} =$ _____.

- (A) $\frac{2x+3}{3x+5}$ [Dec. 2017]
- (B) $\frac{2x+5}{3x+2}$
- (C) $\frac{3x+2}{5x+3}$
- (D) $\frac{5x+2}{2x+3}$



71. In a town of 20,000 families it was found that 40% families buy newspaper. A, 20% families buy newspaper B and 10% families buy newspaper C, 5% families buy A and B, 3% buy B and C and 4% buy A and C if 2% families buy all the three newspapers, then the number of families which buy A only is:

- (A) 6600 [May 2018]
- (B) 6300
- (C) 5600
- (D) 600



72. The numbers of proper sub set of the set {3, 4, 5, 6, 7} is: [May 2018]

- (A) 32
- (B) 31
- (C) 30
- (D) 25



73. A is {1,2,3,4} and B is {1,4,9,16,25} if a function f is defined from set A to B where $f(x) = x^2$ then the range of f is:

- (A) {1,2,3,4} [Nov. 2018]
- (B) {1,4,9,16}
- (C) {1,4,9,16,25}
- (D) None of these



74. If $A = \{1,2,3,4,5,6,7\}$ and $B = \{2,4,6,8\}$. Cardinal number of $A - B$ is: [Nov. 2018]

- (A) 4
- (B) 3
- (C) 9
- (D) 7



75. If $A = \{1, 2, 3, 4, 5, 6, 7, 8, 9\}$
 $B = \{1, 3, 4, 5, 7, 8\};$
 $C = \{2, 6, 8\}$ then find $(A - B) \cup C$

- (A) {2, 6} [June 2019]
- (B) {2, 6, 8}
- (C) {2, 6, 8, 9}
- (D) None



76. $A = \{1, 2, 3, 4, \dots, 10\}$ a relation on A, $R = \{(x, y)/x + y = 10, x \in A, Y \in A, x \geq Y\}$ then domain of R^{-1} is [June 2019]

- (A) {1, 2, 3, 4, 5}
- (B) {0, 3, 5, 7, 9}
- (C) {1, 2, 4, 5, 6, 7}
- (D) None



77. The no. of subsets of the set {3, 4, 5} is:

- (A) 4 [June 2019]
- (B) 8
- (C) 16
- (D) 32



78. If $f(x) = x^2$ and $g(x) = \sqrt{x}$ then

- (A) $g \circ f(3) = 3$ [June 2019]
- (B) $g \circ f(-3) = 9$
- (C) $g \circ f(9) = 3$
- (D) $g \circ f(-9) = 3$



79. If $A = \{a, b, c, d\}; B = \{p, q, r, s\}$ which of the following relation is a function from A to B [June 2019]

- (A) $R_1 = \{(a,p),(b,q),(c,s)\}$
- (B) $R_2 = \{(p,a),(b,r),(d,s)\}$
- (C) $R_3 = \{(b,p),(c,s),(b,r)\}$
- (D) $R_4 = \{(a,p),(b,r),(c,q),(d,s)\}$



COMPILATION OF PAST YEAR QUESTIONS

80. $(A')' = ?$ [Nov. 2019]
 (A) A
 (B) A'
 (C) ϕ
 (D) None of these
81. $f(n) = f(n - 1) + f(n - 2)$ when $n = 2, 3, 4$ $f(0) = 0, f(1) = 1$ then $f(7) = ?$ [Nov. 2019]
 (A) 3
 (B) 5
 (C) 8
 (D) 13
82. $f(x) = \frac{x+1}{x}$ find $f^{-1}(x)$ [Nov. 2019]
 (A) $\frac{1}{(x-1)}$
 (B) $\frac{1}{(y-1)}$
 (C) $\frac{1}{y} - 1$
 (D) X
83. Two finite sets respectively have x and y number of elements. The total number of subsets of the first is 56 more than the total number of subsets of the second. The value of x and y respectively. [Nov.2020]
 (A) 6 and 3
 (B) 4 and 2
 (C) 2 and 4
 (D) 3 and 6
84. The number of items in the set A is 40; in the set B is 32; in the set C is 50; in both A and B is 4, in both A and C is 5; in both B and C is 7 in all the sets 2. How many are in only one set? [Nov. 2020]
 (A) 110
 (B) 65
 (C) 108
 (D) 84

85. The set of cubes of the natural number is: [Nov. 2020]
 (A) A null set
 (B) A finite set
 (C) An infinite set
 (D) A finite set of three numbers
86. The inverse function f^{-1} of $f(y) = 3y$ is: [Nov. 2020]
 (A) $\frac{1}{3y}$
 (B) $\frac{y}{3}$
 (C) $-3y$
 (D) $\frac{1}{y}$
87. The set of cubes of natural number is [Jan. 2021]
 (A) Null set
 (B) A finite set
 (C) An infinite set
 (D) Singleton Set
88. In the set of all straight lines on a plane which of the following is Not 'TRUE'? [Jan. 2021]
 (A) Parallel to an equivalence relation
 (B) Perpendicular to is a symmetric relation
 (C) Perpendicular to is an equivalence relation
 (D) Parallel to a reflexive relation
89. Let $F : R \rightarrow R$ be defined by

$$f(x) = \begin{cases} 2x & \text{for } x > 3 \\ x^2 & \text{for } 1 < x \leq 3 \\ 3x & \text{for } x \leq 1 \end{cases}$$
 The value of $f(-1) + f(2) + f(4)$ is [Jan.2021]
 (A) 9
 (B) 14
 (C) 5
 (D) 6

90. The number of integers from 1 to 100 which are neither divisible by 3 nor by 5 nor by 7 is

- (A) 67 [Jan. 2021]
 (B) 55
 (C) 45
 (D) 33



91. The range of the function F defined by $f(x) = \sqrt{16 - x^2}$ is [July 2021]

- (A) $[-4, 0]$
 (B) $[-4, 4]$
 (C) $[0, 4]$
 (D) $[+4, 4]$



92. Let $A = R - (3)$ and $B = R - (1)$.
 Let $f(x) \rightarrow B$ defined by $f(x) = \frac{x-2}{x-3}$.

What is the value of $f^{-1}\left(\frac{1}{2}\right)$? [July 2021]

- (A) $\frac{2}{3}$
 (B) $\frac{3}{4}$
 (C) 1
 (D) -1



93. If $f(x) = x^2 - 1$ and $g(x) = |2x + 3|$, then $f \circ g(3) - g \circ f(-3) = ?$ [July 2021]

- (A) 71
 (B) 61
 (C) 41
 (D) 51



94. Let U be the universal set, A and B are the subsets of U . If $n(U) = 650$, $n(A) = 310$, $n(A \cap B) = 95$ and $n(B) = 190$, then $n(\overline{A \cap B})$ is equal to (\overline{A} and \overline{B} are the complement of A and B respectively):

- (A) 400 [July 2021]
 (B) 200
 (C) 300
 (D) 245



95. Out of a group of 20 teachers in a School, 10 teach Mathematics, 9 teach Physics and 7 teach Chemistry. 4 teach Mathematics and Physics but none teach both Mathematics and Chemistry. How many teach Chemistry and Physics; how many teach only Physics?

- (A) 2, 3 [Dec. 2021]
 (B) 3, 2
 (C) 4, 6
 (D) 6, 4



96. If a is related to b if and only if the difference in a and b is an even integer. This relation is [Dec. 2021]

- (A) symmetric, reflexive but not transitive
 (B) symmetric, transitive but not reflexive
 (C) transitive, reflexive but not symmetric
 (D) equivalence relation



97. If $u(x) = \frac{1}{1-x}$, then $u^{-1}(x)$ is:

- (A) $\frac{1}{x-1}$
 (B) $1-x$
 (C) $1 - \frac{1}{x}$
 (D) $\frac{1}{x} - 1$



COMPILATION OF PAST YEAR QUESTIONS












ANSWER KEY

1.	A	2.	B	3.	C	4.	D	5.	C
6.	A	7.	A	8.	B	9.	D	10.	C
11.	B	12.	D	13.	C	14.	B	15.	C
16.	B	17.	A	18.	B	19.	C	20.	C
21.	C	22.	B	23.	C	24.	A	25.	B
26.	D	27.	B	28.	A	29.	B	30.	B
31.	B	32.	C	33.	C	34.	B	35.	B
36.	C	37.	C	38.	A	39.	B	40.	D
41.	C	42.	B	43.	B	44.	A	45.	B
46.	C	47.	B	48.	B	49.	C	50.	B
51.	B	52.	C	53.	A	54.	A	55.	B
56.	B	57.	A	58.	A	59.	B	60.	A
61.	A	62.	C	63.	B	64.	D	65.	D
66.	C	67.	D	68.	C	69.	A	70.	C
71.	A	72.	B	73.	B	74.	A	75.	C
76.	A	77.	B	78.	A	79.	D	80.	A
81.	D	82.	A	83.	A	84.	C	85.	C
86.	B	87.	C	88.	C	89.	A	90.	C
91.	B	92.	C	93.	B	94.	D	95.	A
96.	D	97.	C						

COMPILATION OF PAST YEAR QUESTIONS

(This is Vidhyoday's unique compilation of past attempts CA-F/CPT questions asked under Maths/Stats section.)

CHAPTER – 8 STATISTICAL DESCRIPTION OF DATA

1. Diagram for monthly household expenses on various items can be represented as
- (A) Bar graph
(B) Line graph
(C) Pie-chart
(D) Rectangular ban graph
- 
2. Income of person Mr. A 10,000, Mr. B 8,000, Mr. C 11,000, Mr. D 5,000, Mr. E 75,00 is which series
- (A) Individual
(B) Discrete
(C) Inclusive
(D) Exclusive
- 
3. Which of the following is a statistical data?
- (A) Ram is 50 years old
(B) Height of Ram is 5'6" and of Shyam and Hari 5'3" and 5'4" respectively.
(C) Height of Ram is 5'6" and weight is 90 kg
(D) Sale of A was more than B and C
- 
4. The mid value of Class are known as
- (A) Class length [June 2009]
(B) Class interval
(C) Class marks
(D) Class size
- 
5. If we plot two points "less than" and "more than" on frequency distribution then graph will be [Dec. 2009]
- (A) Histogram
(B) Pie-chart
(C) Frequency Curve
(D) Ogine
- 
6. Histogram helpful in finding [Dec. 2009]
- (A) AM
(B) GM
(C) Mode
(D) Median
- 
7. Ogive is useful in calculating [June 2010]
- (A) Quartile
(B) Median
(C) Both (A) & (B)
(D) None of these
- 
8. For a classification to be adequate
- (i) Classes should be of equal width
(ii) Classes should be exhaustive
(iii) Classes should be unambiguously defined
- (A) Only (ii)
(B) Both (i) & (ii)
(C) Both (ii) & (iii)
(D) All of three
- 
9. Data collected from internet is
- (A) Primary Data [Dec. 2010]
(B) Secondary Data
(C) Statistical Data
(D) Time Series
- 
10. The point where the two ogines intersect is called [June 2011]
- (A) 1st Quartile
(B) 2nd Quartile
(C) 3rd Quartile
(D) 4th Quartile
- 
11. Frequency Density can be termed as: [June 2011 & 17, Dec. 2017]
- (A) $\frac{\text{Freq. of class}}{\text{Class Marks}}$
(B) $\frac{\text{Freq. of class}}{\text{Class width}}$
(C) $\frac{\text{Freq. of class}}{\text{Total freq.}}$
(D) None of these
- 

COMPILATION OF PAST YEAR QUESTIONS

12. The Chronological classification of data are classified on the basis of: [June 2011]

- (A) Size
- (B) Importance
- (C) Time
- (D) Height



13. Arrange the following dimension wise: Pie-diagram, Bar-diagram and Cubic diagram. [Dec. 2009 & June 2011]

- (A) PD, BD, CD
- (B) BD, PD, CD
- (C) PD, CD, BD
- (D) CD, PD, BD



14. The frequency of class 20-30 in the following data is [Dec. 2011]

Class	0-10	10-20	20-30	30-40	40-50
Cumulative Frequency	5	13	28	34	38

- (A) 28
- (B) 13
- (C) 6
- (D) 15



15. Cost of sugar in a month under the heads Raw Materials, labour, direct production and others were 12, 20, 35 and 23 units respectively. What is the difference between the central angle for the largest and the smallest components of the cost of sugar? [June 2012]

- (A) 85°
- (B) 90°
- (C) 92°
- (D) 100°



16. Data given below refers to marks gained by a group of students [June 2012]

Class	Below 10	Below 20	Below 30	Below 40	Below 50
C.F.	15	38	65	84	100

Find the number of students getting more than 30 marks.

- (A) 65
- (B) 184
- (C) 35
- (D) 84



17. For a data on frequency distribution of weights 70, 73, 49, 57, 56, 44, 56, 71, 65, 62, 60, 50, 55, 49, 63 and 45 if we assume class length as 5, the number of class intervals will be [Dec. 2012]

- (A) 5
- (B) 6
- (C) 7
- (D) 8



18. An exclusive series is? [Dec. 2012]

- (A) In which lower limit is not included
- (B) In which upper limit is not included
- (C) In which both upper and lower limits are included
- (D) In which both upper and lower limits are not included



19. A pie diagram used to represent the following data [June 2013]

Source	Customers	Excise	Income Tax	Wealth Tax
Revenue in Millions	120	180	240	180

The central angles corresponding to income tax and wealth tax.

- (A) (120°, 90°)
- (B) (100°, 90°)
- (C) (120°, 100°)
- (D) None of these



20. The difference between upper limit and lower limit of a class is called:

- (A) Class width [Dec. 2013]
- (B) Class size
- (C) Class length
- (D) All of the above



21. If the class intervals are 10-14, 15-19, 20-24, _____. Then the first class

- (A) 10-14 [Dec. 2013]
- (B) 9.5-14.5
- (C) 9-15
- (D) None of these



COMPILATION OF PAST YEAR QUESTIONS

22. The following data related to the marks of groups of students [June 2014]

Marks	No. of students
More than 70%	7
More than 60%	18
More than 50%	40
More than 40%	60
More than 30%	75
More than 20%	100

How many students have got marks less than 50%.

- (A) 40
(B) 25
(C) 60
(D) 50



23. To draw Histogram the frequency distribution should be [June 2014]

- (A) Inclusive type
(B) Exclusive type
(C) Inclusive and Exclusive type
(D) None of the above



24. The "less than" Ogive is of what shape

- (A) U-shaped curve [June 2014]
(B) J-shaped curve
(C) S-shaped curve
(D) Bell-shaped curve



25. The most appropriate diagram to represent 5 year plan outlay of India in different economic sectors is [Dec. 2014]

- (A) Pie diagram
(B) Histogram
(C) Line diagram
(D) Frequency polygon



26. For construction of Histogram the class intervals of frequency distribution is

- (A) Equal [Dec. 2014]
(B) Unequal
(C) Either Equal or Unequal
(D) None



27. 100 persons are divided into number of male female and employed/unemployed it refers to [Dec. 2014]

- (A) Cardinal data
(B) Ordinal data
(C) Spatial data
(D) Temporal data



28. If the fluctuations in the observed values are very small as compared to the size of the items, it is presented by [Dec. 2014]

- (A) Z Chart
(B) Ogive Chart
(C) False Base Line
(D) Control Chart



29. The number of observations between 150 and 200 based on the following data is [June 2015]

Value	More than 100	More than 150	More than 200	More than 250
Number of observation	70	63	28	05

- (A) 63
(B) 28
(C) 25
(D) 35



30. -

Numbers of accidents	0	1	2	3	4	5	6	7
Frequency	12	9	11	13	8	9	6	3

In how many cases 4 or more accidents occur? [June 2015]

- (A) 8
(B) 26
(C) 53
(D) 24



31. Histogram is used for the presentation of the following type of series:

- (A) Time series [June 2015]
(B) Continuous frequency series
(C) Discrete series
(D) Individual series



COMPILATION OF PAST YEAR QUESTIONS

32. The perpendicular line drawn from the intersection of two ogives which touches at in x-axis. [June 2015]

- (A) Mode
- (B) Mean
- (C) Median
- (D) Percentile



33. Which is most common diagrammatic representation for grouped frequency distribution [Dec. 2015]

- (A) Histogram
- (B) Ogive
- (C) Both (A) and (B)
- (D) None of these



34. Data series classification is of _____ kinds:

- (A) Two [Dec. 2015]
- (B) Three
- (C) Four
- (D) Five



35. The chart that use Logarithm of the variable is known as: [Dec. 2015]

- (A) Z-chart
- (B) Ratio chart
- (C) Rectangular chart
- (D) Pie-chart



36. Data collected on religion from the census reports are [June 2016]

- (A) Secondary
- (B) Primary
- (C) Either (A) or (B)
- (D) Neither (A) nor (B)



37. Different modes of presentation of data are _____

- (A) Textual
- (B) Tabular
- (C) Both (A) and (B)
- (D) None



38. In _____ method (s) information can be gathered by the researcher himself by contacting the interviewee. [Dec. 2016]

- (A) Personal Interview
- (B) Telephone Interview
- (C) Both (A) and (B)
- (D) Indirect Oral



39. Which of the following diagram is appropriate to represent the various head in total cost? [June 2017]

- (A) Bar graph
- (B) Pie chart
- (C) Multiple line chart
- (D) Scatter plot



40. Stub of a table is the [Dec. 2017]

- (A) Right part of the table describing the columns
- (B) Left part of the table describing the columns
- (C) Right part of the table describing the rows
- (D) Left part of the table describing the rows



41. Which of the following is not a two-dimensional figure? [June 2009]

- (A) Line Diagram
- (B) Pie Diagram
- (C) Square Diagram
- (D) Rectangle Diagram



42. Less than type and more than type Ogives meet at a point known as:

- (A) Mean [June 2009]
- (B) Median
- (C) Mode
- (D) None



43. Nationality of a person is: [Dec. 2009]

- (A) Discrete variable
- (B) An attribute
- (C) Continuous variable
- (D) None



COMPILATION OF PAST YEAR QUESTIONS

44. The primary rules that should be observed in classification

- (i) As far as possible, the class should be of equal width
- (ii) The classes should be exhaustive
- (iii) The classes should be unambiguously defined

Then which of the following is correct

- (A) Only (i) and (ii) [June 2010]
- (B) Only (ii) and (iii)
- (C) Only (i) and (iii)
- (D) All (i), (ii) and (iii)



45. Mode can be obtained from [Dec. 2010]

- (A) Frequency polygon
- (B) Histogram
- (C) Ogive
- (D) All of the above



46. The statistical measure computed from the sample observations alone have been termed as [Dec. 2010]

- (A) estimate
- (B) parameter
- (C) statistic
- (D) attribute



47. The Graphical representation by which median is calculated is called [Dec. 2011]

- (A) Ogive Curve
- (B) Frequency Curve
- (C) Line diagram
- (D) Histogram



48. Which of the following is not a two dimensional diagram? [Dec. 2011]

- (A) Square diagram
- (B) Line diagram
- (C) Rectangular diagram
- (D) Pie-chart



49. From which graphical representation, we can calculate partition values?

- (A) Lorenz curve [June 2012]
- (B) Ogive curve
- (C) Histogram
- (D) None of the above



50. Curve obtained by joining the points whose x coordinates are the upper limits of the class intervals and y coordinates are the corresponding cumulative frequencies is called. [June 2015]

- (A) Frequency Polygon
- (B) Frequency curve
- (C) Histogram
- (D) Ogive



51. Find the number of observation between 250 and 300 from the following data:

Value more than:	200	250	300	500
No. of observation	56	38	15	0

- (A) 38 [Dec. 2015]
- (B) 23
- (C) 15
- (D) None of the above



52. For constructing a histogram the class intervals of a frequency distribution must be of the following type: [Dec.2016]

- (A) Equal
- (B) Unequal
- (C) Equal or Unequal
- (D) None of these



53. Profits made by XYZ Bank which is a blue chip company in different years refer to:

- (A) An attribute [Dec. 2016]
- (B) A discrete variable
- (C) A continuous variable
- (D) None of these



54. Mode of presentation data [Dec. 2016]

- (A) Textual presentation
- (B) Tabulation
- (C) Oral presentation
- (D) (A) and (B)



COMPILATION OF PAST YEAR QUESTIONS

55. The point of intersection of less than ogive and greater than ogive curve gives us:

- (A) Mean [June 2017]
- (B) Mode
- (C) Median
- (D) None of the above



56. Frequency density is used in the construction of [May 2018]

- (A) Histogram
- (B) Ogive
- (C) Frequency polygon
- (D) None when the classes are of unequal width



57. Divided bar chart is considered for [May 2018]

- (A) Comparing different components of a variable
- (B) The relation of different components to the table
- (C) (A) or (B)
- (D) (A) and (B)



58. The following frequency distribution

X:	12	17	24	36	45
F:	2	5	3	8	9

is classified as [Nov. 2018]

- (A) Continuous distribution
- (B) Discrete distribution
- (C) Cumulative frequency distribution
- (D) None of the above



59. Histogram is useful to determine graphically the value of [Nov.2018]

- (A) Arithmetic mean
- (B) Median
- (C) Mode
- (D) None of the above



60.

Data are said to be _____ if the investigator himself is responsible for the collection of the data. [Nov.2018]

- (A) Primary data
- (B) Secondary data
- (C) Mixed of primary and secondary data
- (D) None of the above



61. A suitable graph for representing the portioning of total into sub parts in statistics is: [Nov. 2018]

- (A) A Pie chart
- (B) A pictograph
- (C) An ogive
- (D) Histogram



62. The number of times a particular items occurs in a class interval is called its:

- (A) Mean [Nov. 2018]
- (B) Frequency
- (C) Cumulative frequency
- (D) None of the above



63. An ogive is a graphical representation of [Nov. 2018]

- (A) Cumulative frequency distribution
- (B) A frequency distribution
- (C) Unground data
- (D) None of the above



64.

Class	0 - 10	10 - 20	20 - 30	30 - 40	40 - 50
Frequency	4	6	20	8	3

For the class 20-30. Cumulative frequency is: [Nov. 2018]

- (A) 10
- (B) 26
- (C) 30
- (D) 41



COMPILATION OF PAST YEAR QUESTIONS

65. Which of the following graph is suitable for cumulative frequency distribution?

- (A) Ogive [June 2019]
- (B) Histogram
- (C) G.M
- (D) A.M



66. Histogram can be shown as [June 2019]

- (A) Ellipse
- (B) Rectangle
- (C) Hyperbola
- (D) Circle



67. _____ Series is continuous. [June 2019]

- (A) Open ended
- (B) Exclusive
- (C) Close ended
- (D) Unequal call intervals



68. Ogive graph is used for finding

- (A) Mean [June 2019]
- (B) Mode
- (C) Median
- (D) None



69. Histogram is used for finding

- (A) Mode [June 2019]
- (B) Mean
- (C) First quartile
- (D) None



70. The graphical representation of cumulative frequency distribution is called.

- (A) Histogram [Nov. 2019]
- (B) Historiagram
- (C) Ogive
- (D) None



71. The average of salaries in a factory is Rs. 47,000. The Statement that the average salary Rs. 47,000 is _____. [Nov. 2020]

- (A) Descriptive statics
- (B) Inferential
- (C) Detailed
- (D) Undetailed



72. Statistics cannot deal with ____ data.

- (A) quantitative [Nov.2020]
- (B) qualitative
- (C) textual
- (D) undetailed



73. Sweetness of a sweet dish is: [Nov.2020]

- (A) Attribute
- (B) Discrete variable
- (C) Continuous variable
- (D) Variable



74. Census reports are used as a source of _____ date. [Nov. 2020]

- (A) Secondary
- (B) Primary
- (C) Organize
- (D) Confidential



75. Types of cumulative frequencies are:

- (A) 1 [Nov. 2020]
- (B) 2
- (C) 3
- (D) 4



76. You are an auditor of a firm and the firm earns a profit of Rs. 67,000 you stated to them that the annual profit is Rs. 67,000. This is ____ type of statistics.

- (A) Descriptive [Nov.2020]
- (B) Detailed
- (C) Non detailed
- (D) Inferential



77. The _____ are used usually when we wants to examine the relationship between two variables. [Nov. 2020]

- (A) Bar Graph
- (B) Pie Chart
- (C) Line Chart
- (D) Scatter Plot



COMPILATION OF PAST YEAR QUESTIONS

78. When data are classified according to one criterion, then it is called _____ classification. [Nov. 2020]

- (A) quantitative
- (B) qualitative
- (C) simple
- (D) factored



79. A bar chart is drawn for [Jan. 2021]

- (A) Continuous data
- (B) Nominal data
- (C) Time series data
- (D) Comparing different components



80. A tabular presentation can be used for

[Jan. 2021]

- (A) Continuous series data
- (B) Nominal data
- (C) Time series data for longer period
- (D) Primary data



81. A variable with qualitative characteristic is known as [Jan. 2021]

- (A) Quality Variable
- (B) An attribute
- (C) A discrete variable
- (D) A continuous variable



82. The accuracy and consistency of data can be verified by [Jan. 2021]

- (A) Scrutiny
- (B) Internal Checking
- (C) External Checking
- (D) Double Checking



83. From a histogram one cannot compute the approximate value of [Jan. 2021]

- (A) Mode
- (B) Standard deviation
- (C) Median
- (D) Mean



84. The left part of a table providing the description of rows is called. [Jan. 2021]

- (A) Caption
- (B) Box – head
- (C) Stub
- (D) Body



85. Mode can be obtained from _____

- (A) Frequency polygon [Jan. 2021]
- (B) Histogram
- (C) Ogive
- (D) All of the above



86. Most of the Commonly used distributions provide a. [Jan. 2021]

- (A) Bell – Shaped
- (B) U Shaped
- (C) J – Shaped Curve
- (D) Mixed Curve



87. Which of the following is suitable for the graphical representation of a Cumulative frequency distribution? [Jan. 2021]

- (A) Frequency polygon
- (B) Histogram
- (C) Ogive
- (D) Pie chart



88. Sweetness of sweet dish is. [Jan. 2021]

- (A) An Attribute
- (B) A discrete variable
- (C) A continuous variable
- (D) A variable



89. _____ Means separating items according to similar characteristics grouping them into various classes: [July 2021]

- (A) Classification
- (B) Editing
- (C) Separation
- (D) Tabulation



90. In graphical representation of data, ideographs are also called as: [July 2021]

- (A) Picto-graphs
- (B) Asymmetry graphs
- (C) Symmetry graphs
- (D) Pictograms



COMPILATION OF PAST YEAR QUESTIONS

91. A graph that uses vertical bars to represent data is called a: [July 2021]

- (A) Line graph
- (B) Scatter plot
- (C) Vertical graphs
- (D) Bar graph



92. In a graphical representation of data, the largest numerical value is 4 the smallest numerical value is 25. If classes desired are 4 then which class interval is: [July 2021]

- (A) 45
- (B) 5
- (C) 20
- (D) 7.5



93. Frequency density of a class interval is the ratio of _____. [July 2021]

- (A) Class frequency to the total frequency
- (B) Class length to class frequency
- (C) Class frequency to the cumulative frequency
- (D) Frequency of that class interval to the corresponding class length



94. There were 200 employees in an office in which 150 were married. Total male employees were 160 out of which 120 were married. What was the number of female unmarried employees? [July 2021]

- (A) 30
- (B) 40
- (C) 50
- (D) 10



95. Data collected on religion from the census reports are: [July 2021]

- (A) Primary data
- (B) Unclassified data
- (C) Sample data
- (D) Secondary data



96. In a study about the male and female students of Commerce and Science departments of a college in 5 years, the following data's were obtained:

[Dec. 2021]

1995	2000
70% female students	75% female students
65% read Commerce	40% read Science
20% of male students read Science	50% of female students read Commerce
3000 total No. of students	3600 total No. of students

After combining 1995 and 2000 if x denotes the ratio of female commerce students to female Science student and y denotes the ratio of male commerce student to male Science student, then

- (A) $x = y$
- (B) $x > y$
- (C) $x < y$
- (D) $x \geq y$



97. A National Institute arranged its students data in accordance with different states. This arrangement of data is known as

- (A) Temporal Data [Dec. 2021]
- (B) Geographical Data
- (C) Ordinal Data
- (D) Cardinal Data



98. A student marks in five subject S1, S2, S3, S4 and S5 are 86, 79, 90, 88 and 89. If we need to draw a Pie chart to represent these marks, then what will be the Central angle for S3? [Dec. 2021]

- (A) 103.2°
- (B) 75°
- (C) 105.6°
- (D) 94.8°



99. Ogive curves cannot be used to determine

- (A) Mean [Dec. 2021]
- (B) Median
- (C) Mode
- (D) Range



COMPILATION OF PAST YEAR QUESTIONS

100. The following data relate to the marks of a group of students:

Marks	Below 10	Below 20	Below 30	Below 40	Below 50
No. of students	15	38	65	84	100

How many students got marks more than 30? [Dec. 2021]

- (A) 65
- (B) 50
- (C) 35
- (D) 43



101. The following data relate to the marks of 48 students in Statistics:

56	10	54	38	21	43	12	22
48	51	39	26	12	17	36	19
48	36	15	33	30	62	57	17
5	17	45	46	43	55	57	38
43	28	32	35	54	27	17	16
11	43	45	2	16	46	28	45

What are the frequency densities for the class intervals 30-39, 40-49, 50-59?

[Dec. 2021]

- (A) 0.20, 0.50, 0.90
- (B) 0.70, 0.90, 1.10
- (C) 0.1875, 0.1667, 0.2083
- (D) 0.90, 1.00, 0.80



102. Multiple axis line chart is considered when [Dec. 2021]

- (A) There is more than one time series
- (B) The units of the variables are different
- (C) In any case
- (D) If there are more than one series and unit of variables are different













ANSWER KEY

1.	C	2.	A	3.	B	4.	C	5.	D
6.	C	7.	C	8.	C	9.	B	10.	B
11.	B	12.	C	13.	A	14.	D	15.	C
16.	C	17.	B	18.	B	19.	A	20.	D
21.	B	22.	C	23.	B	24.	B	25.	A
26.	C	27.	B	28.	C	29.	D	30.	B
31.	B	32.	C	33.	C	34.	B	35.	B
36.	A	37.	C	38.	C	39.	B	40.	D
41.	A	42.	B	43.	B	44.	B	45.	B
46.	C	47.	A	48.	B	49.	B	50.	D
51.	B	52.	A	53.	C	54.	D	55.	C
56.	A	57.	D	58.	B	59.	C	60.	A
61.	A	62.	B	63.	A	64.	C	65.	A
66.	B	67.	B	68.	C	69.	A	70.	C
71.	B	72.	B	73.	A	74.	A	75.	B
76.	D	77.	C	78.	C	79.	D	80.	B
81.	B	82.	A	83.	B	84.	C	85.	B
86.	A	87.	C	88.	A	89.	A	90.	D
91.	D	92.	B	93.	D	94.	D	95.	D
96.	C	97.	B	98.	B	99.	B	100.	C
101.	D	102.	D						

COMPILATION OF PAST YEAR QUESTIONS

(This is Vidhyoday's unique compilation of past attempts CA-F/CPT questions asked under Maths/Stats section.)

CHAPTER – 9 MEASURES OF CENTRAL TENDENCY

- | | |
|--|--|
| <p>1. If $x = 3 + 1.5y$, Mode of y is 10, what is mode of x.</p> <p>(A) 15
(B) 18
(C) 20
(D) 22</p>  | <p>6. Average weight of 100 student is 60 kg. if the average weight of boys is 70 kg and average weight of Girls is 50 kg, then the number of girls is</p> <p>(A) 40
(B) 60
(C) 50
(D) 55</p>  |
| <p>2. Average of 5 numbers is 10. If 6th number is added to the sum then, mean increases by 1, then the sixth number is</p> <p>(A) 11
(B) 12
(C) 14
(D) 16</p>  | <p>7. If the depreciation for first 3 years is 8% and the depreciation for next 7 years is 10% then combined depreciation will be {Assume straight line method}</p> <p>(A) 9%
(B) 9.4%
(C) 8.5%
(D) 9.8%</p>  |
| <p>3. Mean of 'n' terms is \bar{x}. If first number is increased by 1, second number is increased by 2 and third number is increased by 3 and so on then, the new average is</p> <p>(A) $\bar{x} + n$
(B) $\bar{x} + n + 1$
(C) $\bar{x} + \frac{n+1}{2}$
(D) $\bar{x} + \frac{n}{2}$</p>  | <p>8. If a person climbs the mountain at 5 km/hr and returns back at 10 km/hr then the average speed is</p> <p>(A) 6.66 kmph
(B) 7.5 kmph
(C) 8 kmph
(D) 8.5 kmph</p>  |
| <p>4. If the first and third Quartile are 20 & 40, find median respectively.</p> <p>(A) 10
(B) 20
(C) 30
(D) 60</p>  | <p>9. For 50 observations the mean is 80 marks. Two wrong observations 64 and 82 are replaced by correct observations 48 and 28. The correct AM will be [June 2009]</p> <p>(A) 78
(B) 78.25
(C) 78.40
(D) 78.56</p>  |
| <p>5. $\sum_{n=1}^5 x_n = 56$ & $x_6 = 6$ then AM of 6 terms is</p> <p>(A) 10.33
(B) 9.66
(C) 7.5
(D) 8.66</p>  | <p>10. If mode is 2.13 and mean is 3.57, the median is [Dec. 2009]</p> <p>(A) 2.88
(B) 3.09
(C) 3.15
(D) 3.51</p>  |

11. The average weight of 15 students of a class is 110 kg. if the average weight of first 5 students is 100 kg and the average weight of next 5 students is 125 kg then what is the average weight of remaining 5 students?

- (A) 103 Kg
- (B) 105 Kg
- (C) 106 Kg
- (D) 108 Kg



12. There are 11 students in a class out of which 3 students failed. The score of remaining 8 students is 10,14, 12, 20, 24, 11, 18, 22. What is the median score?

- (A) 16
- (B) 14
- (C) 18
- (D) 12



13. Mode is calculate from

- (A) Ogive
- (B) Frequency Polygon
- (C) Histogram
- (D) Pie-Chart



14. If G is GM between a and b then $1/(G^2-a^2)+1/(G^2-b^2)$ is

- (A) G^2
- (B) $\frac{1}{G^2}$
- (C) $\frac{1}{G}$
- (D) G



15. A lady is travelling at the speed of 20 km/hr. if she returns back with higher speed and the average speed of journey is 24 km/hr., then the return speed is

- (A) 25 Kmph
- (B) 26 Kmph
- (C) 28 Kmph
- (D) 30 Kmph



16. If mean of x is 50 then what is mean of $u = 10+5x$

- (A) 60
- (B) 250
- (C) 260
- (D) 280



17. If the difference between mean and mode is 63, then the difference between mean and median will be

- (A) 21
- (B) 20.6
- (C) 18
- (D) 24



18. The average of 5 quantities is 6 and out of these the average of 3 quantities is 8. What is the average of the remaining two

- (A) 1
- (B) 2
- (C) 3
- (D) 4



19. If the Arithmetic mean between two numbers is 64 and the Geometric mean between them is 16, then the Harmonic Mean between them is

- (A) 48
- (B) 40
- (C) 24
- (D) 4



20. The median of following numbers, which are given in ascending order is 25. Find the value of x

11 13 15 19 (x+2) 30
 35 39 46

- (A) 22
- (B) 23
- (C) 24
- (D) 25



21. Two average age of a group of 10 students was 20 years. The average age increased by two years when two new students joined the group. What is the average age of two new students who joined the group?

- (A) 22 years
- (B) 30 years
- (C) 32 years
- (D) 36 years



COMPILATION OF PAST YEAR QUESTIONS

22. The mean of first 3 terms is 14 and the mean of next 2 terms is 18. The mean of 5 number is _____.

- (A) 15
- (B) 15.6
- (C) 16
- (D) 16.2



23. G.M. of three observations 40, 50 and x is 10 the value of x is

- (A) 2
- (B) $\frac{1}{2}$
- (C) 4
- (D) $\frac{1}{4}$



24. A man travels from Agra to Gwalior at a speed of 30 kmph and returns at a speed of 60 kmph. What is his average speed?

- (A) 40 Kmph
- (B) 50 Kmph
- (C) 45 Kmph
- (D) 48 Kmph



25. If the mode of data is 18 and mean is 24, then median is _____.

- (A) 20
- (B) 21
- (C) 22
- (D) 23



26. The Mean salary of a group of 50 person is Rs. 5,850. Later on it was discovered that the salary of one of the employees has been wrongly taken as Rs. 8,000 instead of Rs. 7,800. The corrected mean salary is:

- (A) 5854
- (B) 5846
- (C) 5852
- (D) No change



27. Which of the following measures of central tendency cannot be shown by graphical method?

- (A) Mode
- (B) Median
- (C) Mean
- (D) Both (B) and (C)



28. G.M. of 8, 4, 2 is _____.

- (A) 4
- (B) 6
- (C) 7
- (D) 6.5



29. The average age of 15 students is 15 years. Out of these the average age of 5 students is 14 years and that of other 9 students is 16 years, then the age of 15th student is _____.

- (A) 10 years
- (B) 11 years
- (C) 12 years
- (D) None of these



30. G.M. of a, b, c, d is 3 then G.M. of $\frac{1}{a}, \frac{1}{b}, \frac{1}{c}, \frac{1}{d}$.

- (A) 3
- (B) $\frac{1}{3}$
- (C) $\frac{1}{2}$
- (D) 3^2



31. The mean of the following data is 6. Find the value of P.

X:	2	4	6	10	P+5
P:	3	2	3	1	2

- (A) 9
- (B) 5
- (C) 6
- (D) 7



32. Which of the following statement is true?

- (A) Median is based on all observations
- (B) The mode is the mid value
- (C) The median is the 2nd Quartile
- (D) The mode is the 5th decile



33. For two numbers A.M. = 10 and G.M. = 8 then H.M.?

- (A) 1.6
- (B) 3.2
- (C) 6.4
- (D) 12.8



34. The 3rd decile for the values 15, 10, 20, 25, 18, 11, 9, 12, is

- (A) 10
- (B) 11
- (C) 10.5
- (D) 10.7



35. The A.M. of square of first '2n' natural number is

- (A) $\frac{1}{6} (2n + 1)(4n - 1)$
- (B) $\frac{1}{6} (2n - 1)(4n - 1)$
- (C) $\frac{1}{6} (2n - 1)(4n + 1)$
- (D) $\frac{1}{6} (2n + 1)(4n + 1)$



36. If the Harmonic mean of two numbers is 4 and Arithmetic mean (A) and Geometric mean (G) satisfy the equation $2A + G^2 = 27$ then the two numbers are

- (A) 2, 4
- (B) 4, 8
- (C) 3, 6
- (D) 6, 9



37. There were 50 students in a class, 10 failed whose average marks were 2.5. The total marks of class were 281. Find the average marks of students who passed?

- (A) 5.6
- (B) 6
- (C) 6.2
- (D) 6.4



38. If the A.M. of two numbers is 30 and G.M. is 24 then will be those two numbers?

- (A) 24, 36
- (B) 28, 32
- (C) 12, 48
- (D) 20, 40



39. If the mean of data is 55.6 and the mode is 46, then the median is

- (A) 51.6
- (B) 52.1
- (C) 52.4
- (D) 53.3



40. _____ is used for ordering the size of designed cloths.

- (A) Mean
- (B) Mode
- (C) Median
- (D) G.M.



41. The mean of 10 observations is 14.4. Out of these mean of 4 observations is 16.5, then find the mean of remaining observations?

- (A) 11.5
- (B) 12
- (C) 12.5
- (D) 13



42. The mean of 6, 4, 1, 5, 6, 10 and 3 is 5. If each number is added with 2, then the new mean is _____.

- (A) 3.5
- (B) 6
- (C) 7
- (D) Unchanged



43. Which of the following is correct?

- (A) $3(\text{Mean-Median}) = \text{Mean-Mode}$
- (B) $\text{Mean-Median} = 3(\text{Mean-Mode})$
- (C) $\text{Mean-Median} = 2(\text{Mean-Mode})$
- (D) $\text{Mean-Mode} = 2(\text{Mean-Median})$



44. A person purchases 5 rupees worth of eggs from 10 different markets. You are to find average no. of eggs per rupee for all the markets taken together. What is the suitable form of average on this case?

- (A) AM
- (B) GM
- (C) HM
- (D) Median



45. G.M. = 6, A.M. = 6.5 then HM =

- (A) 5.8
- (B) 5
- (C) 5.5
- (D) 6



COMPILATION OF PAST YEAR QUESTIONS

46. A company' past 10 years average earnings was Rs. 40 crores. For obtaining the same average earnings for 11 years including these 10 years how much earning (in Rs.) must be made by the company in the 11th year?

- (A) 50 Crs.
- (B) 40 Crs.
- (C) 30 Crs.
- (D) Not possible



47. The rate of return from three different shares are 100%, 200% and 400% respectively the average rate of return will be _____.

- (A) 133.33
- (B) 150
- (C) 200
- (D) 266.66



48. Mean of 7, 9, 12, x, 4, 11 and 5 is 9. Find the missing observation

- (A) 15
- (B) 18
- (C) 20
- (D) 19



49. If all the frequencies are equal than which will doesn't exist.

- (A) Mean
- (B) Median
- (C) Mode
- (D) None of these



50. _____ is the reciprocal of the AM of reciprocal of observations.

- (A) HM
- (B) GM
- (C) Both
- (D) None



51. The median of $x, \frac{x}{2}, \frac{x}{3}, \frac{x}{5}$ is 10.

Find x where $x > 0$

[June 2009]

- (A) 24
- (B) 32
- (C) 8
- (D) 16



52. The sum of squares of deviation from mean of 10 observations is 250. Mean of the data is 10. Find the co-efficient of variation.

- (A) 10%
- (B) 25%
- (C) 50%
- (D) 0%

[June 2009]



53. If A be the A.M. of two positive unequal quantities X and Y and G be their G.M., then;

- (A) $A < G$
- (B) $A > G$
- (C) $A \leq G$
- (D) $A \geq G$

[June 2009]



54. If the AM & GM of two numbers are 30 and 24 respectively. Find the no.'s

- (A) 12 and 24
- (B) 48 and 12
- (C) 30 and 30
- (D) 40 and 20

[Nov. 2019]



55. Find the mode of the following data:

Class Interval	3-6	6-9	9-12	12-15	15-18	18-21
Frequency	2	5	10	23	21	12

- (A) 25
- (B) 4.6
- (C) 14.6
- (D) 13.5

[Nov. 2019]



56. Histogram is used to represent

- (A) Mode
- (B) Median
- (C) Percentile
- (D) Quartile

[Nov.2019]



57. Find the median of the following.

CI	0 - 10	10 - 20	20 - 30	30 - 40	40 - 50
f	2	3	4	5	6

- (A) 35
- (B) 32
- (C) 36
- (D) 37.5

[Nov. 2019]



COMPILATION OF PAST YEAR QUESTIONS

58. Find the mode of the following:

0-10	10-20	20-30	30-40	40-50	50-60
7	14	22	34	20	19

- (A) 32 [Nov. 2019]
 (B) 34.61
 (C) 25.42
 (D) 35



59. Find the median of the following:

CI	0 - 10	10 - 20	20 - 30	30 - 40	40 - 50
f	5	15	28	10	2

- (A) 10.57 [Nov. 2019]
 (B) 23.57
 (C) 25
 (D) 28



60. None $\sum_{i=1}^n (\bar{x} - x_i)$ is equal to [Nov. 2019]

- (A) $\bar{x} \sum_{i=1}^n x_i$
 (B) $n(\bar{x} \sum_{i=1}^n x_i)$
 (C) $\bar{x} - n\bar{x}$
 (D) Zero



61. Given the weights for the numbers 1,2,3....n are respectively $1^2, 2^2, 3^2, \dots, n^2$ then weighted HM is _____. [Nov. 2020]

- (A) $\frac{2n+1}{4}$
 (B) $\frac{2n+1}{6}$
 (C) $\frac{2n+1}{3}$
 (D) $\frac{2n+1}{2}$



62. Which measure is suitable for open-end classification? [Nov. 2020]

- (A) Median
 (B) Mean
 (C) Mode
 (D) GM



63. 50th Percentile is equal to [Nov. 2020]

- (A) Median
 (B) Mode
 (C) Mean
 (D) None



64. The harmonic mean A and B is $\frac{1}{3}$ and harmonic mean of C and D is $\frac{1}{5}$. The harmonic mean of ABCD is [Nov. 2020]

- (A) $\frac{8}{15}$
 (B) $\frac{1}{4}$
 (C) $\frac{1}{15}$
 (D) $\frac{5}{3}$



65. Which one of these is least affected by extreme values? [Nov. 2020]

- (A) Mean
 (B) Median
 (C) Mode
 (D) None



66. If the AM and HM of two numbers are 6 and 9 respectively, then GM is

- (A) 7.35 [Nov.2020]
 (B) 8:5
 (C) 6.75
 (D) None



67. From the record on sizes of shoes sold in a shop, one can compute the following to determine the most preferred shoe size.

- (A) Mean [Jan. 2021]
 (B) Median
 (C) Mode
 (D) Range



68. Which of the following measure does not possess mathematical properties?

- (A) Arithmetic mean [Jan.2021]
 (B) Geometric mean
 (C) Harmonic mean
 (D) Median



COMPILATION OF PAST YEAR QUESTIONS

69. If $y = 3 + (4.5)x$ and the mode for x -value is 20, then the mode for y -value is

- (A) 3.225 [Jan.2021]
 (B) 12
 (C) 24.5
 (D) 93



70. If there are two groups with n_1 and n_2 observations and H_1 and H_2 are respective harmonic means, then the harmonic mean of combined observation is [Jan. 2021]

- (A) $\frac{n_1 H_1 + n_2 H_2}{n_1 + n_2}$
 (B) $\frac{n_1 H_1 + n_2 H_2}{H_1 + H_2}$
 (C) $\frac{n_1 + n_2}{n_1 H_1 + n_2 H_2}$
 (D) $\frac{(n_1 + n_2) H_1 + H_2}{n_1 H_2 + n_2 H_1}$



71. There are n numbers. When 50 is subtracted from each of these number the sum of the numbers so obtained is -10 . When 46 is subtracted from each of the original n numbers, then the sum of numbers. So obtained is 70. What is the mean of the original n numbers? [July 2021]

- (A) 56.8
 (B) 25.7
 (C) 49.5
 (D) 53.8



72. The mean of ' n ' observation is ' x '. If k is added to each observation, then the new mean is. [July 2021]

- (A) k
 (B) xk
 (C) $x-k$
 (D) $x+k$



73. If $y = 3 + 1.9x$, and mode of x is 15, then the mode of y is: [July 2021]

- (A) 15.9
 (B) 27.8
 (C) 35.7
 (D) 31.5



74. Expenditures of a company (in million rupees) per item in various years)

Year	Item of expenditures				
	Salary	Fuel and Transport	Bonus	Interest on Loans	Taxes
1998	288	98	3.00	23.4	83
1999	342	112	2.52	32.5	108
2000	324	108	3.84	41.6	74
2001	336	133	3.68	36.4	88
2002	420	142	3.96	49.4	98

What is the average amount of interest per year which the company had to pay during this period? [July 2021]

- (A) 33.66
 (B) 36.66
 (C) 31.66
 (D) 39.66



75. If there are 3 observations 15, 20, 25 then the sum of deviation of the observations from their AM is [Dec. 2021]

- (A) 0
 (B) 5
 (C) -5
 (D) 10



76. If the AM and GM for 10 observations are both 15, then the value of HM is [Dec. 2021]

- (A) Less than 15
 (B) More than 15
 (C) 15
 (D) Cannot be determined



77. If average mark for a group of 30 girls is 80, a group of boys is 70 and combined average is 76, then how many are in the boy's group? [Dec. 2021]

- (A) 21
 (B) 20
 (C) 22
 (D) 19



COMPILATION OF PAST YEAR QUESTIONS

78. If two variables a and b are related by $c = ab$ then G.M. of c is equal to [Dec. 2021]

- (A) G.M. of a + G.M. of b
- (B) G.M. of $a \times$ G.M. of b
- (C) G.M. of a - G.M. of b
- (D) G.M. of a / G.M. of b



79. For a moderately skewed distribution the median is twice the mean, then the mode is _____ times the median.

- (A) 3 [Dec.2021]
- (B) 2
- (C) $\frac{2}{3}$
- (D) $\frac{3}{2}$



80. The median value of the set of observations 48, 36, 72, 87, 19, 66, 56, 91 is [Dec. 2021]

- (A) 53
- (B) 87
- (C) 61
- (D) 19



81. One hundred participants expressed their opinion on recommending a new product to their friends using the attributes: most unlikely, not sure, likely, most likely. The

appropriate measure of central tendency that can be used here is [Dec. 2021]

- (A) Mean
- (B) Mode
- (C) Geometric mean
- (D) Harmonic mean



82. Along a road there are 5 buildings of apartments, marked as 1, 2, 3, 4, 5. Number of people residing in each building is available. A bus stop is to be setup near one of the buildings so that the total distance walked by the residents to the bus stop from their buildings must be kept minimum. One must consider involving _____ to find the position of the bus stop. [Dec. 2021]

- (A) Mean
- (B) Median
- (C) Mode
- (D) Weighted mean



83. Given that Mean = 70.20 and Mode = 70.50, the Median is expected to be.

- (A) 70.15 [Dec. 2021]
- (B) 70.20
- (C) 70.30
- (D) 70.35














ANSWER KEY

1.	B	2.	D	3.	C	4.	C	5.	A
6.	C	7.	B	8.	A	9.	D	10.	B
11.	B	12.	D	13.	C	14.	B	15.	D
16.	C	17.	A	18.	C	19.	D	20.	B
21.	C	22.	B	23.	B	24.	A	25.	C
26.	B	27.	C	28.	A	29.	B	30.	B
31.	D	32.	C	33.	C	34.	D	35.	D
36.	C	37.	D	38.	C	39.	C	40.	B
41.	D	42.	C	43.	A	44.	C	45.	C
46.	B	47.	C	48.	A	49.	C	50.	A
51.	A	52.	C	53.	B	54.	B	55.	C
56.	A	57.	B	58.	B	59.	B	60.	D
61.	C	62.	A	63.	A	64.	B	65.	B
66.	A	67.	C	68.	D	69.	D	70.	D
71.	C	72.	D	73.	D	74.	B	75.	A
76.	C	77.	B	78.	B	79.	B	80.	C
81.	B	82.	B	83.	C				

COMPILATION OF PAST YEAR QUESTIONS

(This is Vidhyoday's unique compilation of past attempts CA-F/CPT questions asked under Maths/Stats section.)

CHAPTER – 10 MEASURES OF DISPERSION

- | | |
|---|---|
| <p>1. If Variance is 81, Mean is 3 then Coefficient of Variation is</p> <p>(A) 33.33%</p> <p>(B) 300%</p> <p>(C) 150%</p> <p>(D) 100%</p>  | <p>7. $5x-2y+7=0$, Mean Deviation of y about mean is 5 then the Mean Deviation of x about mean is</p> <p>(A) $\frac{3}{5}$</p> <p>(B) $\frac{5}{3}$</p> <p>(C) $\frac{1}{2}$</p> <p>(D) 2</p>  |
| <p>2. Which is the best measure of dispersion in open end class</p> <p>(A) Range</p> <p>(B) MD</p> <p>(C) QD</p> <p>(D) SD</p>  | <p>8. If $y = 2-3x$ and Variance of x is 5 what is variance of y</p> <p style="text-align: right;">[Dec. 2009]</p> <p>(A) 15</p> <p>(B) -15</p> <p>(C) -45</p> <p>(D) 45</p>  |
| <p>3. If arithmetic mean of x is 50 and standard deviation of x is 5 & also $y = (x-50)/5$, find arithmetic mean and standard deviation of y</p> <p>(A) (1, 0)</p> <p>(B) (0, 1)</p> <p>(C) (1, 2)</p> <p>(D) (2, 1)</p>  | <p>9. What is mean deviation of 4, 9, 11, 14, 37 from median</p> <p>(A) 6.5</p> <p>(B) 6</p> <p>(C) 7.6</p> <p>(D) 7.2</p>  |
| <p>4. Inter-quartile Range is [June 2009]</p> <p>(A) Half of QD</p> <p>(B) Double of QD</p> <p>(C) Same as QD</p> <p>(D) None of these</p>  | <p>10. What is the variance of 3, 4, 5 and 8</p> <p>(A) 3.5</p> <p>(B) 3.2</p> <p>(C) 4.1</p> <p>(D) 4.6</p>  |
| <p>5. If $n=10, \bar{x} = 10, \sum(x - \bar{x})^2 = 250$ find coefficient of variation</p> <p>(A) 30%</p> <p>(B) 50%</p> <p>(C) 60%</p> <p>(D) 75%</p>  | <p>11. If all observations in a distribution are increased by 6, then the variance of the series will be</p> <p>(A) Increases by 6.</p> <p>(B) Decreases by 6.</p> <p>(C) Becomes 6 times.</p> <p>(D) Remains unchanged</p>  |
| <p>6. If the lowest value in calculating Range is L_1 and highest value is L_2 then</p> <p>(A) $\frac{L_1+L_2}{L_1-L_2} \times 100$</p> <p>(B) $\frac{L_2-L_1}{L_2+L_1} \times 100$</p> <p>(C) $\frac{L_2}{L_1} \times 100$</p> <p>(D) $\frac{L_1}{L_2} \times 100$</p>  | |

COMPILATION OF PAST YEAR QUESTIONS

12. The standard deviation of the weights (in kg) of the students of a class of 50 students was calculated to be 4.5 kg later on it was found that due to some fault in weighting machine, the weight of each student was under measured by 0.5 kg. The correct standard deviation of the weight will be:

- (A) 4 Kg
- (B) 5 Kg
- (C) 4.5 Kg
- (D) None of these



13. S.D. of first 'n' natural numbers is 2 then n is

- (A) 7
- (B) 10
- (C) 12
- (D) 14



14. The S.D. is independent of change of _____

- (A) Origin
- (B) Scale
- (C) Both origin & scale
- (D) Neither origin nor scale



15. If the S.D. of x is σ then S.D. of $\frac{ax+b}{c}$

- (A) $\frac{a\sigma+b}{c}$
- (B) $\frac{a\sigma}{c}$
- (C) $\left|\frac{a}{c}\right| \sigma$
- (D) $a\sigma$



16. Which of the following measures of dispersion is used for finding consistency between the series?

- (A) Range
- (B) QD
- (C) MD
- (D) SD



17. $\sum x^2 = 3390, n = 30, \sigma = 7$ then $\bar{x} =$

- (A) 6
- (B) 8
- (C) 9
- (D) 11.5



18. If the mean of frequency distribution is 100 and coefficient of variation is 45% then standard deviation is

- (A) 45
- (B) 50
- (C) 220.5
- (D) 90



19. The difference between maximum and minimum value of the data is known as:

[Dec. 2013]

- (A) Range
- (B) QD
- (C) MD
- (D) SD



20. Mean = 5, S.D. = 2.6, Median = 5, Q.D. = 1.5 then Coefficient of Q.D. is

- (A) 15%
- (B) 20%
- (C) 30%
- (D) 40%



21. Coefficient of mean deviation about mean for the first 9 natural numbers is:

- (A) $\frac{40}{3}$
- (B) $\frac{400}{9}$
- (C) $\frac{40}{9}$
- (D) $\frac{410}{3}$



22. If Arithmetic Mean = $\frac{8+4}{2}$, then variance is

- (A) 2
- (B) 3
- (C) 4
- (D) Can't say



23. The formula for range of middle 50% items of a series is

- (A) L-5
- (B) $(Q_3 - Q_1)/2$
- (C) $Q_3 - Q_1$
- (D) $Q_3 + Q_1$



24. 1st Quartile is 142, Semi-Inter quartile range is 18. Then median is

- (A) 150
- (B) 160
- (C) 165
- (D) 170



25. Co-efficient of QD is equal to

- (A) $\frac{Q_3-Q_1}{Q_3+Q_1} \times 100$
- (B) $\frac{QD}{Median} \times 100$
- (C) $\frac{Q_3-Q_1}{2}$
- (D) Both (A) and (B)



26. If every observation is increased by 5 then

- (A) SD increases by 5
- (B) MD increased by 5
- (C) QD increased by 5
- (D) None is affected



27. The SD of x is known to be 10 then the SD of 50+5x is

- (A) 100
- (B) 60
- (C) 50
- (D) 5



28. Find the range of 6, 5, 4, 3, 1, 3, 6, 10, 8

- (A) 7
- (B) 8
- (C) 9
- (D) 10



29. Find the mean deviation about mean of 4, 5, 6, 8, 3

- (A) 1.20
- (B) 1.35
- (C) 1.40
- (D) 1.44



30. If $V(x) = 23$. Find variance of $2x+10$

- (A) 23
- (B) 46
- (C) 69
- (D) 92



31. The average of numbers is 20 and their standard deviation 5. Find the two numbers?

- (A) (10, 30)
- (B) (15, 25)
- (C) (12, 18)
- (D) (15, 20)



32. If Variance = 125.6, $x = 40$, coefficient of variation =

- (A) 28.01
- (B) 27.6
- (C) 25.6
- (D) 22.2



33. If same amount is added to or subtracted from all the value of the individual series then the standard deviation and variance both shall be

- (A) Increase by same amount
- (B) Decrease by same amount
- (C) Remains unchanged
- (D) May increase or decrease



34. The SD of first n natural numbers is ____

- (A) $\sqrt{\frac{n^2+1}{6}}$
- (B) $\sqrt{\frac{n^2-1}{12}}$
- (C) $\sqrt{\frac{n^2+1}{12}}$
- (D) $\sqrt{\frac{n^2-1}{6}}$



35. If mean and coefficient of variation of the marks of n students is 20 and 80 respectively. What will be variance of them

- (A) 16
- (B) 4
- (C) 256
- (D) 80



36. The AM and CV of a random variable x are 10 and 40 respectively, then the variance of $(-15 + \frac{3x}{2})$.

- (A) $\frac{27}{2}$
- (B) 36
- (C) 6
- (D) 4



COMPILATION OF PAST YEAR QUESTIONS

37. Mean deviation is least when deviation are taken from

- (A) Mean
- (B) Median
- (C) Mode
- (D) None



38. If $L_1 =$ highest observation and $L_2 =$ smallest observation, then Coefficient of Range = [Dec. 2009]

- (A) $\frac{L_1 \times L_2}{L_1 / L_2} \times 100$
- (B) $\frac{L_1 - L_2}{L_1 + L_2} \times 100$
- (C) $\frac{L_1 + L_2}{L_1 - L_2} \times 100$
- (D) $\frac{L_1 / L_2}{L_1 \times L_2} \times 100$



39. The equation of a line is $5x + 2y = 17$. Mean deviation of y about mean is 5. Calculate mean deviation of x about mean. [Dec. 2009]

- (A) -2
- (B) 2
- (C) -4
- (D) None



40. If variance of x is 5, then find the variance of $(2 - 3x)$ [Dec. 2009]

- (A) 10
- (B) 45
- (C) 5
- (D) -13



41. The approximate ratio of SD, MD, QD is:

- (A) 3 : 4 : 5 [Nov. 2019]
- (B) 2 : 3 : 4
- (C) 15 : 12 : 10
- (D) 5 : 6 : 7



42. The deviations are minimum when taken from: [Nov. 2019]

- (A) Mean
- (B) Median
- (C) Mode
- (D) None



43. Origin is shifted by 5, what will happen

- (A) SD will increase by 5 [Nov. 2019]
- (B) QD will increase by 5
- (C) MD will increase by 5
- (D) There will be no change in SD



44. Coefficient of variation is equal to:

- (A) $\frac{SD}{Mean}$ [Nov.2019]
- (B) $\frac{SD}{Mean} \times 100$
- (C) $\frac{Mean}{SD} \times 100$
- (D) $\frac{Mean}{SD}$



45. Find SD of the following 1, 2, 3, 4, 5, 6, 7, 8, 9. [Nov. 2019]

- (A) 2.58
- (B) $\frac{60}{9}$
- (C) $\frac{60}{3}$
- (D) 3.20



46. If mean = 200 and variance = 80. Find coefficient of variation. [Nov. 2019]

- (A) 2.56
- (B) 4.47
- (C) 32
- (D) 0.32



47. Which of the following is affected by shifting of scale. [Nov. 2019]

- (A) SD
- (B) MD
- (C) QD
- (D) None of these



48. Coefficient of variation is 80. Mean is 20. Find variance: [Nov. 2019]

- (A) 640
- (B) 256
- (C) 16
- (D) 250



COMPILATION OF PAST YEAR QUESTIONS

49. Difference between upper limit and lower limit of a class is known as. [Nov.2019]

- (A) Range
- (B) Class mark
- (C) Class size
- (D) Class boundary



50. SD from numbers 1, 4, 5, 7, 8 is 2.45. If 10 is added to each then SD will be: [Nov.2019]

- (A) 12.45
- (B) 24.5
- (C) 12
- (D) Will not change



51. Which of the following measure of dispersion is based on absolute deviations?

- (A) Range [Nov. 2020]
- (B) S.D
- (C) Mean Deviation
- (D) Quartile Deviation



52. The best statistical measure used for comparing two series is [Jan. 2021]

- (A) Mean absolute deviation
- (B) Range
- (C) Coefficient of variation
- (D) Standard deviation



53. The relationship between P-series and Q series is given by $2P - 3Q = 10$. If the range of P-Series is 18. What would be the range of Q? [Jan. 2021]

- (A) 10
- (B) 15
- (C) 9
- (D) 12



54. It is given that the mean (\bar{X}) is 10 and standard deviation (s.d.) is 3.2. If the observations are increased by 4, then the new mean and standard deviations are:

- (A) $\bar{X} = 10$, s.d. = 7.2 [Jan. 2021]
- (B) $\bar{X} = 10$, s.d. = 3.2
- (C) $\bar{X} = 14$, s.d. = 3.2
- (D) $\bar{X} = 14$, s.d. = 7.2



55. Which of the following is a relative measure of dispersion? [Jan. 2021]

- (A) Range
- (B) Mean deviation
- (C) Standard deviation
- (D) Coefficient of quartile deviation



56. Find the coefficient of mean deviation about mean for the data: 5, 7, 8, 10, 11, 13, 19

- (A) 17.28 [Jan. 2021]
- (B) 28.57
- (C) 32.11
- (D) 18.56



57. If a school has 14 teachers, their heights (in cm) are: 172, 173, 164, 178, 168, 169, 173, 172, 173, 164, 178, 168, 169, 173 then average deviation of this data from mean is:

- (A) 2.43 approx. [July 2021]
- (B) 3.93 approx.
- (C) 0
- (D) 2.92 approx.



58. The standard deviation of 1 to 9 natural number is: [July 2021]

- (A) 6.65
- (B) 2.58
- (C) 6.75
- (D) 5.62



59. The probable value of mean deviation when $Q_3 = 40$ and $Q_1 = 15$ is: [July 2021]

- (A) 15
- (B) 18.75
- (C) 17.50
- (D) 0



60. If the numbers are 5, 1, 8, 7, 2 then the coefficient of variation is: [July 2021]

- (A) 56.13%
- (B) 59.13%
- (C) 48.13%
- (D) 44.13%



COMPILATION OF PAST YEAR QUESTIONS

61. If every observation is increased by 7 then:
[July 2021]

- (A) Standard deviation increased by 7
- (B) Mean deviation increased by 7
- (C) Not affected at all
- (D) Quartile deviation increased by 7



62. If the relationship between x and y is given by $2x + 3y = 10$ and the range of y is 10, then what is the range of x?

- (A) 10
- (B) 18
- (C) 8
- (D) 15

[July 2021]



63. The mean deviation of the numbers 3, 10, 6, 11, 14, 17, 9, 8, 12 about the mean is (correct to one decimal place):

- (A) 8.7
- (B) 4.2
- (C) 3.1
- (D) 9.8

[July 2021]



64. The marks secured by 5 students in a subject are 82, 73, 69, 84, 66. What is the coefficient of Range
[Dec. 2021]

- (A) 0.12
- (B) 12
- (C) 120
- (D) 0.012



65. For a data having odd number of values, the difference between the first and the middle value is equal to the difference between the last and the middle value; similarly the difference between the second and middle values is equal to that of second last and middle value so on. Therefore, the middle value is equal to
[Dec. 2021]

- (A) Half of the range
- (B) Half of standard deviation
- (C) Mode
- (D) Mean



ANSWER KEY

1.	B	2.	C	3.	B	4.	B	5.	B
6.	B	7.	D	8.	D	9.	C	10.	A
11.	D	12.	C	13.	A	14.	A	15.	C
16.	D	17.	B	18.	A	19.	A	20.	C
21.	B	22.	C	23.	C	24.	B	25.	D
26.	D	27.	C	28.	C	29.	D	30.	D
31.	B	32.	A	33.	C	34.	B	35.	C
36.	B	37.	B	38.	B	39.	B	40.	B
41.	C	42.	B	43.	D	44.	B	45.	A
46.	B	47.	D	48.	B	49.	C	50.	D
51.	C	52.	C	53.	D	54.	C	55.	D
56.	C	57.	C	58.	B	59.	A	60.	B
61.	C	62.	D	63.	C	64.	B	65.	D

COMPILATION OF PAST YEAR QUESTIONS

(This is Vidhyoday's unique compilation of past attempts CA-F/CPT questions asked under Maths/Stats section.)

CHAPTER – 11 PROBABILITY

1. $x: 1, 2, 3, 4, 5$ $P(x) = 0.1, 0.4, 0.2, 0.1, 0.2$
then is $E(x^2)$

- (A) 9.5
- (B) 10.1
- (C) 8.8
- (D) 7.6



2. If a card is chosen from pack of 52 card then what is probability of getting a king or jack.

- (A) $\frac{5}{13}$
- (B) $\frac{7}{26}$
- (C) $\frac{2}{13}$
- (D) $\frac{7}{13}$



3. $P(A) = 2 P(B) = 3 P(C)$ find $P(A)$

- (A) $\frac{1}{6}$
- (B) $\frac{3}{11}$
- (C) $\frac{6}{11}$
- (D) $\frac{9}{11}$



4. Out of 125 students, 70 pass in Maths, 55 pass in Stats, 30 pass in both. What is the probability that a student failed in both the subjects.

- (A) 0.20
- (B) 0.15
- (C) 0.36
- (D) 0.24



5. In a race probability of winning is $\frac{7}{11}$. Find the expected value, if the prize is 66 Rs.

- (A) 66
- (B) 42
- (C) 49
- (D) 60



6. There are 4 Boys and 2 Girls in Group 1, 3 Boys and 1 Girls in Group 2. What is the probability of 1 Boy and 1 Girl in the committee of 2 students.

- (A) $\frac{7}{15}$
- (B) $\frac{23}{30}$
- (C) $\frac{5}{18}$
- (D) $\frac{8}{15}$



7. If 3 coins are tossed and E is an event of 3 heads, F is an event of least 1 head the $P(E)/P(F)$ is

- (A) $\frac{1}{8}$
- (B) $\frac{7}{8}$
- (C) $\frac{1}{7}$
- (D) $\frac{2}{7}$



8. If 2 Jokers are added to a pack of 52 playing cards, what is probability of drawing a king of spade? [June 2010]

- (A) $\frac{13}{54}$
- (B) $\frac{13}{52}$
- (C) $\frac{1}{54}$
- (D) $\frac{1}{52}$



9. If two dices are thrown, what is the probability of getting 1 on one dice

- (A) $\frac{1}{6}$
- (B) $\frac{7}{18}$
- (C) $\frac{5}{36}$
- (D) $\frac{5}{18}$



10. If two coins are tossed what is the probability of getting at least 1 head?

- (A) $\frac{3}{4}$
- (B) $\frac{1}{2}$
- (C) $\frac{1}{4}$
- (D) $\frac{1}{3}$



COMPILATION OF PAST YEAR QUESTIONS

11. Odd in favour of a solving the problem is 5:7 and odds against B solving the problem is 9:6. What the probability of problem being solved if they both try. [Dec. 2010]

- (A) 0.50
- (B) 0.65
- (C) 0.83
- (D) 0.40



12. In a bag containing 12 balls, 3 are red. If 5 balls are drawn what is the probability of getting 3 red balls? [June 2009]

- (A) $\frac{3}{22}$
- (B) $\frac{1}{22}$
- (C) $\frac{1}{11}$
- (D) $\frac{5}{11}$



13. If A and B are independent Events then find P(A) if $P(A \cup B) = 2/3$, $P(B) = 2/5$.

- (A) $\frac{4}{9}$
- (B) $\frac{4}{15}$
- (C) $\frac{2}{9}$
- (D) $\frac{2}{15}$



14. $X : 0, 1, 2, 3$ find $P(x > 2)$

- (A) $\frac{1}{2}$
- (B) $\frac{3}{4}$
- (C) $\frac{1}{4}$
- (D) $\frac{1}{3}$



15. If three balls are drawn randomly from a bag containing 5 white, 3 red and 2 black balls then what is the probability of getting all 3 white ball? [Dec. 2009]

- (A) $\frac{5}{12}$
- (B) $\frac{3}{12}$
- (C) $\frac{1}{12}$
- (D) $\frac{7}{12}$



16. $P(A) = 1/3$, $P(B) = 1/4$, $P(A \cap B) = 1/6$ find $P(B/A)$

- (A) $\frac{1}{2}$
- (B) $\frac{1}{3}$
- (C) $\frac{2}{3}$
- (D) $\frac{1}{4}$



17. $P(A \cap B) = P(A) \cdot P(B)$ then events A and B are

- (A) Mutually Exclusive
- (B) Independent
- (C) Exhaustive
- (D) Dependent



18. $E(x+y)$ is

- (A) $E(x) + E(y)$
- (B) $E(xy)$
- (C) $E\left(\frac{x}{y}\right)$
- (D) None of these



19. $E(13x+9)$ is [June 2010]

- (A) $9E(x)+13$
- (B) $13E(x)$
- (C) $E(x) + 9$
- (D) $13E(x) + 9$



20. If one bag contains 3 white and 5 black balls and other bag contains 4 white and 2 black balls. If one ball is taken from each bag, what is the probability of both being white. [Dec. 2010]

- (A) $\frac{1}{2}$
- (B) $\frac{3}{4}$
- (C) $\frac{1}{4}$
- (D) $\frac{2}{3}$



21. If $P(A/B) = P(A)$ then A and B are

- (A) Not defined [Dec. 2010]
- (B) Independent
- (C) Mutually Exclusive
- (D) None of these



COMPILATION OF PAST YEAR QUESTIONS

22. Bag I contains : 2 White and 3 Black balls, Bag II contains : 4 White and 6 Black balls. If one ball is taken from I bag and put in II. What is the probability of getting a white ball from II bag. [Dec. 2010]

- (A) $\frac{2}{3}$
- (B) $\frac{1}{5}$
- (C) $\frac{3}{4}$
- (D) $\frac{2}{5}$



23. If a dice is rolled once find mathematical expectation [Dec. 2010]

- (A) 3
- (B) 3.5
- (C) 4
- (D) 6



24. Exactly 3 girls are to be selected from 5 girls and 3 boys. The probability of selecting 3 girls will be [June 2011]

- (A) $\frac{1}{28}$
- (B) $\frac{7}{28}$
- (C) $\frac{5}{28}$
- (D) $\frac{3}{28}$



25. If $P(A \cup B) = P(A)$. Find $P(A \cap B)$

- (A) $P(A)$
- (B) $P(B)$
- (C) \emptyset
- (D) $P(A)P(B)$

[June 2011]



26. A Bag contains 5 Red balls, 4 Blue balls and 'm' Green balls. If the random probability of picking two green balls is $\frac{1}{7}$. What is the number of green balls (m) [June 2011]

- (A) 5
- (B) 6
- (C) 7
- (D) 8



27. The probability of Girl getting scholarship is 0.6 and the same probability for Boys is 0.8. Find the probability that at least one of the categories getting scholarship.

- (A) 0.87
- (B) 0.98
- (C) 0.92
- (D) 0.74

[June 2011]



28. A coin is tossed 5 times, what is the probability that exactly 3 heads will occur.

- (A) $\frac{3}{16}$
- (B) $\frac{1}{16}$
- (C) $\frac{7}{16}$
- (D) $\frac{5}{16}$

[June 2011]



29. Two unbiased dice are thrown. The expected value of the sum of numbers on the upper side is [Dec. 2011]

- (A) 3.5
- (B) 7
- (C) 10.5
- (D) 14



30. One card is drawn from pack of 52, what is the probability that it is a king or a queen? [Dec. 2011]

- (A) $\frac{4}{13}$
- (B) $\frac{2}{13}$
- (C) $\frac{5}{13}$
- (D) $\frac{8}{49}$



31. In a packet of 500 pens, 50 are found to be defective. A pen is selected at random. Find the probability that it is non defective. [Dec. 2011]

- (A) $\frac{1}{10}$
- (B) $\frac{9}{10}$
- (C) $\frac{1}{2}$
- (D) None of these



COMPILATION OF PAST YEAR QUESTIONS

32. Four married couples have gathered in a room. Two persons are selected at random amongst them, find the probability that selected persons are a gentleman and a lady but not a couple. [Dec. 2011]

- (A) $\frac{1}{16}$
- (B) $\frac{3}{16}$
- (C) $\frac{3}{7}$
- (D) $\frac{5}{7}$



33. A team of 5 is to be selected from 8 boys and three girls. Find the probability that it includes two particular girls. [Dec. 2011]

- (A) $\frac{21}{55}$
- (B) $\frac{28}{55}$
- (C) $\frac{9}{22}$
- (D) $\frac{17}{22}$



34. Arun and Tarun appear for an interview for 2 vacancies. The probability of Arun's selection is $\frac{1}{3}$ and that of Tarun's selection is $\frac{1}{5}$. Find the probability that only one of them will be selected. [June 2012]

- (A) $\frac{1}{5}$
- (B) $\frac{3}{5}$
- (C) $\frac{2}{5}$
- (D) $\frac{4}{5}$



35. A Card is drawn out of standard pack of 52 cards. What is probability that it is a king or red colour? [June 2012]

- (A) $\frac{7}{13}$
- (B) $\frac{9}{13}$
- (C) $\frac{5}{13}$
- (D) $\frac{2}{13}$



36. If a coin is tossed twice, we get 5 if two heads appear, Rs. 2 if one head appear, Rs. 1 if no head appear then the expected income is [June 2012]

- (A) Rs. 2
- (B) Rs. 2.5
- (C) Rs. 3
- (D) Rs. 4



37. The odds against A Solving a problem are 4:3 and the odds in favour of B solving the same problem are 7:5. What is the probability that the problem will be solved if they both try? [Dec. 2012]

- (A) $\frac{5}{21}$
- (B) $\frac{5}{12}$
- (C) $\frac{10}{21}$
- (D) $\frac{16}{21}$



38. A bag contains 6 red balls and some blue balls. If the probability of drawing a blue ball from the bag is twice that of drawing red ball. Find the number of blue balls in the bag [Dec. 2012]

- (A) 3
- (B) 12
- (C) 9
- (D) None of these



39. If two dice are thrown then the probability of getting multiple of 3 on one die and multiple of 2 on other die are [Dec. 2012]

- (A) $\frac{1}{2}$
- (B) $\frac{1}{4}$
- (C) $\frac{11}{36}$
- (D) $\frac{7}{18}$



40. Find the expected value of the following probability distribution [Dec. 2012&13]

X	-20	-10	30	75	80
P(x)	$\frac{3}{20}$	$\frac{1}{5}$	$\frac{1}{2}$	$\frac{1}{10}$	$\frac{1}{20}$

- (A) 18
- (B) 20
- (C) 21.5
- (D) 32.5



41. The odds that a book will be reviewed favorably by 3 independent critics are 5 to 2, 3 to 4, 4 to 3 respectively, then the probability that out of 3 critics the majority will be favourable is _____. [June 2013]

- (A) $\frac{209}{343}$
- (B) $\frac{60}{343}$
- (C) $\frac{129}{343}$
- (D) $\frac{173}{343}$



COMPILATION OF PAST YEAR QUESTIONS

42. Find the probability of drawing spade on each of 2 consecutive draws from a well shuffled pack of cards when the drawn are without replacement. [June 2013]

- (A) $\frac{1}{221}$
- (B) $\frac{1}{17}$
- (C) $\frac{1}{16}$
- (D) $\frac{1}{96}$



43. A bag contains 3 red, 3 green and 2 blue balls. If 2 balls are drawn at random from the bag find the probability that none of them will be blue. [June 2013]

- (A) $\frac{10}{21}$
- (B) $\frac{10}{27}$
- (C) $\frac{15}{28}$
- (D) $\frac{15}{26}$



44. A player tosses 3 coins. He wins Rs. 5 if 3 heads appear, Rs. 3 if two heads appear Rs. 1 if one head appear and a loss of Rs. 15 if no head appear. Find his expected gain in Rs. _____. [June 2013]

- (A) Rs. 2
- (B) Rs. 1
- (C) Rs. 0.50
- (D) Rs. 0.25



45. If $P(A) = 0.45$, $P(B) = 0.35$, $P(A \text{ and } B) = 0.25$ the $P(A/B) =$ [Dec. 2013]

- (A) $\frac{5}{9}$
- (B) $\frac{5}{7}$
- (C) $\frac{7}{9}$
- (D) None of these



46. Two coins are tossed simultaneously then the probability of getting exactly one head is

- (A) $\frac{1}{4}$ [Dec. 2013]
- (B) $\frac{1}{2}$
- (C) $\frac{3}{4}$
- (D) None of these



47. The probability that a cricket team winning a match at Kanpur is $\frac{2}{5}$ and losing a match at Delhi is $\frac{1}{7}$. What is the probability of the team winning at least one match?

- (A) $\frac{17}{35}$ [Dec. 2013]
- (B) $\frac{32}{35}$
- (C) $\frac{11}{35}$
- (D) $\frac{21}{35}$



48. For any two events A_1, A_2 $P(A_1) = \frac{2}{3}$, $P(A_1 \cap A_2) = \frac{1}{4}$ then A_1 and A_2 can be

- (A) Mutually Exclusive and Independent
- (B) Independent but not Mutually Exclusive
- (C) Mutually Exclusive and Dependent
- (D) Neither Mutually Exclusive nor Independent



49. If a pair of dice is thrown what is the probability of sum of neither 7 nor 11?

- (A) $\frac{2}{9}$ [June 2014]
- (B) $\frac{4}{9}$
- (C) $\frac{5}{9}$
- (D) $\frac{7}{9}$



50. An urn contains 2 red and 1 green balls; another urn contains 2 red and 2 green balls. An urn was selected at random and then a ball was drawn from it. If it was found to be red then the probability that it has been drawn from first urn is

- (A) $\frac{2}{5}$ [June 2014]
- (B) $\frac{3}{7}$
- (C) $\frac{4}{7}$
- (D) $\frac{3}{5}$



51. A die is thrown twice then the probability that the sum of the numbers is divisible by 4 is

- (A) $\frac{1}{3}$ [Dec. 2014]
- (B) $\frac{1}{4}$
- (C) $\frac{1}{2}$
- (D) $\frac{2}{3}$



52. A random variable x takes three values $-1, 2, 3$ with the respective probabilities $P(-1) = 1/3, P(2) = 1/3, P(3) = 1/3$ then $E(x)$ is

- (A) 1.33 [Dec. 2014]
 (B) 2
 (C) 1.5
 (D) 2.5



53. There are 6 positive and 8 negative numbers. Four numbers are selected at random without replacement and multiplied. Find the probability that the product is positive. [June 2015]

- (A) $\frac{505}{1001}$
 (B) $\frac{629}{1001}$
 (C) $\frac{425}{1001}$
 (D) None of these



54. $P(A_1) = 3/8; P(A_2) = 2/3; P(A_1 \cap A_2) = 1/4$ will be [June 2014&15]

- (A) Mutually exclusive and independent
 (B) Exclusive but not independent
 (C) Independent but not mutually exclusive
 (D) None of these



55. The sum of two numbers obtained in a single throw of two dice is 'S'. The probability of 'S' will be maximum when 'S' /

- (A) 5 [June 2015]
 (B) 6
 (C) 7
 (D) 8



56. An unbiased coin is tossed 3 times, expected value of the number of heads is [June 2015]

- (A) 1
 (B) 2
 (C) 1.5
 (D) 0.5



57. When an unbiased dice is rolled, find the odds in favour of getting of multiple of 3.

- (A) 2:3 [June & Dec. 2015]
 (B) 2:1
 (C) 3:2
 (D) 1:2



58. Three coins are rolled. What is the probability of getting exactly two heads.

- (A) $\frac{1}{8}$ [Dec. 2015]
 (B) $\frac{1}{2}$
 (C) $\frac{3}{8}$
 (D) $\frac{5}{8}$



59. Two letter are drawn at random from word "HOME" find the probability that there is not vowel. [Dec. 2015]

- (A) $\frac{1}{2}$
 (B) $\frac{1}{3}$
 (C) $\frac{1}{6}$
 (D) $\frac{2}{3}$



60. A bag contains 15 one rupee coins, 25 two rupee coins and 10 five rupee coins. If a coin is selected at random from the bag, then the probability of not selecting a one rupee coin is: [Dec. 2015]

- (A) $\frac{3}{10}$
 (B) $\frac{7}{10}$
 (C) $\frac{2}{5}$
 (D) $\frac{3}{5}$



61. If $P(A) = \frac{2}{3}, P(B) = \frac{3}{5}, P(A \cup B) = \frac{5}{6} P\left(\frac{A}{B}\right)$ [Dec. 2009 & June 2016]

- (A) $\frac{3}{7}$
 (B) $\frac{5}{7}$
 (C) $\frac{5}{12}$
 (D) $\frac{7}{12}$



62. Two dice are tossed what is the probability that the total is divisible by 3 or 4.

- (A) $\frac{7}{12}$ [June 2016]
 (B) $\frac{5}{12}$
 (C) $\frac{3}{7}$
 (D) $\frac{2}{7}$



COMPILATION OF PAST YEAR QUESTIONS

63. If 2 dice are rolled simultaneously then the probability that their sum is neither 3 nor 6 is

- (A) $\frac{7}{36}$ [June 2016]
 (B) $\frac{13}{36}$
 (C) $\frac{23}{36}$
 (D) $\frac{29}{36}$



64. In a game, cards are thoroughly shuffled and distributed equally among four players. What is the probability that a specific player gets all the four kings? [June 2016]

- (A) $\frac{48c_9}{52c_{13}} \times 4$
 (B) $\frac{48c_9}{52c_{13}}$
 (C) $\frac{48c_{13}}{52c_{13}} \times 4$
 (D) $\frac{48c_{13}}{52c_{13}} \times 4$



65. A bag contains 4 red and 5 black balls. Another bag contains 5 red, 3 black balls. If one ball is drawn at random from each bag. Then the probability that one red and one black ball drawn is _____.

[Nov. 2018 & June 2016]

- (A) $\frac{44}{72}$
 (B) $\frac{37}{72}$
 (C) $\frac{41}{72}$
 (D) $\frac{29}{72}$



66. A bag contains 6 green and 5 red balls. One ball is drawn at random. The probability of getting a red ball is?

- (A) $\frac{5}{11}$ [Dec. 2016]
 (B) $\frac{6}{11}$
 (C) $\frac{5}{9}$
 (D) $\frac{7}{9}$



67. If $P(A) = \frac{1}{2}$, $P(B) = \frac{1}{3}$, $P(A \cup B) = \frac{2}{3}$ then the $P(A \cap B)$? [Dec. 2016]

- (A) $\frac{2}{3}$
 (B) $\frac{1}{6}$
 (C) $\frac{1}{2}$
 (D) $\frac{2}{3}$



68. If $P(A) = \frac{2}{3}$, $P(B) = \frac{3}{8}$, $P(A \cap B) = \frac{1}{4}$ then the event A and B are _____. [Dec. 2016]

- (A) Mutually Exclusive
 (B) Independent
 (C) Impossible
 (D) None of these



69. The probability of getting at least one 6 form 3 thrown of a perfect die is

- (A) $\frac{107}{216}$ [June 2017]
 (B) $\frac{97}{216}$
 (C) $\frac{95}{216}$
 (D) $\frac{91}{46}$



70. For any two event A and B [June 2017]

- (A) $P(A-B) = P(A) - P(B)$
 (B) $P(A-B) = P(A \cap B)$
 (C) $P(A-B) = P(B) - P(A \cap B)$
 (D) $P(B-A) = P(B) - P(A \cap B)$



71. If $P(A) = \frac{2}{3}$, $P(B) = \frac{1}{4}$, $P(A \cap B) = \frac{1}{12}$ then $P\left(\frac{A}{B}\right) =$ [June 2017]

- (A) $\frac{1}{8}$
 (B) $\frac{7}{8}$
 (C) $\frac{5}{8}$
 (D) $\frac{3}{8}$



72. For the events A and B if $P(A) = \frac{1}{2}$, $P(B) = \frac{1}{3}$, $P(A \cap B) = \frac{1}{4}$ then $P\left(\frac{A}{B}\right) =$

- [Dec. 2016&17]
 (A) $\frac{3}{4}$
 (B) $\frac{1}{4}$
 (C) $\frac{5}{8}$
 (D) $\frac{3}{8}$



COMPILATION OF PAST YEAR QUESTIONS

73. If A and B are two mutually exclusive events such $P(A \cup B) = \frac{2}{3}$, $P(A) = \frac{2}{5}$ then $P(B)$

- (A) $\frac{5}{9}$ [Dec. 2017]
 (B) $\frac{4}{9}$
 (C) $\frac{4}{15}$
 (D) $\frac{11}{15}$



74. If a brother and sister are applied for 2 vacancies in the same post, the probability that brother will select is $\frac{1}{7}$ and that if sister is $\frac{1}{5}$, then the probability that only one of them will be selected is [Dec. 2017]

- (A) $\frac{2}{7}$
 (B) $\frac{3}{7}$
 (C) $\frac{5}{7}$
 (D) $\frac{1}{7}$



75. The distribution of demand is as follows

[Dec. 2017]

Demand	5	6	7	8	9	10
Probability	0.05	0.1	0.3	0.4	0.1	0.05

Then mean is given by

- (A) 6.90
 (B) 7.55
 (C) 8.20
 (D) 7.80



76. If A and B are two independent events and $P(A \cup B) = \frac{2}{5}$; $P(B) = \frac{1}{3}$. Find $P(A)$.

[June 2009]

- (A) $\frac{2}{9}$
 (B) $\frac{-1}{3}$
 (C) $\frac{2}{10}$
 (D) $\frac{1}{10}$



77. A random variable X has the following probability distribution.

X	0	1	2	3
P(x)	0	2K	3K	K

Then, $P(x < 3)$ would be: [June 2009]

- (A) $\frac{1}{6}$
 (B) $\frac{1}{3}$
 (C) $\frac{2}{3}$
 (D) $\frac{5}{6}$



78. If $P(A \cap B) = P(A) \times P(B)$, then the events are: [Dec. 2009]

- (A) Independent events
 (B) Mutually exclusive events
 (C) Exhaustive events
 (D) Mutually inclusive events



79. $E(XY)$ is also known as: [Dec. 2009]

- (A) $E(X) + E(Y)$
 (B) $E(X)E(Y)$
 (C) $E(X) - E(Y)$
 (D) $E(X) \div E(Y)$



80. Consider two events A and B not mutually exclusive, such that $P(A) = \frac{1}{4}$, $P(B) = \frac{2}{5}$,

$P(A \cup B) = \frac{1}{2}$, then $P(A \cap B)$ is

[June 2010]

- (A) $\frac{3}{7}$
 (B) $\frac{2}{10}$
 (C) $\frac{1}{10}$
 (D) None of the above



COMPILATION OF PAST YEAR QUESTIONS

81. If x be the sum of two numbers obtained when two die are thrown simultaneously then $P(x \geq 7)$ is [June 2010]

- (A) $\frac{5}{12}$
- (B) $\frac{7}{12}$
- (C) $\frac{11}{15}$
- (D) $\frac{3}{8}$



82. A dice is thrown once. What is the mathematical expectation of the number on the dice? [Dec. 2010]

- (A) $\frac{16}{6}$
- (B) $\frac{13}{2}$
- (C) 3.5
- (D) 4.5



83. Let A and B two events in a sample space S such that $P(A) = \frac{1}{2}$; $P(B) = \frac{5}{8}$, $P(A \cup B) = \frac{3}{4}$; Find $P(A \cap B)$ [June 2012]

- (A) $\frac{3}{4}$
- (B) $\frac{1}{4}$
- (C) $\frac{3}{16}$
- (D) None of these



84. The probability of selecting a sample of size 'n' out of a population of size N by simple random sampling with replacement is:

- (A) $\frac{1}{N}$ [June 2013]
- (B) $\frac{1}{N^n}$
- (C) $\frac{1}{{}^N C_n}$
- (D) $\frac{1}{N \cdot n!}$



85. Let the distribution function of a random variable X be $F(X) = P(X \leq X)$. Then $F(5) - F(2)$ is: [Dec. 2014]

- (A) $P(2 < X < 5)$
- (B) $P(2 \leq X < 5)$
- (C) $P(2 \leq X \leq 5)$
- (D) $P(2 < X \leq 5)$



86. If $P(A) = \frac{2}{3}$, $P(B) = \frac{3}{5}$ and $P(A \cup B) = \frac{5}{6}$ then $P\left(\frac{A}{B}\right)$ is [June 2016]

- (A) $\frac{7}{12}$
- (B) $\frac{5}{12}$
- (C) $\frac{1}{4}$
- (D) $\frac{1}{2}$



87. Two broad divisions of probability are:

[May 2018]

- (A) Subjective probability and objective probability
- (B) Deductive probability and mathematical probability
- (C) Statistical probability and mathematical probability
- (D) None of these



88. The term "chance" and probability are synonyms:

[May 2018]

- (A) True
- (B) False
- (C) Both
- (D) None



89. The theorem of compound probability states that for any two events A and B

[May 2018]

- (A) $P(A \cap B) = P(A) \times P\left(\frac{B}{A}\right)$
 (B) $P(A \cup B) = P(A) \times P\left(\frac{B}{A}\right)$
 (C) $P(A \cap B) = P(A) \times P(B)$
 (D) $P(A \cup B) = P(A) + P(B) - P(A \cap B)$



90. If $Y \geq x$ then mathematical expectation is

- (A) $E(X) > E(Y)$ [June 2019]
 (B) $E(X) \leq E(Y)$
 (C) $E(X) = E(Y)$
 (D) $E(X) \cdot E(Y) = 1$



91. Two event A and B are such that they do not occurs simultaneously then they are called _____ events [June 2019]

- (A) Mutually exhaustive
 (B) Mutually exclusive
 (C) Mutually independent
 (D) Equally likely



92. According to bayee's theorem,

$$P(E_k / A) = \frac{P(E_k)P\left(\frac{A}{E_k}\right)}{\sum_{i=1}^n P(E_i)P\left(\frac{A}{E_i}\right)} \text{ here}$$

[June 2019]

- (A) E_1, E_2, \dots are mutually exclusive
 (B) $P\left(\frac{E}{A_1}\right), P\left(\frac{E}{A_2}\right), \dots$ are equal to 1
 (C) $P\left(\frac{A_1}{E}\right), P\left(\frac{A_2}{E}\right), \dots$ are equal to 1
 (D) A & E_1 's are disjoint sets



93. If a coin is tossed 5 times then the probability of getting Tail and Head occurs alternatively is [June 2019]

- (A) $\frac{1}{8}$
 (B) $\frac{1}{16}$
 (C) $\frac{1}{32}$
 (D) $\frac{1}{64}$



94. When 2 dice are thrown Simultaneously then the probability of getting at least one 5 is

- (A) $\frac{11}{36}$ [June 2019]
 (B) $\frac{5}{36}$
 (C) $\frac{8}{15}$
 (D) $\frac{1}{7}$



95. Two letters are chosen from the word HOME. What is the probability that the letters chosen are not vowels.

- (A) $\frac{1}{2}$ [Nov. 2019]
 (B) $\frac{1}{6}$
 (C) $\frac{2}{3}$
 (D) 0



96. If A, B, C are three mutually exclusive and exhaustive events such that:

- $P(A) = 2P(B) = 3P(C)$ what is $P(B)$?
 (A) $\frac{6}{11}$ [Nov. 2019]
 (B) $\frac{3}{11}$
 (C) $\frac{1}{6}$
 (D) $\frac{1}{3}$



COMPILATION OF PAST YEAR QUESTIONS

97. What is the probability of getting 7 or 11 when two dices are thrown?

- (A) $\frac{2}{9}$ [Nov. 2019]
- (B) $\frac{6}{36}$
- (C) $\frac{10}{36}$
- (D) $\frac{2}{36}$



98. A bag contains 15 one rupee Coins, 25 two rupee coins if a coin is selected at random than probability for not selecting a one rupee coin is: [Nov. 2019]

- (A) 0.30
- (B) 0.20
- (C) 0.25
- (D) 0.70



99. What is the probability of occurring 4 or more than 4 accidents. [Nov. 2019]

No. of acc.	1	2	3	4	5	6	7
Frequency	8	17	15	24	27	18	9

- (A) 24/118
- (B) 69/118
- (C) 78/118
- (D) 80/118



100. When 2 fair dice are thrown what is the probability of getting the sum which is a multiple of 3? [Nov. 2020]

- (A) $\frac{4}{36}$
- (B) $\frac{13}{36}$
- (C) $\frac{2}{36}$
- (D) $\frac{12}{36}$



101. When two coins are tossed simultaneously the probability of getting at least one tail?

- (A) 1 [Nov. 2020]
- (B) 0.75
- (C) 0.5
- (D) 0.25



102. When 3 dice are rolled simultaneously the probability of a number on the third die is greater than the sum of the numbers on two dice. [Nov. 2020]

- (A) $\frac{12}{216}$
- (B) $\frac{36}{216}$
- (C) $\frac{48}{216}$
- (D) $\frac{20}{216}$



103. If A speaks 75% of truth and B speaks 80% of truth. In what percentage both of them likely contradict with each other in narrating the same questions?

- (A) 0.60 [Nov. 2020]
- (B) 0.45
- (C) 0.65
- (D) 0.35



104. An event that can be subdivided into further events is called as. [Jan. 2021]

- (A) A composite event
- (B) A complex event
- (C) A mixed event
- (D) A simple event



105. Three identical and balanced dice are rolled. The probability that the same number will appear on each of them is.

- (A) $\frac{1}{6}$ [Jan. 2021]
- (B) $\frac{1}{18}$
- (C) $\frac{1}{36}$
- (D) $\frac{1}{24}$



106. A basket contains 15 white balls, 25 red balls and 10 blue balls. If a ball is selected at random, the probability of selecting not a white ball. [Jan. 2021]

- (A) 0.20
- (B) 0.25
- (C) 0.60
- (D) 0.70



COMPILATION OF PAST YEAR QUESTIONS

107. Two dice are thrown simultaneously. The probability of a total score of 5 from the outcomes of dice is [Jan. 2021]

- (A) $\frac{1}{18}$
- (B) $\frac{1}{12}$
- (C) $\frac{1}{9}$
- (D) $\frac{2}{5}$



108. If an unbiased coin is tossed twice, then the probability of obtaining at least one tail is

- (A) 1 [Jan. 2021]
- (B) 0.5
- (C) 0.75
- (D) 0.25



109. If an unbiased coin is tossed three times, what is the probability of getting more than one head? [Jan. 2021]

- (A) $\frac{1}{2}$
- (B) $\frac{3}{8}$
- (C) $\frac{7}{8}$
- (D) $\frac{1}{3}$



110. If there are 48 marbles marked with numbers 1 to 48, then the probability of selecting a marble having the number divisible by 4 is: [July 2021]

- (A) $\frac{1}{2}$
- (B) $\frac{2}{3}$
- (C) $\frac{1}{3}$
- (D) $\frac{1}{4}$



111. A bag contains 7 blue and 5 Green balls. One ball is drawn at random. The probability of getting a blue ball is ____.

[July 2021]

- (A) $\frac{5}{12}$
- (B) $\frac{12}{35}$
- (C) $\frac{7}{12}$
- (D) 0



112. The probability that a football team losing a match at Kolkata is $\frac{3}{5}$ and winning a match at Bengaluru is $\frac{6}{7}$; is probability of the team winning at least one match is ____.

[July 2021]

- (A) $\frac{3}{35}$
- (B) $\frac{18}{35}$
- (C) $\frac{32}{35}$
- (D) $\frac{17}{35}$



113. If in a class, 60% of the student study Mathematics and science and 90% of the student study science, then the probability of a student studying mathematics given that he/she is already studying science is: [July 2021]

- (A) $\frac{1}{4}$
- (B) $\frac{2}{3}$
- (C) 1
- (D) $\frac{1}{2}$



COMPILATION OF PAST YEAR QUESTIONS

114. A biased coin is such that the probability of getting a head is thrice the probability of getting a tail, if the coin is tossed 4 times, what is the probability of getting a head all the times? [July 2021]

- (A) $\frac{2}{5}$
- (B) $\frac{81}{128}$
- (C) $\frac{81}{256}$
- (D) $\frac{81}{64}$



115. If there are 16 phones, 10 of them are Android and 6 of them are of Apple, then the probability of 4 randomly selected phones to include 2 Android and 2 Apple phone is: [July 2021]

- (A) 0.47
- (B) 0.51
- (C) 0.37
- (D) 0.27



116. The value of K for the probability density function of a variate X is equal to: [July 2021]

X	0	1	2	3	4	5	6
P(x)	5k	3k	4k	6k	7k	9k	11k

- (A) $\frac{1}{39}$
- (B) $\frac{1}{40}$
- (C) $\frac{1}{49}$
- (D) $\frac{1}{45}$



117. For any two dependent events A and B, $P(A) = \frac{5}{9}$ and $P(B) = \frac{6}{11}$ and $P(A \cap B) = \frac{10}{33}$. What are the values of

$$P\left(\frac{A}{B}\right) \text{ and } P\left(\frac{B}{A}\right)?$$

[Dec. 2021]

- (A) $\frac{5}{9}, \frac{6}{11}$
- (B) $\frac{5}{6}, \frac{6}{11}$
- (C) $\frac{1}{9}, \frac{2}{9}$
- (D) $\frac{2}{9}, \frac{4}{9}$



118. Which of the following pair of events E and F are mutually exclusive? [Dec. 2021]

- (A) $E = \{\text{Ram's age is 13}\}$ and $F = \{\text{Ram is studying in a college}\}$
- (B) $E = \{\text{Sita studies in a school}\}$ and $F = \{\text{Sita is a play back singer}\}$
- (C) $E = \{\text{Raju is an elder brother in a family}\}$ and $F = \{\text{Raju's father has more than one son}\}$
- (D) $E = \{\text{Banu studied B.A. English literature and}\}$ $F = \{\text{Banu can read English novels}\}$



119. Assume that the probability for rain on a day is 0.4. An umbrella salesman can earn Rs. 400 per day in case of rain on that day and will lose Rs. 100 per day if there is no rain. The expected earnings in (in Rs.) per day of the salesman is [Dec. 2021]

- (A) 400
- (B) 200
- (C) 100
- (D) 0



120. The probability distribution of a random variable x is given below: [Dec. 2021]

x:	1	2	4	5	6
P:	0.15	0.25	0.2	0.3	0.1

What is the standard deviation of x?

- (A) 1.49
- (B) 1.56
- (C) 1.69
- (D) 1.72



COMPILATION OF PAST YEAR QUESTIONS

121. In a group of 20 males and 15 females, 12 males and 8 females are service holders. What is the probability that a person selected at random from the group is a service holder given that the selected person is a male? [Dec. 2021]

- (A) 0.40
- (B) 0.60
- (C) 0.45
- (D) 0.55



122. There are 3 boxes with the following composition:

Box I : 7 Red + 5 White + 4 Blue balls

Box II : 5 Red + 6 White + 3 Blue balls

Box III : 4 Red + 3 White + 2 Blue balls

One of the boxes is selected at random and a ball is drawn from it. What is the probability the drawn ball is red?



- (A) $\frac{1249}{3024}$
- (B) $\frac{1247}{3004}$
- (C) $\frac{1147}{3024}$
- (D) $\frac{1}{2}$

[Dec. 2021]

123. For a probability distribution, probability is given by, $P(X_i) = \frac{X_i}{k}, X_i, = 1, 2, \dots, 9$. The value of k is [Dec. 2021]

- (A) 55
- (B) 9
- (C) 45
- (D) 81














ANSWER KEY

1.	B	2.	C	3.	C	4.	D	5.	B
6.	A	7.	C	8.	C	9.	D	10.	A
11.	B	12.	B	13.	A	14.	C	15.	C
16.	A	17.	B	18.	A	19.	D	20.	C
21.	B	22.	D	23.	B	24.	C	25.	B
26.	B	27.	C	28.	D	29.	B	30.	B
31.	B	32.	C	33.	B	34.	C	35.	A
36.	B	37.	D	38.	B	39.	C	40.	C
41.	A	42.	B	43.	C	44.	D	45.	B
46.	B	47.	B	48.	B	49.	D	50.	C
51.	B	52.	B	53.	A	54.	C	55.	C
56.	C	57.	D	58.	C	59.	C	60.	B
61.	D	62.	A	63.	D	64.	A	65.	B
66.	A	67.	B	68.	B	69.	D	70.	D
71.	A	72.	A	73.	C	74.	A	75.	B
76.	D	77.	D	78.	A	79.	B	80.	D
81.	B	82.	C	83.	B	84.	B	85.	D
86.	A	87.	A	88.	A	89.	A	90.	B
91.	B	92.	A	93.	B	94.	A	95.	B
96.	B	97.	A	98.	D	99.	C	100.	D
101.	B	102.	D	103.	B	104.	A	105.	C
106.	D	107.	C	108.	C	109.	A	110.	D
111.	C	112.	C	113.	B	114.	C	115.	C
116.	D	117.	A	118.	A	119.	C	120.	C
121.	B	122.	A	123.	C				

COMPILATION OF PAST YEAR QUESTIONS

(This is Vidhyoday's unique compilation of past attempts CA-F/CPT questions asked under Maths/Stats section.)

CHAPTER – 12 THEORETICAL DISTRIBUTIONS

1. If $(0.7+0.3)^{10}$ and $q = 0.3$ then variance is
(A) 4.41
(B) 2.1
(C) 1.44
(D) Not

2. If in a factory average 3 workers remain absent every day, what is the probability that on a given day 2 workers will remain absent
(A) 0.34
(B) 0.15
(C) 0.50
(D) 0.22

3. In a Normal Distribution, if point of inflexion are 6 and 14 then Mean Deviation is
(A) 4
(B) 3.2
(C) 3
(D) 2.5
[June 2011]

4. In a B.P. Standard Deviation is 10, Mean is 20 then find its parameters i.e. n and p .
(A) $40, \frac{1}{2}$
(B) $20, \frac{1}{2}$
(C) $10, \frac{1}{2}$
(D) Not possible

5. In a Normal Distribution if $x = 35$, $z = 2$ and $x = 40$, $z = 3$, find μ and σ .
(A) 25, 5
(B) 30, 10
(C) 25, 10
(D) 30, 5

6. If mean of Normal Distribution is 42 and number of observation are 100 then inter quartile range if Standard Deviation is 6
(A) 4.05
(B) 2.10
(C) 8.10
(D) 6.05

7. What is the relationship between mean and variance in a Poisson's Distribution
[Dec. 2016/June 2017/Dec. 2017]
(A) Mean $>$ Variance
(B) Mean $<$ Variance
(C) Mean = Variance
(D) They are not related

8. If in a Binomial Distribution $10 P(x = 0) = P(x = 1)$ and mean = 5 find $1-p$.
(A) $\frac{1}{3}$
(B) $\frac{2}{3}$
(C) $\frac{1}{4}$
(D) $\frac{1}{2}$

9. If the demand of car with mean 1.5 in garage is in Poisson's Distribution and there are only 2 cars available in the garage then what is the probability that on given day there will be demand of only 1 car
(A) 21.3%
(B) 33.4%
(C) 56.5%
(D) 48.7%
[Dec. 2011]

10. In a Binomial Distribution if $n = 8$ and $p = 0.5$ then $p[|x - 4| \leq 2]$
(A) 0.86
(B) 0.91
(C) 0.93
(D) 0.85

11. $[x - \mu/\sigma]^2$ is which distribution
(A) Binomial
(B) Poisson
(C) Normal
(D) F Distn.


COMPILATION OF PAST YEAR QUESTIONS

12. $P(x = 0) = P(x = 2)$ find expected value of Poisson's Distribution [June 2009]

- (A) 2
- (B) 4
- (C) $\sqrt{2}$
- (D) 1



13. If x follows a Binomial Distribution with $E(x) = 2, V(x) = 4/3$ find n [Dec. 2009]

- (A) 15
- (B) 10
- (C) 6
- (D) 4



14. Binomial Distribution has how many parameters [Dec. 2009]

- (A) One
- (B) Two
- (C) Three
- (D) Four



15. In a Standard Normal Variate, variance is [June 2010]

- (A) 0
- (B) -1
- (C) 1
- (D) 2



16. In a Poisson's Distribution $P(x = 3) = 5 P(x = 5)$ find Standard Deviation [June 2010]

- (A) 4
- (B) 2
- (C) 1
- (D) 0



17. In a Binomial Distribution the parameters are 9 and $1/3$ what is the variance [June 2010]

- (A) 1
- (B) 0
- (C) 2
- (D) $\sqrt{2}$



18. If a distribution is such that $P(6, p)$ and $P(x = 2) = 9 P(x = 4)$ then p is [June 2010]

- (A) $\frac{3}{4}$
- (B) $\frac{1}{2}$
- (C) $\frac{1}{4}$
- (D) $\frac{2}{3}$



19. Area under Normal Distribution curve is [Dec. 2010]

- (A) 2 units
- (B) 1 unit
- (C) 3 units
- (D) None of these



20. If Standard Deviation of Poisson's Distribution is 2, what is its mode [Dec. 2010]

- (A) 4
- (B) 3
- (C) Both (A) and (B)
- (D) 5



21. In a Normal Distribution : $N(\mu, \sigma^2)$ what is $P(\mu - 3\sigma < x < \mu + 3\sigma)$ [Dec. 2010 & June 2015]

- (A) 68.5%
- (B) 95.5%
- (C) 99.2%
- (D) 99.73%



22. In a Binomial Distribution $B(n, p)$ mean is 6 and variance is 2 then p is [Dec. 2010]

- (A) $\frac{1}{2}$
- (B) $\frac{3}{4}$
- (C) $\frac{1}{3}$
- (D) $\frac{2}{3}$



23. If $x \sim N(3, 36)$ and $y \sim N(5, 64)$ are two independent Normal variate will their standard parameters of distribution, then if $(x+y) \sim N(8, A)$ also follows normal distribution. The value of A will be [June 2011]

- (A) 10
- (B) 100
- (C) 50
- (D) 1



COMPILATION OF PAST YEAR QUESTIONS

24. The mean of binomial distribution is 20 and standard deviation is 4 then its parameters are

- (A) $50, \frac{4}{5}$ [Dec. 2011]
 (B) $100, \frac{4}{5}$
 (C) $100, \frac{1}{5}$
 (D) $50, \frac{1}{5}$



25. The binomial distribution with mean 3 and variance 2 is: [Dec. 2011]

- (A) $\left(\frac{1}{3} + \frac{2}{3}\right)^9$
 (B) $\beta\left(9, \frac{1}{3}\right)$
 (C) $\beta\left(12, \frac{2}{3}\right)$
 (D) Both (A) and (B)



26. For normal distribution the relation between quartile deviation (Q.D.) and standard deviation (S.D.) is

- (A) $4SD = 6QD$
 (B) $4QD = 6SD$
 (C) $4SD = 5QD$
 (D) $5SD = 4QD$



27. If x is a Poisson's variate and $E(x) = 1$ then $P(x > 1)$ is [June 2012]

- (A) $\frac{1}{e}$
 (B) $\frac{2}{e}$
 (C) $1 - \frac{2}{e}$
 (D) $1 - \frac{1}{e}$



28. If a random variable x follows Poisson distribution such that $E(x^2) = 30$ then the variance of the distribution is

- (A) 6 [Dec. 2012]
 (B) 5
 (C) 3
 (D) 2



29. For a normal distribution [Dec. 2012]

- (A) 1st and 2nd Quartile are equidistant from median
 (B) 2nd and 3rd Quartile are equidistant from median
 (C) 1st and 3rd Quartile are equidistant from median
 (D) None



30. If parameters of a binomial distribution are n and p then this distribution tends to a Poisson distribution when

- (A) $n \rightarrow 0$ & $p \rightarrow \infty$ [Dec. 2012]
 (B) $n \rightarrow 1$ & $p \rightarrow 0$
 (C) $n \rightarrow \infty$ & $p \rightarrow 0$
 (D) $n \rightarrow \infty$ & $p \rightarrow 1$



31. if $x \sim B(5, P)$ and $P(x = 2) = 0.4362$ and $P(x = 3) = 0.2181$ then $p =$

[June 2013]

- (A) $\frac{1}{3}$
 (B) $\frac{2}{3}$
 (C) $\frac{1}{4}$
 (D) $\frac{3}{4}$



32. In Binomial Distribution, $\mu = 4$ and $\sigma^2 = 3$ then mode = [June 2013]

- (A) 5
 (B) 3
 (C) 4
 (D) 5 & 4



33. In a certain Poisson frequency distribution the probability corresponding to two successes is half of the probability corresponding to three successes. The mean of the distribution is [Dec. 2013]

- (A) 2
 (B) 3
 (C) 5
 (D) 6



34. There are 75 students in a class and their average marks is 50 and S.D. of marks is 5. Number of students who have secured more than 60 marks. (Given that area under the normal curve for $z = 2$ is 0.4772) is _____.

- (A) 10
 (B) 5
 (C) 3
 (D) 2



COMPILATION OF PAST YEAR QUESTIONS

35. In normal distribution mean, median and mode are

- (A) Never equal
- (B) Always equal
- (C) May be equal
- (D) Non existent



36. If a variate x has mean greater than variance then its distribution will be

- (A) Poisson's [June 2014]
- (B) Normal
- (C) Binomial
- (D) Chi-square



37. Mean and Variance of a binomial are 4 and $\frac{4}{3}$ respectively then $P(x \geq 1)$ will be

- (A) $\frac{1}{729}$ [June 2014]
- (B) $\frac{646}{729}$
- (C) $\frac{728}{729}$
- (D) $\frac{98}{729}$



38. 5000 students were appeared in an examination. The mean of marks was 39.5 with standard deviation 12.5 marks. Assuming the distribution to be normal find the number of students recorded more than 60 marks. [The value of z from 0 to 1.64 is 0.4495] [June 2014]

- (A) 2252
- (B) 2752
- (C) 252
- (D) 2248



39. For a Binomial distribution mean is 4 and variance is 3, then 3rd central moment is [Dec. 2014]

- (A) $\frac{5}{2}$
- (B) $\frac{7}{4}$
- (C) $\frac{3}{2}$
- (D) $\frac{1}{3}$



40. In a Normal Distribution mean = 2 and variance = 4 then, 4th central moment is

[Dec. 2014]

- (A) 16
- (B) 32
- (C) 48
- (D) 64



41. A Random variables x follows uniform distribution in the interval $[-3, 7]$. Then the mean of distribution is

- (A) 2
- (B) 4
- (C) 5
- (D) 6



42. X and Y are two independent Normal variables then the distribution of $x+y$ is _____ [Dec. 2014]

- (A) Normal distribution
- (B) T-distribution
- (C) Chi-Square distribution
- (D) F-distribution



43. In the Binomial distribution the parameters are n and p , then x assumes values [June 2015]

- (A) Between 0 and n
- (B) Between 0 and n both inclusive
- (C) Between 0 and 1
- (D) Between 0 and ∞



44. In _____ distribution, Mean = Variance. [June 2015]

- (A) B
- (B) P
- (C) N
- (D) Chi-square



45. Wages paid to workers follows

[Dec. 2015]

- (A) B
- (B) P
- (C) N
- (D) Chi-square



COMPILATION OF PAST YEAR QUESTIONS

46. For a binomial distribution the parameters are 15 and $1/3$. Find mode:

- (A) 5 [Dec. 2015]
 (B) 4
 (C) 4 or 5
 (D) 6



47. Standard Deviation of binomial distribution is: [Dec. 2015]

- (A) np
 (B) npq
 (C) \sqrt{npq}
 (D) $(npq)^2$



48. For a Poisson variate x , $P(x=1) = P(x=2)$. What is mean of x ? [June 2016]

- (A) 1
 (B) 2
 (C) $\sqrt{2}$
 (D) 3



49. In a discrete random variable follows uniform distribution and assumes only the values 8, 9, 11, 15, 18, 20. The $P(x \leq 15)$ is _____. [June 2016]

- (A) $\frac{1}{2}$
 (B) $\frac{1}{3}$
 (C) $\frac{2}{3}$
 (D) $\frac{1}{4}$



50. In Poisson distribution $\mu_4 = 2$ then find μ_2 .

- (A) 3 [Dec. 2016]
 (B) $\frac{3}{2}$
 (C) 2
 (D) 1



51. If $X \sim N(50, 16)$ then which of the following is not possible [June 2017]

- (A) $P(x > 60) = 0.30$
 (B) $P(x > 50) = 0.50$
 (C) $P(x < 60) = 0.40$
 (D) $P(x < 50) = 0.50$



52. An example of a bi-parametric discrete probability distribution is

[Dec. 2016 & May 2018]

- (A) Binomial distribution
 (B) Poisson distribution
 (C) Normal distribution
 (D) Both (A) and (C)



53. In normal distribution 95% observation lies between _____ & _____. [Dec. 2017]

- (A) $(\mu - 2\sigma, \mu + 2\sigma)$
 (B) $(\mu - 3\sigma, \mu + 3\sigma)$
 (C) $(\mu - 1.96\sigma, \mu + 1.96\sigma)$
 (D) $(\mu - 2.58\sigma, \mu + 2.58\sigma)$



54. Shape of Normal Distribution Curve:

[Dec. 2009]

- (A) Depends on its parameters
 (B) Does not depend on its parameters
 (C) Either (A) or (B)
 (D) Neither (A) nor (B)



55. In a Binomial Distribution, if mean is k -times the variance, then the value of ' k ' will be _____. [June 2011]

- (A) p
 (B) $\frac{1}{p}$
 (C) $1 - p$
 (D) $\frac{1}{1 - p}$



56. For binomial distribution [June 2012]

- (A) Variance < Mean
 (B) Variance = Mean
 (C) Variance > Mean
 (D) None of the above



57. If a random variable x follows Poisson distribution such that $E(x) = 30$, then the variance of the distribution is

- (A) 7 [Dec. 2012]
 (B) 5
 (C) 30
 (D) 20



COMPILATION OF PAST YEAR QUESTIONS

58. In a normal distribution quartile deviation is 6, the standard deviation will be

- (A) 4 [Dec.2012]
 (B) 9
 (C) 7.5
 (D) 6



59. For Poisson Distribution: [June 2013]

- (A) Mean and Standard Deviations are equal
 (B) Mean and variance are equal
 (C) Standard Deviation and variance are equal
 (D) Both (A) and (B) are correct



60. Which of the following is not a characteristic of a normal probability distribution? [June 2013]

- (A) Mean of the normally distributed lies at the centre of its normal curve.
 (B) It is multi-modal
 (C) The mean, median and mode are equal
 (D) It is a symmetric curve



61. An approximate relation between quartile deviation (QD) and standard deviation (S.D) of normal distribution is:

- (A) $5 \text{ QD} = 4 \text{ SD}$ [June 2013]
 (B) $4 \text{ QD} = 5 \text{ SD}$
 (C) $2 \text{ QD} = 3 \text{ SD}$
 (D) $3 \text{ QD} = 2 \text{ SD}$



62. T-test can be used only when the sample has been taken from [Dec. 2014]

- (A) Binomial Population
 (B) Poisson Population
 (C) Normal Population
 (D) Exponential Population



63. The normal curve is: [June 2016]

- (A) Positively skewed
 (B) Negatively skewed
 (C) Symmetrical
 (D) All these



64. If x and y are independent normal variates with Mean and Standard Deviation as μ_1 and μ_2 and σ_1 and σ_2 respectively, then $z = x + y$ also follows normal distribution with [Dec.2016]

(A) Mean = $\mu_1 + \mu_2$ and S.D. = 0 respectively

(B) Mean = 0 and S.D. = $\sigma_1^2 + \sigma_2^2$

(C) Mean = $\mu_1 + \mu_2$ and S.D. = $\sqrt{\sigma_1^2 + \sigma_2^2}$

(D) None of these



65. Name the distribution which has Mean = Variance [Dec. 2016]

(A) Binomial

(B) Poisson

(C) Normal

(D) Chi-square



66. If for a distribution mean = variance, then the distribution is said to be:

(A) Normal [June 2017]

(B) Binomial

(C) Poisson

(D) None of the above



67. The variance of a binomial distribution with parameters n and p is: [May 2018]

(A) $np^2(1-p)$

(B) $\sqrt{np - (1-p)}$

(C) $np(1-p)$

(D) $n^2p^2(1-p)^2$



68. X is a poisson variate satisfying the following condition $9 P(X = 4) + 90 P(X = 6) = P(X = 2)$. What is the value of $P(X \leq 1)$?

(A) 0.5655 [May 2018]

(B) 0.6559

(C) 0.7358

(D) 0.8201



COMPILATION OF PAST YEAR QUESTIONS

69. What is the first quartile of x having the following probability density function?

$$f(x) = \frac{1}{\sqrt{72\pi}} e^{-\frac{(x-10)^2}{72}} \text{ for } -\infty < x < \infty$$

[May 2018]

- (A) 4
- (B) 5
- (C) 5.95
- (D) 6.75



70. Probability distribution may be

[May 2018]

- (A) Discrete
- (B) Continuous
- (C) Infinite
- (D) (A) or (B)



71. If the area of standard normal curve between $z = 0$ to $z = 1$ is 0.3413, then the value of $\phi(1)$ is

[May 2018]

- (A) 0.5000
- (B) 0.8413
- (C) -0.5000
- (D) 1



72. If for a normal distribution $Q_1 = 54.52$ and $Q_3 = 78.86$, then the median of the distribution is

[Nov. 2018]

- (A) 12.17
- (B) 39.43
- (C) 66.69
- (D) None of these



73. What is the mean of X having the following density function?

$$f(x) = \frac{1}{4\sqrt{2\pi}} e^{-\frac{(x-10)^2}{32}} \text{ for } -\infty < x < \infty$$

[Nov. 2018]

- (A) 10
- (B) 4
- (C) 40
- (D) None of the above



74. The probability that a student is not a swimmer is $\frac{1}{5}$, then the probability that out of five students four are swimmer is

(A) $\left(\frac{4}{5}\right)^4 \left(\frac{1}{5}\right)$

[Nov. 2018]

(B) ${}^5C_1 \left(\frac{1}{5}\right)^4 \left(\frac{4}{5}\right)$

(C) ${}^5C_4 \left(\frac{4}{5}\right)^4 \left(\frac{1}{5}\right)$

(D) None of the above



75. 4 coins were tossed 1600 times. What is the probability that all 4 coins do not turn head upward at a time?

[June 2019]

(A) $1600 e^{-100}$

(B) $1000 e^{-100}$

(C) $100 e^{-1600}$

(D) e^{-100}



76. If mean and variance are 5 and 3 respectively then relation between p and q is:

[June 2019]

(A) $p > q$

(B) $p < q$

(C) $p = q$

(D) p is symmetric



77. In a Poisson distribution if $P(x = 4) = P(x = 5)$ then the parameter of Poisson distribution is:

[June 2019]

(A) $\frac{4}{5}$

(B) $\frac{5}{4}$

(C) 4

(D) 5



78. Area between -1.96 to $+1.96$ in a normal distribution is:

[June 2019]

(A) 95.45%

(B) 95%

(C) 96%

(D) 99%



COMPILATION OF PAST YEAR QUESTIONS

79. If the points of inflexion of a normal curve are 40 and 60 respectively, then its mean deviation is: [June 2019]

- (A) 8
- (B) 45
- (C) 50
- (D) 60



80. Area under $U \pm 3\sigma$ [Nov. 2019]

- (A) 99.73%
- (B) 99%
- (C) 100%
- (D) 99.37%



81. For a Poisson distribution: [Nov. 2019]

- (A) Mean and SD are equal
- (B) Mean and variance are equal
- (C) SD and Variance
- (D) Both (A) and (B)



82. For mode when $n = 15$ and $p = \frac{1}{4}$ in binomial distribution? [Nov. 2019]

- (A) 4
- (B) 4 and 3
- (C) 4.2
- (D) 3.75



83. In Poisson distribution, if $P(x=2) = \frac{1}{2} P(x=3)$ find m ? [Nov. 2019]

- (A) 3
- (B) $\frac{1}{6}$
- (C) 6
- (D) $\frac{1}{3}$



84. In a binomial distribution $B(n, p)$ $n = 4$ $P(x=2) = 3x P(x=3)$ find p [Nov. 2019]

- (A) $\frac{1}{3}$
- (B) $\frac{2}{3}$
- (C) $\frac{6}{4}$
- (D) $\frac{4}{3}$



85. What is the mean and SD

x if $f(x) = \frac{\sqrt{2}}{\sqrt{\pi}} e^{-2(x-3)^2}, -\infty < x < \infty$ [Nov. 2019]

- (A) $3, \frac{1}{2}$
- (B) $3, \frac{1}{4}$
- (C) $2, \frac{1}{2}$
- (D) $2, \sqrt{2}$



86. Which of the following is uni-parametric distribution? [Nov. 2020]

- (A) Poisson
- (B) Normal
- (C) Binomial
- (D) Hyper geometric



87. If the probability of success in a binomial distribution is less than one-half, then the binomial distribution ____.

- (A) is skewed to left
- (B) is skewed to right
- (C) has two modes
- (D) has median at a point $> \text{mean} + \frac{1}{2}$



88. If we change the parameter(s) of a ____ distribution the sharpe of probability curve does not change. [Nov. 2020]

- (A) Normal
- (B) Binomial
- (C) Poisson
- (D) Non-Gaussian



89. Which one of the following has Poisson distribution? [Nov. 2020]

- (A) The number of days to get a complete cure
- (B) The number of defects per meter on long roll of coated polythene sheet
- (C) The errors obtained in repeated measuring of the length of a rod
- (D) The number of claims rejected by an insurance agency



COMPILATION OF PAST YEAR QUESTIONS

90. For a Poisson distributed variable X, we have $P(X = 7) = 8 P(X = 9)$, the mean of the distribution is: [Nov. 2020]

- (A) 3
- (B) 4
- (C) 7
- (D) 9



91. The quartile deviation of a normal distribution with mean 10 and standard deviation 4 is _____. [Nov. 2020]

- (A) 54.24
- (B) 23.20
- (C) 0.275
- (D) 2.70



92. If the parameter of Poisson distribution is m and $(\text{Mean} + \text{S. D.}) = \frac{6}{25}$ then find m:

- (A) $\frac{3}{25}$
- (B) $\frac{1}{25}$
- (C) $\frac{4}{25}$
- (D) $\frac{3}{5}$

[Nov. 2020]



93. A coin with probability for head as $\frac{1}{5}$ is tossed 100 times. The standard deviation of the number of heads turned up is.

- (A) 3
- (B) 2
- (C) 4
- (D) 6

[Jan. 2021]



94. If x is a Poisson variable and $P(x = 1) = P(x = 2)$, then $P(x = 4)$ is [Jan. 2021]

- (A) $\frac{2}{3}e^{-2}$
- (B) $\frac{2}{3}e^4$
- (C) $\frac{3}{2}e^{-2}$
- (D) $\frac{3}{2}e^4$



95. Which one of the following is an uniparametric distribution? [Jan. 2021]

- (A) Poisson
- (B) Normal
- (C) Binomial
- (D) Hyper geometric



96. For a normal distribution, the value of third moment about mean is. [Jan. 2021]

- (A) 0
- (B) 1
- (C) 2
- (D) 3



97. In normal distribution, Mean, Median and Mode are: [July 2021]

- (A) Zero
- (B) Not Equal
- (C) Equal
- (D) Null



98. It is Poisson variate such that $P(x = 1) = 0.7$, $P(x = 2) = 0.3$, then $P(x = 0) =$

- (A) $e^{\frac{6}{7}}$
- (B) $e^{\frac{-6}{7}}$
- (C) $e^{\frac{-2}{3}}$
- (D) $e^{\frac{-1}{3}}$

[July 2021]



99. Which of the following diagram is the most appropriate to represents various heads in total cost? [July 2021]

- (A) Pie chart
- (B) Bar graph
- (C) Multiple Line chart
- (D) Scatter Plot



100. If x is a binomial variate with $P = \frac{1}{3}$, for the experiment of 90 trials, then the standard deviation is equal to: [July 2021]

- (A) $-\sqrt{5}$
- (B) $\sqrt{5}$
- (C) $2\sqrt{5}$
- (D) $\sqrt{15}$



COMPILATION OF PAST YEAR QUESTIONS

101. For a certain type of mobile, the length of time between charges of the battery is normally distributed with a mean of 50 hours and a standard deviation of 15 hours. A person owns one of these mobiles and want to know the probability that the length of time will be between 50 and 70 hours is (given $\phi(1.33)=0.9082$, $\phi(0)=0.5$)? [July 2021]

- (A) -0.4082
- (B) 0.5
- (C) 0.4082
- (D) -0.5



102. The average number of advertisements per page appearing in a newspaper is 3. What is the probability that in a particular page zero number of advertisements are there?

- (A) e^{-3}
- (B) e^0
- (C) e^{+3}
- (D) e^{-1}

[Dec. 2021]



103. Four unbiased coins are tossed simultaneously. The expected number of heads is: [Dec. 2021]

- (A) 1
- (B) 2
- (C) 3
- (D) 4



104. If, for a Poisson distributed random variable X, the probability for X taking value 2 is 3 times the probability for X taking value 4, then the variance of X is [Dec. 2021]

- (A) 4
- (B) 3
- (C) 2
- (D) 5




ANSWER KEY


1.	B	2.	D	3.	B	4.	D	5.	A
6.	C	7.	C	8.	D	9.	B	10.	C
11.	C	12.	C	13.	C	14.	B	15.	C
16.	B	17.	C	18.	C	19.	B	20.	C
21.	D	22.	D	23.	B	24.	C	25.	D
26.	A	27.	C	28.	B	29.	C	30.	C
31.	A	32.	C	33.	D	34.	D	35.	B
36.	C	37.	C	38.	C	39.	C	40.	C
41.	A	42.	A	43.	B	44.	B	45.	C
46.	A	47.	C	48.	B	49.	C	50.	C
51.	C	52.	A	53.	C	54.	A	55.	D
56.	A	57.	C	58.	B	59.	B	60.	B
61.	D	62.	C	63.	C	64.	C	65.	B
66.	C	67.	C	68.	C	69.	C	70.	D
71.	B	72.	C	73.	A	74.	D	75.	D
76.	B	77.	D	78.	B	79.	A	80.	A
81.	B	82.	B	83.	C	84.	A	85.	A
86.	A	87.	A	88.	A	89.	B	90.	A
91.	D	92.	B	93.	C	94.	A	95.	A
96.	A	97.	C	98.	B	99.	A	100.	C
101.	C	102.	A	103.	B	104.	C		


COMPILATION OF PAST YEAR QUESTIONS


(This is Vidhyoday's unique compilation of past attempts CA-F/CPT questions asked under Maths/Stats section.)


CHAPTER – 13 CORRELATION


1. If $r_{xy} = 0$ then x and y are
 (A) Dependent 
 (B) Independent
 (C) Not Necessarily Dependent
 (D) Necessarily Independent


2. If $\text{Var}_x = 625$; $r = 0.64$, $\text{cov}(x,y) = 256$, Var_y is
 (A) 4
 (B) 16 
 (C) 64
 (D) 256


3. Probable Error in correlation is
 (A) $0.675 \frac{1-r^2}{\sqrt{n}}$
 (B) $0.675 \frac{r^2}{\sqrt{n}}$
 (C) $0.675 \times \frac{n^2}{1-r}$ 
 (D) $0.675 \frac{n}{1-r^2}$


4. If Correlation Coefficient r between x and y is K then what is Correlation Coefficient between x and $-y/2$.
 (A) K
 (B) -K 
 (C) K/2
 (D) -K/2

5. If $r_{xy} = 0.6$, Two linear equation are $u = 2x+1$ and $4-2y = v$ then new r_{uv} ?
 (A) 0.6
 (B) -0.6 
 (C) 0.3
 (D) -0.3

6. If the ranks in Spearman correlation coefficient are inversed then sum of different of rank will become
 (A) Reciprocal
 (B) 0 
 (C) 1
 (D) None of the above

7. When is Correlation Coefficient 'r' is negative [Dec. 2009]
 (A) If x increase y increases
 (B) If x increase y decreases 
 (C) X and y are not correlated
 (D) None of the above


8. If Spearman's Rank Correlation Coefficient is 0.6 and the sum of square of difference of rank is 66, find n? [Dec. 2009]
 (A) 7
 (B) 9 
 (C) 10
 (D) 12


9. If Correlation Coefficient is p then p^2 is [June 2010]
 (A) Coefficient of Allimation 
 (B) Coefficient of Determination
 (C) Coefficient of Non-determination
 (D) Coefficient of Variation

10. Two mad judges have ranked contestants

A	B	C	D	E
1	2	3	4	5
5	4	3	2	1

Then the value of Rank Correlation will be [Dec. 2010]

 (A) 1
 (B) -1
 (C) 0 
 (D) 0.5

11. The covariance between two variables x and y is 8.4 and their variances are 25 and 36 respectively. Calculate Karl Pearson's coefficient of correlation [June 2011]
 (A) 0.25
 (B) 0.28
 (C) 0.33 
 (D) 0.44

COMPILATION OF PAST YEAR QUESTIONS

12. Three competitors in a contest are ranked by two judges in the order 1, 2, 3 and 2, 3, 1 respectively. Calculate the Spearman's rank correlation coefficient. [June 2011]

- (A) 0.5
- (B) -0.5
- (C) 1
- (D) -1



13. Covariance of two variables x and y is 25 and $V(x) = 36$ and $V(y) = 25$ then r is

- (A) 0.83
- (B) 0.80
- (C) 0.75
- (D) 0.90



14. In Spearman's rank correlation coefficient the sum of difference of ranks between variables shall be [Dec. 2012]

- (A) Positive
- (B) Negative
- (C) 0
- (D) 1



15. If the coefficient of correlation between x and y series is -0.38. The linear relations between x and u and y and v are $3x+5u = 3$ and $-8y-7v = 44$ respectively. Then the coefficient of correlation between u and v is:

[Dec. 2012]

- (A) -0.38
- (B) 0.38
- (C) 0.19
- (D) -0.19



16. Two variables x and y are related as $4x+3y = 7$ then correlation between x and y is _____. [June 2013]

- (A) 0
- (B) 1
- (C) -1
- (D) $\frac{3}{4}$



17. If $r = 0.28$, $Cov(x,y) = 7.6$ $V(x) = 9$ then $\sigma_y =$ [June 2013]

- (A) 8.57
- (B) 9.04
- (C) 10.53
- (D) 11.22



18. Price and Demand us example for

[Dec. 2013]

- (A) Negative Correlation
- (B) Positive Correlation
- (C) No Correlation
- (D) Perfectly Negative Correlation



19. Determine the coefficient of correlation between x and y series

	X Series	Y Series
Number of items	15	15
Arithmetic mean	25	18
Sum of Square of deviation of mean	136	138

Sum of product deviation of x and y series from mean = 122 [Dec. 2013]

- (A) 0.66
- (B) 0.57
- (C) 0.95
- (D) 0.89



20. When each individual gets the exactly opposite rank by the two judges, then the rank correlation will be [June 2014]

- (A) Negative
- (B) Perfectly Negative
- (C) No Correlation
- (D) Positive Correlation



21. Correlation coefficient between x and y is 1, then correlation coefficient between $x-2$ and $y/2$ is [Dec. 2014]

- (A) -1
- (B) 0
- (C) 1
- (D) Can't be determined



COMPILATION OF PAST YEAR QUESTIONS

22. When $r = 1$, all the points in a scatter diagram would lie
- (A) On line from bottom left to top right
 - (B) On line from bottom right to top left
 - (C) Around the line from bottom left to top right
 - (D) Around the line from bottom right to top left



23. In case of "Insurance Companies, profits and the number of claims they have to pay" has
- (A) Positive Correlation [Dec. 2015]
 - (B) Negative Correlation
 - (C) No Correlation
 - (D) None of these



24. If $r = 0.6$ then the coefficient of non-determination is _____.
- (A) 0.36 [June, 2016 & Dec. 2017]
 - (B) 0.64
 - (C) -0.6
 - (D) 0.6



25. If the coefficient of correlation between x and y variable is -0.90 then what will be the coefficient of determination [June 2016]
- (A) 0.9
 - (B) -0.9
 - (C) 0.19
 - (D) 0.81



26. If the sum of the squares of rank differences in the marks of 10 students in two subjects is 44, then the coefficient of rank correlation is _____.
- (A) -0.65
 - (B) -0.73
 - (C) 0.73
 - (D) 0.65



27. Correlation between temperature and power consumption is [June 2017]
- (A) Positive
 - (B) Negative
 - (C) No Correlation
 - (D) Perfectly Negative



28. Coefficient of correlation between x and y is 0.6. If both x and y are multiplied by -1 . Then resultant coefficient of correlation is
- (A) -0.6
 - (B) 0.6
 - (C) 0.7
 - (D) -0.7



29. If there is a constant increase in the series then the obtained graph is [Dec. 2017]
- (A) Convex
 - (B) Concave
 - (C) Parabola
 - (D) Straight line from left to right



30. Ranks of two characteristics by two judges are in reverse order then find the value of Spearman rank correlation co-efficient [June 2009]
- (A) -1
 - (B) 0
 - (C) 1
 - (D) 0.75



31. If 'P' is the simple correlation coefficient, the quantity P^2 is known as [June 2010]
- (A) Coefficient of determination
 - (B) Coefficient of Non-determination
 - (C) Coefficient of alienation
 - (D) None of the above



32. If the correlation coefficient between x and y is r , then between $U = \frac{x-5}{10}$ and $V = \frac{y-7}{2}$ is

[June 2010]

- (A) r
- (B) $-r$
- (C) $\frac{(r-5)}{2}$
- (D) $\frac{(r-7)}{10}$



COMPILATION OF PAST YEAR QUESTIONS

33. Three competitors in a contest are ranked by two judges in the order 1,2,3 and 2,3,1 respectively. Calculate the Spearman's rank correlation coefficient. [June 2011]

- (A) -0.5
- (B) -0.8
- (C) 0.5
- (D) 0.8



34. If the covariance between variables X and Y is 25 and variance of X and Y are respectively 36 and 25, then the coefficient of correlation is [June 2012]

- (A) 0.409
- (B) 0.416
- (C) 0.833
- (D) 0.0277



35. The covariance between two variables is

- (A) Strictly positive [May 2018]
- (B) Strictly negative
- (C) Always Zero
- (D) Either positive or negative or zero



36. The coefficient of determination is defined by the formula

[May 2018]

- (A) $r^2 = 1 - \frac{\text{unexplained variance}}{\text{total variance}}$
- (B) $r^2 = \frac{\text{explained variance}}{\text{total variance}}$
- (C) Both (A) and (B)
- (D) None



37. In which method of Deviations, only the directions of change (Positive direction/Negative direction) in the variables are taken into account for calculation of

[May 2018]

- (A) Coefficient of SD
- (B) Coefficient of regression
- (C) Coefficient of correlation
- (D) None



38. Correlation coefficient is _____ of the units of measurement. [May 2018]

- (A) dependent
- (B) independent
- (C) both
- (D) none



39. In case speed of an automobile and the distance required to stop the car after applying brakes correlation is

[May 2018]

- (A) Positive
- (B) Negative
- (C) Zero
- (D) None



40. A relationship $r^2 = 1 - \frac{500}{300}$ is not possible

[May 2018]

- (A) True
- (B) False
- (C) Both
- (D) None



41. Rank correlation coefficient lies between [May 2018]

- (A) 0 to 1
- (B) -1 to +1 inclusive of these value
- (C) -1 to 0
- (D) Both



42. Given that

X	-3	-3/2	0	3/2	3
Y	9	9/4	0	9/4	9

Then Karipearson's coefficient of correlation is [June 2019]

- (A) Positive
- (B) Zero
- (C) Negative
- (D) None



COMPILATION OF PAST YEAR QUESTIONS

43. Find the probable error if $r = \frac{2}{\sqrt{10}}$ and $n = 36$ [June 2019]

- (A) 0.6745
- (B) 0.067
- (C) 0.5287
- (D) None



44. Given the following series:

X	10	13	12	15	8	15
Y	12	16	18	16	7	18

The rank correlation coefficient $r =$ [June 2019]

(A) $1 - \frac{6 \sum d^2 + \sum_{i=1}^2 \frac{m_i(m_i^2 - 1)}{12}}{n(n^2 - 1)}$

(B) $1 - \frac{6 \left[\sum d^2 + \sum_{i=1}^2 \frac{m_i(m_i^2 - 1)}{12} \right]}{n(n^2 - 1)}$

(C) $1 - \frac{6 \sum d^2 + \sum_{i=1}^2 \frac{m_i(m_i^2 - 1)}{12}}{n(n^2 - 1)}$

(D) $1 - \frac{6 \sum d^2 + \sum_{i=1}^3 \frac{m_i(m_i^2 - 1)}{12}}{n(n^2 - 1)}$



45. Determine Spearman's rank correlation coefficient from the given data $\sum d^2 = 30, n = 10:$ [June 2019]

- (A) $r = 0.82$
- (B) $r = 0.32$
- (C) $r = 0.40$
- (D) None of the above



46. Find the coefficient of correlation.

$$2x + 3y = 2$$

$$4x + 3y = 4$$

[Nov.2019]

- (A) -0.71
- (B) 0.71
- (C) -0.5
- (D) 0.5



47. What is the coefficient of correlation from the following data?

x	1	2	3	4	5
y	5	4	3	2	6

[Nov. 2019]

- (A) 0
- (B) -0.75
- (C) -0.85
- (D) 0.82



48. If the plotted points in a scatter diagram lie from upper left to lower right, then correlation is [Nov. 2019]

- (A) Positive
- (B) Negative
- (C) Zero
- (D) None of these



49. Which of the following is spurious correlation? [Nov. 2020]

- (A) Correlation between two variables having no casual relationship
- (B) Negative correlation
- (C) Bad relation between two variables
- (D) Very low correlation between two variables



50. Scatter diagram does not help us to?

[Nov. 2020]

- (A) Find the type of correlation
- (B) Identify whether variables correlated or not
- (C) Determine the linear or non-linear correlation
- (D) Find the numerical value of correlation coefficient



51. The covariance between two variables is [Nov. 2020]

- (A) Strictly positive
- (B) Strictly negative
- (C) Always Zero
- (D) Either positive or negative or zero



COMPILATION OF PAST YEAR QUESTIONS

52. For the set of observation $\{(1, 2), (2, 5), (3, 7), (4, 8), (5, 10)\}$ the value of karl-person's coefficient of correlation is approximately given by **[Jan. 2021]**

- (A) 0.755
- (B) 0.655
- (C) 0.525
- (D) 0.985



53. The straight-line graph of the linear equation $y = a + b x$, slope is horizontal if: **[July 2021]**

- (A) $b = 1$
- (B) $b \neq 0$
- (C) $b = 0$
- (D) $a = b \neq 0$



54. If the data points of (X, Y) series on a scatter diagram lie along a straight line that goes downwards as X-values move from left to right, then the data exhibit..... correlation. **[Dec. 2021]**

- (A) Direct
- (B) Imperfect indirect
- (C) Indirect
- (D) Imperfect direct




ANSWER KEY


1.	D	2.	D	3.	A	4.	B	5.	B
6.	B	7.	B	8.	C	9.	B	10.	B
11.	B	12.	B	13.	A	14.	C	15.	A
16.	C	17.	B	18.	A	19.	D	20.	B
21.	C	22.	A	23.	B	24.	B	25.	D
26.	C	27.	A	28.	B	29.	D	30.	A
31.	A	32.	A	33.	A	34.	C	35.	D
36.	C	37.	C	38.	B	39.	A	40.	A
41.	B	42.	B	43.	B	44.	B	45.	A
46.	A	47.	A	48.	B	49.	A	50.	D
51.	D	52.	D	53.	C	54.	C		


COMPILATION OF PAST YEAR QUESTIONS


(This is Vidhyoday's unique compilation of past attempts CA-F/CPT questions asked under Maths/Stats section.)


CHAPTER – 14 REGRESSION


1. If the two regression equations are $Y = 4x$ and $16x = y$ find correlation coefficient 'r'.
 - (A) $\frac{1}{4}$
 - (B) $\frac{-1}{4}$
 - (C) $\frac{1}{2}$
 - (D) $\frac{-1}{2}$


2. Regression coefficient of x on y is m, $u = x-4$, $v = y-4$ then $b_{uv} =$
 - (A) m
 - (B) $\frac{1}{m}$
 - (C) -m
 - (D) $\frac{-1}{m}$


3. If variance of x is 9 & $3x+2y = 10$, $4x+10y = 20$ then r is
 - (A) 0.5163
 - (B) -0.5163
 - (C) -0.33
 - (D) 0.33


4. If two regression lines are (a) $2x+y = 9$ (b) $-x-y = 0$ and $\bar{x} = 9$, $\bar{y} = ?$
 - (A) -9
 - (B) 9
 - (C) 10
 - (D) -8


5. If $b_{xy} = -1/8$, $r = -\frac{1}{2}$, $b_{yx} = ?$ [June 2009]
 - (A) 2
 - (B) 4
 - (C) -2
 - (D) -4

6. Find \bar{x} and \bar{y} if two regression lines are $2x+7y = 43$, $3x+5y = 4$
 - (A) (-11, 17)
 - (B) (11, -17)
 - (C) (-17, 11)
 - (D) (17, -11)

7. If two regression equation are (i) $7x-3y-18 = 0$ (ii) $4x-y-11 = 0$ find regression equation of y on x
 - (A) $7x-3y-18 = 0$ [Dec. 2009]
 - (B) $4x-y-11 = 0$
 - (C) Either (A) or (B)
 - (D) Not possible

8. _____ of Regression Coefficient is greater than Correlation Coefficient
 - (A) GM [June 2010]
 - (B) AM
 - (C) HM
 - (D) SD

9. If (i) $x+2y-8 = 0$ (ii) $2x+3y-8 = 0$ are two regression equations then, which is y on x: [Dec. 2010]
 - (A) $2x+3y-8 = 0$
 - (B) $x+2y - 8 = 0$
 - (C) Either (A) or (B)
 - (D) Neither (A) nor (B)

10. Regression coefficients are [Dec. 2010]
 - (A) Independent of origin but depends on scale.
 - (B) Independent of scale but depends on origin.
 - (C) Depends on both origin and scale.
 - (D) Independent of both origin and scale.

COMPILATION OF PAST YEAR QUESTIONS

11. If $\bar{x} = 16$, $\sigma_x = 4.8$ and $\bar{y} = 20$, $\sigma_y = 9.6$. Find regression coefficient of x on y if $r = 0.6$
[Dec. 2010]

- (A) 1.2
- (B) 0.3
- (C) 0.25
- (D) 0.50



12. For a bivariate data, two lines of regression are $40x-18y-214 = 0$ and $8x-10y+66 = 0$ then find the values of \bar{x} and \bar{y} .

[June 2011& 12]

- (A) (17, 13)
- (B) (-17, 13)
- (C) (17, -13)
- (D) (13, 17)



13. For a bivariate data, the lines of regression of y and x, and x on y are respectively $2.5y-x = 35$ and $10x-y = 70$, then the correlation coefficient r is equal to:
[Dec. 2011]

- (A) 0.33
- (B) 0.25
- (C) 0.20
- (D) 0.40



14. If one of regression coefficient is _____ unit, the other must be _____ unity.

[Dec. 2011]

- (A) More than, more than
- (B) Less than, less than
- (C) More than, less than
- (D) None of these



15. If y is dependent variable and x is independent variable and the S.D. of x and y are 5 and 8 respectively and Co-efficient of correlation between x and y is 0.8. Find the Regression coefficient of y on x.

[Dec. 2011]

- (A) 0.5
- (B) 1.28
- (C) 0.65
- (D) 1.45



16. If \bar{x} and \bar{y} are the A.M's, σ_x and σ_y are the S.D's, b_{yx} , b_{xy} are regression coefficient of variables \bar{x} and \bar{y} respectively. The point of intersection of regression lines x on y and y on x is _____
[June 2012]

- (A) (σ_x, σ_y)
- (B) (b_{yx}, b_{xy})
- (C) (\bar{x}, \bar{y})
- (D) None of these



17. The coefficient of correlation between two variables x and y is the simple _____ of the regression coefficients.

- (A) AM
- (B) GM
- (C) HM
- (D) Median

[June 2012]



18. If two variables are uncorrelated then regression line are _____ to each other

- (A) Parallel
- (B) Coincident
- (C) Perpendicular
- (D) Either (A) or (B)

[June 2012]



19. If $y = 18x+5$ is the regression line of x on y then the value of b_{xy} is _____

[Dec. 2012]

- (A) $\frac{5}{18}$
- (B) $\frac{1}{18}$
- (C) $-\frac{5}{18}$
- (D) $-\frac{1}{18}$



20. For certain x and y series which are correlated, the two lines of regression are $5x-6y+9 = 0$, $15x-8y+130 = 0$. The correlation coefficient is:
[Dec. 2012]

- (A) $\frac{2}{3}$
- (B) $-\frac{2}{3}$
- (C) $-\frac{1}{3}$
- (D) $\frac{1}{3}$



COMPILATION OF PAST YEAR QUESTIONS

21. If r is the Karl Pearson's coefficient of correlation in a bivariate distribution, the two regression lines are at right angles when _____
[June 2013]

- (A) $r = 1$
- (B) $r = -1$
- (C) $r = 0$
- (D) $r = \pm 1$



22. If $r = +1$ or -1 then the two regression lines [Dec. 2013]

- (A) Perpendicular
- (B) Parallel
- (C) Coincident
- (D) Overlapping



23. If mean of x and y is 20 and 40 respectively and the regression coefficient y on x is 1.608 then the regression line of y on x is:
[Dec. 2013]

- (A) $y = 1.608 + 7.84x$
- (B) $y = 7.84 + 1.608x$
- (C) $x = 1.608 + 7.84x$
- (D) $x = 7.84 + 1.608y$



24. The equation for two lines of regression for x and y are $5x = 22+y$ and $64x = 24+45y$, then the value of regression coefficient of y on x will be [June 2016]

- (A) $\frac{22}{5}$
- (B) $\frac{45}{64}$
- (C) $\frac{5}{22}$
- (D) $\frac{64}{45}$



25. Two regression lines for bivariate data re $2x-5y+6 = 0$ and $5x-4y+3 = 0$. Then the coefficient of correlation shall be _____

- (A) $\frac{-2\sqrt{2}}{5}$
- (B) $\frac{2\sqrt{2}}{5}$
- (C) $\frac{5}{2\sqrt{2}}$
- (D) $\frac{-5}{2\sqrt{2}}$

[June 2014]



26. If the mean of two variables x and y are 3 and 1 respectively. Then the equation of two regression lines are _____

[June 2014]

- (A) $5x-2y+22 = 0$ & $6x+2y-20 = 0$
- (B) $5x+2y-22 = 0$ & $6x-2y+20 = 0$
- (C) $5x+2y-22 = 0$ & $6x+2y-20 = 0$
- (D) None of these



27. Which of the following is true ?

[Dec. 2015]

- (A) $b_{xy} = r \cdot s_y/s_x$
- (B) $b_{yx} = r \cdot s_y/s_x$
- (C) $b_{yx} = \frac{\sum xy}{s_x}$
- (D) $b_{xy} = \frac{\sum xy}{s_x}$



28. The regression are as follows:

Regression equation of x on y : $5x-y = 22$

Regression equation of y on x : $64x-45y = 24$

What will be the mean of x and y ?

[June 2014]

- (A) (6, 8)
- (B) (8, 6)
- (C) (-6, -8)
- (D) (8, -6)



29. The two lines of regression become identical when

[June 2016]

- (A) $r = 1$
- (B) $r = -1$
- (C) $r = 0$
- (D) (A) or (B)



30. Regression lines pass through the _____

- (A) AM
- (B) GM
- (C) HM
- (D) Mode



COMPILATION OF PAST YEAR QUESTIONS

31. If the regression line of x on y is $3x+2y = 100$, then find the value of $b_{xy} = ?$

- (A) $\frac{2}{3}$ [Dec. 2016]
- (B) $\frac{-2}{3}$
- (C) $\frac{3}{2}$
- (D) $\frac{-3}{2}$



32. $5y = 9x-22$ and $20x = 9y+350$ are two regression lines. Find the correlation coefficient between x and y . [Dec. 2017]

- (A) 0.45
- (B) 0.80
- (C) 0.90
- (D) 1



33. The two regression equations are:

$$2x + 3y + 18 = 0$$

$$x + 2y - 25 = 0$$

Find the value of y if $x = 9$ [June 2009]

- (A) -8
- (B) 8
- (C) -12
- (D) 0



34. Which of the following regression equations represent regression line of Y on X : $7x + 2y + 15 = 0$, $2x + 5y + 10 = 0$

[Dec. 2009]

- (A) $7x + 2y + 15 = 0$
- (B) $2x + 5y + 10 = 0$
- (C) Both (A) and (B)
- (D) None of these



35. If the two lines of regression are $x + 2y - 5 = 0$ and $2x + 3y - 8 = 0$

The regression line of y on x is

[June 2010]

- (A) $x + 2y - 5 = 0$
- (B) $2x + 3y - 8 = 0$
- (C) Any of the two line
- (D) None of the two lines



36.

Out of the following which one affects the regression co-efficient. [Dec. 2011]

- (A) Change of Origin Only
- (B) Change of scale Only
- (C) Change of scale & origin both
- (D) Neither Change of origin nor change of scale



37. If the regression equations are $8x - 3y + 50 = 0$ and $14x - 7y - 60 = 0$ and standard deviation of y is 1. The coefficient of correlation is = _____

- (A) 2 [June 2013]
- (B) 1
- (C) 0.87
- (D) -0.87



38. Two regression lines are

$$16x - 20y + 132 = 0$$

$$80x - 36y - 428 = 0$$

The value of the correlation coefficient is [June 2015]

- (A) 0.6
- (B) -0.6
- (C) 0.54
- (D) 0.45



39. The points from which the two regression lines passes through

[Dec. 2016]

- (A) Represent means
- (B) Represent S.Ds
- (C) (A) and (B)
- (D) None of these



40. If two regression lines are $x + y = 1$ and $x - y = 1$ then mean values of x and y will be:

[June 2017]

- (A) 0 and 1
- (B) 1 and 1
- (C) 1 and 0
- (D) -1 and -1



COMPILATION OF PAST YEAR QUESTIONS

41. A.M. of regression coefficients is
 (A) Equal to r [June 2019]
 (B) Greater than or equal to r
 (C) Half of r
 (D) None
42. If the regression line of y on x is given by $y = x + 2$ and Karl Pearson's coefficient of correlation is 0.5 then $\frac{\sigma_y^2}{\sigma_x^2} = \underline{\hspace{2cm}}$.
 (A) 3 [June 2019]
 (B) 2
 (C) 4
 (D) None
43. If two line of regression are $x + 2y - 5 = 0$ and $2x + 3y - 8 = 0$, then $x + 2y - 5 = 0$ is
 (A) y on x [Nov. 2019]
 (B) x on y
 (C) both
 (D) None
44. The interesting point of the two regression lines: y on x and x on y is [Jan. 2021]
 (A) $(0, 0)$
 (B) (\bar{x}, \bar{y})
 (C) (b_{yx}, b_{xy})
 (D) $(1, 1)$
45. Given that the variance of x is equal to the square of standard deviation σ_y and the regression line of y on x is $y = 40 + 0.5(x - 30)$. Then regression line of x on y is
 (A) $y = 40 + 4(x - 30)$ [Jan. 2021]
 (B) $y = 40 + (x - 30)$
 (C) $y = 40 + 2(x - 30)$
 (D) $x = 30 + 2(x - 40)$
46. If $y = 9x$ and $x = 0.01y$ then r is equal to:
 (A) $-0.$ 1 [July 2021]
 (B) 0.1
 (C) $+0.3$
 (D) -0.3

47. If $b_{yx} = -1.6$ and $b_{xy} = -0.4$, then r_{xy} will be:
 (A) 0.4 [July 2021]
 (B) -0.8
 (C) 0.64
 (D) 0.8
48. If the slope of the regression line is calculated to be 5.5 and the intercept 15 then the value of Y and X is 6 is:
 (A) 88 [July 2021]
 (B) 48
 (C) 18
 (D) 78
49. The sum of square of any real positive quantities and its reciprocal is never less than:
 (A) 4 [July 20021]
 (B) 2
 (C) 3
 (D) 4.
50. For any two variables x and y the regression equations are given as $2x + 5y - 9 = 0$ and $3x - y - 5 = 0$. What are the A.M. of x and y ?
 (A) 2, 1 [Dec. 2021]
 (B) 1, 2
 (C) 4, 2
 (D) 2, 4
51. The intersecting point of two regression lines falls at X -axis. If the mean of X -values is 16, the standard deviations of X and Y are respectively, 3 and 4, then the mean of Y -values is [Dec. 2021]
 (A) $\frac{16}{3}$
 (B) 4
 (C) 0
 (D) 1
52. The regression coefficients remain unchanged due to [Dec. 2021]
 (A) Shift of origin
 (B) Shift of scale
 (C) Always
 (D) Never

COMPILATION OF PAST YEAR QUESTIONS

ANSWER KEY

1.	C	2.	A	3.	B	4.	A	5.	C
6.	C	7.	A	8.	B	9.	B	10.	A
11.	B	12.	D	13.	C	14.	C	15.	B
16.	C	17.	B	18.	C	19.	B	20.	A
21.	C	22.	C	23.	B	24.	D	25.	B
26.	D	27.	B	28.	A	29.	D	30.	A
31.	B	32.	C	33.	B	34.	B	35.	C
36.	B	37.	C	38.	A	39.	A	40.	C
41.	B	42.	C	43.	A	44.	B	45.	D
46.	C	47.	B	48.	B	49.	B	50.	A
51.	C	52.	A						

COMPILATION OF PAST YEAR QUESTIONS

(This is Vidhyoday's unique compilation of past attempts CA-F/CPT questions asked under Maths/Stats section.)

CHAPTER – 15 INDEX NUMBER

1. If in 2005 the prices are 2.78% more than that in 1998 then price index number is
- (A) 97.22
(B) 102.78
(C) 2.78
(D) 202.78



2. If the value increases by 20% then index numbers is [Dec. 2011]
- (A) 20
(B) 120
(C) 125
(D) 80



3. Time reversed test in satisfied by
- (A) Laspreye's Index
(B) Passche's Index
(C) Bowley's Index
(D) Fishers's Index



4. Find Aggregate Price Index

Yr	P_1	P_0
1	10	5
2	10	5
3	20	15

- (A) 150
(B) 155
(C) 165
(D) 160



5. If the price of commodity increases by 20% and Wage increases by 40% then change in real wages is
- (A) 20%
(B) 16.66%
(C) 25%
(D) 10%



6. Circular Test is [June 2014]
- (A) $P_{01} \times P_{10} = 1$
(B) $P_{01} \times Q_{01} = V_{01}$
(C) $P_{01} \times P_{12} \times P_{20} = 1$
(D) None of the above



7. If the salary of worker increase from 100 to 200 and price index increase from 300 to 500 then find the real wage.
- (A) 133.33
(B) 125
(C) 120
(D) 110



8. Which test is not satisfied by Fisher Ideal index no?
[June 2009, Dec. 2011 & May 2017]
- (A) Unit Test
(B) Factor Reversal Test
(C) Time Reversal Test
(D) Circular Test



9. Which mathematical average did Fisher take for Laspayre's Paasche's index number? [June 2014]
- (A) GM
(B) HM
(C) AM
(D) None of these



10. $\Sigma p_1 q_1 / \Sigma p_0 q_0$ refers to which test? [June 2009]
- (A) Circular Test
(B) Factor Reversal Test
(C) Time Reversal Test
(D) None of these



11. Paasche's index numbers consider which year quantity as weight? [June 2009]
- (A) Base Year
(B) Current Year
(C) Either Base or Current Year
(D) Neither Base nor Current Year



COMPILATION OF PAST YEAR QUESTIONS

12. Time Reversal Test and Factor Reversal Test is satisfied by which number

[Dec. 2009, May 2018]

- (A) Laspayre's Index
- (B) Paasche's Index
- (C) Bowley's Index
- (D) Fisher Index



13. The price index number of Bowley is 150. If the price index number of Laspayre's is 180, calculate Paasche's price index

[June 2010& 13]

- (A) 120
- (B) 133
- (C) 125
- (D) None of these



14. Consumer price index number is also known as

[June 2010]

- (A) Cost of living Index
- (B) Bowley's Index
- (C) Fisher's Index
- (D) None of these



15. Base year Current year

1970		1975	
1	q_0	1	q_1
1	6	3	5
3	5	8	5
4	8	10	6

Calculate Paasche's index no.

- (A) 198.9
- (B) 261.36
- (C) 209.5
- (D) 236.5

[June 2010& 12]



16. If Laspayre's index is 90 and Paasche's index is 160 then Fisher index is

- (A) 125
- (B) 120
- (C) 110
- (D) None of these

[Dec. 2010]



17. Wholesale Price Index (WPI) is given by

- (A) L
- (B) P
- (C) F
- (D) B

[June 2011]



18. Fisher's ideal index is obtained by:

- (A) AM of L & P
- (B) HM of L & P
- (C) GM of L & P
- (D) Reciprocals of L and P

[June 2009& 11]



19. The index number of prices at a place in the year 2008 is 225 with 2004 as the base year then there is:

[June 2011]

- (A) 225% Increase
- (B) 125% Increase
- (C) 75% Decrease
- (D) 100% Increase



20. The simple index number for the Current year using simple aggregative method for the following data is

[Nov. 2011]

Commodity	Base Year	Current Year
Base	Price	Price
Wheat	80	100
Rice	100	150
Gram	120	250
Pulses	200	300

- (A) 150
- (B) 175
- (C) 160
- (D) 130



21. Calculate the cost of living index number for the year 1975 is

[June 2012]

Commodity	1970		1975	
	Price	Qty.	Price	Qty.
A	1	6	3	5
B	3	5	8	5
C	4	8	10	6

- (A) 260.37
- (B) 245.23
- (C) 210.54
- (D) 273.96



COMPILATION OF PAST YEAR QUESTIONS

22. If Fisher index number is 150, and Paasche's index number is 144 then Laspayre's index number is [Dec. 2012]

- (A) 156
- (B) 156.25
- (C) 155.50
- (D) 158.75



23. Net monthly salary of an employee was Rs. 3000. The consumer price index in 1985 is 250 with 1980 as base year. If he has to be rightly compensated, then additional Dearness Allowance to be paid to the employee is _____.

[Dec. 2012]

- (A) 4000
- (B) 3000
- (C) 4500
- (D) 5000



24. Time Reversal Test is satisfied by which of the following? [Dec. 2016]

- (A) Laspayre's
- (B) Paasche
- (C) Bowley
- (D) Fisher



25. In 2005 price index is 286 with base 1995 then how much price increased in 2005 with base 1995? [June 2013]

- (A) 286
- (B) 86
- (C) 186
- (D) 180



26. What is the formula for calculating the Deflated Value is

[Dec. 2013]

- (A) $\frac{\text{Current Year Index} \times \text{Current Year Value}}{\text{Base Year Index}}$
- (B) $\frac{\text{Current Year Value}}{\text{Current Year Index}} \times 100$
- (C) $\frac{\text{Current Year Index}}{\text{Current Year Value}} \times 100$
- (D) None of these



27. The index number for the year 2012 taking 2011 as base using simple average of price relatives method from the data below is:

Commodity	A	B	C	D	E
Price in 2011	115	108	95	80	90
Price in 2012	125	117	108	95	95

- (A) 107.7
- (B) 110.9
- (C) 113.6
- (D) 122.5



28. Which of the following statements is true? [June 2014]

- (A) Paasche's index number is based on base year quantity
- (B) Fisher's index satisfies the circular test
- (C) Arithmetic mean is the most appropriate average for constructing the index number
- (D) Splicing mean constructing one continuous series from two different indices on the basis of common base



29. Monthly salary of an employee was Rs. 10,000 in the year 2000 and it was increased to Rs. 20,000 in the year 2013 while the consumer price index number is 240 in year 2013 with the base year 2000, what should be his salary in comparison of consumer price index in the year 2013?

- (A) 14000 [June 2014]
- (B) 20000
- (C) 24000
- (D) None of these



30. $\Sigma p_n q_0 = 1180$, $\Sigma p_0 q_0 = 1170$, $\Sigma p_n q_n = 1064$, $\Sigma p_0 q_n = 1100$ then Fisher ideal index number is

[Dec. 2014]

- (A) 101.25
- (B) 100.59
- (C) 99.33
- (D) 98.76



COMPILATION OF PAST YEAR QUESTIONS

31. When the prices are decreased by 30% then the index number is now

[Dec. 2014]

- (A) 130
- (B) 70
- (C) 30
- (D) 170



32. Factor reversal test is

[Dec. 2016]

- (A) $P_{01} \times P_{10} = 1$
- (B) $P_{01} \times P_{12} \times P_{20} = 1$
- (C) $P_{01} \times Q_{01} = V_{01}$
- (D) $\frac{P_{10}}{P_{01}} = 1$



33. If with a rise of 10% in prices the wages are increased by 20%, the real wage increases by

[June 2015]

- (A) More than 10%
- (B) Equal to 10%
- (C) Less than 10%
- (D) Indeterminate



34. Consumer price index number for the year 1957 was 313 with 1940 as the base year. The average monthly wages in 1957 of the workers in the factory be Rs. 160/- their real wages is

[Dec. 2013]

- (A) 51.11
- (B) 59.5
- (C) 198.7
- (D) 195.6



35. If $\sum p_0 q_0 = 1360$, $\sum p_n q_0 = 1900$, $\sum p_0 q_0 = 1880$ then the Laspayre's index number is

[June 2016]

- (A) 71.57
- (B) 139.70
- (C) 152.4
- (D) 89.6



36. Index number are used in

[Dec. 2016]

- (A) Economic
- (B) Statistics
- (C) Both (A) and (B)
- (D) Neither (A) nor (B)



37. The monthly income of a person in the year 2014 was Rs. 8,000 and CPI was 160. The CPI is 200 in the year 2017. What will be the additional dearness allowance for the year 2017.

[June 2017]

- (A) 2400
- (B) 2750
- (C) 2500
- (D) None of these



38. For knowing consumer price index number we want to collect data from

[Dec. 2017]

- (A) Retail shop prices
- (B) Wholesale shop prices
- (C) Fair prices
- (D) Government depots



39. The circular test is an extension

[Dec. 2017]

- (A) Unit Test
- (B) Factor Reversal Test
- (C) Time Reversal Test
- (D) None of these



40. In Laspeyre's Index Number _____ are used as weights?

[Dec. 2009]

- (A) Base year price
- (B) Current year price
- (C) Base year quantities
- (D) Current year quantities



41. If $\sum P_0 Q_0 = 116$, $\sum P_0 Q_1 = 140$

$$\sum P_1 Q_0 = 97, \sum P_1 Q_1 = 117$$

then Fisher's ideal index number is ____.

[June 2012]

- (A) 184
- (B) 83.59
- (C) 119.66
- (D) 120



COMPILATION OF PAST YEAR QUESTIONS

42. Find the Paasche's Index number for prices from the following data taking 1970 as the base year. [June 2012]

Commodity	1970		1975	
	Price	Commodity	Price	Commodity
A	1	6	3	5
B	3	5	8	5
C	4	8	10	6

- (A) 261.36
 (B) 265.48
 (C) 274.32
 (D) 282



43. An index time series is a list of _____ number of two or more period of time, where each index number employs the same base year can [Dec. 2013]

- (A) Index
 (B) Absolute
 (C) Relative
 (D) Sample



44. _____ play a very important role in the construction of index numbers. [June 2015]

- (A) Weights
 (B) Classes
 (C) Estimations
 (D) None



45. Purchasing power of money is [June 2016]

- (A) Reciprocal of price index number
 (B) Equal to price index number
 (C) Unequal to price index number
 (D) None of these



46. In the year 2010 the monthly salary of a clerk was Rs. 24,000. The consumer price Index was 140 in the year 2010, which rises to 224 in the year 2016. If he has to be rightly compensated, what additional monthly salary should be paid to him? [June 2016]

- (A) Rs. 14,400
 (B) Rs. 38,400
 (C) Rs. 7,200
 (D) None of these



47. The suitable index number for the comparison of changes in price level of every year is _____. [June 2016]

- (A) Fixed Base Index Number
 (B) Fisher's Ideal Index Number
 (C) Chain Base Index Number
 (D) Both (A) and (C)



48. Following is the data concerning to commodities A, B, C and D in the base period 1992 and current period 1993. [Dec. 2016]

Commodities	Base Year 1992		Current Year 1993	
	Price	Quantity	Price	Quantity
A	3	18	4	15
B	5	6	5	9
C	4	20	6	26
D	1	14	3	15

The Paasche's price index number is:

- (A) 148.25
 (B) 146.41
 (C) 144.25
 (D) None of these



49. If Laspeyre's index number (L) and Paasche's index number (P) are known, then one can compute Fisher's index number (F) by: [June 2017]

- (A) $F = LP$
 (B) $\sqrt{F} = LP$
 (C) $F = \frac{1}{LP}$
 (D) $F^2 = LP$



50. Fishers index number is based on: [Dec.2017]

- (A) The arithmetic mean of Laspeyre's and Paasche's index numbers
 (B) The median of Laspeyre's and Paasche's index numbers
 (C) The mode of Laspeyre's and Paasche's index numbers
 (D) None of the above



COMPILATION OF PAST YEAR QUESTIONS

51. Price relative is equal to: [Dec.2017]

(A) $\frac{\text{Price in the given year}}{\text{Price in the base year}} \times 100$

(B) $\frac{\text{Price in the base year}}{\text{Price in the given year}} \times 100$

(C) Price in the given year $\times 100$

(D) Price in the base year $\times 100$



52. Time reversal & factor reversal are:

(A) Quantity Index [May 2018]

(B) Ideal Index

(C) Price Index

(D) Test of adequacy



53. A series of numerical figures which show the relative position is called.

[May 2018]

(A) Index number

(B) Relative number

(C) Absolute number

(D) None



54. Which is called an ideal index numbers

[June 2019]

(A) Laspeyre's index number

(B) Pasche's index number

(C) Fisher's index number

(D) Marshall Edgeworth index number



55. In semi averages method, if the number of values is odd then we drop:

[June 2019]

(A) First value

(B) Last value

(C) Middle value

(D) Middle two value



56. Which is not satisfied by Fisher's ideal index number?

[June 2019]

(A) Factor Reversal Test

(B) Time Reversal Test

(C) Circular Test

(D) None of the above



57. The cost of living index numbers in years 2015 and 2018 were 97.5 and 115 respectively. The salary of a worker in 2015 was Rs. 19500. How much additional salary was required for him in 2018 to maintain the some standard of living as in 2015?

(A) 3000

[June 2019]

(B) 4000

(C) 3500

(D) 4500



58. The index number of prices at place in the year 2008 is 225 with 2004 as the base then there is:

[Nov. 2019]

(A) 125% increase

(B) 225% increase

(C) 100% increase

(D) 25% decrease



59. Index Numbers are expressed as

(A) Squares

[Nov.2020]

(B) Ratio

(C) Percentages

(D) Combinations



60. In Laspeyre's index number is 110 and Fisher's ideal index number is 109. Then Paasche's index number is

[Nov.2020]

(A) 118

(B) 110

(C) 109

(D) 108



61. The cost of living index is always

(A) Price index number

[Jan.2021]

(B) Quantity index number

(C) Weighted index number

(D) Value index number



62. When the prices for quantities consumed of all commodities are changing in the same ratio, then the index numbers due to Laspeyre's and Paasche's will be:

[Jan.2021]

(A) Equal

(B) Unequal

(C) Reciprocal of Marshall Edge worthn Index Number

(D) Reciprocal of Fisher Index Number



COMPILATION OF PAST YEAR QUESTIONS

63. The weighted aggregative price index turnover for 2001 with 2000 as the base year using Fisher's Index Number is:

[July 2021]

Commodity	Price (In Rs.)		Quantities	
	2000	2001	2000	2001
A	10	12	20	22
B	8	8	16	18
C	5	6	10	11
D	4	4	7	8

- (A) 12.26
(B) 112.20
(C) 112.32
(D) 126.01



64. The weighted aggregative price index numbers for 2001 with 2000 as the base year using Paasche's index number is:

[July 2021]

Commodity	Price (In Rs.)		Quantities	
	2000	2001	2000	2001
A	10	12	20	22
B	8	8	16	18
C	5	6	10	11
D	4	4	7	8

- (A) 112.32
(B) 112.38
(C) 112.26
(D) 112.20



65. The weighted aggregative price index numbers for 2001 with 2000 as the base year using Marshall Edgeworth index number is:

[July 2021]

Commodity	Price in (Rs.)		Quantities	
	2000	2001	2000	2001
A	10	12	20	22
B	8	8	16	18
C	5	6	10	11
D	4	4	7	8

- (A) 112.26
(B) 112.20
(C) 112.32
(D) 112.38



66. The consumer price index goes up from 120 to 180 when salary goes up from 240 to 540, what is the increase in real terms?

[July 2021]

- (A) 80
(B) 150
(C) 360
(D) 240



67. If P_{10} and P_{01} are index for 1 on 0 and 0 on 1 respectively then formula $P_{01} \times P_{10} = 1$ is used for

[Dec. 2021]

- (A) Unit Test
(B) Time Reversal Test
(C) Factor Reversal Test
(D) Circular Test



68. The weighted averaged of price relatives of commodities, when the weights are equal to the value of commodities in the current year, yields _____ index number.

[Dec. 2021]

- (A) Fisher's ideal
(B) Laspeyres's
(C) Paasches'
(D) Marshall-Edgeworth



69. From the following data base year:

[Dec.2021]

Commodity	Base year		Current year	
	Price	Quantity	Price	Quantity
A	4	3	6	2
B	5	4	6	4
C	7	2	9	2
D	2	3	1	5

Fisher's Ideal Index is


- (A) 117.30
(B) 115.43
(C) 118.35
(D) 116.48



COMPILATION OF PAST YEAR QUESTIONS


70. Index numbers are not helpful in
[Dec.2021]

(A) Framing economics policies
(B) Revealing trend
(C) Forecasting
(D) Identifying errors



71. The three index numbers, namely, Laspeyre, Paasche and Fisher do not satisfy _____ test.
[Dec. 2021]

(A) Time reversal
(B) Factor reversal
(C) Unit
(D) Circular



ANSWER KEY

1.	B	2.	B	3.	D	4.	D	5.	B
6.	C	7.	C	8.	D	9.	A	10.	B
11.	B	12.	D	13.	A	14.	A	15.	B
16.	B	17.	A	18.	C	19.	B	20.	C
21.	A	22.	B	23.	C	24.	D	25.	C
26.	B	27.	B	28.	D	29.	C	30.	D
31.	B	32.	C	33.	C	34.	A	35.	B
36.	C	37.	D	38.	A	39.	C	40.	C
41.	B	42.	A	43.	A	44.	A	45.	A
46.	A	47.	C	48.	B	49.	D	50.	D
51.	A	52.	D	53.	A	54.	C	55.	C
56.	B	57.	C	58.	A	59.	C	60.	D
61.	C	62.	A	63.	D	64.	D	65.	A
66.	C	67.	B	68.	C	69.	A	70.	D
71.	D								